

Ques No.

Question

1 - 9677675

**JEE MAINS 12 APRIL 2019 - PAPER 1 SHIFT 1 -
MEMORY BASED - MATHS**

$$\left[-\frac{1}{3} \right] + \left[-\frac{1}{3} - \frac{1}{100} \right] + \left[-\frac{1}{3} - \frac{2}{100} \right] + \dots$$

$$\cdot + \left[-\frac{1}{3} - \frac{99}{100} \right]$$

is equal to (where $[\cdot]$ denotes greatest integer function)

(A) -132

(B) -133

(C) -134

(D) -131

CORRECT OPTION: B

**JEE MAINS 12 APRIL 2019 - PAPER 1 SHIFT 1 -
MEMORY BASED - MATHS**

$$\int \frac{2x^3 - 1}{x^4 + x} dx \text{ is equal to}$$

(A) $\ln \left| \frac{x^3 + 1}{x} \right| + c$

(B) $\left| \frac{x^3 + 1}{x^2} \right| + c$

(C) $\frac{1}{2} \ln \left| \frac{x^3 + 1}{x^2} \right| + c$

(D) $\frac{1}{2} \ln \left| \frac{x^3 + 1}{x} \right| + c$

2 - 9677676

CORRECT OPTION: A

3 - 9677677

**JEE MAINS 12 APRIL 2019 - PAPER 1 SHIFT 1 -
MEMORY BASED - MATHS**

if $\int_0^{\pi/2} \frac{\cot x}{\cot x + \operatorname{cosec} x} dx = m(\pi - n)$ then the value of mn is

(A) $-\frac{1}{2}$

(B) -1

(C) $\frac{1}{2}$

(D) 1

CORRECT OPTION: D

[© Watch Free Video Solution on Doubtnut](#)

4 - 9677678

**JEE MAINS 12 APRIL 2019 - PAPER 1 SHIFT 1 -
MEMORY BASED - MATHS**

let $p \rightarrow (\sim p \vee r)$ is false, then truth values of p, q, r are respectively.

(A) F, T, T

(B) T, F, T

(C) T, T, F

(D) F, F, T

CORRECT OPTION: C

[© Watch Free Video Solution on Doubtnut](#)

5 - 9677679

**JEE MAINS 12 APRIL 2019 - PAPER 1 SHIFT 1 -
MEMORY BASED - MATHS**

if $\vec{a} = 3\hat{i} + 2\hat{j} + 2\hat{k}$ and $\vec{b} = \hat{i} + 2\hat{j} - 2\hat{k}$ then a vector of magnitude 12, which is perpendicular to both $\vec{a} + \vec{b}$ and $\vec{a} - \vec{b}$ is

(A) $4(2\hat{i} + 2\hat{j} + \hat{k})$

(B) $4(2\hat{i} + 2\hat{j} - \hat{k})$

(C) $4(\hat{i} - 2\hat{j} - 2\hat{k})$

(D) $4(2\hat{i} + \hat{j} + 2\hat{k})$

CORRECT OPTION: B

[📺 Watch Free Video Solution on Doubtnut](#)

**JEE MAINS 12 APRIL 2019 - PAPER 1 SHIFT 1 -
MEMORY BASED - MATHS**

There are two orthogonal circles with radii 5 and 12 units, then the length of their common chord is

- (A) $\frac{60}{13}$
(B) $\frac{120}{13}$
(C) $\frac{30}{13}$
(D) $\frac{240}{3}$

CORRECT OPTION: B

[📺 Watch Free Video Solution on Doubtnut](#)

6 - 9677680

7 - 9677681

JEE MAINS 12 APRIL 2019 - PAPER 1 SHIFT 1 -

MEMORY BASED - MATHS

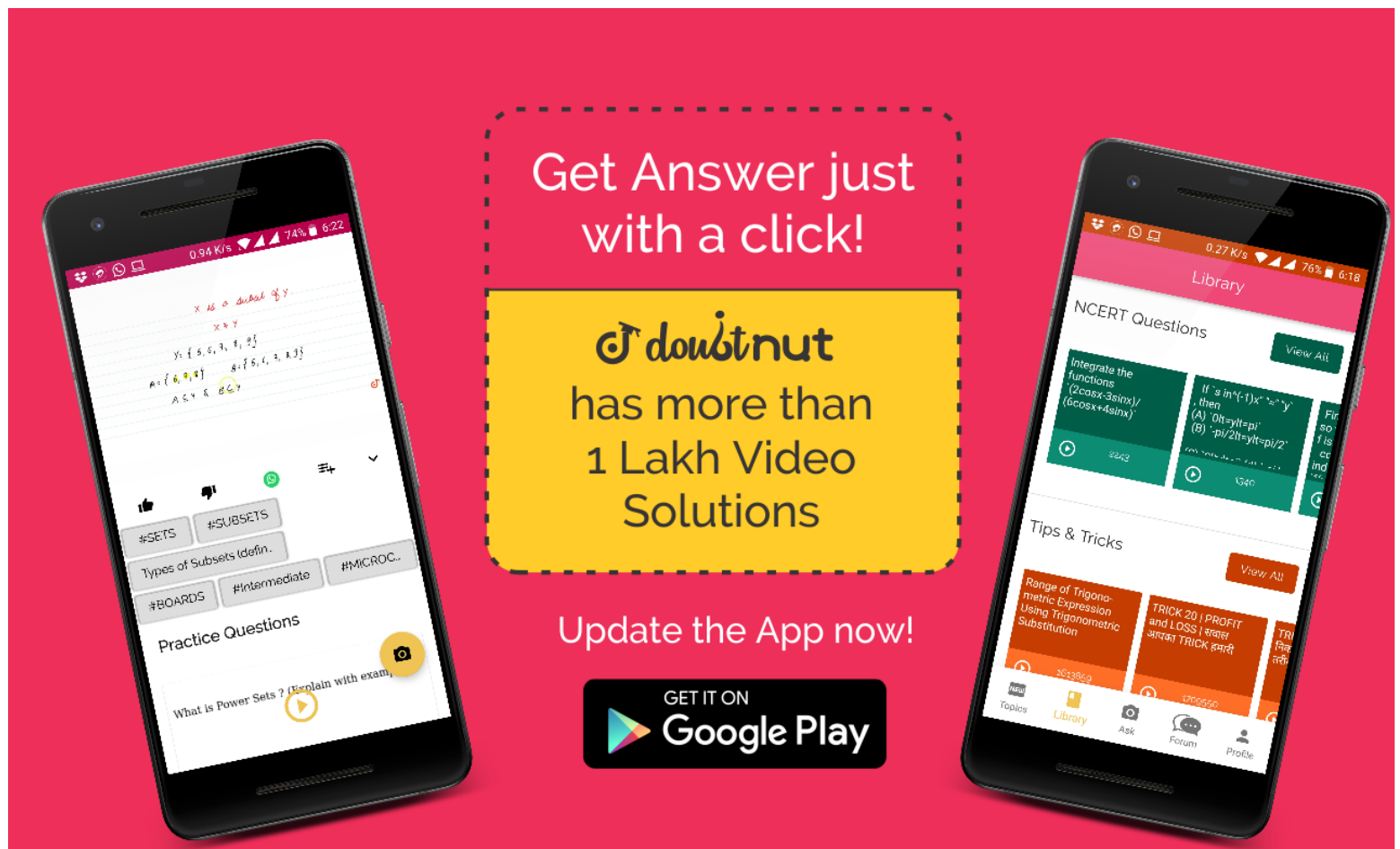
The coefficient of x^{18} in the expansion

$(1 + x)(1 - x)^{10}(1 + x + x^2)^9$ is

- (A) 84
- (B) 126
- (C) -42
- (D) 42

CORRECT OPTION: A

[© Watch Free Video Solution on Doubtnut](#)



8 - 9677682

JEE MAINS 12 APRIL 2019 - PAPER 1 SHIFT 1 - MEMORY BASED - MATHS

Find the number of solutions of the equation

$$1 + \sin^4 x = (\cos 3x)^2 \text{ in the interval } \left[\frac{-5\pi}{2}, \frac{5\pi}{2} \right]$$

- (A) 3
- (B) 4
- (C) 5
- (D) 6

CORRECT OPTION: C

**JEE MAINS 12 APRIL 2019 - PAPER 1 SHIFT 1 -
MEMORY BASED - MATHS**

if $f(x) = \tan x$, $g(x) = \sqrt{x}$, $h(x) = \frac{1 - x^2}{1 + x^2}$ and
 $\phi(x) = (h \circ (g \circ f))(x)$, then $\phi\left(\frac{\pi}{3}\right)$ is equal to

- (A) $\tan\left(\frac{5\pi}{12}\right)$
(B) $\tan\left(\frac{7\pi}{12}\right)$
(C) $\tan\left(\frac{\pi}{12}\right)$
(D) $\tan\left(\frac{11\pi}{12}\right)$

CORRECT OPTION: D

9 - 9677683

10 - 9677684

**JEE MAINS 12 APRIL 2019 - PAPER 1 SHIFT 1 -
MEMORY BASED - MATHS**

Area of the region bounded by $y^2 \leq 4x, x + y \leq 1, x \geq 0, y \geq 0$ is $a\sqrt{2} + b$ then value of $a - b$ is

- (A) 4
- (B) 6
- (C) 8
- (D) 12

CORRECT OPTION: B

[© Watch Free Video Solution on Doubtnut](#)

11 - 9677685

JEE MAINS 12 APRIL 2019 - PAPER 1 SHIFT 1 - MEMORY BASED - MATHS

in an A.P $S_4 = 16, S_6 = -48$ (where S_n denotes the sum of first n term of A.P) then S_{10} is equal to

(A) 320

(B) -320

(C) 280

(D) -280

CORRECT OPTION: B

[📺 Watch Free Video Solution on Doubtnut](#)

12 - 9677686

**JEE MAINS 12 APRIL 2019 - PAPER 1 SHIFT 1 -
MEMORY BASED - MATHS**

For an ellipse $3x^2 + 4y^2 = 12$, normal is drawn at P which is parallel to the line $2x + y = 4$. Tangent at P passes through Q(4,4) then length PQ is

(A) $5\sqrt{\frac{5}{2}}$

(B) $\frac{5\sqrt{5}}{2}$

(C) $\frac{5}{2}$

(D) $5\sqrt{5}$

CORRECT OPTION: B

[📺 Watch Free Video Solution on Doubtnut](#)

13 - 9677687

**JEE MAINS 12 APRIL 2019 - PAPER 1 SHIFT 1 -
MEMORY BASED - MATHS**

if x_1, x_2, \dots, x_{10} are 10 observations, in which mean of x_1, x_2, x_3, x_4 is 11 while mean of x_5, x_6, \dots, x_{10} is 16. also $x_1^2 + x_2^2 + \dots + x_{10}^2 = 2000$ then value of standard deviation is

(A) 1.5

(B) 3

(C) 2.5

(D) 2

CORRECT OPTION: D

[📺 Watch Free Video Solution on Doubtnut](#)

**JEE MAINS 12 APRIL 2019 - PAPER 1 SHIFT 1 -
MEMORY BASED - MATHS**

There are 31 in a bag is which 10 are identical, then then
the number of ways of choosing 10 objects from bag is

(A) 2^{20}

(B) $2^{20} - 1$

(C) $2^{20} - 1$

(D) 2^{21}

CORRECT OPTION: A

[📺 Watch Free Video Solution on Doubtnut](#)

14 - 9677688

15 - 9677689

JEE MAINS 12 APRIL 2019 - PAPER 1 SHIFT 1 -

MEMORY BASED - MATHS

if $|z - 1| = |z - i|$ then locus of z is

(A) a circle of radius 1

(B) a circle of radius $\frac{1}{2}$

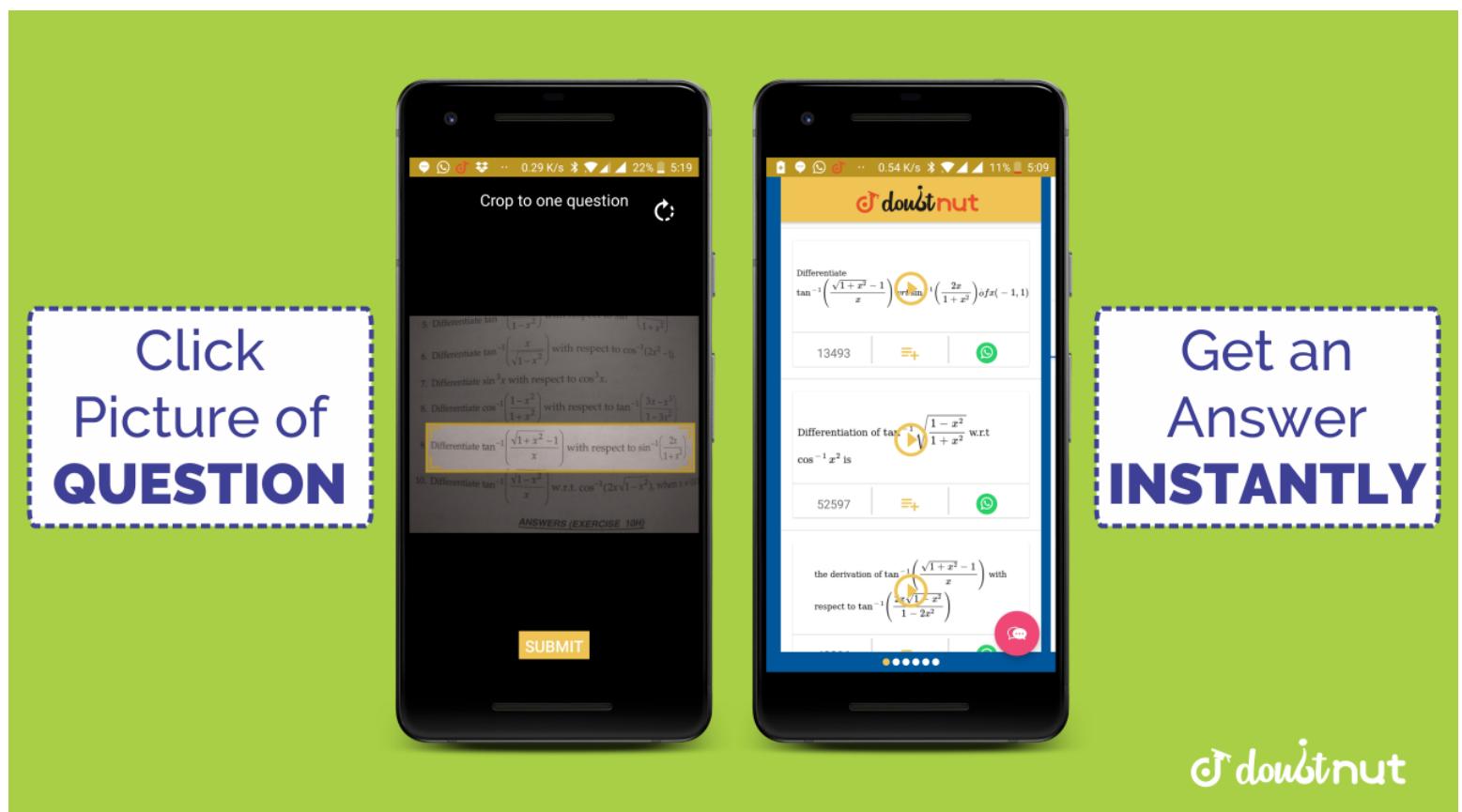
(C) A straight line passing through origin with slope 1

(D) a straight line passing through origin with slope -1

CORRECT OPTION: C


[📺 Watch Free Video Solution on DoubtNut](#)


पढ़ना हुआ आसान



Click
Picture of
QUESTION

Get an
Answer
INSTANTLY



MEMORY BASED - MATHS

Three vertices are chosen from the vertices of a regular hexagon, then the probability that they will form an equilateral triangle is

- (A) $\frac{1}{5}$
- (B) $\frac{1}{10}$
- (C) $\frac{2}{15}$
- (D) $\frac{2}{5}$

CORRECT OPTION: B

[📺 Watch Free Video Solution on Doubtnut](#)

17 - 9677692

**JEE MAINS 12 APRIL 2019 - PAPER 1 SHIFT 1 -
MEMORY BASED - MATHS**

If expected value in n Bernoulli trials is 8 and variance is 4.

If $P(X \leq 2) = \frac{k}{2^{16}}$ then value of k is

(A) 1

(B) 137

(C) 136

(D) 120

CORRECT OPTION: B

[© Watch Free Video Solution on Doubtnut](#)

18 - 9677693

**JEE MAINS 12 APRIL 2019 - PAPER 1 SHIFT 1 -
MEMORY BASED - MATHS**

$e^y + xy = e$, then orderd pair $\left(\frac{dy}{dx}, \frac{d^2y}{dx^2} \right)$ at $y = 1$, is

(A) $\left(-\frac{1}{e}, \frac{1}{e^2} \right)$

(B) $\left(\frac{1}{e}, -\frac{1}{e^2} \right)$

$$(C) \left(-\frac{1}{e}, \frac{1}{e} \right)$$

$$(D) \left(\frac{1}{e}, -\frac{1}{e} \right)$$

CORRECT OPTION: A

[📺 Watch Free Video Solution on Doubnut](#)

19 - 9677694

**JEE MAINS 12 APRIL 2019 - PAPER 1 SHIFT 1 -
MEMORY BASED - MATHS**

If α and β are the roots of the equation
 $375x^2 - 25x - 2 = 0$, then the value of

$$\lim_{n \rightarrow \infty} \left(\sum_{r=1}^n \alpha^r + \sum_{r=1}^n \beta^r \right) \text{ is}$$

$$(A) \frac{29}{348}$$

$$(B) \frac{17}{348}$$

$$(C) \frac{29}{358}$$

$$(D) \frac{11}{348}$$

CORRECT OPTION: A

[📺 Watch Free Video Solution on Doubtnut](#)

**JEE MAINS 12 APRIL 2019 - PAPER 1 SHIFT 1 -
MEMORY BASED - MATHS**

$\sin^{-1}\left(\frac{12}{13}\right) - \sin^{-1}\left(\frac{3}{5}\right)$ is equal to

(A) $\frac{\pi}{2} - \cos^{-1}\left(\frac{63}{65}\right)$

(B) $\pi - \cos^{-1}\left(\frac{33}{65}\right)$

(C) $\frac{\pi}{2} - \sin^{-1}\left(\frac{33}{65}\right)$

(D) $\frac{\pi}{2} + \sin^{-1}\left(\frac{63}{65}\right)$

20 - 9677695

CORRECT OPTION: A

[📺 Watch Free Video Solution on Doubtnut](#)

21 - 9677697

JEE MAINS 12 APRIL 2019 - PAPER 1 SHIFT 1 -

MEMORY BASED - MATHS

A ladder is $2m$ long has lower end on the ground and the other end in contact with a vertical wall. The lower end slips along the ground. If upper end is moving downward at the rate of $25cm/sec$ and when upper end of ladder is $1m$ above the ground, then the rate at which lower end of the ladder is sliding on the ground is

(A) $-\frac{25}{\sqrt{3}}$

(B) $\frac{22}{\sqrt{3}}$

(C) $-\frac{22}{\sqrt{3}}$

(D) $\frac{25}{\sqrt{3}}$

CORRECT OPTION: A

© Watch Free Video Solution on Doubtnut

**JEE MAINS 12 APRIL 2019 - PAPER 1 SHIFT 1 -
MEMORY BASED - MATHS**

Consider $f(x) = x\sqrt{kx - x^2}$ for $x \in [0, 3]$. Let m be the smallest value of k for which the function is increasing in the given interval and M be the largest value of $f(x)$ for that value of k . Then ordered pair (m, M) is

- (A) $(3, 3\sqrt{3})$
- (B) $(5, 3\sqrt{3})$
- (C) $(3, 5\sqrt{3})$
- (D) $(4, 3\sqrt{3})$

CORRECT OPTION: D

[© Watch Free Video Solution on Doubtnut](#)

Let $A + B = \begin{bmatrix} 2 & 3 \\ 5 & -1 \end{bmatrix}$, where A is a symmetric matrix and B is a skew symmetric matrix, then $A \times B$ is equal to

- (A) $\begin{bmatrix} 4 & 2 \\ 1 & 4 \end{bmatrix}$
- (B) $\begin{bmatrix} -4 & 2 \\ 1 & 4 \end{bmatrix}$
- (C) $\begin{bmatrix} 4 & -2 \\ -1 & -4 \end{bmatrix}$
- (D) $\begin{bmatrix} -4 & 2 \\ 1 & -4 \end{bmatrix}$

CORRECT OPTION: C

[Watch Free Video Solution on Doubnut](#)



Get Solutions as YOU TYPE

Click Here to TYPE & ASK

find the equation of tangent a

Find the equation of tangent to the curve 'x=a(th...

Find the equation of tangent to the curve 'x=a(th...

Find the equation of tangent to the curve 'y=sin^(-1...

If '3x+y-4' is a tangent to a circle whose center is ...

Find the equation of tangent to 'y=int_(x^2)^(x^3)(...



**JEE MAINS 12 APRIL 2019 - PAPER 1 SHIFT 1 -
MEMORY BASED - MATHS**

in what ratio, the point of intersection of the common tangents to hyperbola $\frac{x^2}{1} - \frac{y^2}{8} = 1$ and parabola $y^2 = 12x$, divides the foci of the given hyperbola?

- (A) 3 : 4
- (B) 3 : 2
- (C) 5 : 4
- (D) 5 : 3

CORRECT OPTION: C

[📺 Watch Free Video Solution on Doubtnut](#)

25 - 9677701

**JEE MAINS 12 APRIL 2019 - PAPER 1 SHIFT 1 -
MEMORY BASED - MATHS**

if $y = \sin x \cdot \sin(x + 2) - \sin^2(x + 1)$ represents a straight line, then it passes through

- (A) I and II quadrant
- (B) I, II and III quadrant
- (C) I, III, IV quadrant
- (D) III and IV quadrant

CORRECT OPTION: D

[📺 Watch Free Video Solution on Doubtnut](#)

26 - 9677702

**JEE MAINS 12 APRIL 2019 - PAPER 1 SHIFT 1 -
MEMORY BASED - MATHS**

let $\vec{a} = \lambda \hat{i} + \hat{j}$, $\vec{b} = \lambda \hat{j} + \hat{k}$ and $\vec{c} = \hat{i} + \hat{j} + \lambda \hat{k}$

are co-terminous edges of a parallelepiped then the value of

λ for which the volume of the parallelepiped is minimum is

(A) $\frac{1}{\sqrt{3}}$

(B) $-\frac{1}{\sqrt{3}}$

(C) 0

(D) $\frac{1}{\sqrt{2}}$

CORRECT OPTION: A

[© Watch Free Video Solution on Doubtnut](#)

27 - 9677703

**JEE MAINS 12 APRIL 2019 - PAPER 1 SHIFT 1 -
MEMORY BASED - MATHS**

Let a curve satisfying the differential equation

$$y^2 dx = \left(x - \frac{1}{y}\right) dy = 0 \text{ which passes through } (1,1) \text{ if}$$

the curve also passes through $(k,2)$ then value of k is

(A) $\frac{1}{2} - \frac{1}{\sqrt{e}}$

(B) $\frac{3}{2} + \frac{1}{\sqrt{e}}$

$$(C) \frac{3}{2} - \frac{1}{\sqrt{e}}$$

$$(D) \frac{1}{2} + \frac{1}{\sqrt{e}}$$

CORRECT OPTION: C

[📺 Watch Free Video Solution on Doubtnut](#)

28 - 9677704

**JEE MAINS 12 APRIL 2019 - PAPER 1 SHIFT 1 -
MEMORY BASED - MATHS**

if $\int_0^{f(x)} 4x^3 dx = g(x)(x - 2)$ if $f(2) = 6$ and
 $f'(2) = \frac{1}{48}$ then find $\lim_{x \rightarrow 2} g(x)$

(A) 18

(B) 17

(C) 20

(D) 19

CORRECT OPTION: A

📺 Watch Free Video Solution on Doubtnut

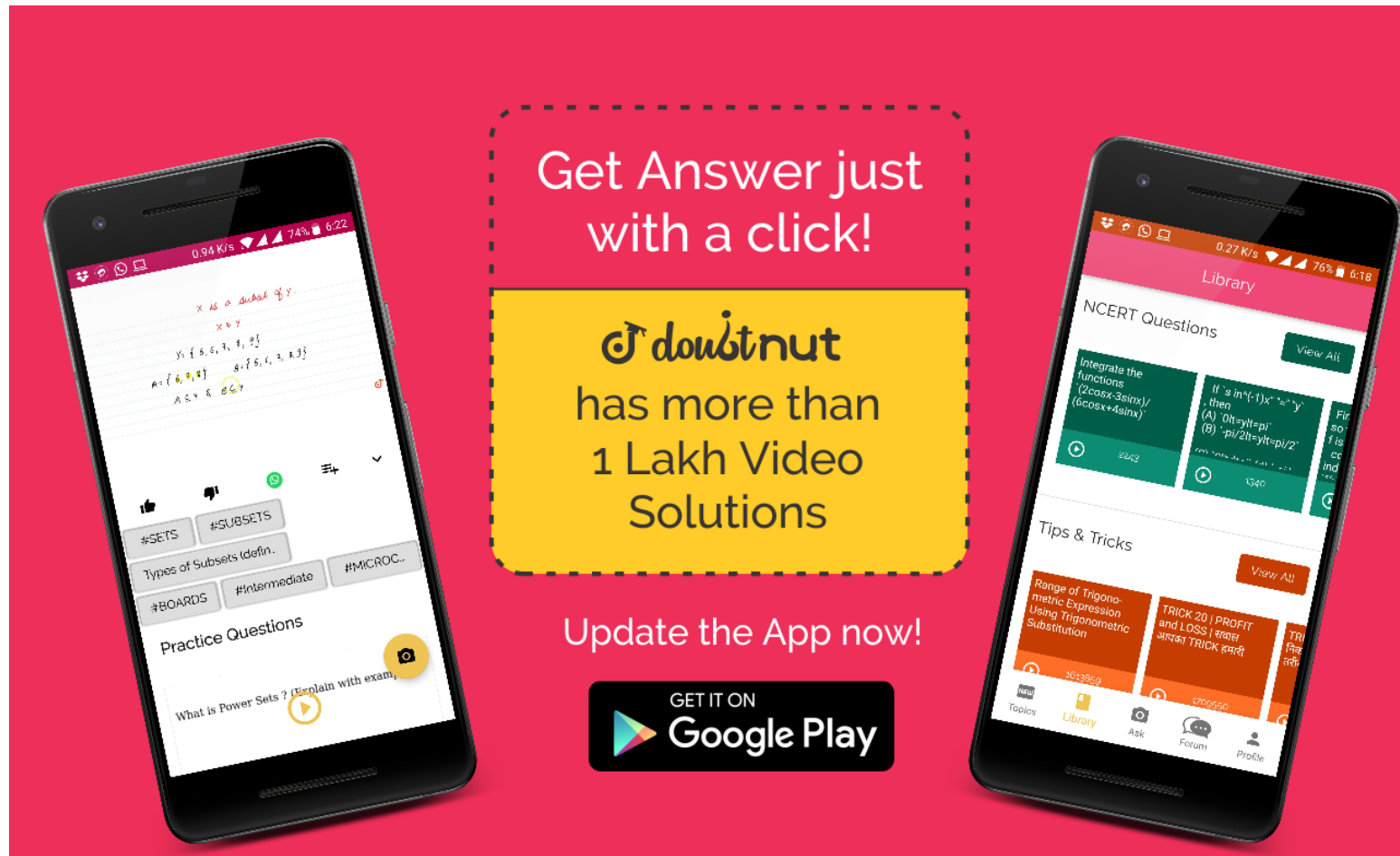
📲 Download Doubtnut to Ask Any Math Question By just a click

📲 Get A Video Solution For Free in Seconds

📲 Doubtnut Has More Than 1 Lakh Video Solutions

📲 Free Video Solutions of NCERT, RD Sharma, RS Aggarwal, Cengage (G.Tewani), Resonance DPP, Allen, Bansal, FIITJEE, Akash, Narayana, VidyaMandir

📲 Download Doubtnut Today



Get Answer just with a click!

doubtnut has more than 1 Lakh Video Solutions

Update the App now!

GET IT ON **Google Play**

The advertisement features two smartphones. The left phone displays a math problem: "x is a subset of y", with handwritten solutions for sets A and B. The right phone displays the app's library with categories like "NCERT Questions" and "Tips & Tricks". A central yellow box contains the app's name and the number of solutions. Below it is a "Google Play" button.