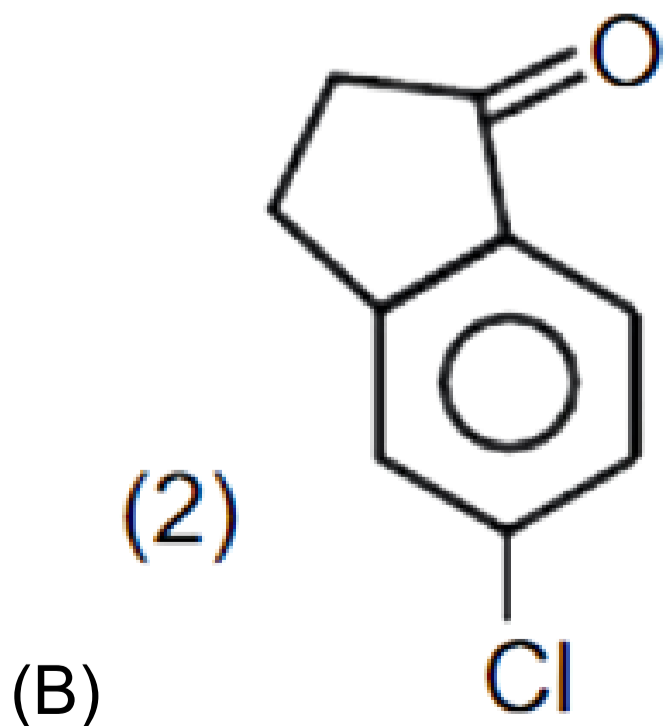
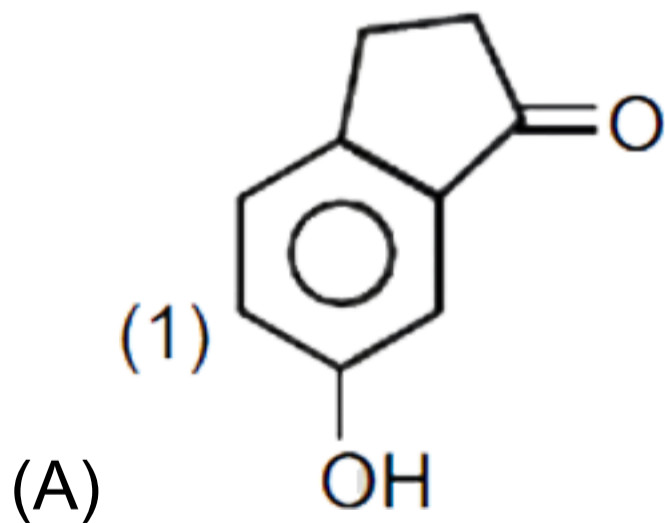
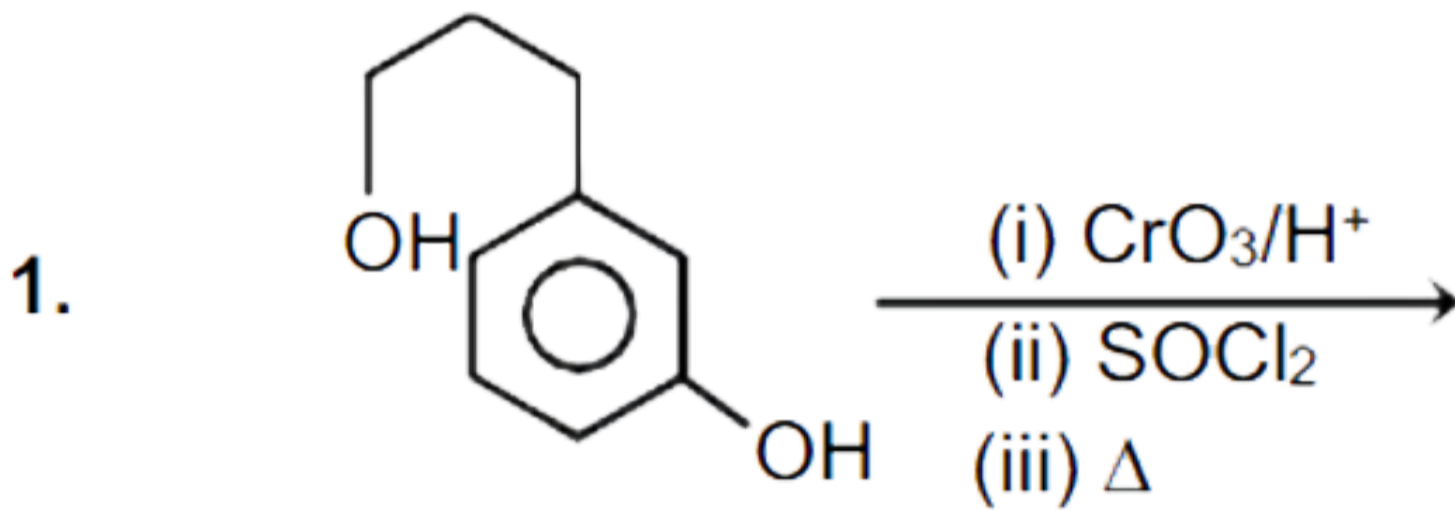


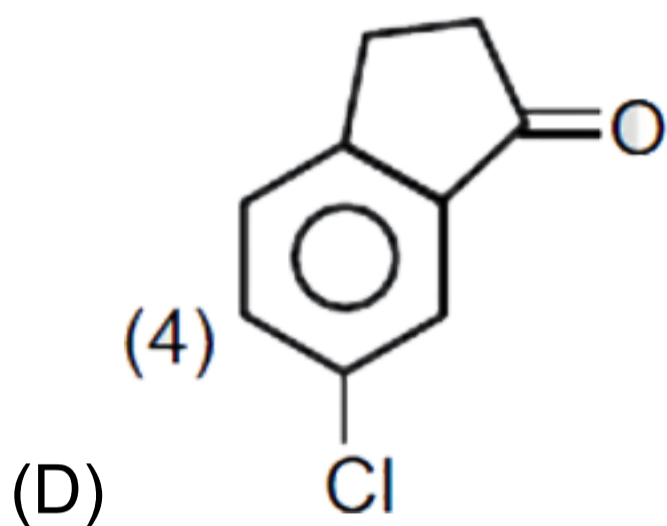
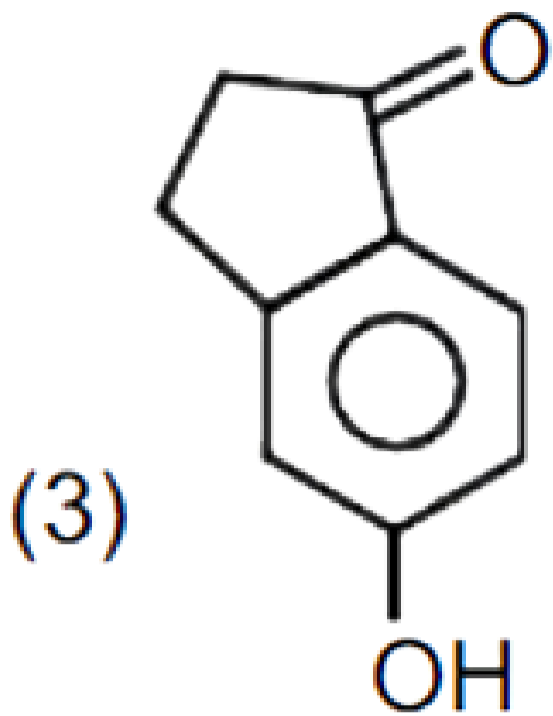
Ques No.

Question

1 - 9677643

**JEE MAINS 12 APRIL 2019 - PAPER 1 SHIFT 1 -
MEMORY BASED - CHEMISTRY**





CORRECT OPTION: C

[© Watch Free Video Solution on Doubtnut](#)

2 - 9677644

**JEE MAINS 12 APRIL 2019 - PAPER 1 SHIFT 1 -
MEMORY BASED - CHEMISTRY**

Which of the following is thermosetting polymer?

(A) Buna-S

(B) PVC

(C) Bakelite

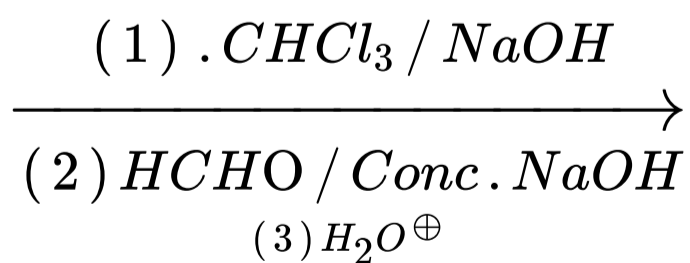
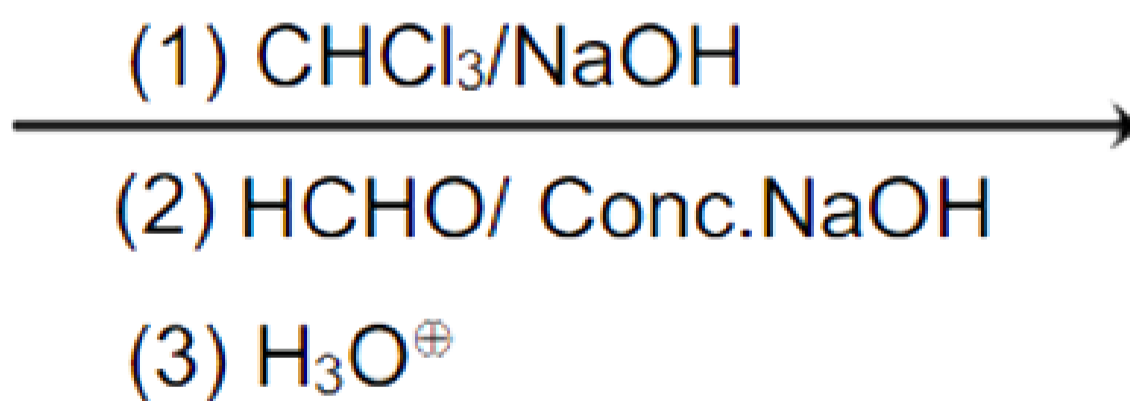
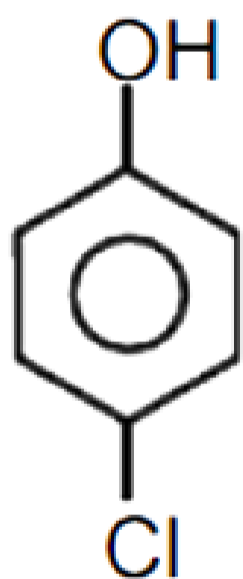
(D) Polyethylene

CORRECT OPTION: C

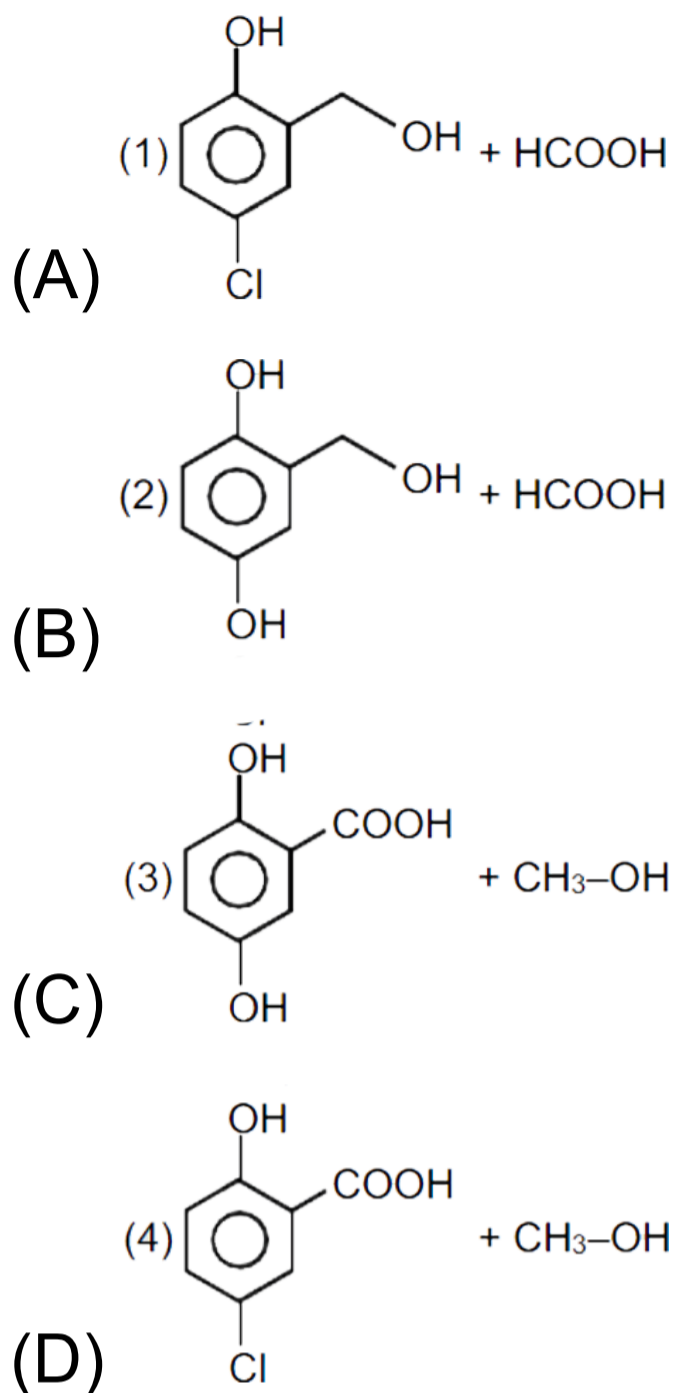
[© Watch Free Video Solution on Doubtnut](#)

3 - 9677646

**JEE MAINS 12 APRIL 2019 - PAPER 1 SHIFT 1 -
MEMORY BASED - CHEMISTRY**



The correct product is:



CORRECT OPTION: A

[📺 Watch Free Video Solution on Doubtnut](#)

4 - 9677647

**JEE MAINS 12 APRIL 2019 - PAPER 1 SHIFT 1 -
MEMORY BASED - CHEMISTRY**

Which of the following statements is incorrect for RNA?

(A) it is synthesized in nucleus.

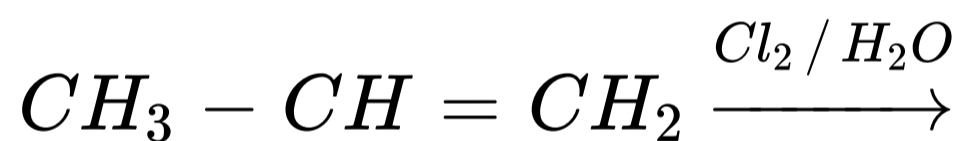
- (B) it helps in protein synthesis
- (C) it has double helix like structure
- (D) it carries the genetic information.

CORRECT OPTION: C

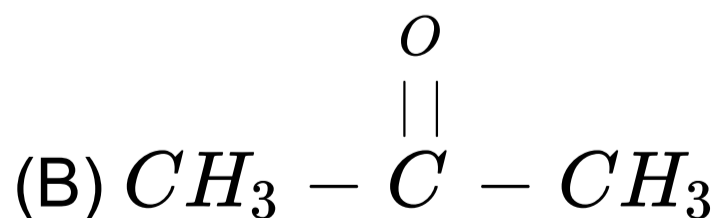
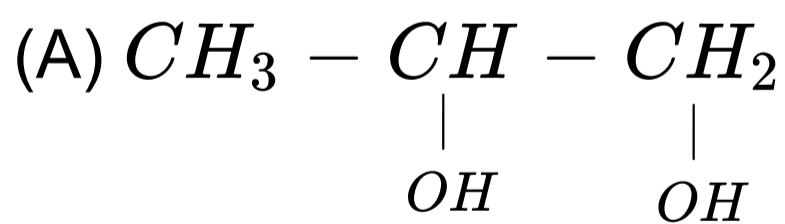
[Watch Free Video Solution on Doubtnut](#)

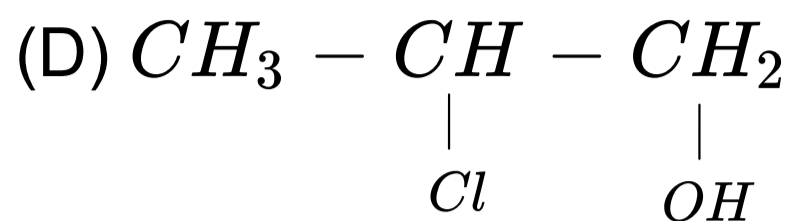
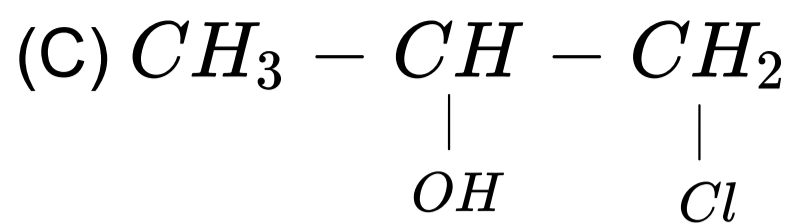
5 - 9677648

**JEE MAINS 12 APRIL 2019 - PAPER 1 SHIFT 1 -
MEMORY BASED - CHEMISTRY**



The correct product is





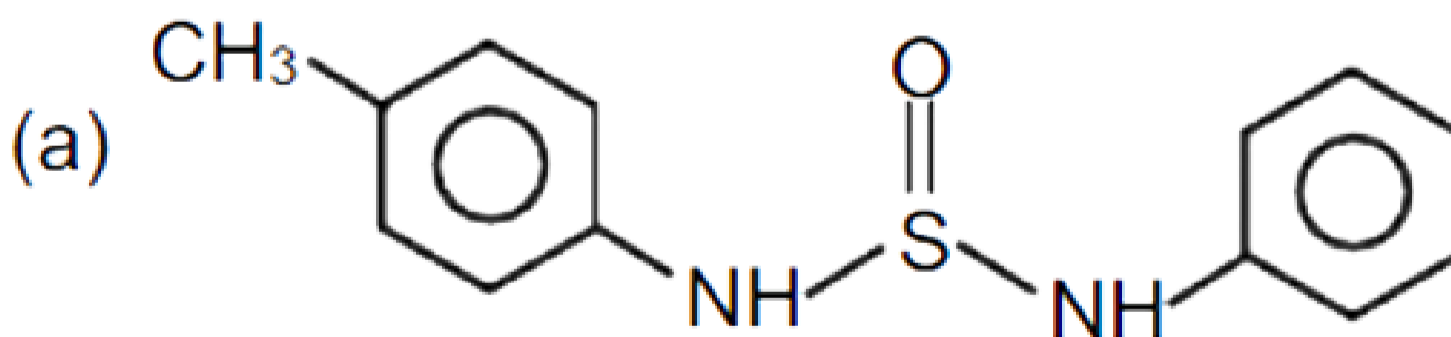
CORRECT OPTION: C

[Watch Free Video Solution on Doubtnut](#)

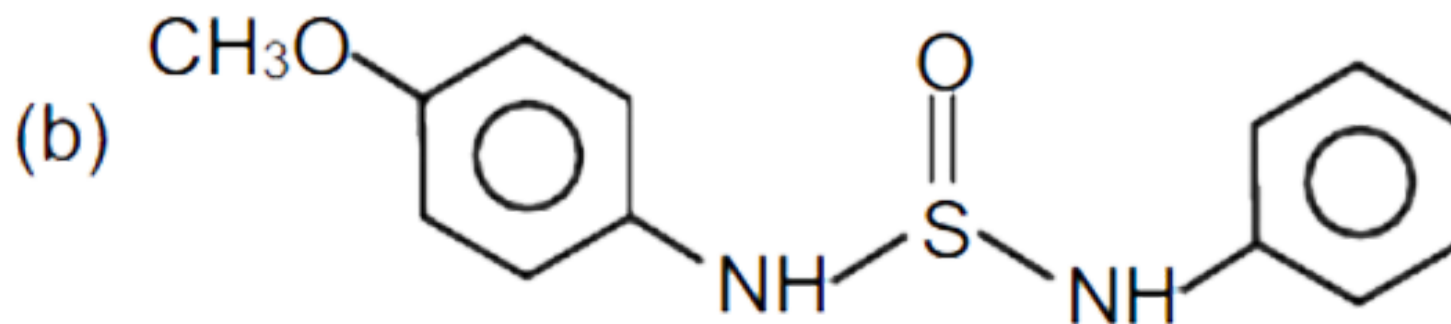
6 - 9677649

**JEE MAINS 12 APRIL 2019 - PAPER 1 SHIFT 1 -
MEMORY BASED - CHEMISTRY**

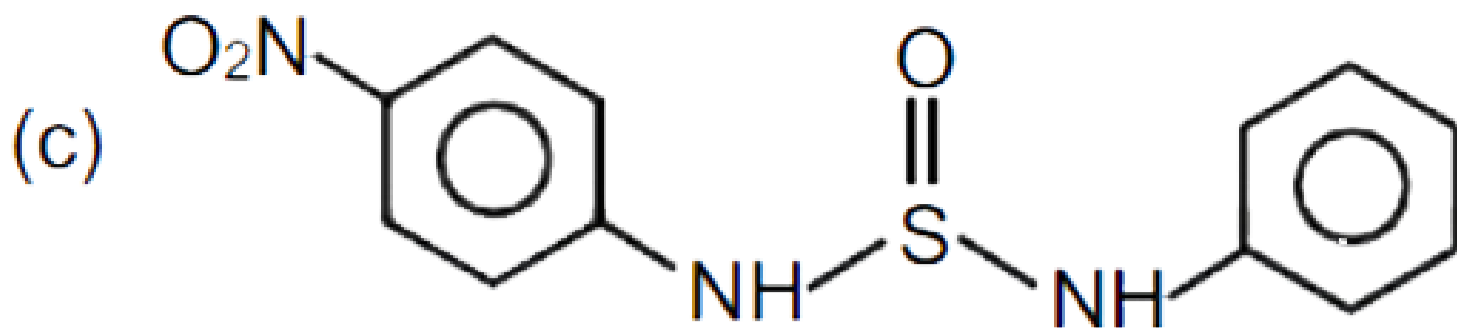
Arrange the following compounds in their increasing pK_b order:



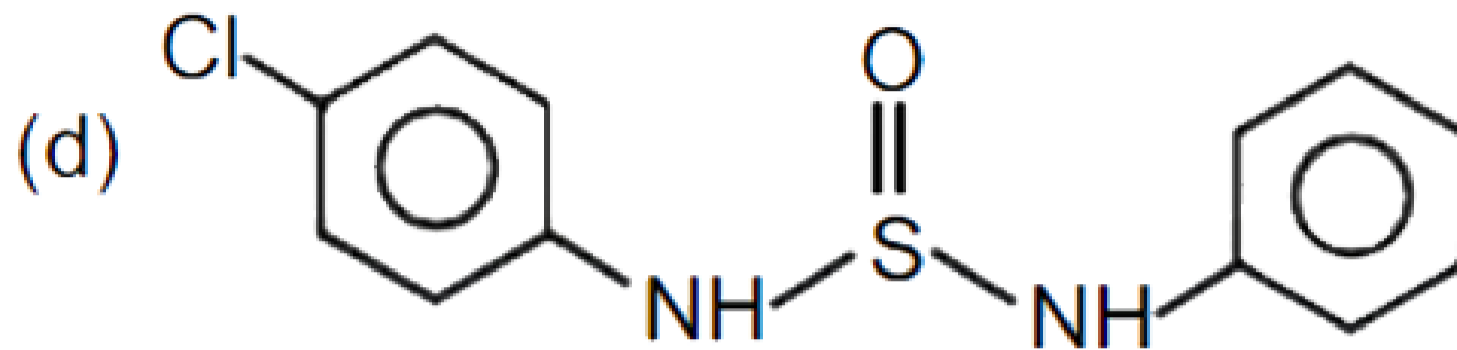
(a).



(b).



(c).



(d).

(A) $c < d < a < b$

(B) $b < a < d < c$

(C) $d < b < a < c$

(D) $a < b < d < b$

CORRECT OPTION: B

[© Watch Free Video Solution on Doubtnut](#)

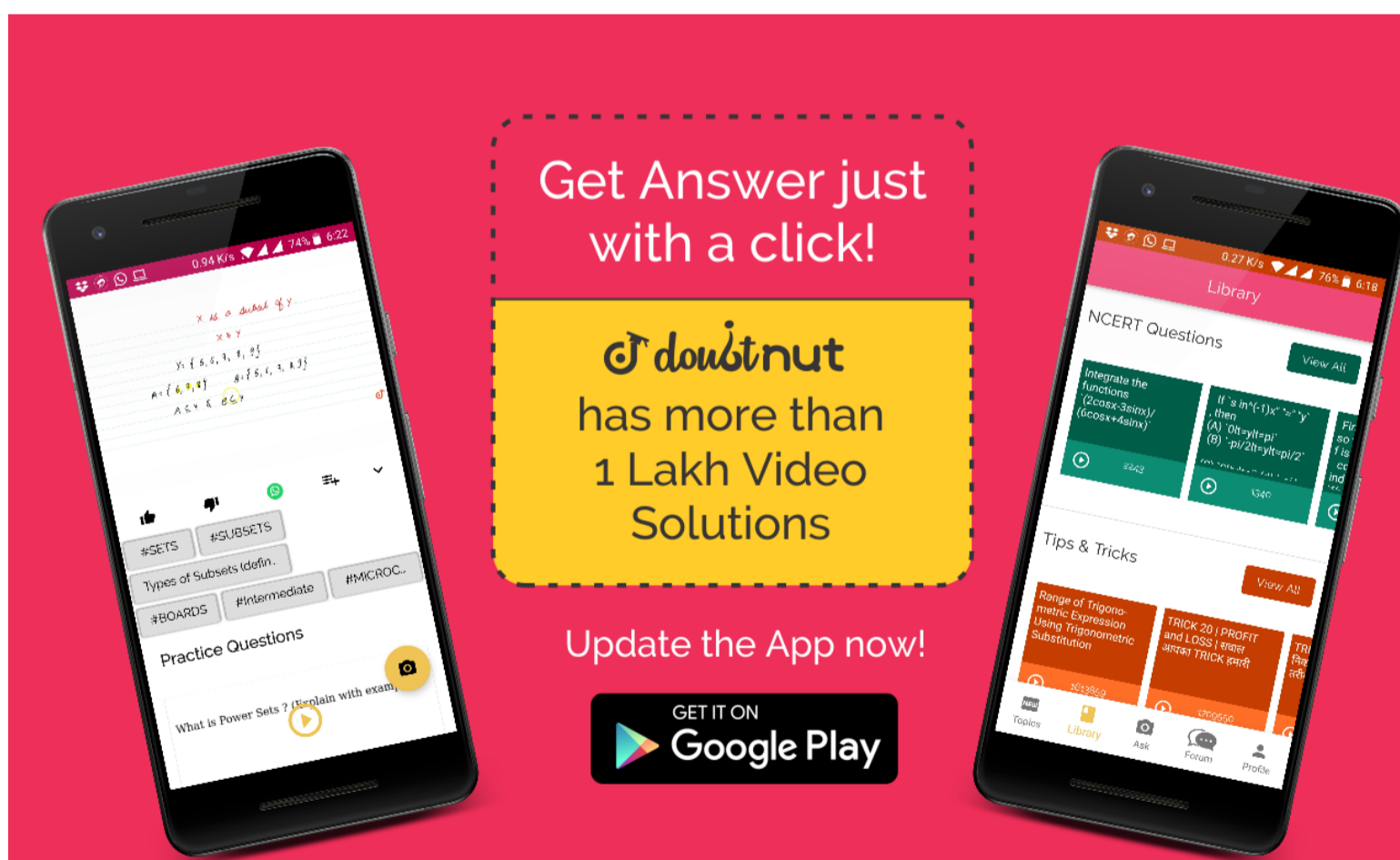
Which of the following cause photochemical smog?

- (A) N_2 , O_3 , NO_2 hydrocarbon
- (B) N_2 , SO_2 , O_2 hydrocarbon
- (C) NO , NO_2 , O_3 , hydrocarbon
- (D) NO , CO_2 , N_2 , hydrocarbon

CORRECT OPTION: C

[Watch Free Video Solution on Doubnut](#)

 **doubnut**
पढ़ना हुआ आसान



Get Answer just with a click!

doubnut
has more than
1 Lakh Video
Solutions

Update the App now!

GET IT ON
Google Play

8 - 9677651

**JEE MAINS 12 APRIL 2019 - PAPER 1 SHIFT 1 -
MEMORY BASED - CHEMISTRY**

Glucose and galactose differs on which carbon atom.

- (A) 2nd carbon atom
- (B) 3rd carbon atom
- (C) 4th carbon atom
- (D) 5th carbon atom

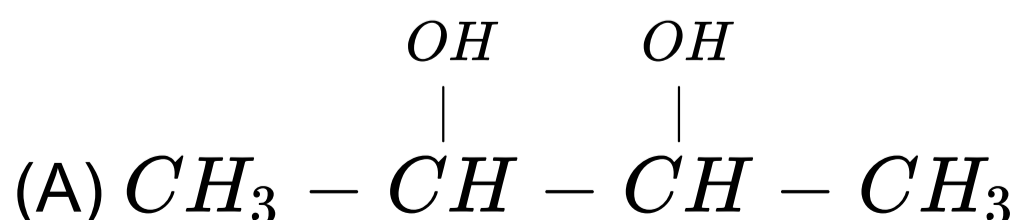
CORRECT OPTION: C

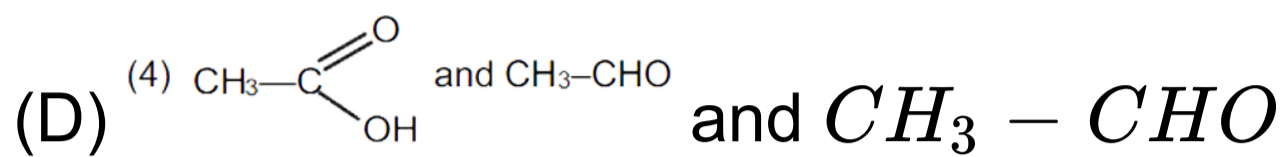
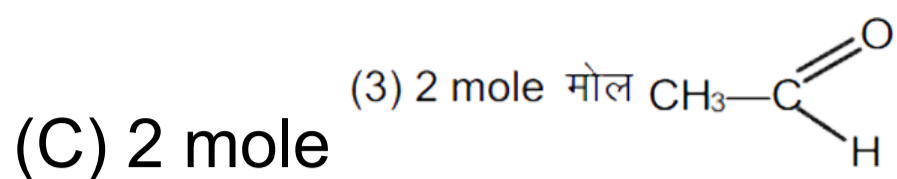
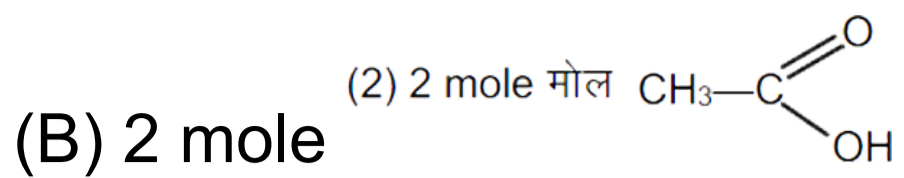
[📺 Watch Free Video Solution on Doubtnut](#)

9 - 9677652

**JEE MAINS 12 APRIL 2019 - PAPER 1 SHIFT 1 -
MEMORY BASED - CHEMISTRY**

Which of the following is formed when 2 butene is treated with alkaline $KMnO_4$ higher temperature



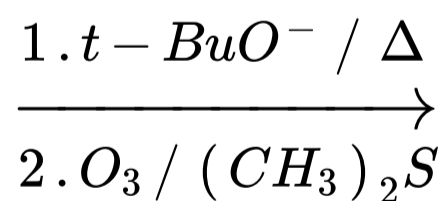
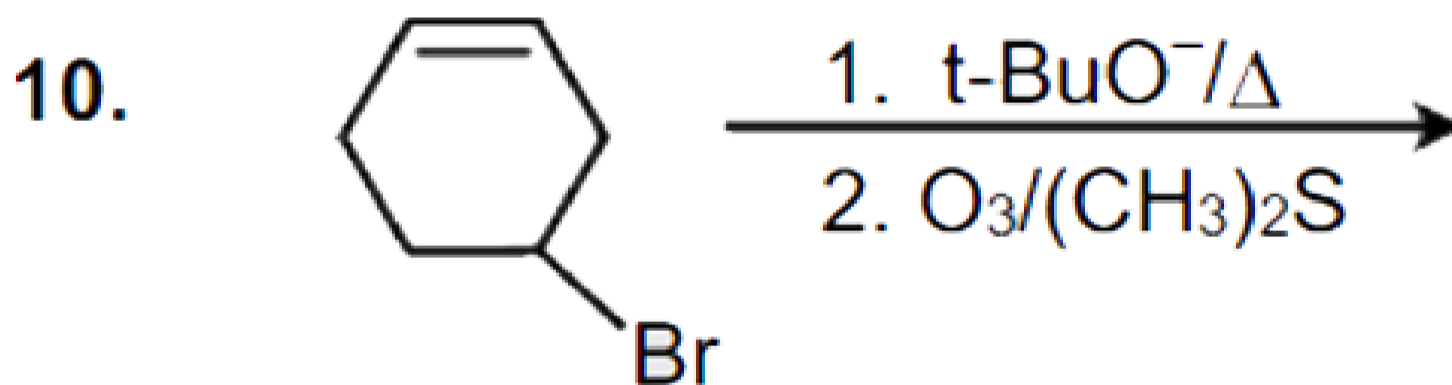


CORRECT OPTION: B

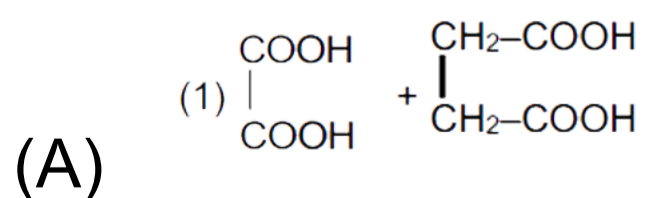
[Watch Free Video Solution on Doubtnut](#)

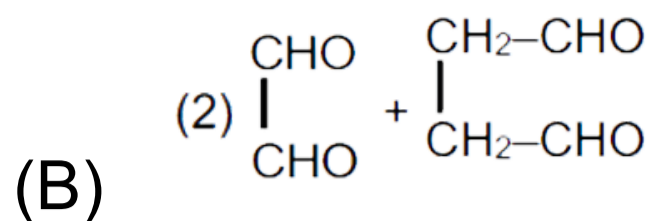
10 - 9677653

**JEE MAINS 12 APRIL 2019 - PAPER 1 SHIFT 1 -
MEMORY BASED - CHEMISTRY**

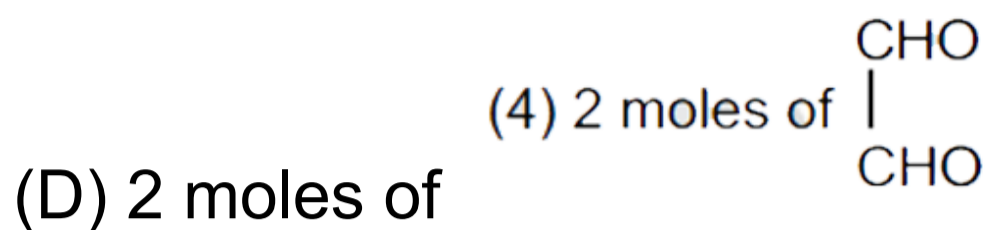


Major products of the reaction





(C) 2 moles of $\text{HOOC} - \text{CH}_2 - \text{COOH}$



CORRECT OPTION: B

[📺 Watch Free Video Solution on Doubtnut](#)

11 - 9677654

**JEE MAINS 12 APRIL 2019 - PAPER 1 SHIFT 1 -
MEMORY BASED - CHEMISTRY**

A compound X react with Na_2O_2 and forms Y , Y is reacted with nitric acid and then treated with ammonium molybdate to give yellow ppt.

(A) Phosphorus

(B) Nitrogen

(C) Fluorine

(D) Sulphur

CORRECT OPTION: A

[📺 Watch Free Video Solution on Doubtnut](#)

12 - 9677655

**JEE MAINS 12 APRIL 2019 - PAPER 1 SHIFT 1 -
MEMORY BASED - CHEMISTRY**

What will be the work done for expansion of a gas from 1 lit to 10 lit volume against constant pressure of 1 bar?

(A) $+9KJ$

(B) $-9KJ$

(C) $+0.9KJ$

(D) $-0.9KJ$

CORRECT OPTION: D

**JEE MAINS 12 APRIL 2019 - PAPER 1 SHIFT 1 -
MEMORY BASED - CHEMISTRY**

In a F.C.C arrangement edge length of unit cell is a , which of the following is correct distance between two nearest tetrahedral voids?

(A) $\sqrt{2}a$

(B) $\frac{a}{\sqrt{2}}$

(C) a

(D) $\frac{a}{2}$

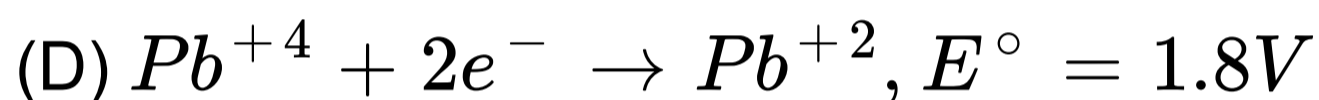
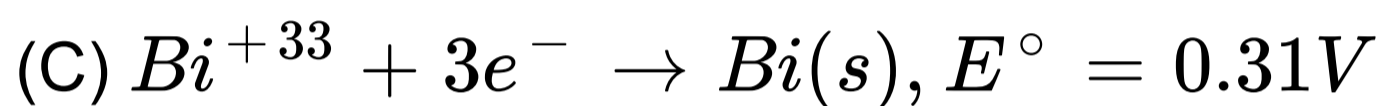
13 - 9677656

CORRECT OPTION: D

14 - 9677657

**JEE MAINS 12 APRIL 2019 - PAPER 1 SHIFT 1 -
MEMORY BASED - CHEMISTRY**

Observe the following processes given along with standard electrode potentials:



CORRECT OPTION: D

[© Watch Free Video Solution on Doubtnut](#)

15 - 9677658

**JEE MAINS 12 APRIL 2019 - PAPER 1 SHIFT 1 -
MEMORY BASED - CHEMISTRY**

Mole fraction of solvent in an aqueous solution is 0.8. What is the molality of this solution in mol/kg?

(A) 55.55

(B) 13.88

(C) 27.77

(D) 6.94

CORRECT OPTION: B

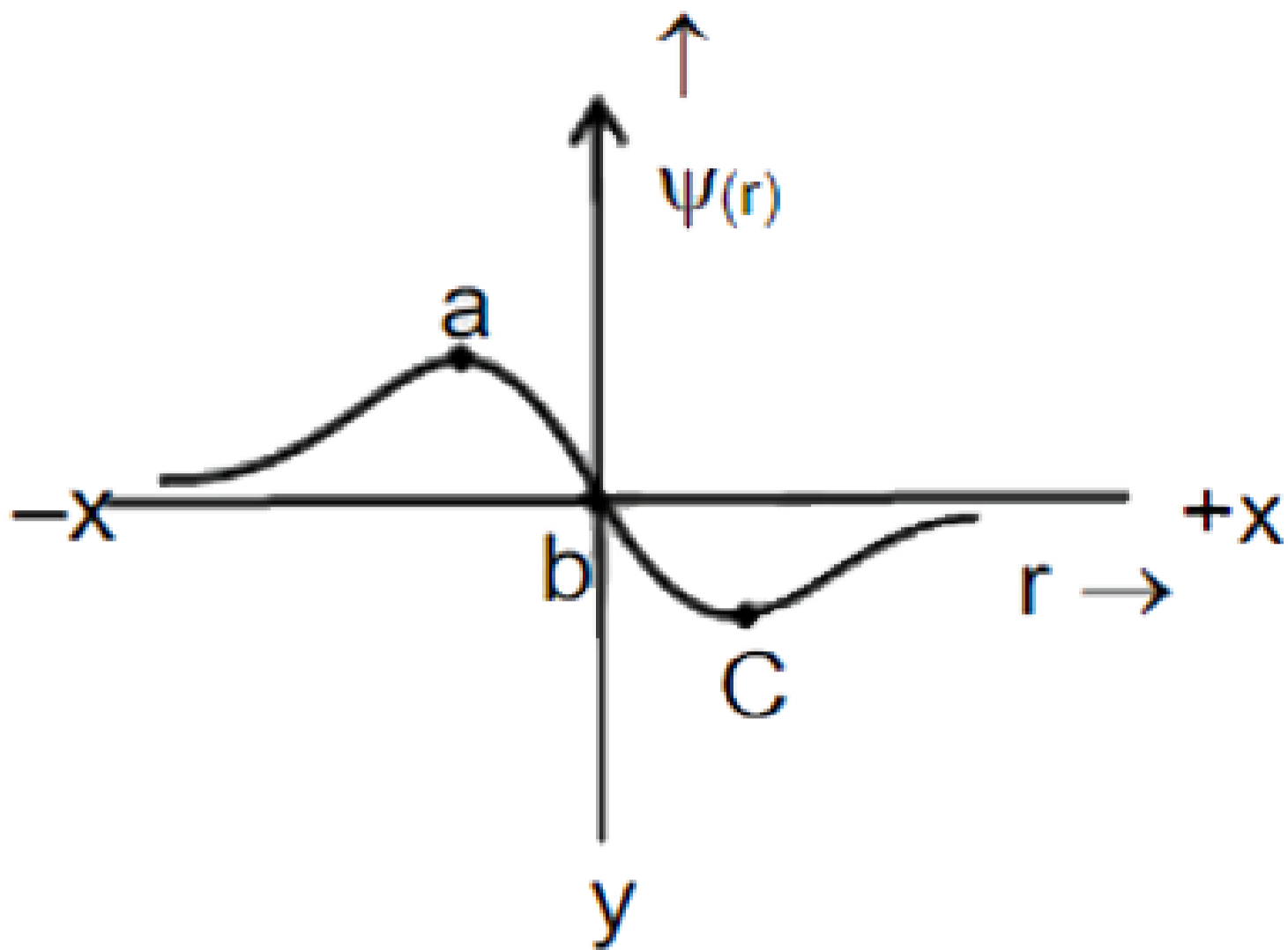
[📺 Watch Free Video Solution on DoubtNut](#)

 **doubtNut**
पढ़ना हुआ आसान



16 - 9677659

**JEE MAINS 12 APRIL 2019 - PAPER 1 SHIFT 1 -
MEMORY BASED - CHEMISTRY**



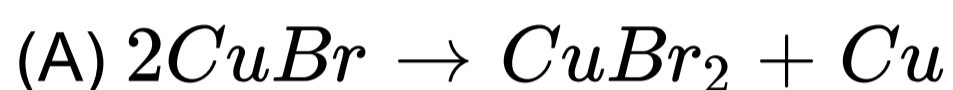
In the following curve, at which points probability of finding electron is maximum?

- (A) a,c
- (B) only a
- (C) only c
- (D) a,b

CORRECT OPTION: A

**JEE MAINS 12 APRIL 2019 - PAPER 1 SHIFT 1 -
MEMORY BASED - CHEMISTRY**

Which of the following is an example of disproportionation reaction?



CORRECT OPTION: A

[© Watch Free Video Solution on Doubtnut](#)

**JEE MAINS 12 APRIL 2019 - PAPER 1 SHIFT 1 -
MEMORY BASED - CHEMISTRY**

Peptization is:

(A) formation of colloid from precipitate

(B) formation fo precipitate from colloid

(C) formation fo colloid from solution

(D) addtion of colloid in solvent

CORRECT OPTION: A

[© Watch Free Video Solution on Doubtnut](#)

19 - 9677664

**JEE MAINS 12 APRIL 2019 - PAPER 1 SHIFT 1 -
MEMORY BASED - CHEMISTRY**

If mass of 5 mole AB_2 is $125 \times 10^{-3} \text{ kg}$ and mass of 10 mole A_2B_2 is $300 \times 10^{-3} \text{ kg}$. Then correct molar mass of A and B respectively (in kg/mol):

(A) $A = 5 \times 10^{-3}$ & $B = 25 \times 10^{-3}$

(B) $A = 2.5 \times 10^{-3}$ & $B = 5 \times 10^{-3}$

$$(C) A = 2.5 \times 10^{-3} \& B = 10 \times 10$$

$$(D) A = 5 \times 10^{-3} \& B = 10 \times 10^{-3}$$

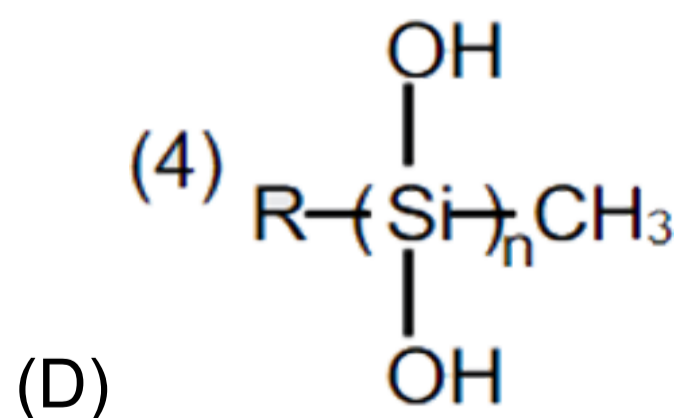
CORRECT OPTION: A

[📺 Watch Free Video Solution on Doubtnut](#)

20 - 9677665

**JEE MAINS 12 APRIL 2019 - PAPER 1 SHIFT 1 -
MEMORY BASED - CHEMISTRY**

Basic unit fo zeolite, mica, asbestos and feldspar is

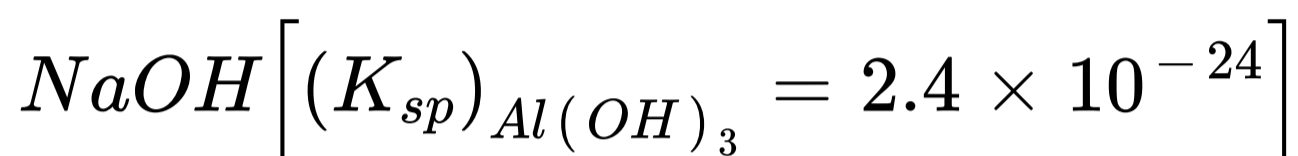


CORRECT OPTION: A

[© Watch Free Video Solution on Doubtnut](#)

**JEE MAINS 12 APRIL 2019 - PAPER 1 SHIFT 1 -
MEMORY BASED - CHEMISTRY**

What is the solubility of $Al(OH)_3$ in the presence of 0.2M



(A) $3 \times 10^{-20} M$

(B) 3×10^{-22}

(C) 8×10^{-12}

(D) $2 \times 10^{-8} M$

21 - 9677666

CORRECT OPTION: B

[© Watch Free Video Solution on Doubtnut](#)

22 - 9677667

**JEE MAINS 12 APRIL 2019 - PAPER 1 SHIFT 1 -
MEMORY BASED - CHEMISTRY**

Enthalpy of sublimation of $I_2(s)$ at $200^\circ C$ is 24J/gm and specific heat of I_2 (vapor) and $I_2(s)$ are 0.013 J/gm-k and 0.045 J/gm-k respectively then enthalpy of sublimation of $I_2(s)$ at $250^\circ C$ is:

- (A) 22.4 J/gm
- (B) 13.4J/gm
- (C) 11.2J/gm
- (D) 5.6J/gm

CORRECT OPTION: A

[© Watch Free Video Solution on Doubtnut](#)

23 - 9677668

**JEE MAINS 12 APRIL 2019 - PAPER 1 SHIFT 1 -
MEMORY BASED - CHEMISTRY**

Which of the followign metal will release H_2 gas on reaction with both acid as well as base separately

(A) Mg

(B) Zn

(C) Fe

(D) Pt

CORRECT OPTION: B

[📺 Watch Free Video Solution on Doubtnut](#)

 **doubtnut**
पढ़ना हुआ आसान



Get Solutions as YOU TYPE

Click Here to TYPE & ASK

find the equation of tangent a

Find the equation of tangent to the curve 'x=a(th...

Find the equation of tangent to the curve 'x=a(th...

Find the equation of tangent to the curve 'y=sin^(-1...

If '3x+y=0' is a tangent to a circle whose center is ...

Find the equation of tangent to 'y=int_(x^2)(x^3)(...



24 - 9677669

**JEE MAINS 12 APRIL 2019 - PAPER 1 SHIFT 1 -
MEMORY BASED - CHEMISTRY**

A person X discovered froath flotation method which is a type of process Y in metallurgy. Then X and Y are respectively.

- (A) Fisherman, reduction
- (B) Washerman, reduction
- (C) Fisherwoman, concentration
- (D) Washerwoman, concentration

CORRECT OPTION: D

[© Watch Free Video Solution on Doubnut](#)

25 - 9677670

**JEE MAINS 12 APRIL 2019 - PAPER 1 SHIFT 1 -
MEMORY BASED - CHEMISTRY**

What is the correct order of thermal stability of carbonates of alkaline earth metals?

(A)



(B)



(C)



(D)



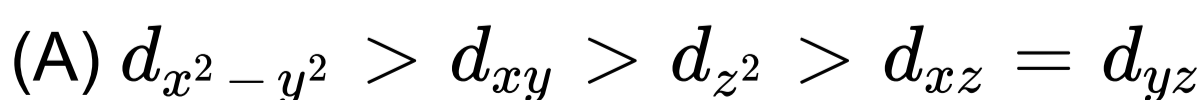
CORRECT OPTION: B

[© Watch Free Video Solution on Doubtnut](#)

26 - 9677671

**JEE MAINS 12 APRIL 2019 - PAPER 1 SHIFT 1 -
MEMORY BASED - CHEMISTRY**

From an octahedral splitting arrangement if two ligands present along Z-axis are removed then what will be the correct order of energy for 5d-orbitals of central metal?



$$(B) d_{xy} > d(x^2 - y^2) > d_{z^2} > d_{xz} > d_{yz}$$

$$(C) d_{z^2} > d_{xz} = d_{yz} > d_{xy} > d_{x^2 - y^2}$$

$$(D) d_{x^2 - y^2} = d_{z^2} > d_{xy} = d_{yz} = d_{xz}$$

CORRECT OPTION: A

[© Watch Free Video Solution on Doubtnut](#)

27 - 9677672

**JEE MAINS 12 APRIL 2019 - PAPER 1 SHIFT 1 -
MEMORY BASED - CHEMISTRY**

Which of the following is correct statement regarding $N(CH_3)_3$ and $N(SiH_3)_3$?

(A) $N(SiH_3)_3$ is planar and more basic than $N(CH_3)_3$

(B) $N(SiH_3)_3$ is planar and less basic than $N(CH_3)_3$

(C) $N(CH_3)_3$ is planar and more basic than $N(SiH_3)_3$

(D) $N(CH_3)_3$ is pyramidal and less basic than $N(SiH_3)_3$

CORRECT OPTION: B

[📺 Watch Free Video Solution on Doubtnut](#)

**JEE MAINS 12 APRIL 2019 - PAPER 1 SHIFT 1 -
MEMORY BASED - CHEMISTRY**

An element have atomic number 15, its valence electrons
group number and valency are respectively

(A) 5,15,3

(B) 6,15,3

(C) 15,6,3

(D) 6,16,4

CORRECT OPTION: A

[📺 Watch Free Video Solution on Doubtnut](#)

28 - 9677673

29 - 9677674

**JEE MAINS 12 APRIL 2019 - PAPER 1 SHIFT 1 -
MEMORY BASED - CHEMISTRY**

For $x A \rightarrow y B$

$$\log \left(\frac{d[A]}{dt} \right) = \log \left(+ \frac{d[B]}{dt} \right) + 0.3010$$

Which of the following reaction given relation is true?

(A) n-butane \rightarrow iso-butane

(B) $N_2O_4 \rightarrow 2NO_2$

(C) $2C_2H_4 \rightarrow C_4H_8$

(D) $3C_2H_2 \rightarrow C_6H_6$

CORRECT OPTION: C

[👁 Watch Free Video Solution on Doubtnut](#)



👉 Download Doubtnut to Ask Any Math Question By just a click

👉 Get A Video Solution For Free in Seconds

👉 Doubtnut Has More Than 1 Lakh Video Solutions

👉 Free Video Solutions of NCERT, RD Sharma, RS Aggarwal, Cengage (G.Tewani), Resonance DPP, Allen, Bansal, FIITJEE, Akash, Narayana, VidyaMandir

📱 Download Doubtnut Today



Get Answer just
with a click!

doubtnut
has more than
1 Lakh Video
Solutions

Update the App now!

