

Ques No.

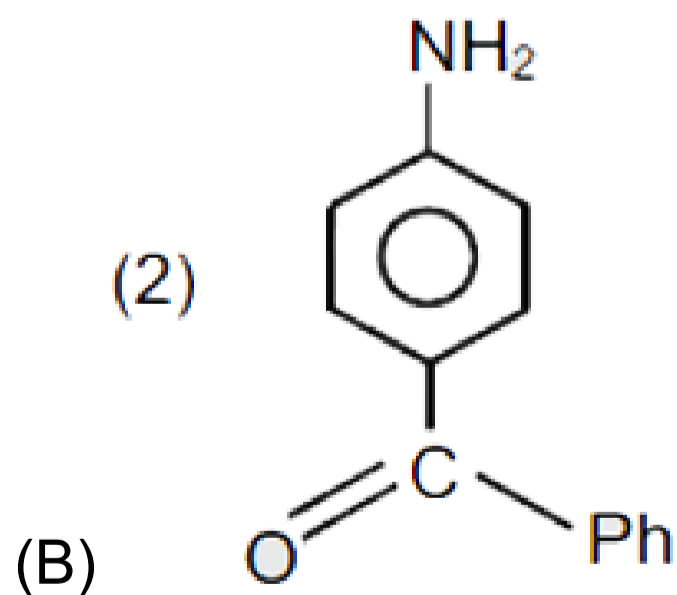
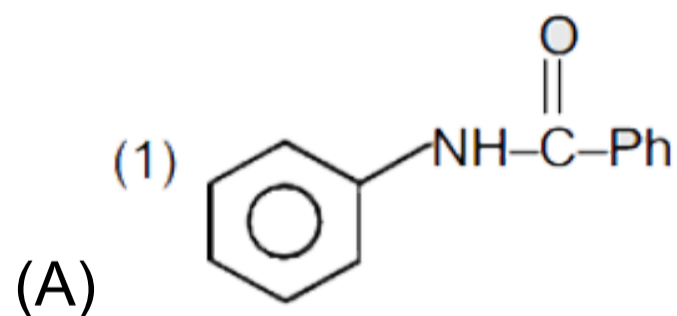
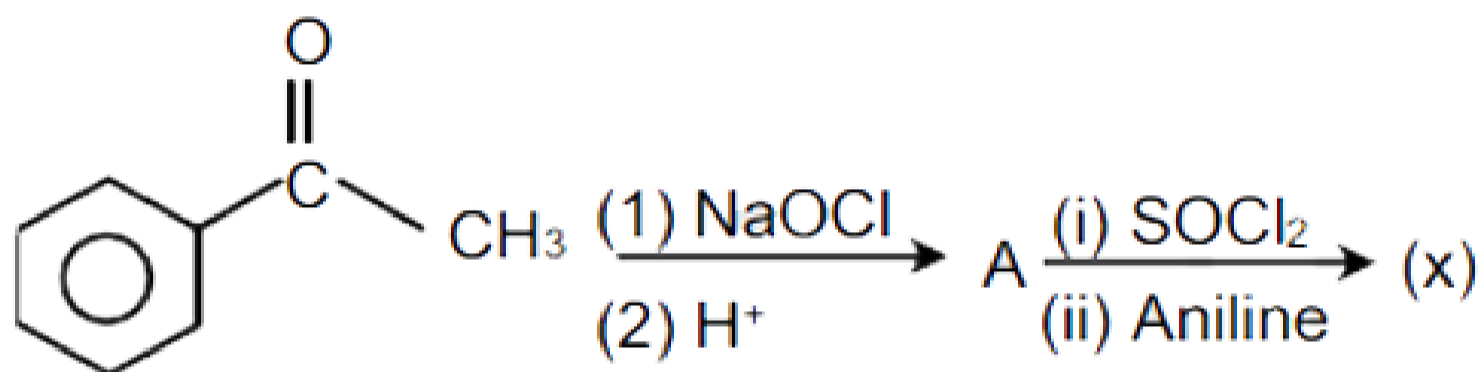
Question

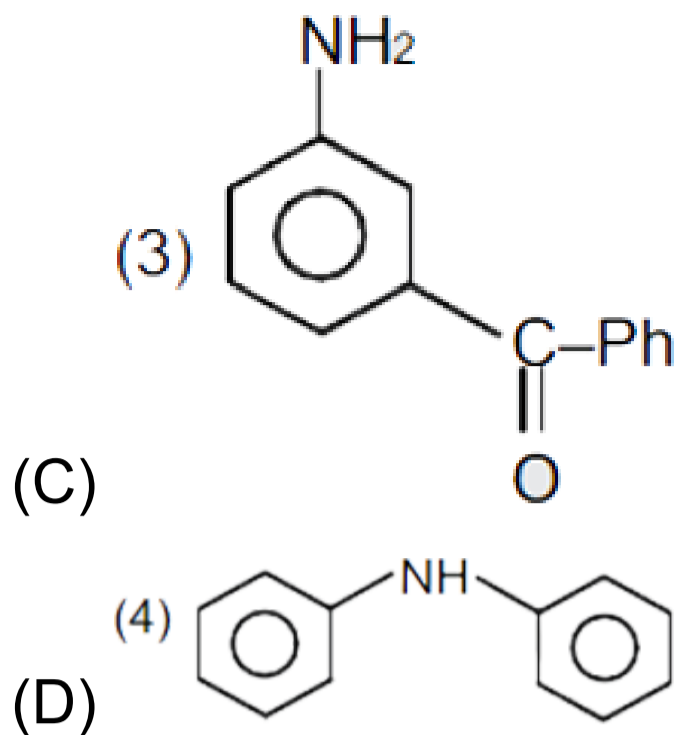
1 - 9525833

JEE MAINS 10 APRIL 2019 - PAPER 1 SHIFT 2 - MEMORY BASED - CHEMISTRY

Identify the major product (x) of given reaction

उपरोक्त प्रतिक्रिया का मुख्य उत्पाद





CORRECT OPTION: A

[Watch Free Video Solution on Doubtnut](#)

2 - 9525835

**JEE MAINS 10 APRIL 2019 - PAPER 1 SHIFT 2 - MEMORY
BASED - CHEMISTRY**

The number of chiral carbon atom present in open chain and cyclic form of glucose -

(A) 3,2

(B) 4,5

(C) 5,5

(D) 6,5

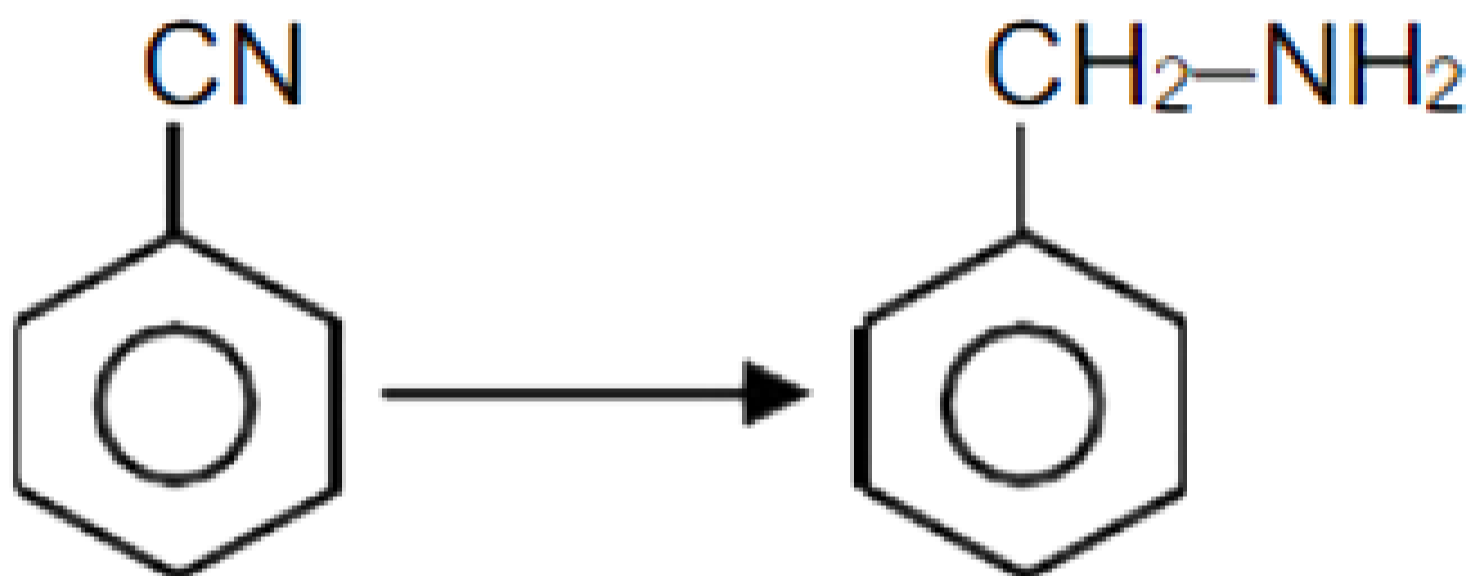
CORRECT OPTION: B

[© Watch Free Video Solution on Doubtnut](#)

3 - 9525836

**JEE MAINS 10 APRIL 2019 - PAPER 1 SHIFT 2 - MEMORY
BASED - CHEMISTRY**

Which of the following reagent is not used to carry out the reaction



- (A) H_2 / Ni
- (B) $LiAlH_4$
- (C) $Sn / HCl. NaBH_4$
- (D) H_2 / Pd

CORRECT OPTION: C

JEE MAINS 10 APRIL 2019 - PAPER 1 SHIFT 2 - MEMORY BASED - CHEMISTRY

Which of the following pollution takes place in sunlight.

- (A) Acid rain
- (B) Reducing smog
- (C) Fog
- (D) Oxidizing smog

4 - 9525837

CORRECT OPTION: D

5 - 9525838

JEE MAINS 10 APRIL 2019 - PAPER 1 SHIFT 2 - MEMORY BASED - CHEMISTRY

Which of the following is not responsible for stability of acyclic hydrocarbon.

- (A) Torsional strain

- (B) Angle strain
- (C) Steric strain
- (D) Vander wall's strain

CORRECT OPTION: B

[© Watch Free Video Solution on Doubtnut](#)

6 - 9525839

**JEE MAINS 10 APRIL 2019 - PAPER 1 SHIFT 2 - MEMORY
BASED - CHEMISTRY**

The correct match for given in column A with column B is

Column-A

(i) *Nylon* – 6

(ii) Novolac

(iii) high density polythene

(iv). poly acrylonitrile

Column-B

(a) Zeigler nattan catalyst

(b) peroxide catalyst

(c) condensation at high T & P

(d) catalysed by acid/base

(A) (i)-d, (ii)-1, (iii) ,c (iv)-b

(B) (i)-1, (ii)-c, (iii)-b, (iv)-d

(C) (i)-c, (ii)-d, (iii)-a, (iv)-b

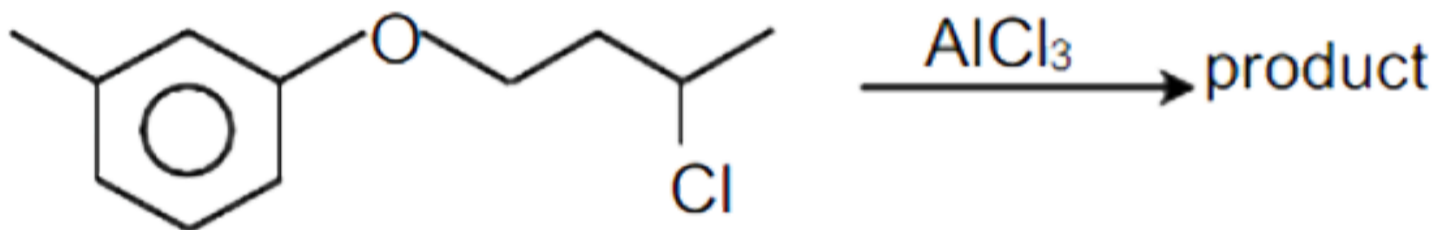
(D) (i)-b, (ii)-v, (iii)-a, (iv)-d

CORRECT OPTION: C

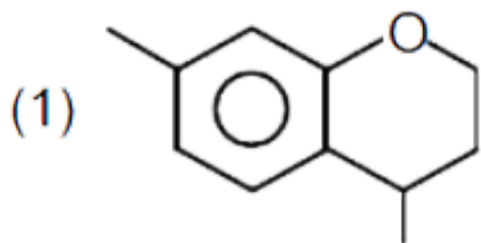
© Watch Free Video Solution on Doubtnut

7 - 9525840

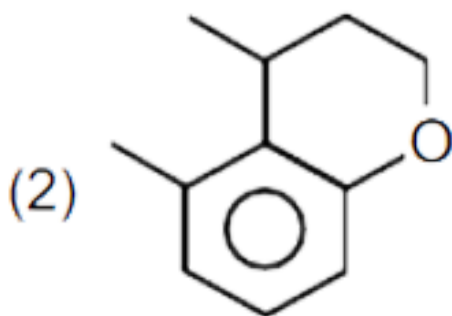
**JEE MAINS 10 APRIL 2019 - PAPER 1 SHIFT 2 - MEMORY
BASED - CHEMISTRY**



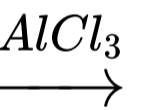
product

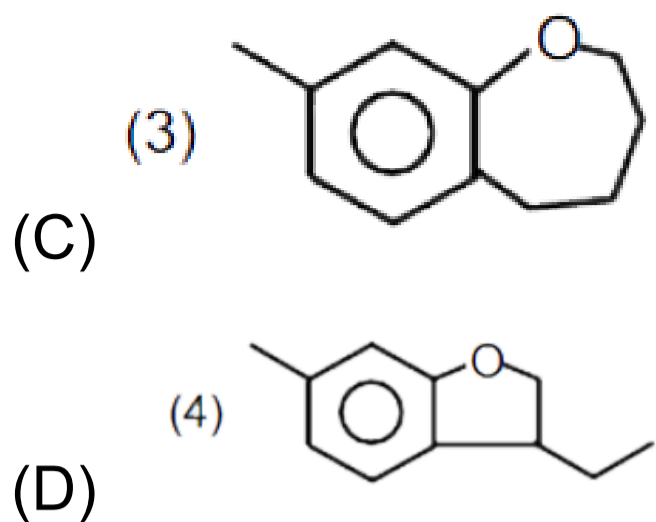


(A)



(B)






CORRECT OPTION: A


[Watch Free Video Solution on DoubtNut](#)


 पढ़ना हुआ आसान

Get Answer just with a click!

 has more than 1 Lakh Video Solutions

Update the App now!

GET IT ON 



8 - 9525841

JEE MAINS 10 APRIL 2019 - PAPER 1 SHIFT 2 - MEMORY BASED - CHEMISTRY

Which of the following is incorrect for R_f ?

(A) R_f value depends on the type of chromatography

(B) Value of R_f is always between 0 to 1

(C) Greater the adsorption, greater will be R_f value

(D) R_f is independent of mobile carrier

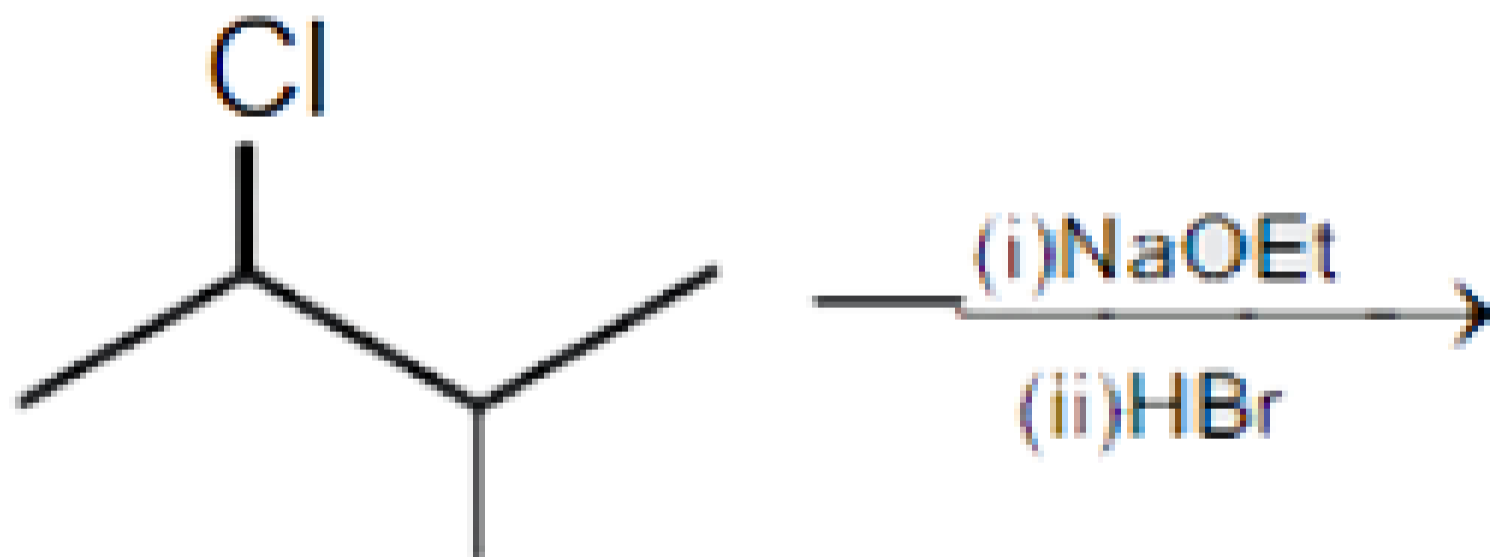
CORRECT OPTION: C

[© Watch Free Video Solution on Doubtnut](#)

9 - 9525842

**JEE MAINS 10 APRIL 2019 - PAPER 1 SHIFT 2 - MEMORY
BASED - CHEMISTRY**

The correct nucleophilicity order of given species



(A) $a > d > b > c$

(B) $d > a > b > c$

(C) $c > a > b > d$

(D) $b > a > c > d$

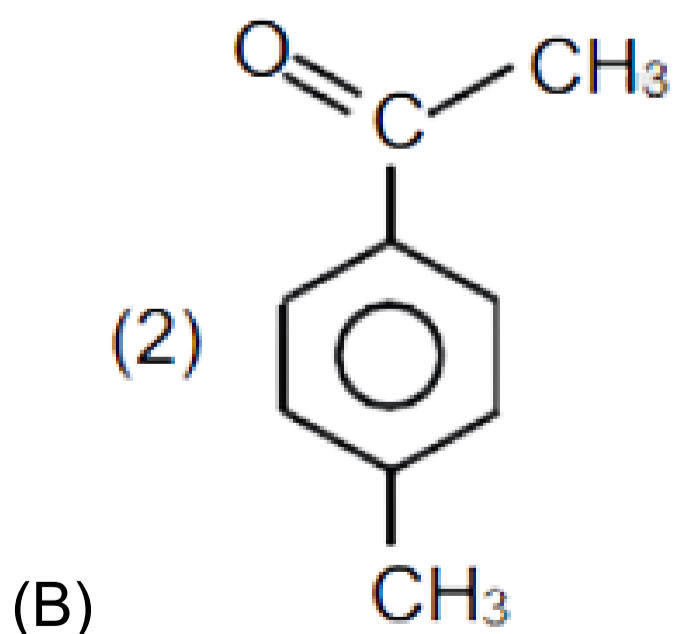
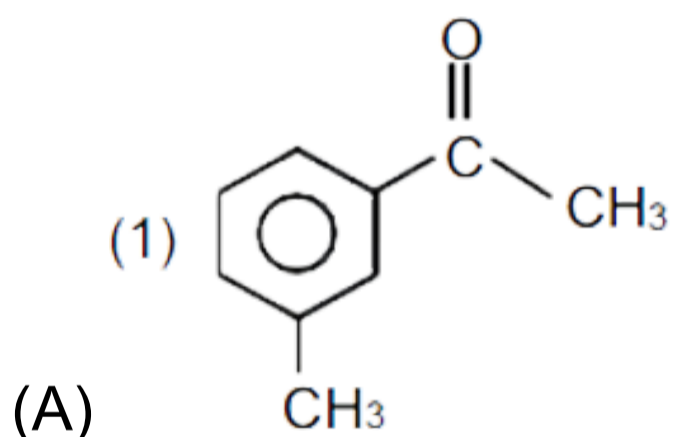
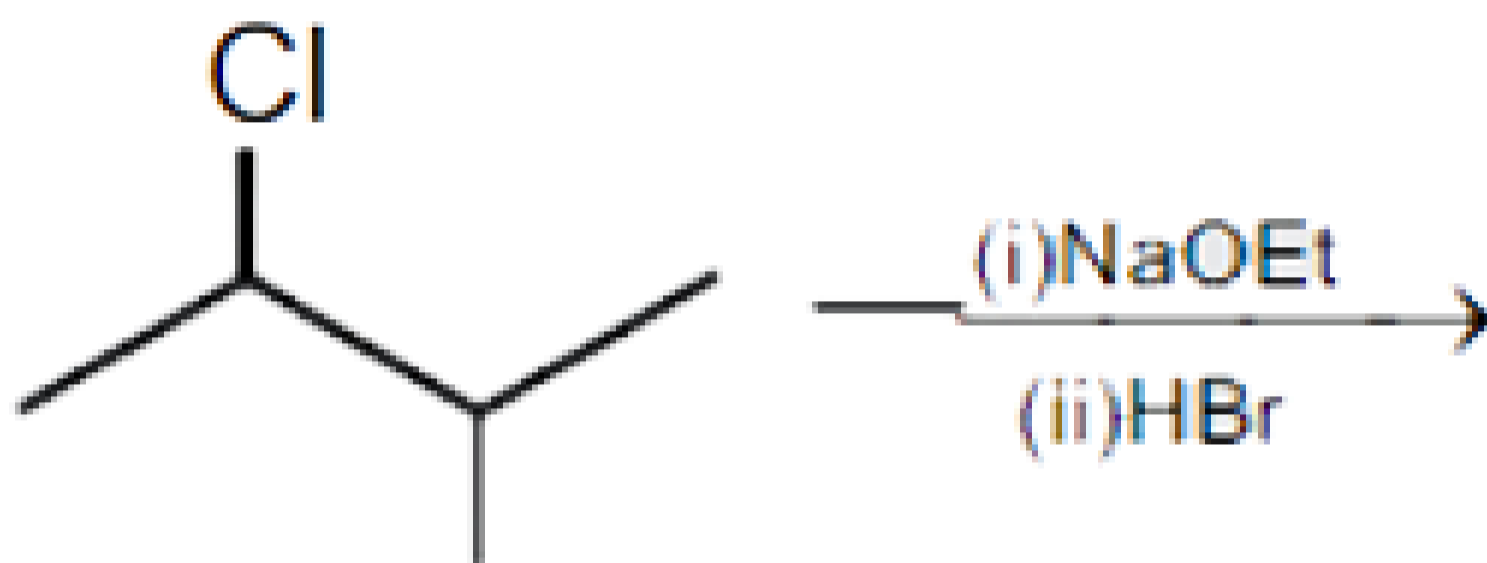
CORRECT OPTION: B

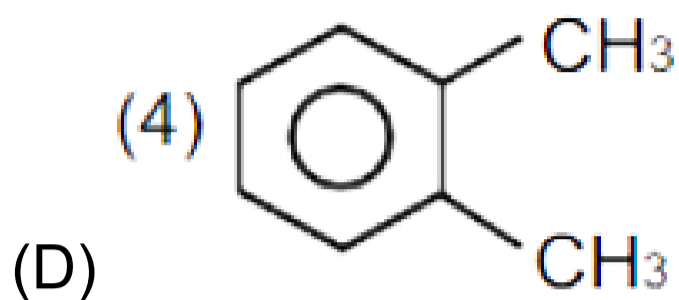
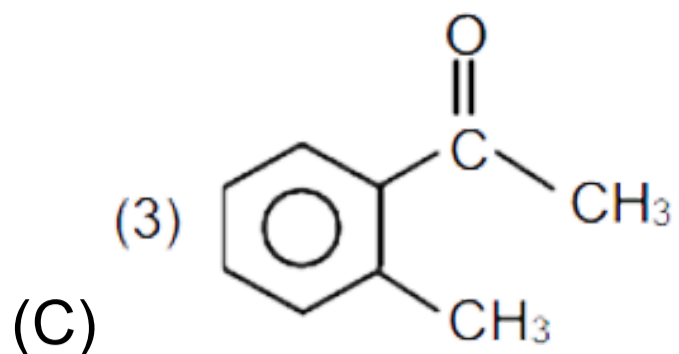
© Watch Free Video Solution on Doubtnut

10 - 9525843

**JEE MAINS 10 APRIL 2019 - PAPER 1 SHIFT 2 - MEMORY
BASED - CHEMISTRY**

The major product of the given reaction is





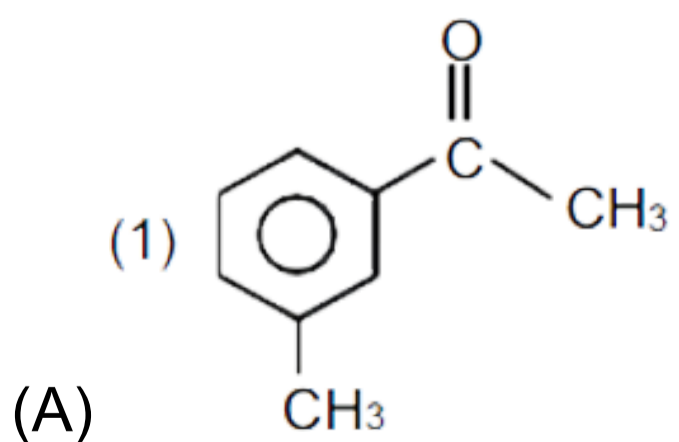
CORRECT OPTION: A

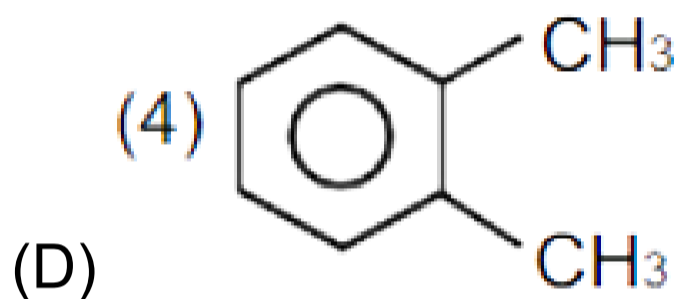
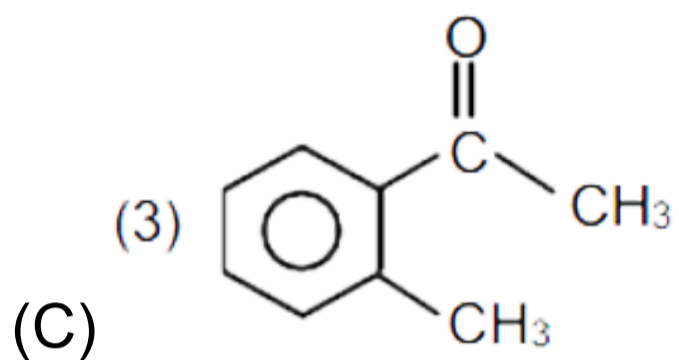
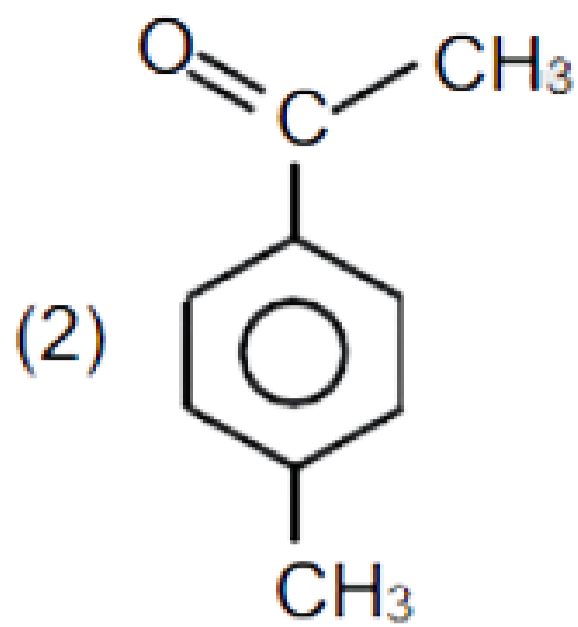
[© Watch Free Video Solution on Doubtnut](#)

11 - 9525844

**JEE MAINS 10 APRIL 2019 - PAPER 1 SHIFT 2 - MEMORY
BASED - CHEMISTRY**

A compound x gives iodoform test. It reacts with $KMnO_4$, which on heating gives anhydride. The anhydride is used in the preparation of phenolphthalein. The compound x is





CORRECT OPTION: C

[Watch Free Video Solution on Doubtnut](#)

12 - 9525845

**JEE MAINS 10 APRIL 2019 - PAPER 1 SHIFT 2 - MEMORY
BASED - CHEMISTRY**

No. Of pentagons in C_{60} and Triangles in white Phosphorus are :

(A) 12,3

(B) 12,4

(C) 20,3

(D) 20,4

CORRECT OPTION: B

[© Watch Free Video Solution on Doubtnut](#)

**JEE MAINS 10 APRIL 2019 - PAPER 1 SHIFT 2 - MEMORY
BASED - CHEMISTRY**

Maximum oxidation state of uranium and plutonium are respectively

:

(A) 4 and 6

(B) 5 and 6

(C) 6 and 7

(D) 6 and 8

CORRECT OPTION: C

[© Watch Free Video Solution on Doubtnut](#)

13 - 9525846

14 - 9525847

**JEE MAINS 10 APRIL 2019 - PAPER 1 SHIFT 2 - MEMORY
BASED - CHEMISTRY**

1g of same non volatile solute is added to 100g of two different solvents *A* and *B*. K_b of *A*:*B* = 1:5

Find out $\frac{(\Delta T_b)_A}{(\Delta T_b)_B}$

(A) 1:10

(B) 1:5

(C) 1:20

(D) 2:5

CORRECT OPTION: B

[© Watch Free Video Solution on Doubtnut](#)

15 - 9525848

**JEE MAINS 10 APRIL 2019 - PAPER 1 SHIFT 2 - MEMORY
BASED - CHEMISTRY**

What is the value of $\Delta H - \Delta U$ for the combustion of Heptane (*l*)

?

(A) $-4RT$

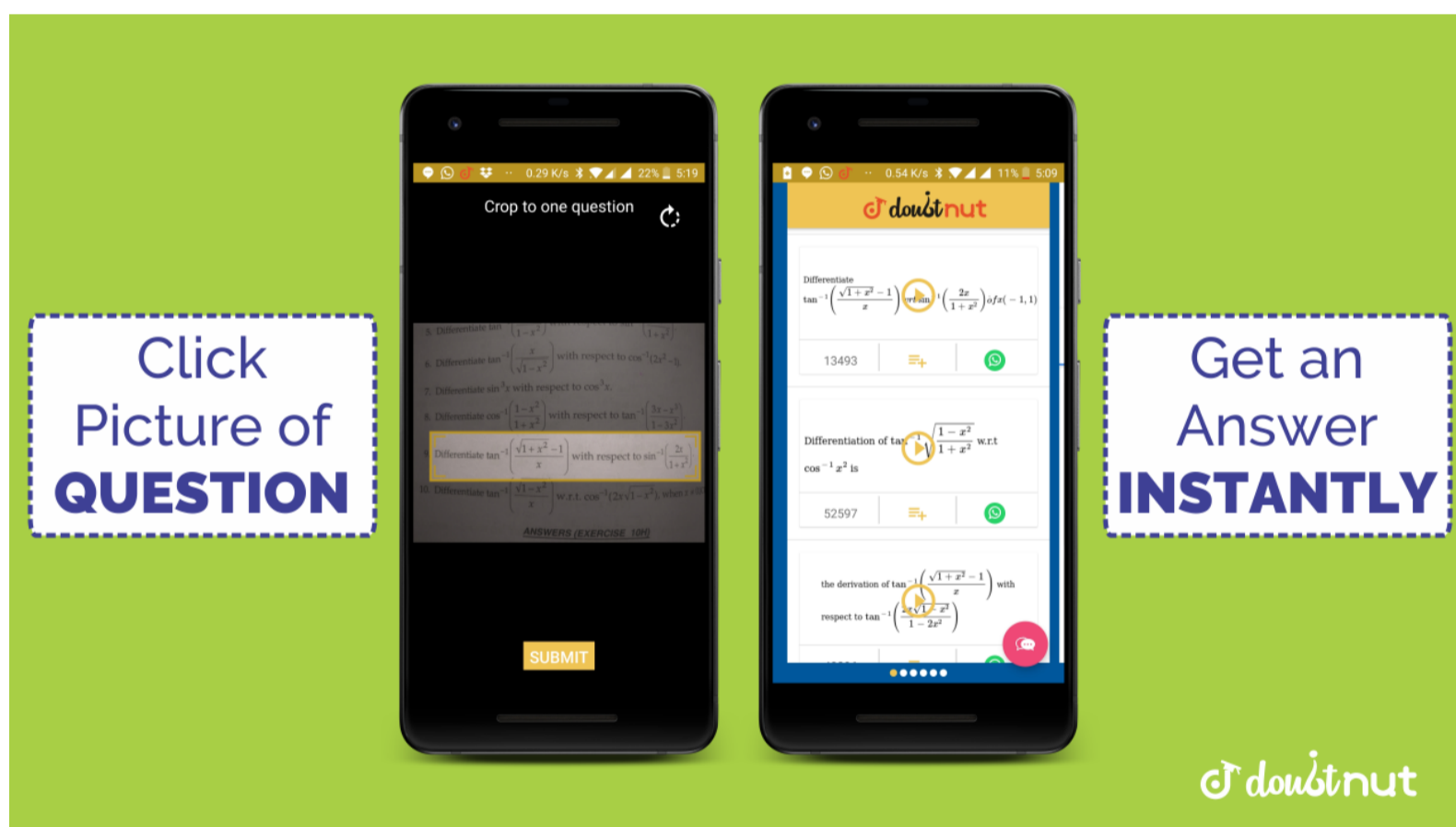
(B) $-3RT$

(C) $4RT$

(D) $3RT$

CORRECT OPTION: A

[Watch Free Video Solution on Doubtnut](#)



16 - 9525849

JEE MAINS 10 APRIL 2019 - PAPER 1 SHIFT 2 - MEMORY BASED - CHEMISTRY

Which of the following noble gas is not present in atmosphere ?

(A) He

(B) Ne

(C) Kr

(D) Rn

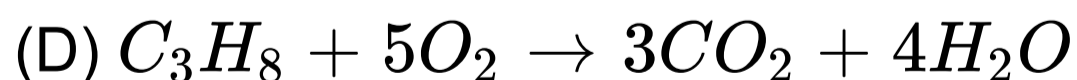
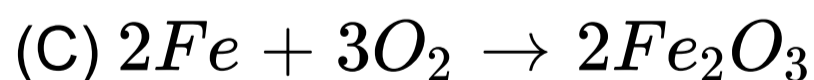
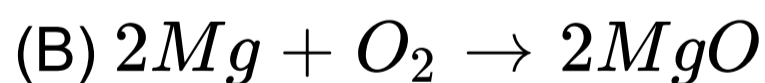
CORRECT OPTION: D

[© Watch Free Video Solution on Doubtnut](#)

17 - 9525850

**JEE MAINS 10 APRIL 2019 - PAPER 1 SHIFT 2 - MEMORY
BASED - CHEMISTRY**

In which of the following minimum amount of O_2 is required per gram of reactant



CORRECT OPTION: B

**JEE MAINS 10 APRIL 2019 - PAPER 1 SHIFT 2 - MEMORY
BASED - CHEMISTRY**

Find $CFSE$ of $[Fe(H_2O_6)]^{2+}$ and $[NiCl_4]^{2-}$

(A) $0.4\Delta_0$ & $- 0.8\Delta_t$

(B) $- 0.4\Delta_0$ & $- 1.6\Delta_t$

(C) $- 0.8\Delta_0$ & $- 0.4\Delta_t$

(D) $- 1.2\Delta_0$ & $- 1.2\Delta_t$

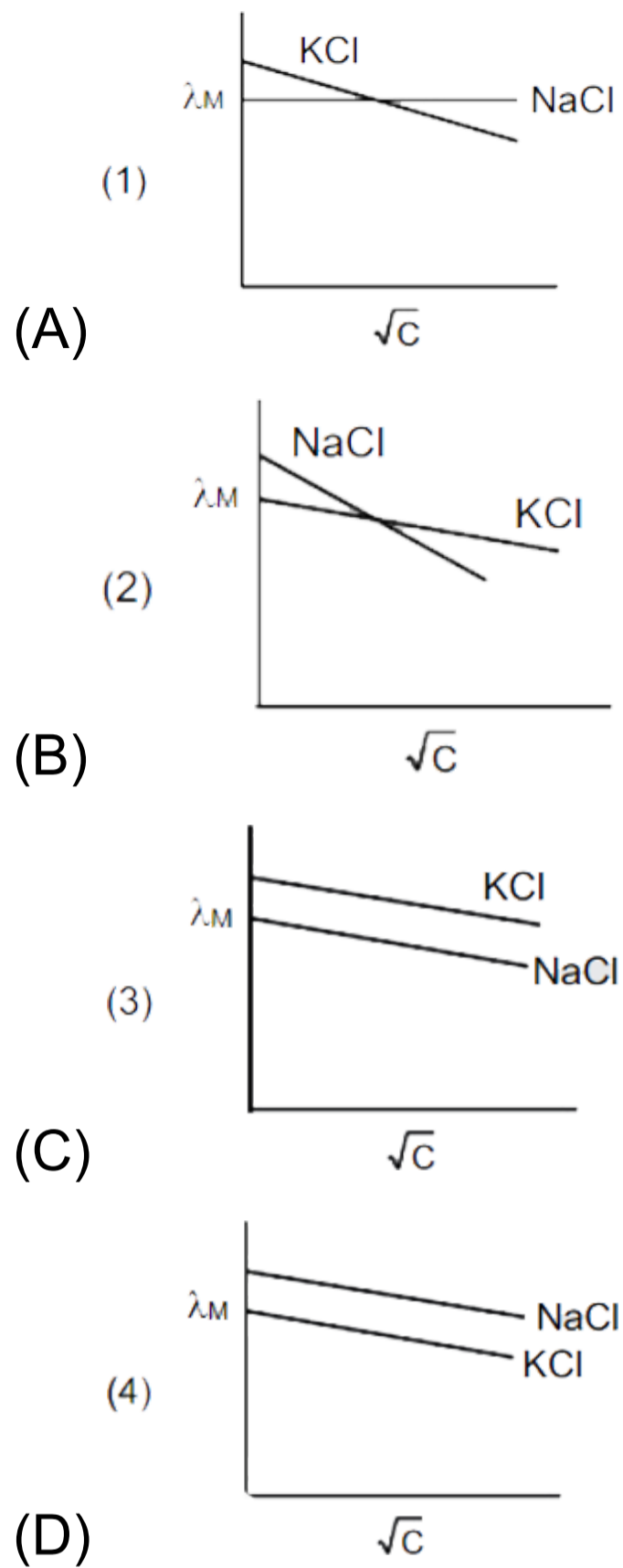
18 - 9525852

CORRECT OPTION: A

19 - 9525854

**JEE MAINS 10 APRIL 2019 - PAPER 1 SHIFT 2 - MEMORY
BASED - CHEMISTRY**

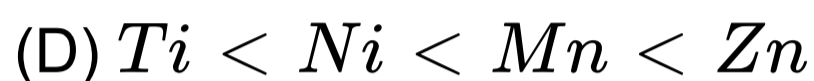
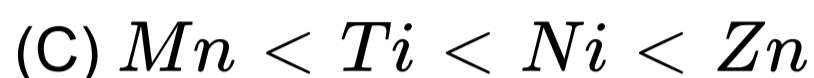
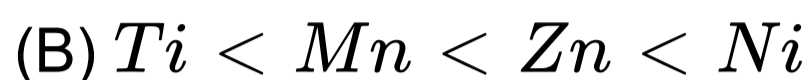
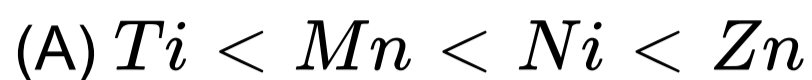
Which of the following graph is correct



CORRECT OPTION: C

[© Watch Free Video Solution on Doubtnut](#)

The correct order of 1st ionisation enthalpy is :



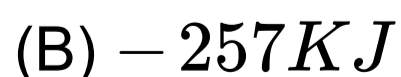
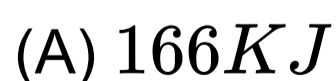
CORRECT OPTION: A

[© Watch Free Video Solution on Doubtnut](#)

21 - 9525856

JEE MAINS 10 APRIL 2019 - PAPER 1 SHIFT 2 - MEMORY BASED - CHEMISTRY

Rate constant for a reaction are 2.5×10^{-4} atm and 1 atm at temperature $327^\circ C$ and $527^\circ C$ respectively. Calculate activation energy in Kj .



(C) $120KJ$

(D) $70KJ$

CORRECT OPTION: A

[© Watch Free Video Solution on Doubtnut](#)

**JEE MAINS 10 APRIL 2019 - PAPER 1 SHIFT 2 - MEMORY
BASED - CHEMISTRY**

Pressure of an ideal gas is given by

$$P = P_0 = \left[1 - \frac{1}{2} \left(\frac{V_0}{V} \right)^2 \right]$$

(A) $\frac{P_0 V_0}{3R}$

(B) $\frac{5P_0 V_0}{4R}$

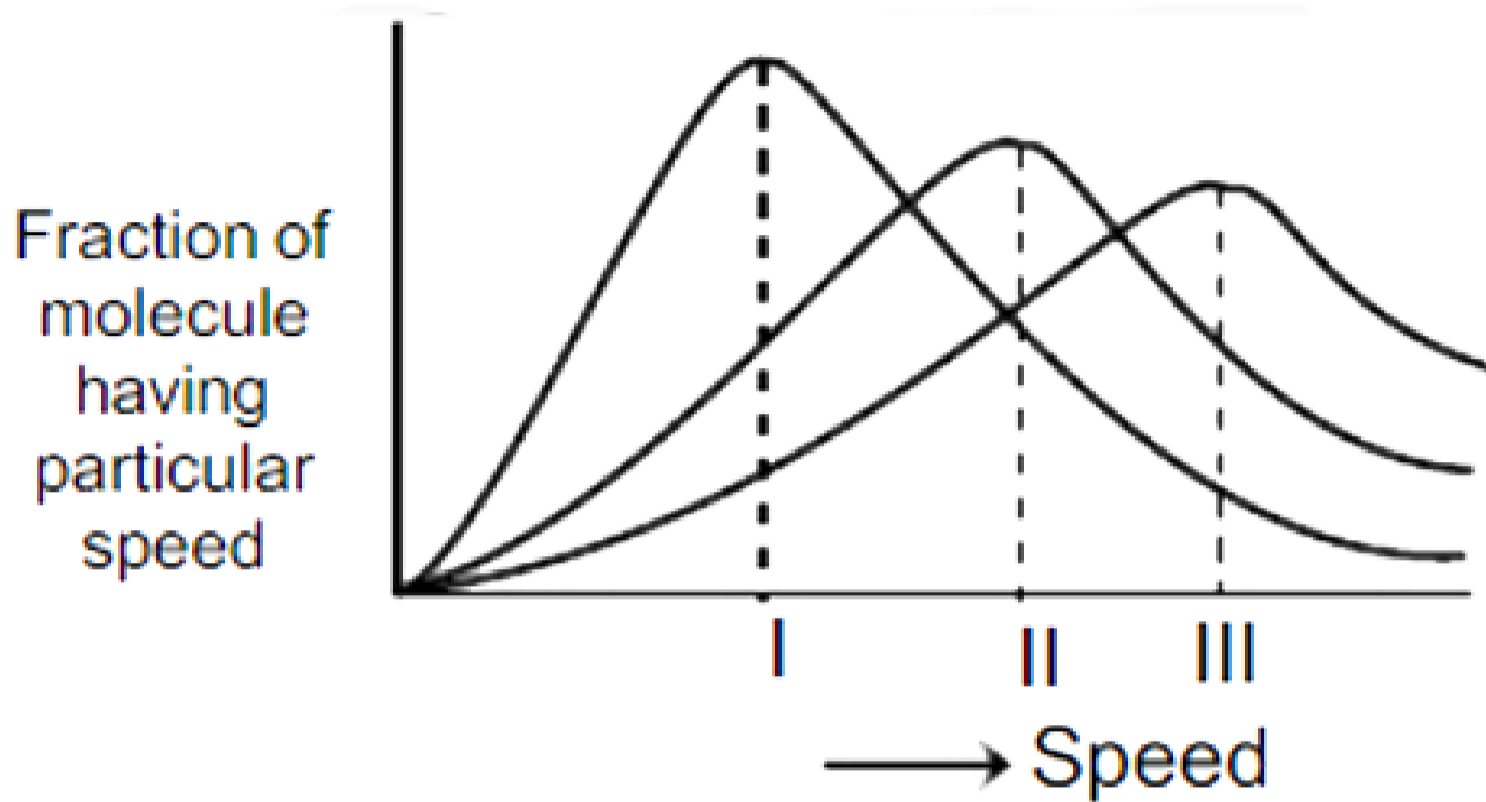
(C) $\frac{4P_0 V_0}{R}$

(D) $\frac{3P_0 V_0}{R}$

CORRECT OPTION: B

[© Watch Free Video Solution on Doubtnut](#)

**JEE MAINS 10 APRIL 2019 - PAPER 1 SHIFT 2 - MEMORY
BASED - CHEMISTRY**



Graph I, II & III are respectively.

- (A) N_2 at $300K$, H_2 at $300K$, O_2 at $400K$
 (B) O_2 at $400K$, N_2 at $300K$, H_2 at $300K$
 (C) H_2 at $300K$, N_2 at $300K$, O_2 at $400K$
 (D) N_2 at $300K$, O_2 at $400K$, H_2 at $300K$

CORRECT OPTION: B

© Watch Free Video Solution on Doubtnut



JEE MAINS 10 APRIL 2019 - PAPER 1 SHIFT 2 - MEMORY BASED - CHEMISTRY

P^H of $0.02M NH_4Cl$ solution is

- (A) 5.35
- (B) 4.35
- (C) 9.65
- (D) 10.65

CORRECT OPTION: A

[© Watch Free Video Solution on DoubtNut](#)

24 - 9525859

25 - 9525860

JEE MAINS 10 APRIL 2019 - PAPER 1 SHIFT 2 - MEMORY

BASED - CHEMISTRY

The water gas when used for the formation of methanol is called

- (A) Fuel gas
- (B) Syn gas
- (C) Natural gas
- (D) Producer gas

CORRECT OPTION: B

[📺 Watch Free Video Solution on Doubtnut](#)

26 - 9525862

JEE MAINS 10 APRIL 2019 - PAPER 1 SHIFT 2 - MEMORY BASED - CHEMISTRY

Which of the following is the correct order regarding catenation property.

- (A) $Si > C > S > P$
- (B) $C > Si > P > S$

(C) $C > Si > S > P$

(D) $C > S > Si > P$

CORRECT OPTION: C

[© Watch Free Video Solution on Doubtnut](#)

27 - 9525863

**JEE MAINS 10 APRIL 2019 - PAPER 1 SHIFT 2 - MEMORY
BASED - CHEMISTRY**

Which of the following statement is correct ?

(A) Brownian motion of colloidal particles does not depend on the size of particles.

(B) Adsorption is endothermic process.

(C) Colloidal medicines are better because of their small surface area.

(D) Electrophoresis can be used for ppt of lyophobic colloid.

CORRECT OPTION: D

📺 Watch Free Video Solution on Doubtnut

📲 Download Doubtnut to Ask Any Math Question By just a click

📲 Get A Video Solution For Free in Seconds

📲 Doubtnut Has More Than 1 Lakh Video Solutions

📲 Free Video Solutions of NCERT, RD Sharma, RS Aggarwal, Cengage (G.Tewani), Resonance DPP, Allen, Bansal, FIITJEE, Akash, Narayana, VidyaMandir

📲 Download Doubtnut Today

The advertisement features a red background. On the left, a smartphone displays a handwritten math problem: "X is a subset of Y", $X = \{5, 6, 7, 8, 9\}$, $Y = \{5, 6, 7, 8, 9\}$, and asks "What is Power Sets? (Explain with exam)". Below the phone is the Doubtnut logo. In the center, a yellow box with a dashed border contains the text "Get Answer just with a click!" and "doubtnut has more than 1 Lakh Video Solutions". Below this is the text "Update the App now!" and a "GET IT ON Google Play" button. On the right, another smartphone displays the app's interface with sections for "NCERT Questions" (including an integration problem), "Tips & Tricks" (including trigonometric substitution), and a bottom navigation bar with icons for Topics, Library, Ask, Forum, and Profile.