

Ques No.

Question

**JEE MAINS 10 APRIL 2019 - PAPER 1 SHIFT 1 -
MEMORY BASED - MATHS**

Number of 6 digits number divisible by 11 made by using the digits 0,1,2,5,7 and 9 without repetition is equal to

- (A) 55
(B) 60
(C) 62
(D) 120

CORRECT OPTION: B

[Watch Free Video Solution on Doubtnut](#)

1 - 9525801

2 - 9525802

JEE MAINS 10 APRIL 2019 - PAPER 1 SHIFT 1 -

MEMORY BASED - MATHS

Let $\Delta 1 = \begin{vmatrix} x & \sin \theta & \cos \theta \\ -\sin \theta & x & 1 \\ \cos \theta & 1 & x \end{vmatrix}$ and

$\Delta 2 = \begin{vmatrix} x & \sin 2\theta & \cos 2\theta \\ -\sin 2\theta & x & 1 \\ \cos 2\theta & 1 & x \end{vmatrix}$ then which of

following is/are true?

- (A) $\Delta 1 - \Delta 2 = x^3$
- (B) $\Delta 1 + \Delta 2 + 2x^3$
- (C) $\Delta 1 + \Delta 2 = x^3$
- (D) $\Delta 1 - \Delta 2 = 2x^3$

CORRECT OPTION: B

[© Watch Free Video Solution on Doubnut](#)

Let numbers a_1, a_2, \dots, a_{16} are in AP and
 $a_1 + a_4 + a_7 + a_{10} + a_{13} + a_{16} = 114$ then

$a_1 + a_5 + a_{12} + a_{16}$ is equal to

(A) 36

(B) 96

(C) 76

(D) 38

CORRECT OPTION: C

[© Watch Free Video Solution on Doubtnut](#)

4 - 9525804

**JEE MAINS 10 APRIL 2019 - PAPER 1 SHIFT 1 -
MEMORY BASED - MATHS**

In the expansion of $(1 + ax + bx^2)(1 - 3x)^{15}$, if
coefficient of x^2 and x^3 is 0 then ordered pair (a, b) is
equal to

(A) (28, 325)

(B) (18, 315)

(C) (28, 315)

(D) (18, 325)

CORRECT OPTION: C

[© Watch Free Video Solution on Doubtnut](#)

5 - 9525805

**JEE MAINS 10 APRIL 2019 - PAPER 1 SHIFT 1 -
MEMORY BASED - MATHS**

Let $z = \frac{(1+i)^2}{a-i}$, ($a > 0$) and $|z| = \sqrt{\frac{2}{5}}$ then z is

equal to

(A) $-\frac{1}{5} - \frac{3i}{5}$

(B) $\frac{1}{5} + \frac{3i}{5}$

$$(C) \frac{3}{5} - \frac{1}{5}i$$

$$(D) -\frac{3}{5} + \frac{i}{5}$$

CORRECT OPTION: A

[© Watch Free Video Solution on Doubtnut](#)

6 - 9525806

**JEE MAINS 10 APRIL 2019 - PAPER 1 SHIFT 1 -
MEMORY BASED - MATHS**

Let $\lim_{x \rightarrow 1} \frac{x^4 - 1}{x - 1} = \lim_{k \rightarrow k} \frac{x^3 - k^3}{x^2 - k^2}$ then value of k is

$$(A) \frac{2}{3}$$

$$(B) \frac{3}{2}$$

$$(C) \frac{4}{3}$$

$$(D) \frac{8}{3}$$

CORRECT OPTION: D

**JEE MAINS 10 APRIL 2019 - PAPER 1 SHIFT 1 -
MEMORY BASED - MATHS**

Value

of

$$\lim_{n \rightarrow \infty} \frac{(n+1)^{1/3} + (n+2)^{1/3} + \dots + (2n)^{1/3}}{n^{4/3}}$$

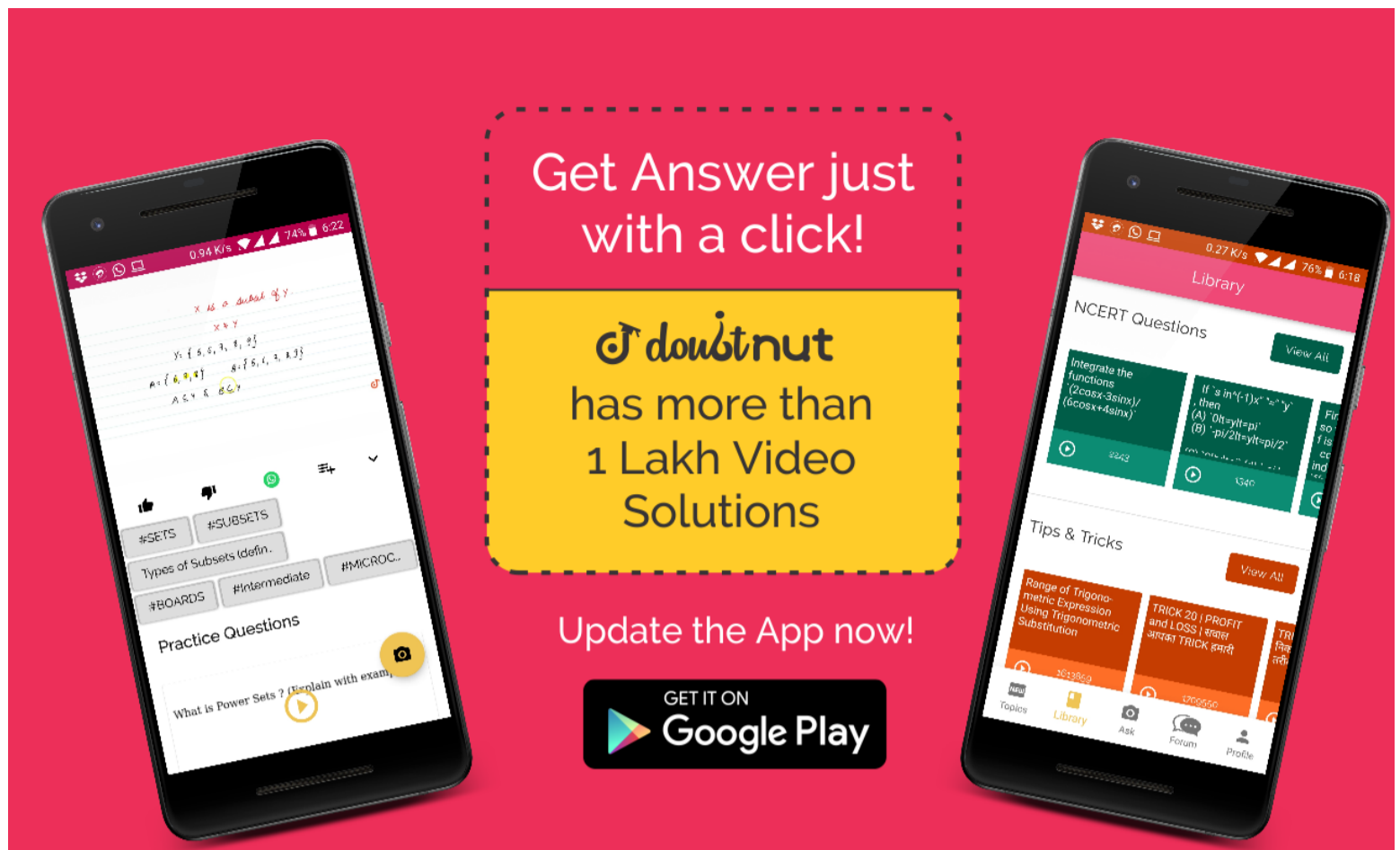
is

equal to

7 - 9525807

- (A) $\frac{1}{4} (2^{1/4} - 1)$
- (B) $\frac{3}{4} (2^{1/4} - 1)$
- (C) $\frac{3}{4} (2^{4/3} - 1)$
- (D) $\frac{3}{4} (2^{4/3} + 1)$

CORRECT OPTION: C



8 - 9525808

JEE MAINS 10 APRIL 2019 - PAPER 1 SHIFT 1 - MEMORY BASED - MATHS

if $y(x)$ is satisfy the differential equation

$$\frac{dy}{dx} = (\tan x - y)\sec^2 x \quad \text{and} \quad y(0) = 0. \quad \text{Then}$$

$$y = \left(-\frac{\pi}{4} \right) \text{ is equal to}$$

(A) $(e - 2)$

(B) $(2e - 1)$

(C) $(e^2 - 1)$

(D) $(e + 2)$

CORRECT OPTION: A

[© Watch Free Video Solution on Doubtnut](#)

9 - 9525809

**JEE MAINS 10 APRIL 2019 - PAPER 1 SHIFT 1 -
MEMORY BASED - MATHS**

If α and β are roots of the equation

$$x^2 + \sin \theta \cdot x - 2 \sin \theta = 0 \quad \text{then}$$

$$\frac{\alpha^{12} + \beta^{12}}{(\alpha^{-12} + \beta^{-12})(\alpha - \beta)^{24}}$$
 is equal to

- (A) $\frac{2^{24}}{(8 + \sin \theta)^{12}}$
- (B) $\frac{2^{12}}{(8 + \sin \theta)^{12}}$
- (C) $\frac{2^{12}}{(8 - \sin \theta)^{12}}$
- (D) $\frac{1}{2^{24}}$

CORRECT OPTION: B

**JEE MAINS 10 APRIL 2019 - PAPER 1 SHIFT 1 -
MEMORY BASED - MATHS**

From point $P(\beta, 0, \beta)$, where $(\beta \neq 0)$ A perpendicular is drawn on line $\frac{x}{1} = \frac{y-1}{0} = \frac{z+1}{-1}$ If length of perpendicular is $\sqrt{\frac{3}{2}}$ then value of β is

10 - 9525811

(A) -1

(B) -2

(C) 1

(D) 2

CORRECT OPTION: A

11 - 9525812

**JEE MAINS 10 APRIL 2019 - PAPER 1 SHIFT 1 -
MEMORY BASED - MATHS**

Circle is tangent to the line $y = x$ at the point $P(1, 1)$ and passes through point $(1, -3)$ find the radius of the circle

(A) $\sqrt{2}$

(B) $2\sqrt{2}$

(C) $\frac{1}{\sqrt{2}}$

(D) $3\sqrt{2}$

CORRECT OPTION: B

[📺 Watch Free Video Solution on Doubtnut](#)

12 - 9525813

**JEE MAINS 10 APRIL 2019 - PAPER 1 SHIFT 1 -
MEMORY BASED - MATHS**

If common chord of circles $x^2 + y^2 + 5kx + 2y + k = 0$

and $x^2 + y^2 + kx + \frac{y}{2} + \frac{1}{2} = 0$ is $4x - 5y - k = 0$

then number of values of k is

(A) 0

(B) 1

(C) 2

(D) 3

CORRECT OPTION: C

[© Watch Free Video Solution on Doubtnut](#)

13 - 9525814

**JEE MAINS 10 APRIL 2019 - PAPER 1 SHIFT 1 -
MEMORY BASED - MATHS**

Region formed by $|x - y| \leq 2$ and $|x + y| \leq 2$ is

(A) Rhombus of side is 2

(B) Square of area is 16

(C) Rhombus of area is $8\sqrt{2}$

(D) Square of side is $2\sqrt{2}$

CORRECT OPTION:

[Watch Free Video Solution on Doubtnut](#)

JEE MAINS 10 APRIL 2019 - PAPER 1 SHIFT 1 - MEMORY BASED - MATHS

$$\text{if } f(x) = \begin{cases} \frac{\sin(p+1)x + \sin x}{x} & x < 0 \\ x & x = 0 \\ \frac{\sqrt{x^2+x} - \sqrt{x}}{x^{3/2}} & x > 0 \end{cases} \text{ is continuous at}$$

$x = 0$ then (p, q) is

- (A) $\left(-\frac{1}{2}, -\frac{3}{2}\right)$
- (B) $\left(\frac{3}{2}, \frac{1}{2}\right)$
- (C) $\left(\frac{1}{2}, \frac{3}{2}\right)$
- (D) $\left(-\frac{3}{2}, \frac{1}{2}\right)$

14 - 9525815

CORRECT OPTION: D

[Watch Free Video Solution on Doubtnut](#)

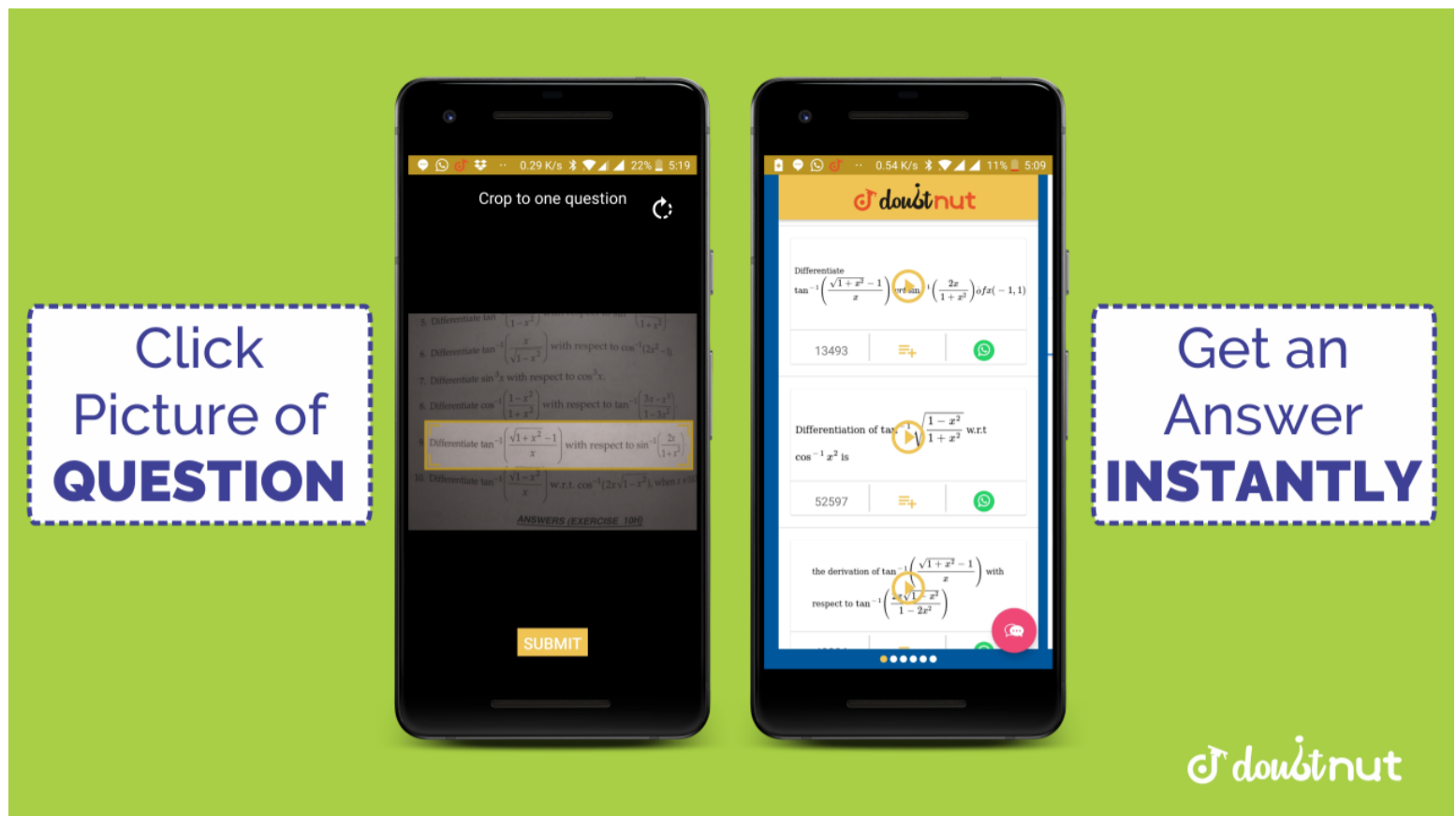
JEE MAINS 10 APRIL 2019 - PAPER 1 SHIFT 1 - MEMORY BASED - MATHS

There are two family each having two children. If there are at least two girls among the children, find the probability that all children are girls

- (A) $\frac{1}{9}$
(B) $\frac{1}{10}$
(C) $\frac{1}{11}$
(D) $\frac{1}{12}$

CORRECT OPTION: C

[👁 Watch Free Video Solution on DoubtNut](#)



16 - 9525817

JEE MAINS 10 APRIL 2019 - PAPER 1 SHIFT 1 - MEMORY BASED - MATHS

There are three points A, B and C horizontal plane, such that $AB = AC = 100\text{m}$ a vertically tower is placed on the midpoint of BC, such that angle of elevation of the top of the tower from A is $\cot^{-1}(3\sqrt{2})$ and that from B is $\operatorname{cosec}^{-1}(2\sqrt{2})$ then the height of the tower is

- (A) 25
- (B) 10

(C) $\frac{100}{\sqrt{3}}$

(D) 20

CORRECT OPTION: D

[© Watch Free Video Solution on Doubtnut](#)

17 - 9525818

**JEE MAINS 10 APRIL 2019 - PAPER 1 SHIFT 1 -
MEMORY BASED - MATHS**

if

$$\int \frac{dx}{(x^2 - 2x + 10)^2} = A \left(\tan^{-1} \left(\frac{x-1}{3} \right) + \frac{f(x)}{x^2 - 2x + 10} \right)$$

then find A and f(x).

(A) $A = \frac{1}{54}, f(x) = 3(x-1)$

(B) $A = \frac{1}{54}, f(x) = 9(x-1)^2$

$$(C) A = \frac{1}{27}, f(x) = 9(x - 1)^2$$

$$(D) A = \frac{1}{81}, f(x) = 3(x - 1)$$

CORRECT OPTION: A

[© Watch Free Video Solution on Doubtnut](#)

18 - 9525819

**JEE MAINS 10 APRIL 2019 - PAPER 1 SHIFT 1 -
MEMORY BASED - MATHS**

If equation of tangent to ellipse $\frac{x^2}{a^2} + \frac{y^2}{b^2} = 1$ at $\left(3, \frac{-9}{2}\right)$ is $x - 2y = 12$. Then length of latus rectum is

(A) 9

(B) $2\sqrt{2}$

(C) $3\sqrt{2}$

(D) $2\sqrt{3}$

CORRECT OPTION: A

**JEE MAINS 10 APRIL 2019 - PAPER 1 SHIFT 1 -
MEMORY BASED - MATHS**

Marks	2	3	5	7
No .of students	$(x + 1)^2$	$2x - 5$	$x^2 - 3x$	x

The marks of 20 students in an examination are given in the following table. Average marks of these student is:

19 - 9525820

- (A) 2.6
- (B) 2.7
- (C) 2.8
- (D) 2.9

CORRECT OPTION: C

20 - 9525821

MEMORY BASED - MATHS

If $f(x) = e^x - x$ and $g(x) = x^2 - x$. The the interval in which fog(x) is increasing is

- (A) $(0, 1/2) \cup (1, \infty)$
- (B) $(-1/2, 0) \cup (1, \infty)$
- (C) $(-1, \infty)$
- (D) $(-1/2, 0)$

CORRECT OPTION: A

[© Watch Free Video Solution on Doubtnut](#)

21 - 9525822

JEE MAINS 10 APRIL 2019 - PAPER 1 SHIFT 1 - MEMORY BASED - MATHS

A hyperbola has center at origin and passing through $(4 - 2\sqrt{3})$ and having directrix $5x = 4\sqrt{5}$ then eccentricity of hyperbola (e) satisfy the equation.

$$(A) 4e^4 - 24e^2 + 35 = 0$$

$$(B) 4e^4 + 24e^2 - 35 = 0$$

$$(C) 4e^4 - 24e^2 - 35 = 0$$

$$(D) 4e^4 + 24e^2 + 35 = 0$$

CORRECT OPTION: A

[© Watch Free Video Solution on Doubtnut](#)

22 - 9525823

**JEE MAINS 10 APRIL 2019 - PAPER 1 SHIFT 1 -
MEMORY BASED - MATHS**

Let $S = 3 + \frac{5(1^3 + 2^3)}{1^2 + 2^2} + \frac{7(1^3 + 2^3 + 3^3)}{1^2 + 2^2 + 3^2} + \dots$ then

the sum up to 10 terms is

(A) 220

(B) 660

(C) 330

(D) 1320

CORRECT OPTION: B

[📺 Watch Free Video Solution on Doubtnut](#)

23 - 9525824

**JEE MAINS 10 APRIL 2019 - PAPER 1 SHIFT 1 -
MEMORY BASED - MATHS**

$$f(x) = x^2, x \in R$$

$$S \in [0, 4]$$

$$g(A) = \{x : x \in R, f(x) \in A\} \text{ where } A \subset R$$

which one is incorrect (where $P \subset Q$ means P is subset of Q)

(A) $f(g(s)) \neq f(s)$

(B) $f(g(s)) = s$

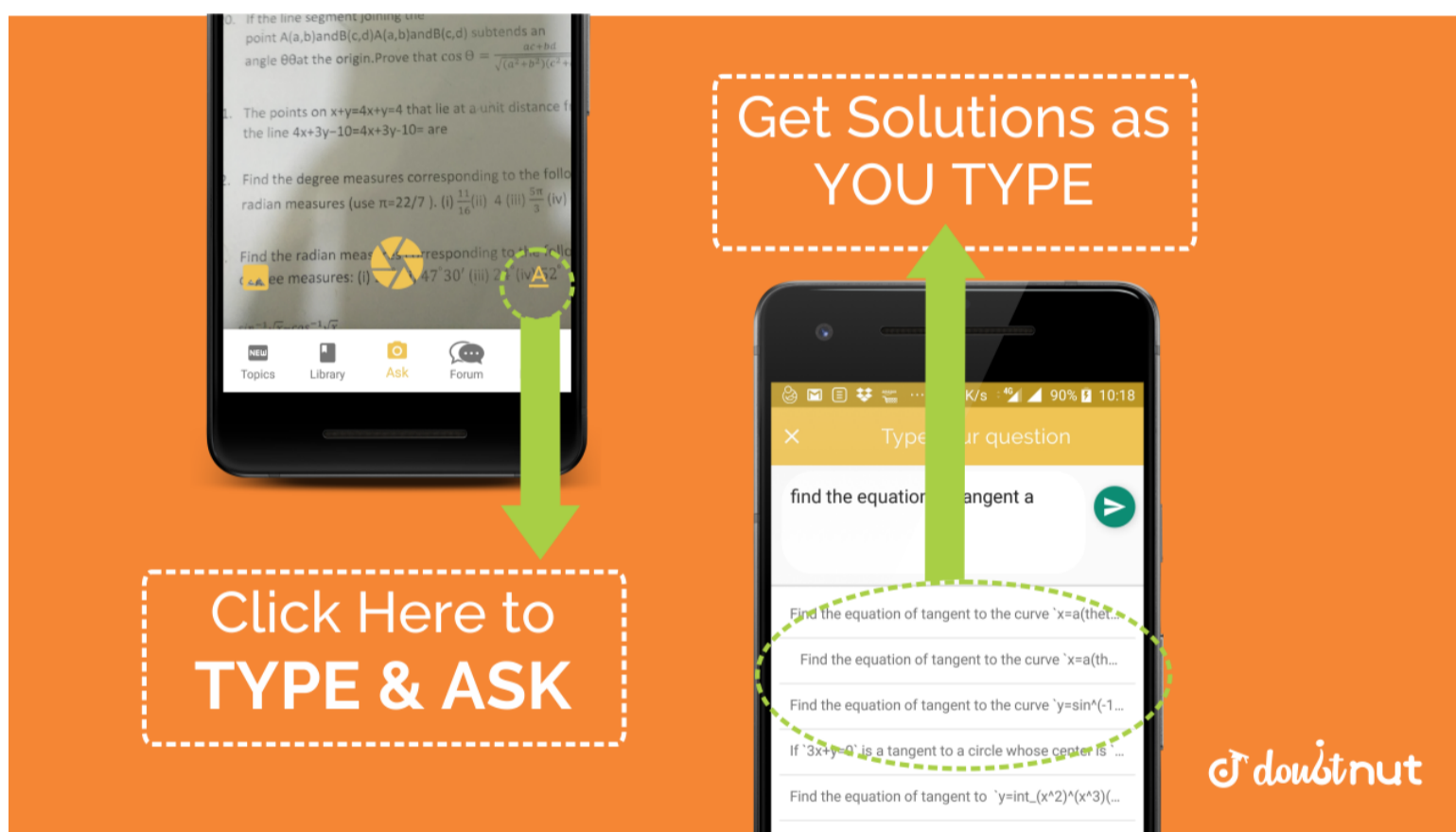
$$(C) g(f(s)) = g(s)$$

$$(D) g(f(s)) \neq s$$

CORRECT OPTION: C

📺 Watch Free Video Solution on Doubtnut

 **doubt**nut
पढ़ना हुआ आसान



Get Solutions as YOU TYPE

Click Here to TYPE & ASK

📺 Watch Free Video Solution on Doubtnut

24 - 9525825

JEE MAINS 10 APRIL 2019 - PAPER 1 SHIFT 1 - MEMORY BASED - MATHS

let (i)

$$(p \vee q) \wedge (p \vee \sim q), (ii) (p \wedge q) \wedge (q \vee \sim q), (iii)$$

$$(p \vee q) \wedge (p \vee \sim q), (iv) (p \vee q) \vee (p \wedge \sim q)$$

then which one is tautology

(A) (i)

(B) (ii)

(C) (iii)

(D) (iv)

CORRECT OPTION: A

[© Watch Free Video Solution on Doubtnut](#)

25 - 9525826

**JEE MAINS 10 APRIL 2019 - PAPER 1 SHIFT 1 -
MEMORY BASED - MATHS**

Value of $\int_0^{2\pi} [\sin 2x(1 + \cos 3x)]dx$ (where $[.]$ denotes
greatest integer function)

(A) -2π

(B) π

(C) 2π

(D) $-\pi$

CORRECT OPTION: D

[📺 Watch Free Video Solution on Doubtnut](#)

26 - 9525827

**JEE MAINS 10 APRIL 2019 - PAPER 1 SHIFT 1 -
MEMORY BASED - MATHS**

Let the equations
 $x + y + z = 5$, $x + 2y + 2z = 6$, $x + 3y + \lambda z = \mu$
have infinite solutions then the value of $\lambda + \mu$ is

(A) 7

(B) 10

(C) 11

(D) $1/2$

CORRECT OPTION: B

**JEE MAINS 10 APRIL 2019 - PAPER 1 SHIFT 1 -
MEMORY BASED - MATHS**

A $(3, 0, -1)$, $B(2, 10, 6)$ and $(1, 2, 1)$ are the vertices of a triangle. M is the mid point of the line segment joining AC and G is a point on line segment BM dividing 2:1 ratio internally find $\cos(\angle GOA)$

27 - 9525829

- (A) $\frac{2}{\sqrt{5}}$
(B) $\frac{1}{\sqrt{15}}$
(C) $\frac{1}{\sqrt{10}}$
(D) $\frac{1}{\sqrt{3}}$

CORRECT OPTION: B

**JEE MAINS 10 APRIL 2019 - PAPER 1 SHIFT 1 -
MEMORY BASED - MATHS**

Given a point $P(0, -1, -3)$ and the image of P in the plane $3 - y + 4z - 2 = 0$ is Q. Point R is $(3, -1, -2)$

find the area of $\triangle PQR$

- (A) $\frac{\sqrt{91}}{13}$
(B) $\frac{\sqrt{91}}{2}$
(C) $\sqrt{\frac{91}{2}}$
(D) $\sqrt{91}$

CORRECT OPTION: B

[📺 Watch Free Video Solution on Doubtnut](#)

**JEE MAINS 10 APRIL 2019 - PAPER 1 SHIFT 1 -
MEMORY BASED - MATHS**

if $\frac{2\sqrt{\sin^2 x - 2\sin x + 5}}{4^{\sin^2 y}} \leq 1$ then which option is correct.

(A) $2\sin x = \sin y$

(B) $|\sin x| = \sin y$

(C) $\sin x = |\sin y|$

(D) $\sin x = 2\sin y$

CORRECT OPTION: C

[© Watch Free Video Solution on Doubtnut](#)

30 - 9525832

**JEE MAINS 10 APRIL 2019 - PAPER 1 SHIFT 1 -
MEMORY BASED - MATHS**

A function $f(x)$ is differentiable at $x = c (c \in R)$. Let $g(x) = |f(x)|$, $f(c) = 0$ then

(A) $g(x)$ is not differentiable at $x = c$

(B) for $g(x)$ to be differentiable at c , $f'(c) = 0$

(C) for $g(x)$ to be non-differentiable at c , $f'(c) = 0$

(D) none of these

CORRECT OPTION: B

[📺 Watch Free Video Solution on Doubnut](#)

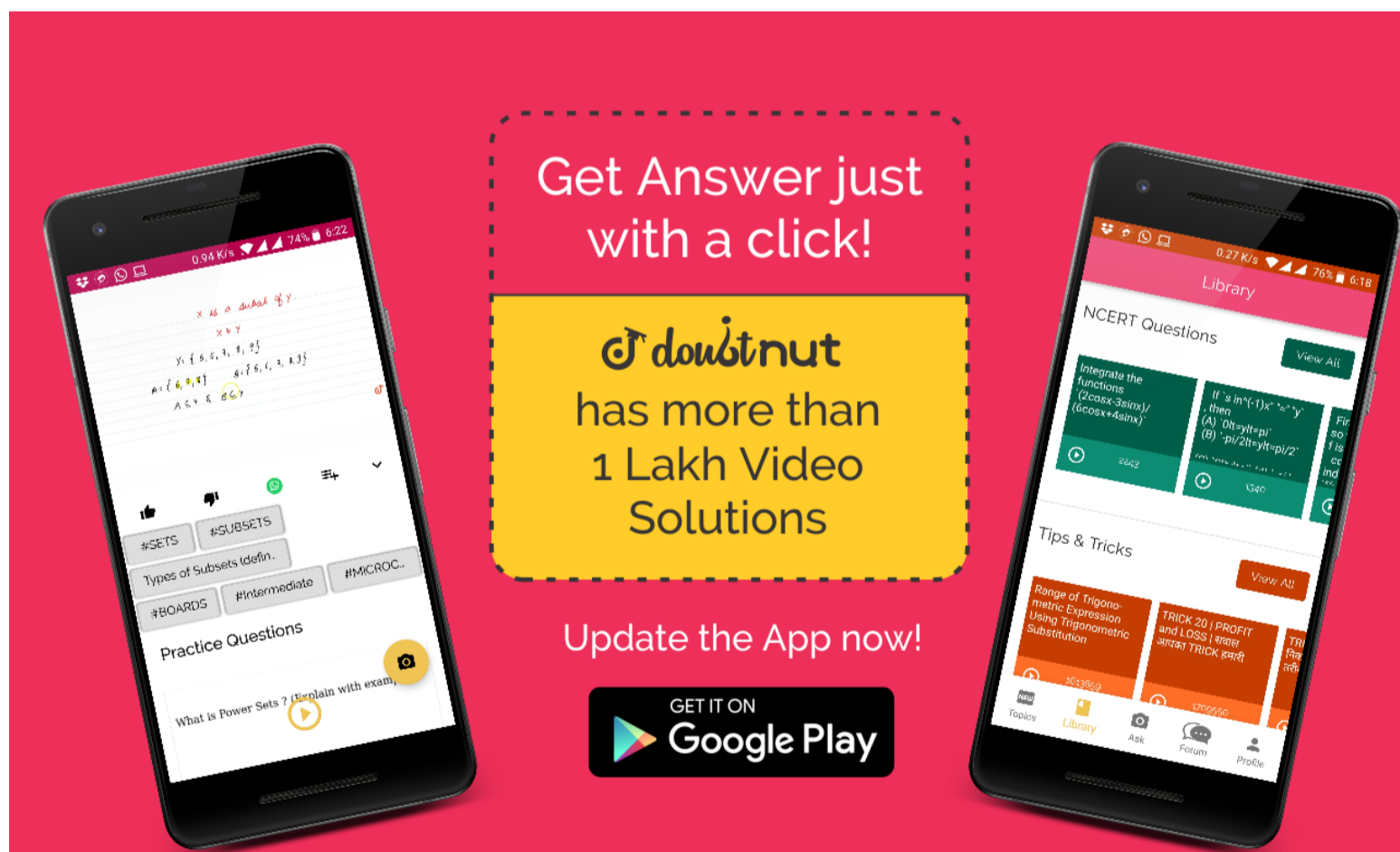
📌 Download Doubnut to Ask Any Math Question By just a click

📌 Get A Video Solution For Free in Seconds

📌 Doubnut Has More Than 1 Lakh Video Solutions

📌 Free Video Solutions of NCERT, RD Sharma, RS Aggarwal, Cengage (G.Tewani), Resonance DPP, Allen, Bansal, FIITJEE, Akash, Narayana, VidyaMandir

📌 Download Doubnut Today



Get Answer just with a click!

doubnut has more than 1 Lakh Video Solutions

Update the App now!

GET IT ON Google Play

The advertisement features two smartphones. The left phone displays a math problem: "x is a subset of y" with sets $X = \{1, 2, 3, 4, 5\}$ and $Y = \{1, 2, 3, 4, 5, 6, 7, 8, 9, 10\}$. Below the problem are tags like #SETS, #SUBSETS, and #MICRO... The right phone shows a "Library" screen with "NCERT Questions" and "Tips & Tricks" sections. A central yellow box contains the text "Get Answer just with a click!" and "doubnut has more than 1 Lakh Video Solutions". Below this is a "Update the App now!" message and a "GET IT ON Google Play" button.