

Ques No.

Question

**JEE MAINS 09 APRIL 2019 - PAPER 1 SHIFT 1 -
MEMORY BASED - PHYSICS**

A man can swim in still water at $4m/s$ river is flowing at $2m/s$ the angle with downstream at which he should swim to cross the river minimum drift is

1 - 9425996

(A) 120° (B) 150° (C) 30° (D) 60° **CORRECT OPTION: A**[Watch Free Video Solution on Doubtnut](#)

2 - 9425997

JEE MAINS 09 APRIL 2019 - PAPER 1 SHIFT 1 -

MEMORY BASED - PHYSICS

An object A of mass m with initial velocity u collides with a stationary object B after elastic collision A moves with $\frac{u}{4}$ calculate mass of B.

- (A) $\frac{7m}{5}$
(B) $\frac{3m}{5}$
(C) $\frac{9m}{5}$
(D) $\frac{4m}{5}$

CORRECT OPTION: B

[© Watch Free Video Solution on Doubtnut](#)

3 - 9425999

JEE MAINS 09 APRIL 2019 - PAPER 1 SHIFT 1 - MEMORY BASED - PHYSICS

A disc of moment of inertia I is rotating due to external torque. Its kinetic energy is equal to $K\theta^2$. Where K is the

positive constant. Its angular acceleration at an angle θ will be:

(A) $\frac{7K\theta}{I}$

(B) $\frac{6K\theta}{I}$

(C) $\frac{2K\theta}{I}$

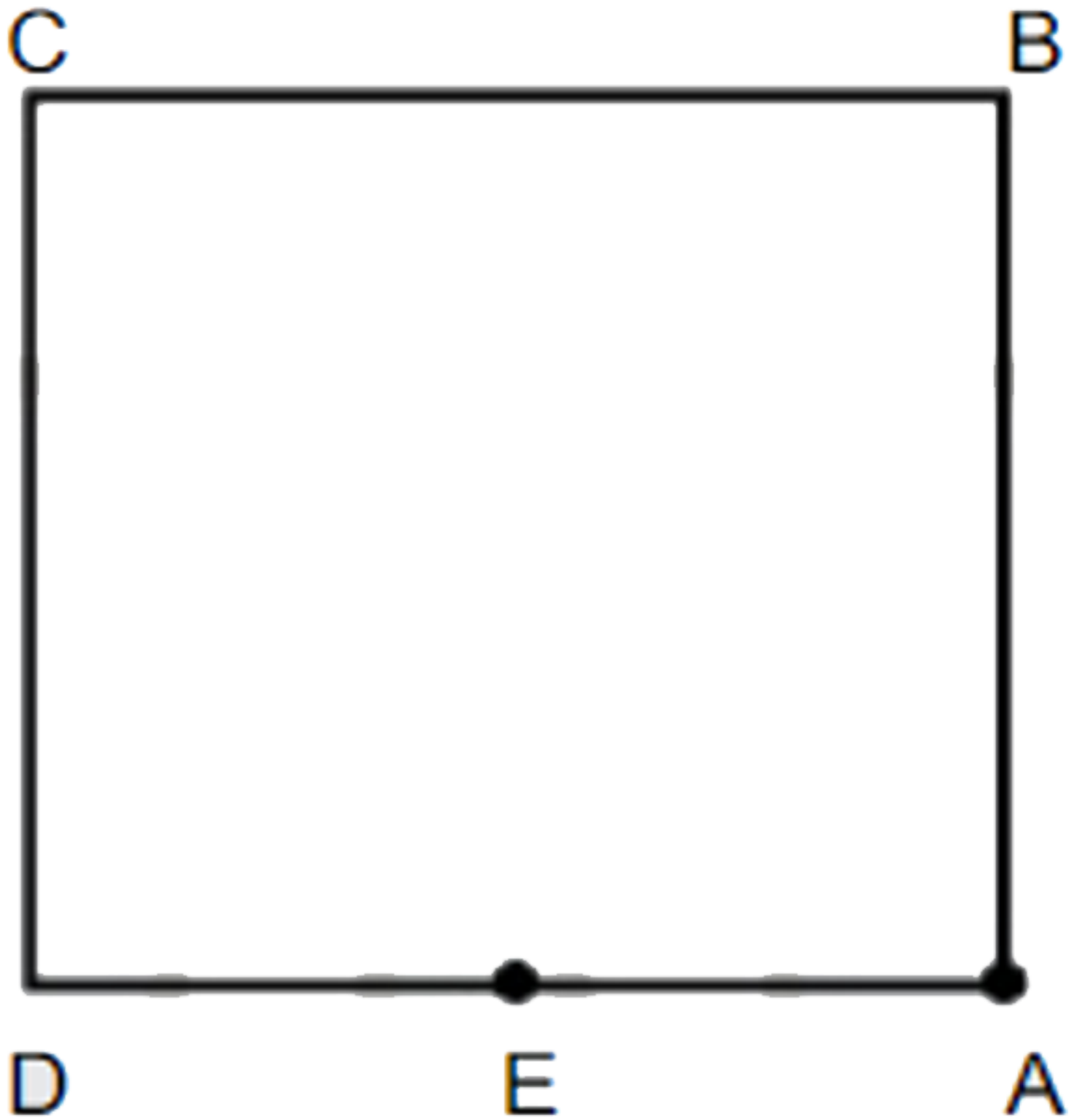
(D) $\frac{4K\theta}{I}$

CORRECT OPTION: C

[📺 Watch Free Video Solution on Doubtnut](#)

4 - 9426000

**JEE MAINS 09 APRIL 2019 - PAPER 1 SHIFT 1 -
MEMORY BASED - PHYSICS**



A wire of length l and resistance R is bent in form of square form of square as shown in figure. If E is a mid point of side D,A , then equivalent resistance between points E & A is:

- (A) $\frac{7R}{64}$
- (B) $\frac{7R}{32}$

- (C) $\frac{7R}{16}$
(D) $\frac{7R}{8}$

CORRECT OPTION: A

[© Watch Free Video Solution on Doubtnut](#)

5 - 9426001

**JEE MAINS 09 APRIL 2019 - PAPER 1 SHIFT 1 -
MEMORY BASED - PHYSICS**

In amplitude modulation equation of messenger wave $A_o \sin \omega_m t$ and carrier wave $A_c \cos \omega_c t$ the equation of amplitude modulated wave is

(A)

$$x = A_c \cos \omega_c t + \frac{A_0}{2} [\sin(\omega_m + \omega_c)t + \sin(\omega_c - \omega_m)t]$$

(B)

$$x = A_c \cos \omega c t - \frac{A_0}{2} [\sin(\omega m + \omega c)t + \sin(\omega c - \omega m)t]$$

(C)

$$x = A_c \sin \omega c t + \frac{A_0}{4} [\sin(\omega m + \omega c)t + \sin(\omega c - \omega m)t]$$

(D)

$$x = A_c \sin \omega c t + \frac{A_0}{4} [\sin(\omega m + \omega c)t + \sin(\omega c - \omega m)t]$$

CORRECT OPTION: A

[© Watch Free Video Solution on Doubtnut](#)

6 - 9426002

**JEE MAINS 09 APRIL 2019 - PAPER 1 SHIFT 1 -
MEMORY BASED - PHYSICS**

For a common emitter transistor working in active state,
following data is given $R_L = 1K\Omega$ $V_{in} = 10mV$

$\Delta I_B = 15\mu A$, $\Delta I_C = 3mA$. The input resistance r_i & voltage gain A_V for the transistor is

- (A) 200, $0.67K\Omega$
- (B) 300, $0.67K\Omega$
- (C) 200, $0.1K\Omega$
- (D) 300, $1K\Omega$

CORRECT OPTION: B

[📺 Watch Free Video Solution on Doubtnut](#)

7 - 9426004

**JEE MAINS 09 APRIL 2019 - PAPER 1 SHIFT 1 -
MEMORY BASED - PHYSICS**

A capacitor of capacitance $5\mu F$ is charged with $5\mu C$ charge its capacitance is changed to $2\mu F$ by some external agent. The work done by external agent is

(A) $40.5 \times 10^{-7} J$

(B) $42.5 \times 10^{-7} J$

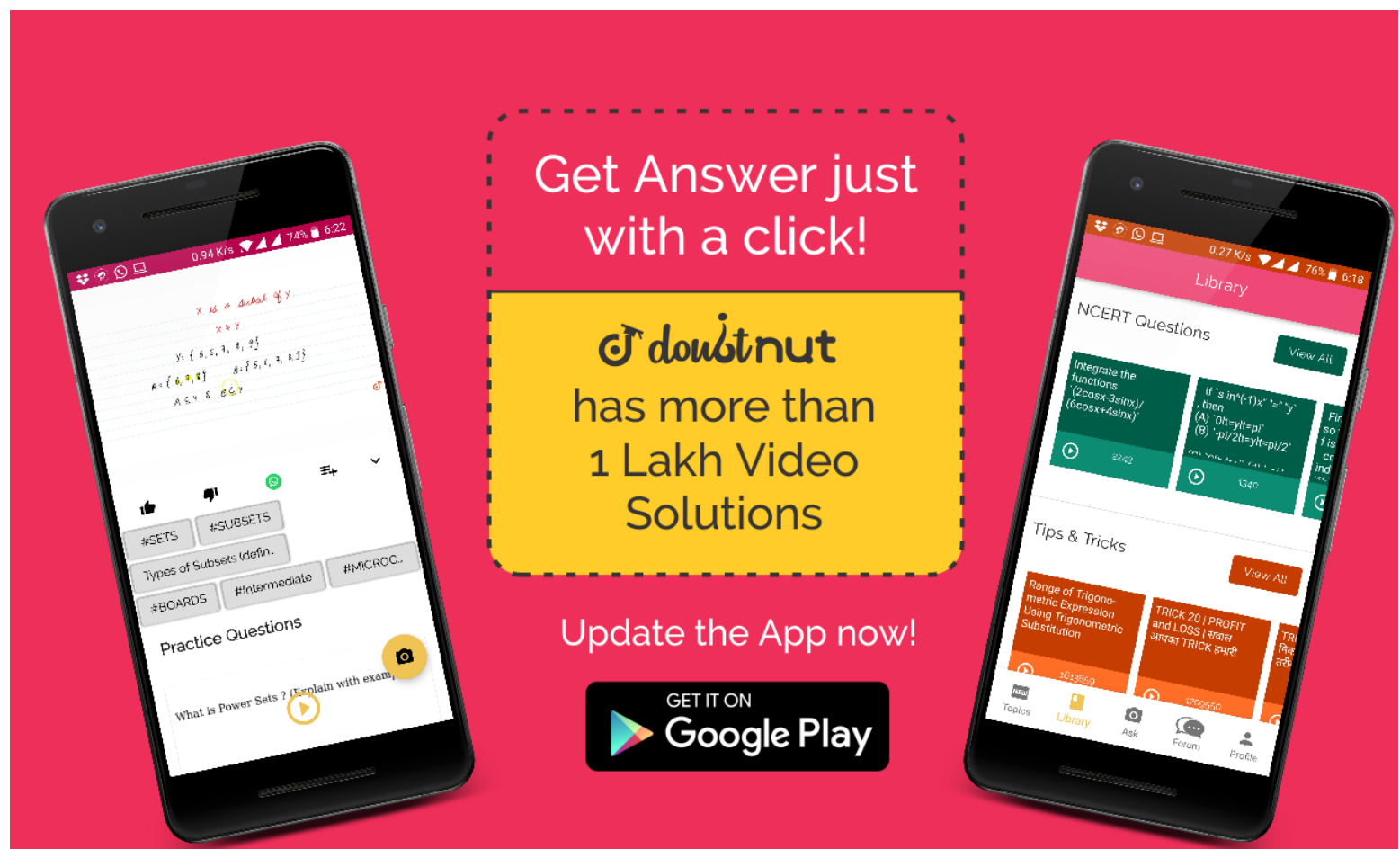
(C) $37.5 \times 10^{-7} J$

(D) $30.5 \times 10^{-7} J$


CORRECT OPTION: C

[Watch Free Video Solution on Doubnut](#)



पढ़ना हुआ आसान



Get Answer just with a click!

 **doubnut**
has more than
1 Lakh Video
Solutions

Update the App now!

GET IT ON


8 - 9426006

**JEE MAINS 09 APRIL 2019 - PAPER 1 SHIFT 1 -
MEMORY BASED - PHYSICS**

The equation of a sound wave at $0^\circ C$ is given as $y = A \sin(1000t - 3x)$ the speed at some other temperature T is given $336m / s$ the value of T is

- (A) $4.4^\circ C$
- (B) $11^\circ C$
- (C) $12^\circ C$
- (D) $7^\circ C$

CORRECT OPTION: A

[© Watch Free Video Solution on Doubtnut](#)

9 - 9426008

**JEE MAINS 09 APRIL 2019 - PAPER 1 SHIFT 1 -
MEMORY BASED - PHYSICS**

A solid sphere of radius a and mass m is surrounded by cocentric spherical shell of thickness $2a$ and mass $2m$ the gravitational field at a distance $3a$ from their centres is

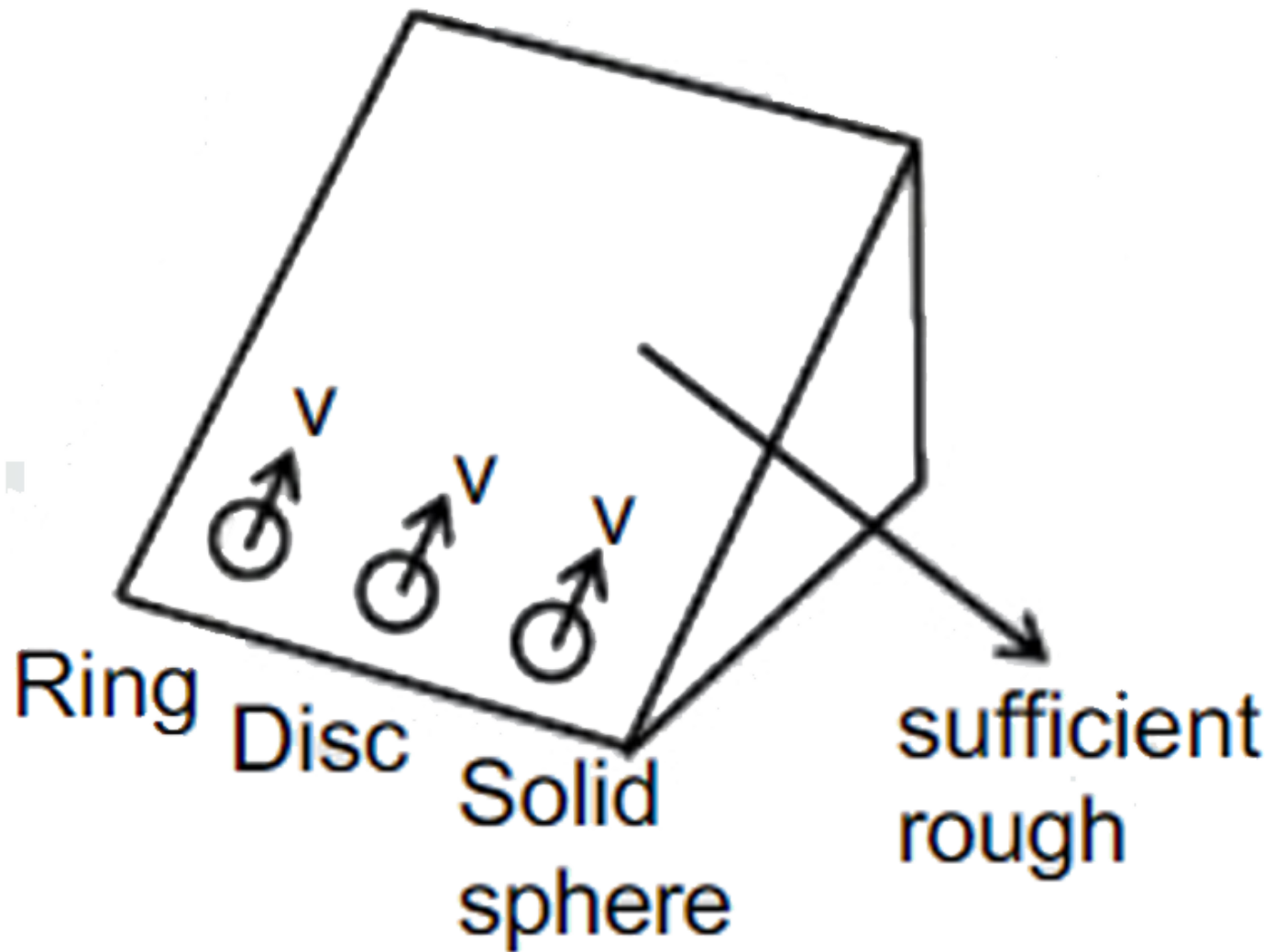
- (A) $\frac{Gm}{a^2}$
- (B) $\frac{Gm}{3a^2}$
- (C) $\frac{Gm}{5a^2}$
- (D) $\frac{Gm}{4a^2}$

CORRECT OPTION: B

[📺 Watch Free Video Solution on Doubtnut](#)

10 - 9426009

**JEE MAINS 09 APRIL 2019 - PAPER 1 SHIFT 1 -
MEMORY BASED - PHYSICS**



A ring disc and solid sphere are having same speed of COM at the bottom of incline as shown in the figure. If surface of incline is sufficiently rough. The ratio of height attend by ring, disc and sphere is

- (A) 15 : 13 : 20
- (B) 20 : 15 : 14
- (C) 14 : 20 : 15
- (D) 7 : 5 : 15

CORRECT OPTION: B

[© Watch Free Video Solution on Doubtnut](#)

**JEE MAINS 09 APRIL 2019 - PAPER 1 SHIFT 1 -
MEMORY BASED - PHYSICS**

Considering all type of *D. O. F* for HCl molecule of mass m having V_{rms} as \bar{v} . Then the temperature of gas will be

- (A) $\frac{m\bar{v}^2}{3k}$
(B) $\frac{m\bar{v}^2}{5k}$
(C) $\frac{m\bar{v}^2}{7k}$
(D) $\frac{m\bar{v}^2}{6k}$

11 - 9426010

CORRECT OPTION: A

[© Watch Free Video Solution on Doubtnut](#)

12 - 9426011

**JEE MAINS 09 APRIL 2019 - PAPER 1 SHIFT 1 -
MEMORY BASED - PHYSICS**

The time period of a simple pendulum in air is T . Now the pendulum is submerged in a liquid of density $\frac{\rho}{16}$ where ρ is density of the bob of the pendulum. The new time period of oscillation is.

(A) $\frac{4}{\sqrt{15}}T$

(B) $\sqrt{\frac{4}{15}}T$

(C) $\sqrt{\frac{15}{4}}T$

(D) $\frac{\sqrt{15}}{3}T$

CORRECT OPTION: A

[© Watch Free Video Solution on Doubtnut](#)

A solenoid has fixed N number of turns and fixed radius a its length is given by l which can be varied its self-inductance is proportional to

(A) l

(B) $\frac{1}{l}$

(C) l^2

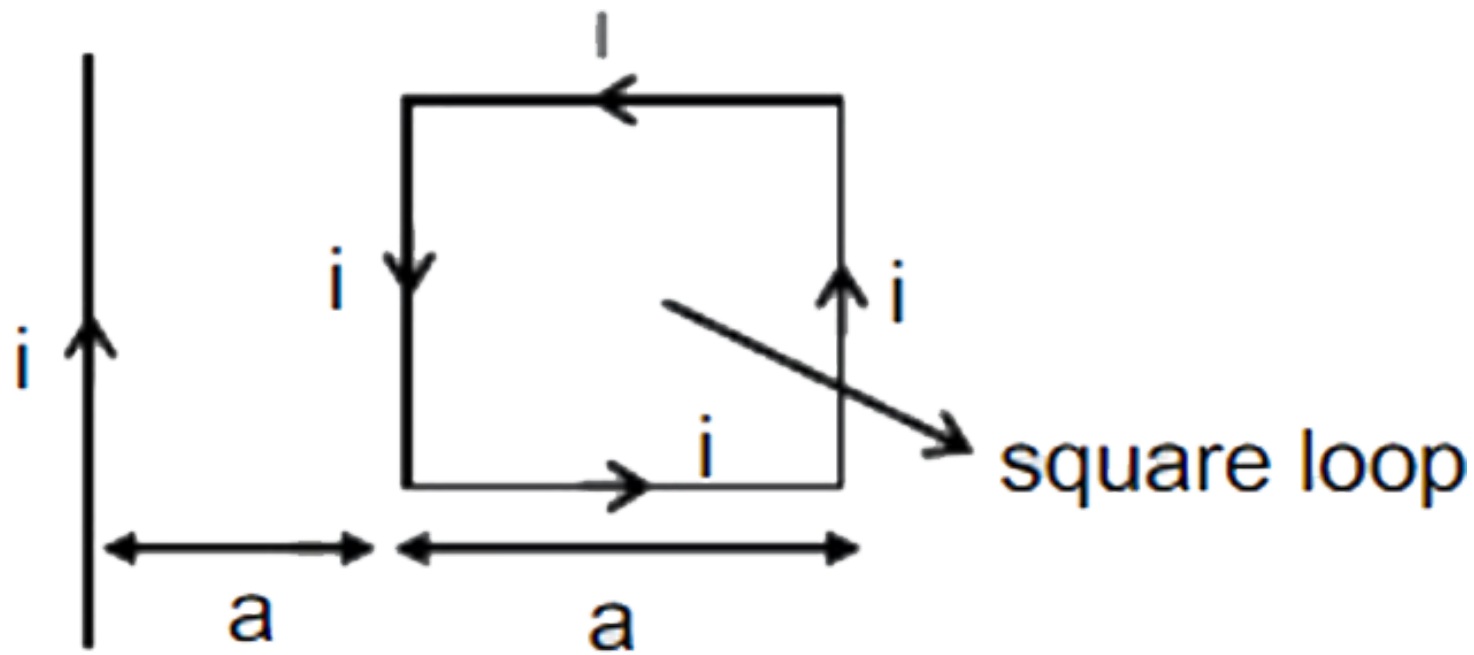
(D) $\frac{1}{l^2}$

CORRECT OPTION: B

[© Watch Free Video Solution on Doubtnut](#)

14 - 9426014

**JEE MAINS 09 APRIL 2019 - PAPER 1 SHIFT 1 -
MEMORY BASED - PHYSICS**



The force between the infinite wire and the square loop is

- (A) $\frac{\mu_0 l^2}{4\pi}$ repulsive
- (B) $\frac{\mu_0 l^2}{2\pi}$ repulsive
- (C) $\frac{\mu_0 l^2}{4\pi}$ attractive
- (D) $\frac{\mu_0 l^2}{2\pi}$ attractive.

CORRECT OPTION: A

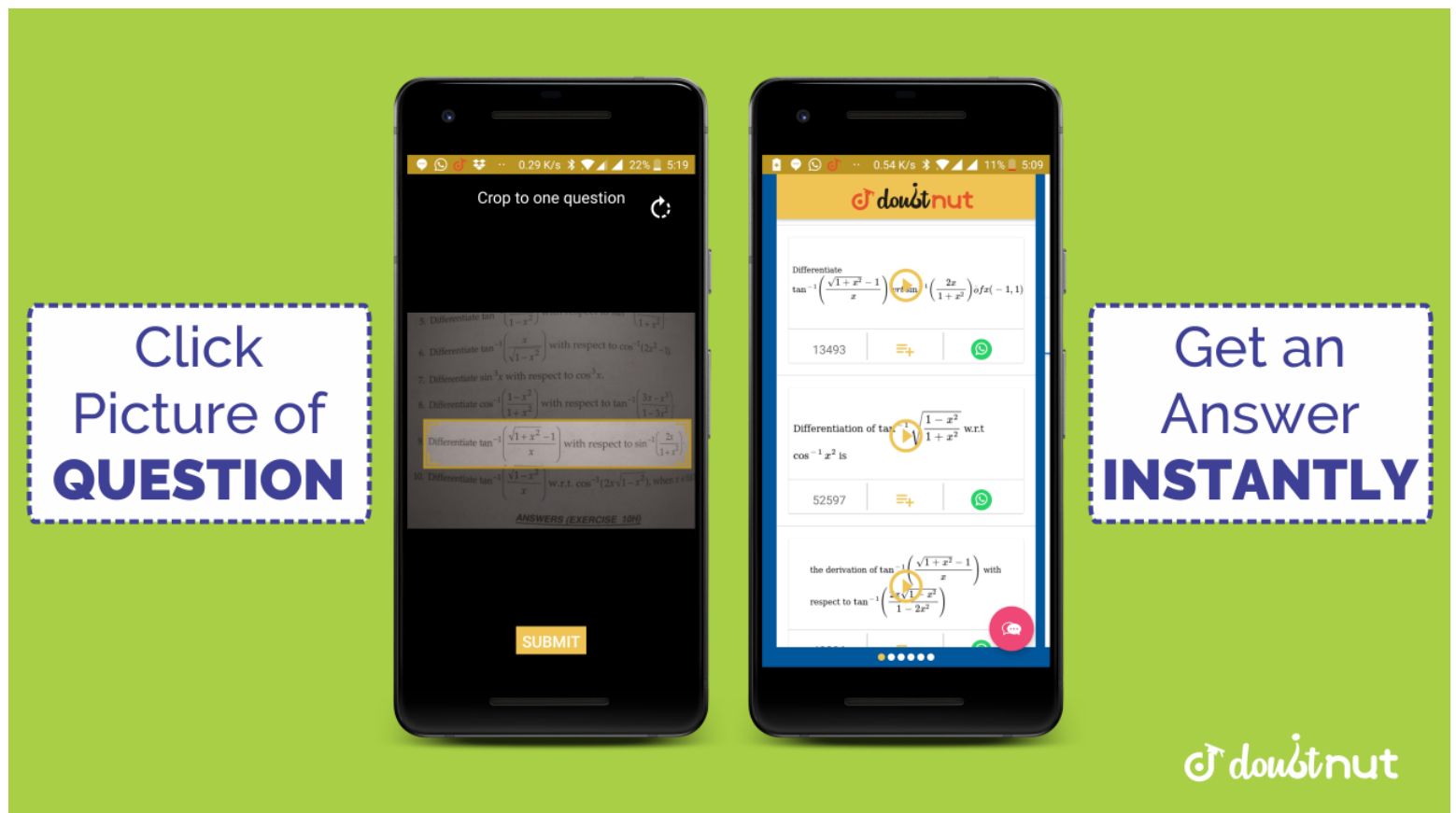
[© Watch Free Video Solution on Doubtnut](#)

A uniform chain of mass m & length L is kept on a smooth horizontal table such that $\frac{L}{n}$ portion of the chain hangs from the table. The work done required to slowly bring the chain completely on the table is

- (A) $\frac{mgL}{n}$
(B) $\frac{mgL}{2}$
(C) $\frac{mgL}{n^2}$
(D) $\frac{mgL}{2n^2}$

CORRECT OPTION: D

[📺 Watch Free Video Solution on Doubtnut](#)



16 - 9426016

JEE MAINS 09 APRIL 2019 - PAPER 1 SHIFT 1 - MEMORY BASED - PHYSICS

In *YDSE*, slab of thickness t and refractive index μ is placed in front of any slit. Then displacement of central maximum in terms of fringe width when light of wavelength λ is incident on system is

- (A) $\frac{\beta(\mu - 1)t}{2\lambda}$
- (B) $\frac{\beta(\mu - 1)t}{\lambda}$
- (C) $\frac{\beta(\mu - 1)t}{3\lambda}$
- (D) $\frac{\beta(\mu - 1)t}{4\lambda}$

CORRECT OPTION: B

[📺 Watch Free Video Solution on Doubtnut](#)

17 - 9426017

**JEE MAINS 09 APRIL 2019 - PAPER 1 SHIFT 1 -
MEMORY BASED - PHYSICS**

In H — atom spectrum V is the wave number

$V_1 = V_{\min} + V_{\max}$ for layman series

$V_1 = V_{\min} + V_{\max}$ for balmer series then $V_1 : V_2$

(A) 9 : 2

(B) 3 : 2

(C) 5 : 2

(D) 7 : 2

CORRECT OPTION: A

[📺 Watch Free Video Solution on Doubtnut](#)

**JEE MAINS 09 APRIL 2019 - PAPER 1 SHIFT 1 -
MEMORY BASED - PHYSICS**

At what distance from his face a person should place concave mirrors of focal length 0.4 m so that magnification in 5 times for a virtual image

18 - 9426018

(A) 32

(B) 24

(C) 16

(D) 50

CORRECT OPTION: A

[📺 Watch Free Video Solution on Doubtnut](#)

19 - 9426019

**JEE MAINS 09 APRIL 2019 - PAPER 1 SHIFT 1 -
MEMORY BASED - PHYSICS**

The mass and sides of cube are given as $(10 \text{ kg} \pm 0.1)$ and $(0.1 \text{ m} \pm 0.01)$ the fractional density is

(A) 0.31

(B) 0.5

(C) 0.62

(D) 0.29

CORRECT OPTION: A

[📺 Watch Free Video Solution on Doubtnut](#)

20 - 9426020

**JEE MAINS 09 APRIL 2019 - PAPER 1 SHIFT 1 -
MEMORY BASED - PHYSICS**

A string fixed at both ends, oscillate in 4th harmonic. The displacement of particular wave is given as $Y = 2A \sin(5\pi X) \cos(100\pi t)$. Then find the length of the string?

- (A) 80 cm
 - (B) 100cm
 - (C) 60 cm
 - (D) 120 cm
-

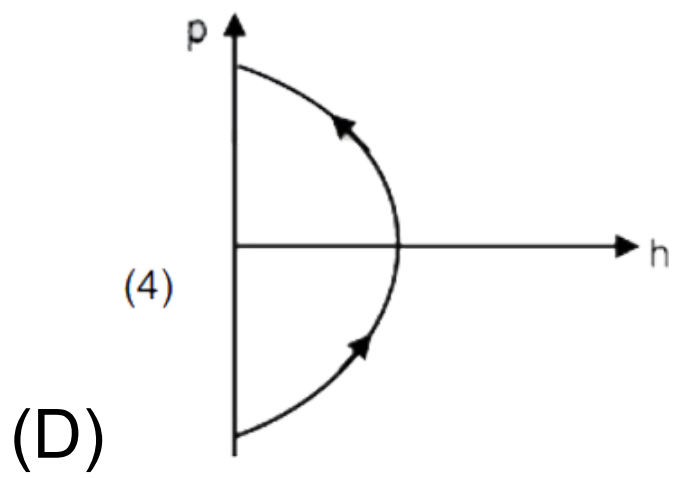
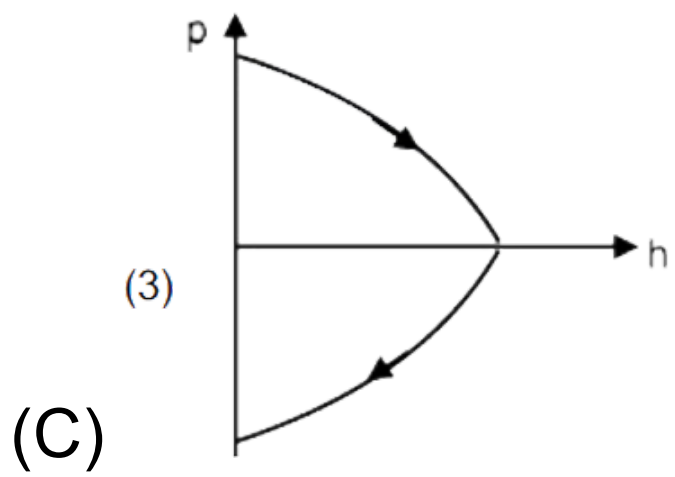
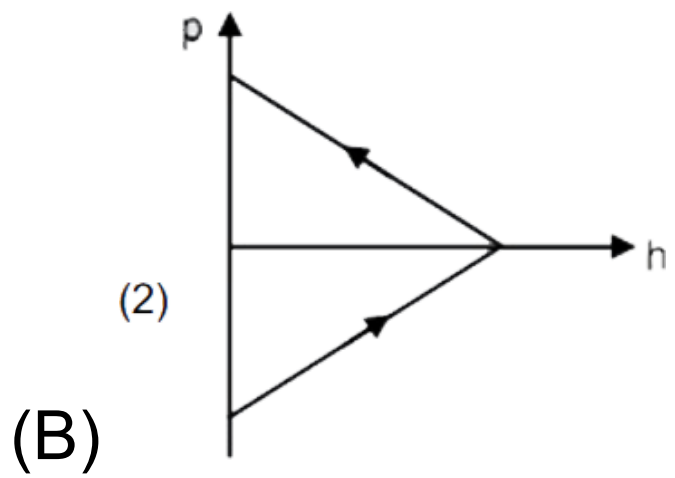
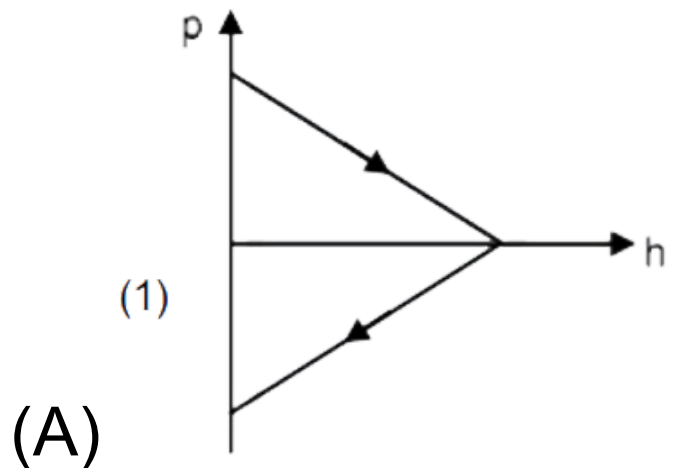
CORRECT OPTION: A

[📺 Watch Free Video Solution on Doubtnut](#)

21 - 9426021

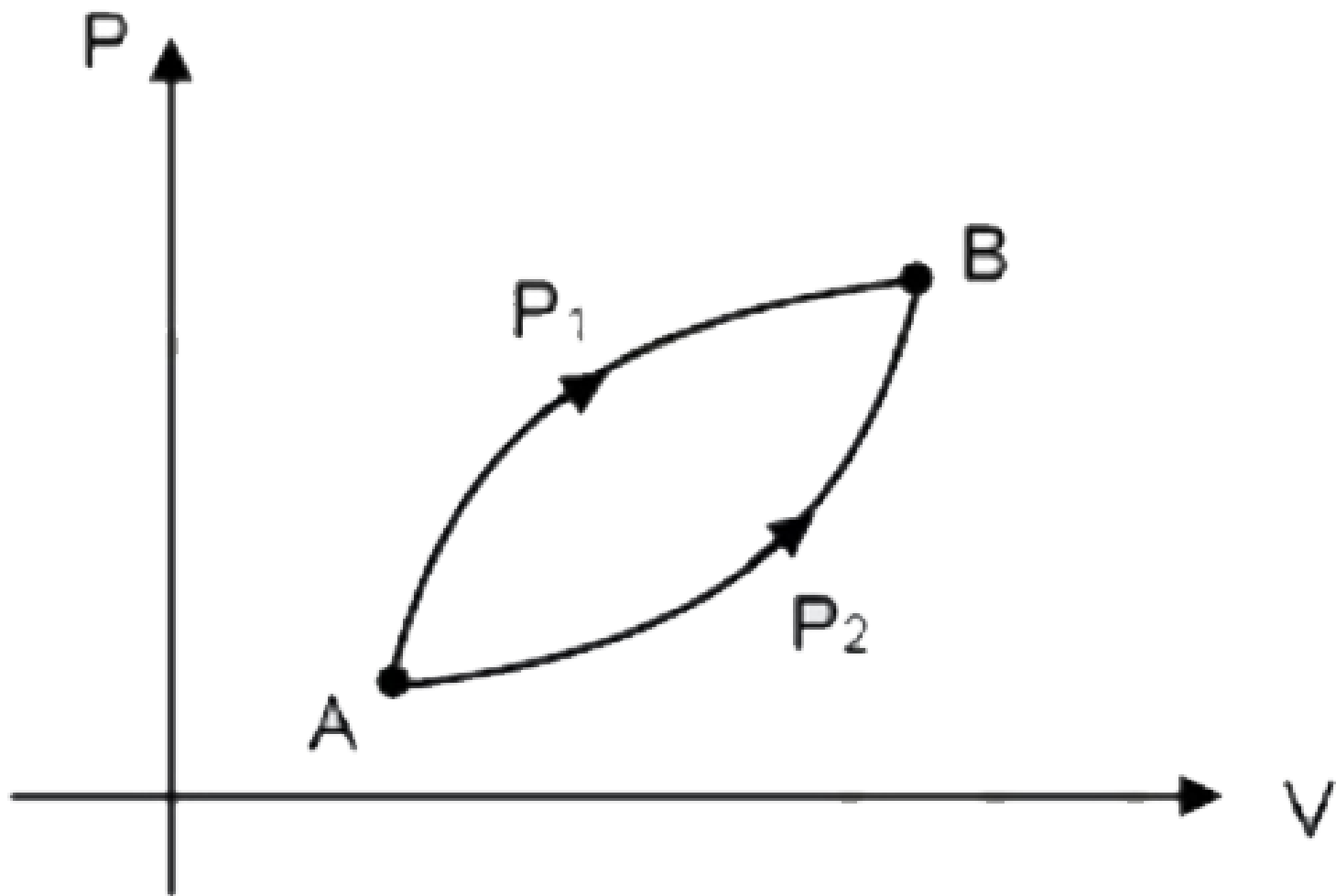
**JEE MAINS 09 APRIL 2019 - PAPER 1 SHIFT 1 -
MEMORY BASED - PHYSICS**

A particle is projected vertically upwards from ground.
Which of the following plots best describe the momentum vs
height from the ground?



CORRECT OPTION: C

[© Watch Free Video Solution on Doubtnut](#)

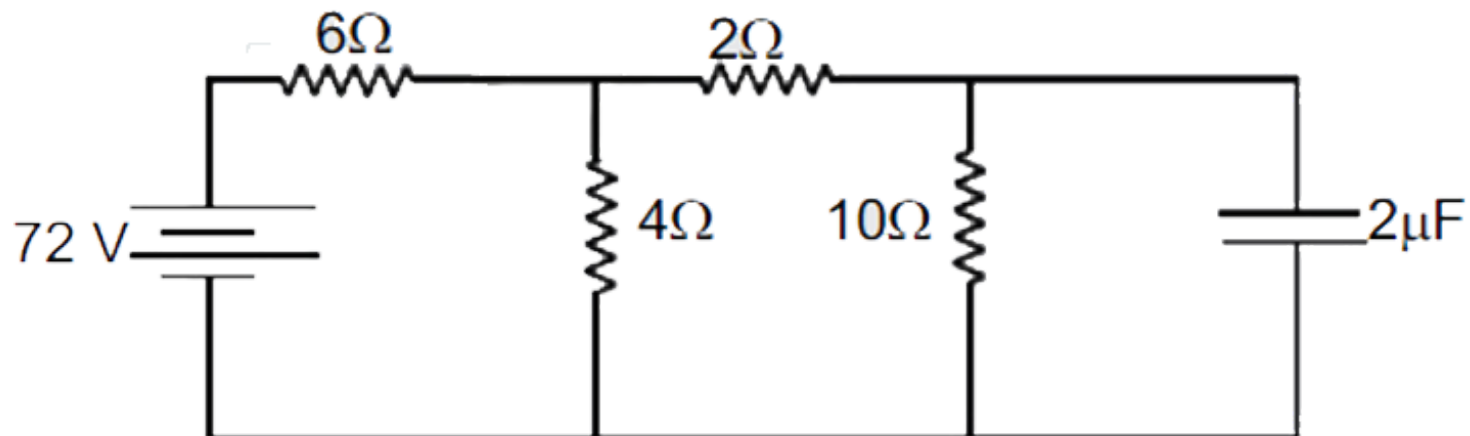


A thermodynamic system undergoes two processes P_1 and P_2 from $A \rightarrow B$ as shown in $P - V$ diagram, choose the correct option.

- (A) $\Delta U_{P_1} = \Delta U_{P_2}, Q_{P_1} = Q_{P_2}$
- (B) $\Delta U_{P_1} = \Delta U_{P_2}, Q_{P_1} > Q_{P_2}$
- (C) $\Delta U_{P_1} < \Delta U_{P_2}, Q_{P_1} < Q_{P_2}$
- (D) $\Delta U_{P_1} < \Delta U_{P_2}, Q_{P_1} = Q_{P_2}$

CORRECT OPTION: B

**JEE MAINS 09 APRIL 2019 - PAPER 1 SHIFT 1 -
MEMORY BASED - PHYSICS**



Determine the charge on capacitor in steady state:

23 - 9426023

- (A) $40\mu C$
- (B) $20\mu C$
- (C) $15\mu C$
- (D) $80\mu C$

CORRECT OPTION: A



24 - 9426024

JEE MAINS 09 APRIL 2019 - PAPER 1 SHIFT 1 - MEMORY BASED - PHYSICS

A charge particle ($\neq 10^{-4}C$) is released from rest at $z = 0$ in magnetic field given as $\vec{B} = B_0 \cos(\omega t + kz)\hat{j}$ where $B_0 = 3 \times 10^{-5}T$ and $B_1 = 2 \times 10^{-6}T$. Then the rms value of force acting on particle is?

(A) 3×10^{-2}

(B) 0.6

(C) 0.9

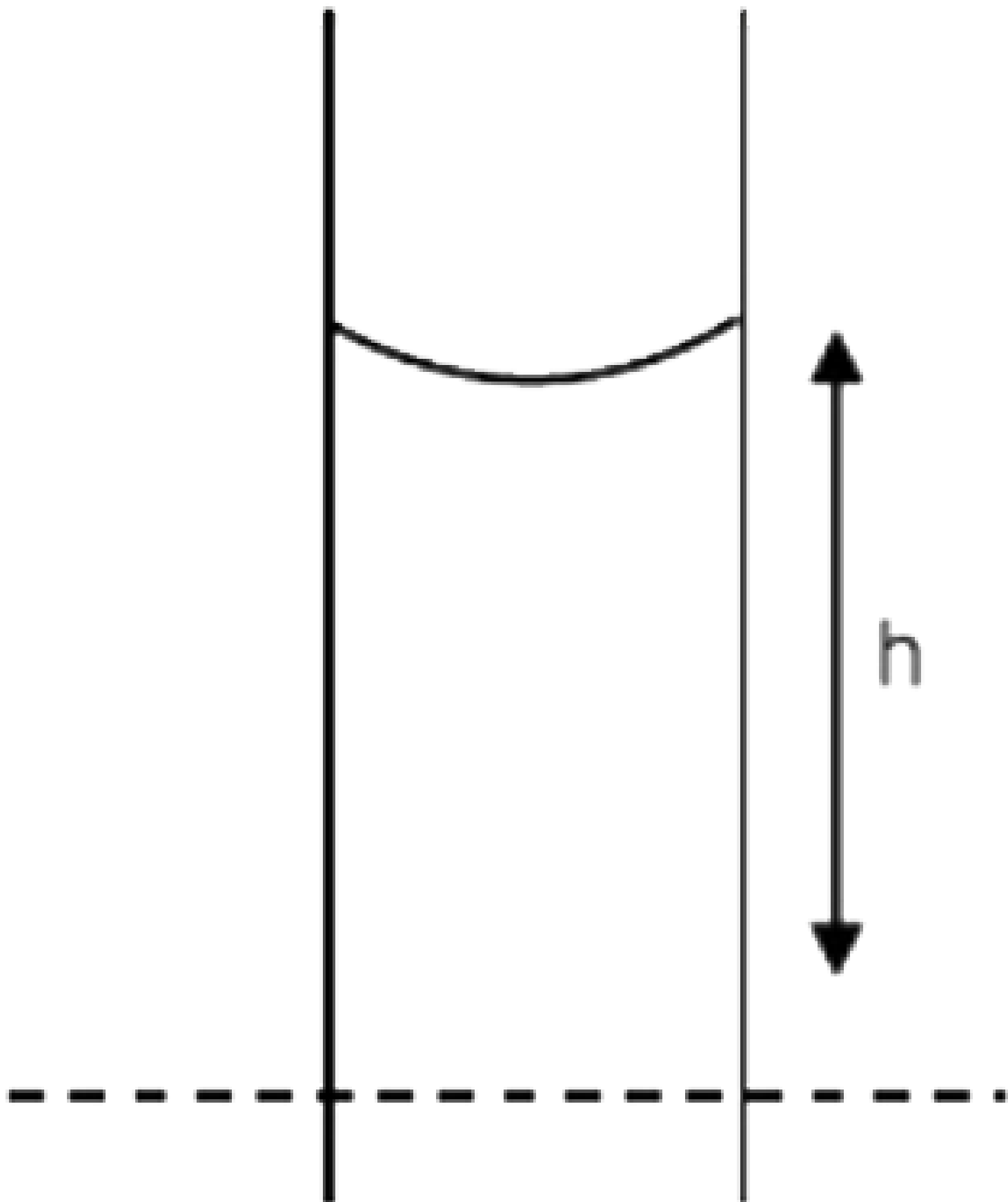
(D) 0.1

CORRECT OPTION: B

[© Watch Free Video Solution on Doubnut](#)

25 - 9426025

**JEE MAINS 09 APRIL 2019 - PAPER 1 SHIFT 1 -
MEMORY BASED - PHYSICS**



mass m of a liquid rises inside a capillary of radius r . The

mass of fluid that rises when a capillary of radius $2r$ is used is

(A) m

(B) $2m$

(C) $\frac{m}{2}$

(D) $4m$

CORRECT OPTION: B

[📺 Watch Free Video Solution on Doubtnut](#)

26 - 9426026

**JEE MAINS 09 APRIL 2019 - PAPER 1 SHIFT 1 -
MEMORY BASED - PHYSICS**

r.m.s speed of ideal gas at $127^\circ C$ is $200m/s$ the rms.

Speed of same ideal gas at temperature $227^\circ C$ is

(A) $100\sqrt{5}$

(B) $200\sqrt{5}$

(C) $100\sqrt{5}$

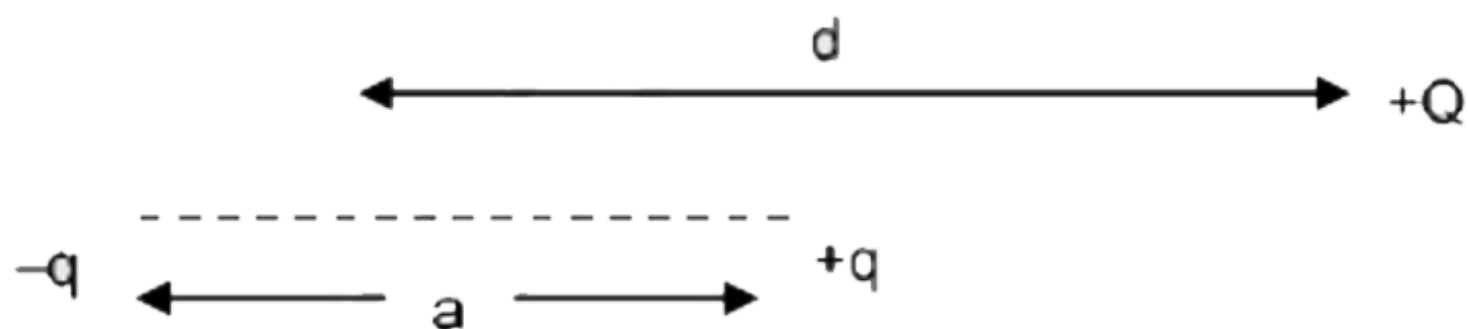
(D) $100\sqrt{10}$

CORRECT OPTION: A

[© Watch Free Video Solution on Doubtnut](#)

27 - 9426027

**JEE MAINS 09 APRIL 2019 - PAPER 1 SHIFT 1 -
MEMORY BASED - PHYSICS**



three point charge $-q$, q and Q are arranged as given in figure. If d is distance from centre of $-q$ and $+q$ to Q and $d > a$ then the potential energy of given system is

(A) $\left(\frac{kqQa}{d^2} \right)$

$$(B) \left(\frac{+kq^2}{a} + \frac{kqQa}{d^2} \right)$$

$$(C) \left(\frac{-kq^2}{a} + \frac{kqQa}{2d^2} \right)$$

$$(D) \left(\frac{-kq^2}{a} + \frac{kqQa}{d^2} \right)$$

CORRECT OPTION: D

[© Watch Free Video Solution on Doubnut](#)

28 - 9426028

**JEE MAINS 09 APRIL 2019 - PAPER 1 SHIFT 1 -
MEMORY BASED - PHYSICS**

Light is incident on a metal plate whose work function is 2 eV. Electric field associated with light is given by

$$E = E_0 \sin \left(\omega t - \frac{2\pi}{5 \times 10^7} x \right) \{ \text{S.I unit} \}$$

if energy of photon is given by $\frac{12375}{\lambda(\text{in}\text{\AA})}$ eV then stopping potential is

(A) 2.48eV

(B) 0.48eV

(C) $0.78eV$

(D) $1.24eV$

CORRECT OPTION: B

[📺 Watch Free Video Solution on DoubtNut](#)

29 - 9426031

**JEE MAINS 09 APRIL 2019 - PAPER 1 SHIFT 1 -
MEMORY BASED - PHYSICS**

Wavelength of the first line of balmer series is 600 nm. The wavelength of second line of the balmer series will be

(A) 444 nm

(B) 800 nm

(C) 388 nm

(D) 632 nm

CORRECT OPTION: A

📺 Watch Free Video Solution on Doubtnut

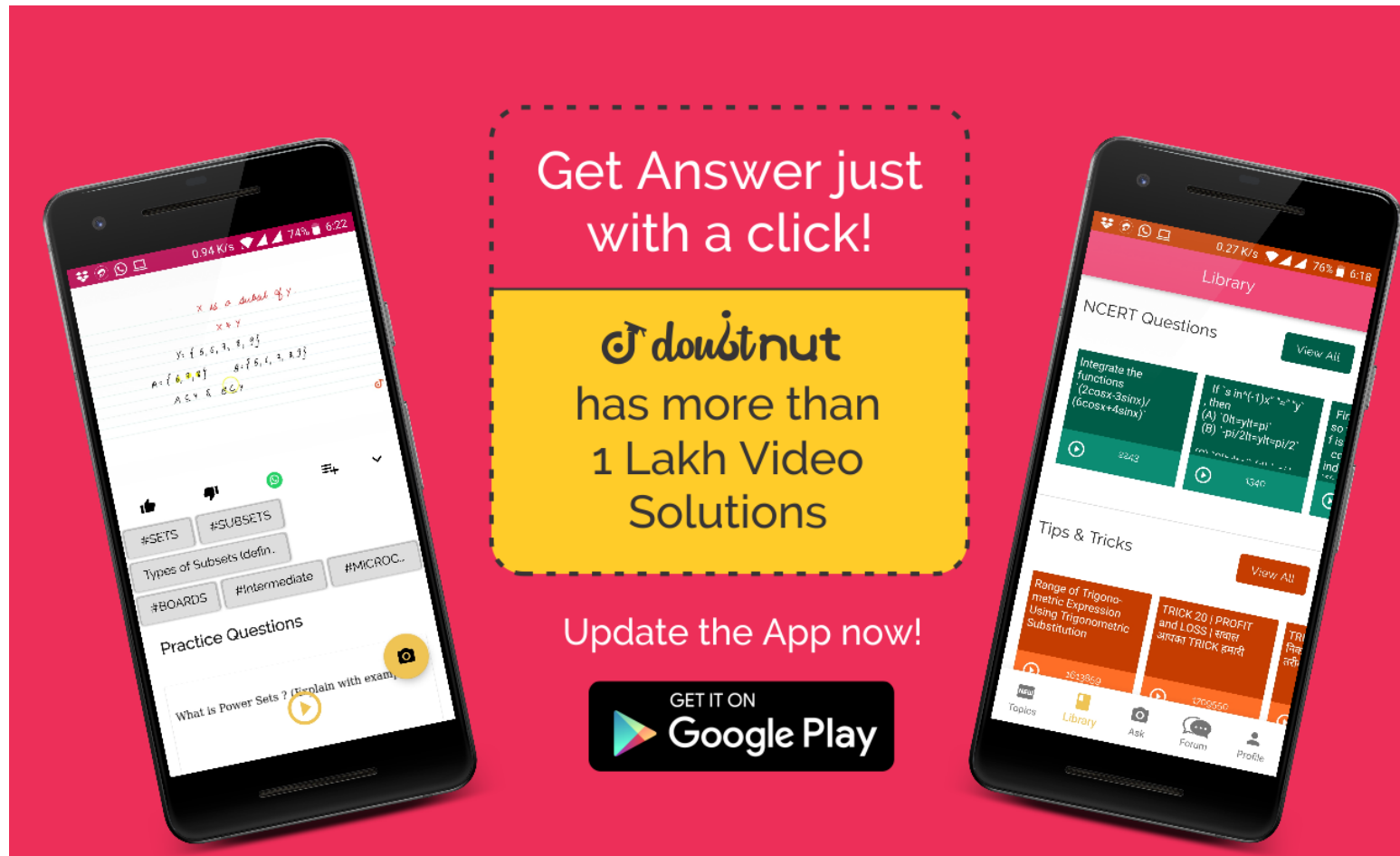
📲 Download Doubtnut to Ask Any Math Question By just a click

📲 Get A Video Solution For Free in Seconds

📲 Doubtnut Has More Than 1 Lakh Video Solutions

📲 Free Video Solutions of NCERT, RD Sharma, RS Aggarwal, Cengage (G.Tewani), Resonance DPP, Allen, Bansal, FIITJEE, Akash, Narayana, VidyaMandir

📲 Download Doubtnut Today



Get Answer just with a click!

doubtnut has more than 1 Lakh Video Solutions

Update the App now!

GET IT ON **Google Play**

The advertisement features two smartphones. The left phone displays a math problem: "x is a subset of y", with handwritten solutions for sets A and B. The right phone shows a "Library" screen with "NCERT Questions" and "Tips & Tricks" sections. A central yellow box contains the app's name and the number of solutions. Below it, a black button with the Google Play logo encourages downloading the app.