

Ques No.

Question

**JEE MAINS 09 APRIL 2019 - PAPER 1 SHIFT 1 -
MEMORY BASED - MATHS**

Let $f(x)$ satisfy the relation $f(x + y) = f(x) \cdot f(y)$ for all

$$x, y \in N \text{ and } f(1) = 2, \sum_{k=1}^{20} f(a + k) = 16(2^{20} - 1)$$

then value of a is

1 - 9425962

(A) 1

(B) 2

(C) 3

(D) 4

CORRECT OPTION: C[Watch Free Video Solution on Doubtnut](#)

2 - 9425964

**JEE MAINS 09 APRIL 2019 - PAPER 1 SHIFT 1 -
MEMORY BASED - MATHS**

$$\int_0^{\frac{\pi}{2}} \frac{\sin^3 x}{\sin x + \cos x} dx \text{ is equal to}$$

- (A) $\frac{\pi}{4} - \frac{1}{4}$
(B) $\frac{\pi}{4} + \frac{1}{4}$
(C) $\frac{\pi}{4} + \frac{1}{2}$
(D) $\frac{\pi}{4} - \frac{1}{2}$

CORRECT OPTION: A

[© Watch Free Video Solution on Doubtnut](#)

3 - 9425965

**JEE MAINS 09 APRIL 2019 - PAPER 1 SHIFT 1 -
MEMORY BASED - MATHS**

$$\cos^2 10^\circ + \cos^2 50^\circ - \cos 10^\circ \cos 50^\circ \text{ is equal to}$$

- (A) $\frac{3}{2}$

- (B) $\frac{3}{4}$
- (C) $\frac{3}{2} (\cos 20^\circ + 1)$
- (D) $\frac{3}{4} (\cos 20^\circ + 1)$

CORRECT OPTION: B

[© Watch Free Video Solution on Doubtnut](#)

4 - 9425966

**JEE MAINS 09 APRIL 2019 - PAPER 1 SHIFT 1 -
MEMORY BASED - MATHS**

A committee of 11 person is to be made from 8 male and 5 female where m is number of ways of selecting at least 6 male and n is the number of ways of selecting at least 3 female. Then

(A) $m = n = 78$

(B) $m = n = 68$

$$(C) m + n = 68$$

$$(D) m - n = 8$$

CORRECT OPTION: A

[📺 Watch Free Video Solution on Doubtnut](#)

5 - 9425967

**JEE MAINS 09 APRIL 2019 - PAPER 1 SHIFT 1 -
MEMORY BASED - MATHS**

$\int \sec^{\frac{2}{3}} x \operatorname{cosec}^{\frac{4}{3}} x dx$ is equal to

$$(A) 3 \tan^{\frac{1}{3}} x + C$$

$$(B) -3 \cot^{\frac{1}{3}} x + c$$

$$(C) -3 \tan^{\frac{1}{3}} x + c$$

$$(D) \frac{3}{4} \cot^{\frac{1}{3}} x + c$$

CORRECT OPTION: B

[📺 Watch Free Video Solution on Doubtnut](#)

**JEE MAINS 09 APRIL 2019 - PAPER 1 SHIFT 1 -
MEMORY BASED - MATHS**

if $y = mx + 7\sqrt{3}$ is normal to $\frac{x^2}{18} - \frac{y^2}{24} = 1$ then the
value of m can be

- (A) $\frac{2}{\sqrt{5}}$
(B) $\frac{4}{\sqrt{5}}$
(C) $\frac{1}{\sqrt{5}}$
(D) $\frac{2}{\sqrt{3}}$

CORRECT OPTION: A

[📺 Watch Free Video Solution on Doubnut](#)

6 - 9425968

**JEE MAINS 09 APRIL 2019 - PAPER 1 SHIFT 1 -
MEMORY BASED - MATHS**

7 - 9425969

Let $\begin{bmatrix} 1 & 2 \\ 0 & 1 \end{bmatrix} \begin{bmatrix} 1 & 2 \\ 0 & 1 \end{bmatrix} \dots \begin{bmatrix} 1 & n-1 \\ 0 & 1 \end{bmatrix} = \begin{bmatrix} 1 & 78 \\ 0 & 1 \end{bmatrix}$

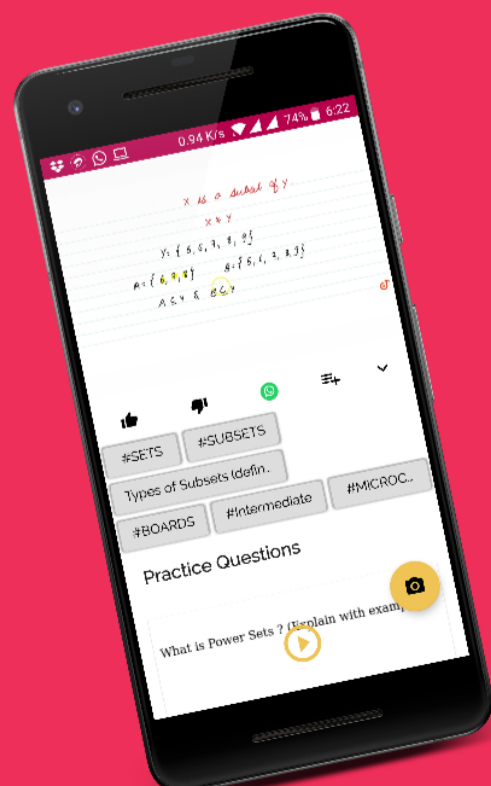
If $A = \begin{bmatrix} 1 & n \\ 0 & 1 \end{bmatrix}$ then $A^{-1} =$

- (A) $\begin{bmatrix} 1 & 12 \\ 0 & 1 \end{bmatrix}$
- (B) $\begin{bmatrix} 1 & -13 \\ 0 & 1 \end{bmatrix}$
- (C) $\begin{bmatrix} 1 & -12 \\ 0 & 1 \end{bmatrix}$
- (D) $\begin{bmatrix} 1 & 0 \\ -13 & 1 \end{bmatrix}$

CORRECT OPTION: B

[📺 Watch Free Video Solution on Doubnut](#)

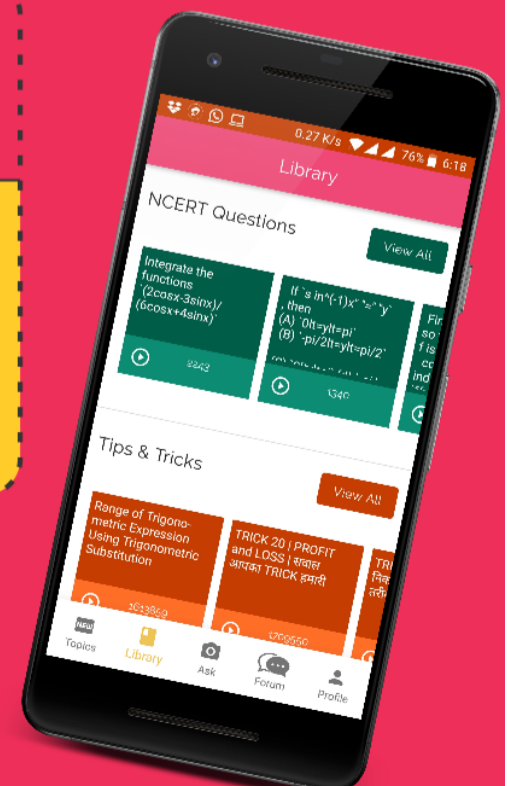
doubnut
पढ़ना हुआ आसान



Get Answer just with a click!

doubnut
has more than
1 Lakh Video
Solutions

Update the App now!



**JEE MAINS 09 APRIL 2019 - PAPER 1 SHIFT 1 -
MEMORY BASED - MATHS**

Probability of hitting a target independently of 4 persons are $\frac{1}{2}$, $\frac{1}{3}$, $\frac{1}{4}$, $\frac{1}{8}$. Then the probability that target is hit is-

- (A) $\frac{1}{192}$
(B) $\frac{5}{192}$
(C) $\frac{25}{32}$
(D) $\frac{7}{32}$

8 - 9425971

CORRECT OPTION: C

[© Watch Free Video Solution on Doubnut](#)

9 - 9425972

**JEE MAINS 09 APRIL 2019 - PAPER 1 SHIFT 1 -
MEMORY BASED - MATHS**

let $\theta \in [-2\pi, 2\pi]$ and $2 \cos^2 \theta + 3 \sin \theta = 0$ then sum of all solution is

(A) 2π

(B) 3π

(C) π

(D) $\frac{\pi}{3}$

CORRECT OPTION: A

[📺 Watch Free Video Solution on Doubtnut](#)

10 - 9425973

**JEE MAINS 09 APRIL 2019 - PAPER 1 SHIFT 1 -
MEMORY BASED - MATHS**

Standard deviation of four observations $-1, 0, 1$ and k is

$\sqrt{5}$ then k will be

(A) $2\sqrt{6}$

(B) 1

(C) 2

(D) $\sqrt{6}$

CORRECT OPTION: A

[📺 Watch Free Video Solution on Doubtnut](#)

11 - 9425974

**JEE MAINS 09 APRIL 2019 - PAPER 1 SHIFT 1 -
MEMORY BASED - MATHS**

$$\text{let } f(x) = \begin{cases} \frac{\sqrt{2} \cos x - 1}{\cot x - 1} & x \neq \frac{\pi}{4} \\ k & x = \frac{\pi}{4} \end{cases}$$

Find k for which f(x) is continuous

(A) $-\frac{1}{2}$

(B) $\frac{1}{3}$

(C) $\frac{1}{2}$

(D) 1

CORRECT OPTION: C

**JEE MAINS 09 APRIL 2019 - PAPER 1 SHIFT 1 -
MEMORY BASED - MATHS**

let $y(x)$ satisfying the differential equation

$$x \frac{dy}{dx} + 2y = x^2 \text{ given } y(1) = 1 \text{ then } y(x) =$$

(A) $\frac{x^2}{4} - (3)(4x^2)$

(B) $\frac{x^3}{4} + \frac{3}{4x^2}$

(C) $\frac{x^2}{4} + \frac{3}{4x}$

(D) $\frac{x^2}{4} + \frac{3}{4x^2}$

12 - 9425976

CORRECT OPTION: D

13 - 9425977

**JEE MAINS 09 APRIL 2019 - PAPER 1 SHIFT 1 -
MEMORY BASED - MATHS**

Let $f(x) = 15 - |x - 10|$ and $g(x) = f(f(x))$ then $g(x)$ is non differentiable at

- (A) $\{5, 10, 15\}$
- (B) $\{5, 10, 15, 20\}$
- (C) $\{10\}$
- (D) $\{5, 15\}$

CORRECT OPTION: A

[© Watch Free Video Solution on Doubtnut](#)

14 - 9425978

**JEE MAINS 09 APRIL 2019 - PAPER 1 SHIFT 1 -
MEMORY BASED - MATHS**

Find area bounded by the curves $x^2 \leq y \leq x + 2$

- (A) $\frac{11}{2}$
- (B) $\frac{7}{2}$

- (C) $\frac{9}{2}$
(D) $\frac{5}{2}$

CORRECT OPTION: C

[📺 Watch Free Video Solution on Doubtnut](#)

15 - 9425979

**JEE MAINS 09 APRIL 2019 - PAPER 1 SHIFT 1 -
MEMORY BASED - MATHS**

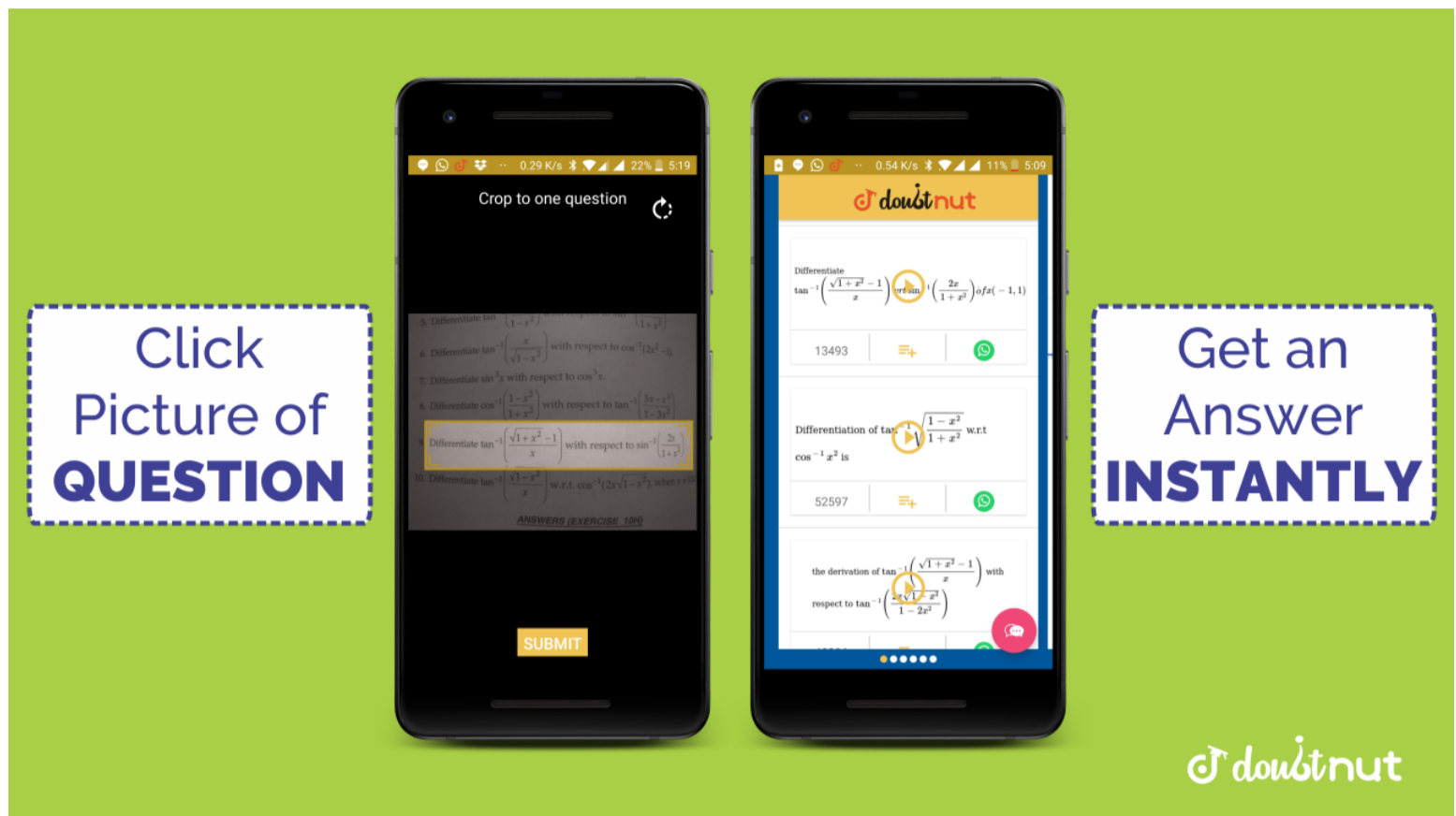
In the expansion at $\left(\frac{2}{x} + x^{\log_e x}\right)^6$ if $T_4 = 20 \times 8^7$ then
value of x is

- (A) $8^{\frac{1}{2}}$
(B) 8^2
(C) 8^3
(D) 8^4

CORRECT OPTION: B

© Watch Free Video Solution on DoubtNut

 पढ़ना हुआ आसान



16 - 9425980

JEE MAINS 09 APRIL 2019 - PAPER 1 SHIFT 1 - MEMORY BASED - MATHS

If one root of the quadratic equation $x^2 + px + q = 0$ is $2 - \sqrt{3}$: where $P, Q \in \mathbb{Q}$. Then which of the following is true ?

(A) $p^2 - 4q + 12 = 0$

(B) $p^2 - 4q - 12 = 0$ (C) $q^2 - 4q + 12 = 0$ (D) $q^2 - 4q - 12 = 0$

CORRECT OPTION: B

**JEE MAINS 09 APRIL 2019 - PAPER 1 SHIFT 1 -
MEMORY BASED - MATHS**

Let the function $f(x)$ defined on $f: R - (-1, 1) \rightarrow A$
and $f(x) = \frac{x^2}{1 - x^2}$ Find A such that $f(x)$ is surjective.

(A) $R - (-1, 0)$

(B) $R - (-1, 2)$

(C) $R - (-1, 2)$

(D) $R - (0, 1)$

CORRECT OPTION: A

17 - 9425981

18 - 9425982

**JEE MAINS 09 APRIL 2019 - PAPER 1 SHIFT 1 -
MEMORY BASED - MATHS**

If α, β are the roots of $x^2 + x + 1 = 0$ then

$$\begin{vmatrix} Y + 1 & \beta & \alpha \\ \beta & y + \alpha & 1 \\ \alpha & 1 & y + \beta \end{vmatrix}$$

(A) $y^2 - 1$

(B) $y(y^2 - 1)$

(C) $u^2 - y$

(D) y^3

CORRECT OPTION: D

[© Watch Free Video Solution on Doubtnut](#)

19 - 9425983

**JEE MAINS 09 APRIL 2019 - PAPER 1 SHIFT 1 -
MEMORY BASED - MATHS**

If a line is passing through $p(2, 3)$ which intersects the line $x + y = 7$ at a distance of four units from P . Then the slope of line is

$$(A) \frac{1 - \sqrt{7}}{1 - \sqrt{7}}$$

$$(B) \frac{\sqrt{7} - 1}{\sqrt{7} + 1}$$

$$(C) \frac{1 - \sqrt{5}}{1 + \sqrt{5}}$$

$$(D) (\sqrt{5} - 1) \frac{\quad}{\sqrt{5} = 1}$$

CORRECT OPTION: A

[© Watch Free Video Solution on Doubtnut](#)

20 - 9425984

**JEE MAINS 09 APRIL 2019 - PAPER 1 SHIFT 1 -
MEMORY BASED - MATHS**

Find the locus of mid-point of the portion of tangent intercepted between coordinate axes to the circle

$$x^2 + y^2 = 1.$$

$$(A) x^2 + y^2 - 4x^2y^2 = 0$$

$$(B) x^2 + y^2 - 2xy = 0$$

$$(C) x^2 + y^2 - 2x^2Y^2 = 0$$

$$(D) x^2y^2 = 0$$

CORRECT OPTION: A

[📺 Watch Free Video Solution on Doubtnut](#)

21 - 9425985

**JEE MAINS 09 APRIL 2019 - PAPER 1 SHIFT 1 -
MEMORY BASED - MATHS**

Let a_1, a_2, \dots, a_{50} are non constant terms of an A.P

. And \sum of n terms is given by $S_n = 50n + \frac{n(n-1)}{2}A$

., then or dered pair (d, a_{50}) is (where d

is the common difference) (A) $(A, 45A)$ (B) $(A, 50+46A)$

(C) $(2A, 46A)$ (D) $(2A, 50+49A)$

CORRECT OPTION: B

[📺 Watch Free Video Solution on Doubtnut](#)

**JEE MAINS 09 APRIL 2019 - PAPER 1 SHIFT 1 -
MEMORY BASED - MATHS**

One end point of a focal chord of a parabola $y^2 = 16x$ is (1, 4). The length of focal chord is

- (A) 24
- (B) 25
- (C) 20
- (D) 22

22 - 9425987

CORRECT OPTION: B

[📺 Watch Free Video Solution on Doubtnut](#)

23 - 9425988

**JEE MAINS 09 APRIL 2019 - PAPER 1 SHIFT 1 -
MEMORY BASED - MATHS**

Find the negation of $p \vee (\neg p^q)$

(A) $\sim p \sim q$

(B) $\sim p \sim q$

(C) $p \sim q$

(D) p^q

CORRECT OPTION: A

[Watch Free Video Solution on Doubnut](#)



24 - 9425989

JEE MAINS 09 APRIL 2019 - PAPER 1 SHIFT 1 - MEMORY BASED - MATHS

A curve $f(x) = x^2 + ax - b$ pass through $p(1, -5)$ and tangent to $f(x)$ at point p is perpendicular to

$x - y + 5 = 0$ then which of the following point will lie on curve ?

(A) $(2 - 2)$

(B) $(2 - 1)$

(C) $2, - 1)$

(D) $(- 2, 2)$

CORRECT OPTION: D

[📺 Watch Free Video Solution on Doubtnut](#)

25 - 9425990

**JEE MAINS 09 APRIL 2019 - PAPER 1 SHIFT 1 -
MEMORY BASED - MATHS**

A plane passes through the point $(0, - 1, 0)$ and $(0, 0, 1)$ and makes an angle of $\frac{\pi}{4}$ with the plane $y - z = 0$ then the point which satisfies the desired plane is

(A) $(\sqrt{2}, -1, 4)$ (B) $(\sqrt{2}, 1, 2)$ (C) $(\sqrt{2}, 1, 4)$ (D) $(\sqrt{2}, 2, 4)$

CORRECT OPTION: D

[📺 Watch Free Video Solution on Doubtnut](#)

26 - 9425991

**JEE MAINS 09 APRIL 2019 - PAPER 1 SHIFT 1 -
MEMORY BASED - MATHS**

Let $f(x)$ be a non-zero polynomial of degree 4. Extremum points of $f(x)$ are 0, -1 , 1.

If $f(k) = f(0)$ then.

(A) k has one rational & two irrational roots
(B) k has four rational roots
(C) k has four irrational roots
(D) k has three irrational roots.

CORRECT OPTION: A

**JEE MAINS 09 APRIL 2019 - PAPER 1 SHIFT 1 -
MEMORY BASED - MATHS**

Consider a plane $x + 2y + 3z = 15$ and a line $\frac{x - 1}{2} = \frac{y + 1}{3} = \frac{z - 2}{4}$ then find the distance of origin from point of intersection of line and plane.

27 - 9425992

- (A) $\frac{1}{2}$
- (B) $\frac{9}{2}$
- (C) $\frac{5}{2}$
- (D) 4

CORRECT OPTION: B

28 - 9425993

**JEE MAINS 09 APRIL 2019 - PAPER 1 SHIFT 1 -
MEMORY BASED - MATHS**

If $S = \left\{ \frac{\alpha + i}{\alpha - i}, \alpha \in R \right\}$ then the S lies on

(A) a circle with radius $= \sqrt{2}$

(B) a straight line with slope $= -1$

(C) a straight line with slope $= 1$

(D) a circle with radius $= 1$

CORRECT OPTION: D

[© Watch Free Video Solution on Doubtnut](#)

29 - 9425995

**JEE MAINS 09 APRIL 2019 - PAPER 1 SHIFT 1 -
MEMORY BASED - MATHS**

Let $\vec{\alpha} = 3\hat{i} + \hat{j}$, $\vec{\beta} = 2\hat{i} - \hat{j}$ and $\vec{\beta} = \vec{\beta}_1 - \vec{\beta}_2$, such
that $\vec{\beta}_1$ is parallel to $\vec{\alpha}$ and $\vec{\beta}_2$ is perpendicular to $\vec{\alpha}$. Find
 $\vec{\beta}_1 \times \vec{\beta}_2$.

- (A) $\frac{1}{2} (3\hat{i} - 9\hat{j} + 8\hat{k})$
- (B) $\frac{1}{2} (\hat{i} - 3\hat{j} + 4\hat{k})$
- (C) $\frac{1}{2} (-3\hat{i} + 9\hat{j} + 10\hat{k})$
- (D) $\frac{3}{2} (3\hat{i} + 9\hat{j} + 10\hat{k})$

CORRECT OPTION: C

[📺 Watch Free Video Solution on Doubtnut](#)

👉 Download Doubtnut to Ask Any Math Question By just a click

👉 Get A Video Solution For Free in Seconds

👉 Doubtnut Has More Than 1 Lakh Video Solutions

👉 Free Video Solutions of NCERT, RD Sharma, RS Aggarwal, Cengage (G.Tewani), Resonance DPP, Allen, Bansal, FIITJEE, Akash, Narayana, VidyaMandir

📱 Download Doubtnut Today

Get Answer just with a click!

doubtnut has more than 1 Lakh Video Solutions

Update the App now!

GET IT ON Google Play

The advertisement features two smartphones. The left smartphone displays a math problem: "x is a subset of y, y is a subset of z, z is a subset of w, then x is a subset of w." Below the problem are tags like #SETS, #SUBSETS, #BOARDS, #Intermediate, and #MICROC. The right smartphone displays the 'Library' section of the app, showing 'NCERT Questions' with a 'View All' button, and 'Tips & Tricks' with a 'View All' button. The central text box is yellow with a dashed border.