

JEE MAINS 12 JAN 2019 - PAPER 1 SHIFT 2

MEMORY BASED

[Download Doubtnut Today](#)



Get Answer just with a click!

doubtnut has more than 1 Lakh Video Solutions

Update the App now!

GET IT ON Google Play

4 - 5972348

JEE MAINS 12 JAN 2019 - PAPER 1 SHIFT 2 - MEMORY BASED

Let $\vec{a} = \left(\vec{b} \times \vec{c} \right) = \frac{\vec{b}}{2}$ and \vec{b}, \vec{c} are non parallel unit vectors. If angle between \vec{a} and \vec{b} is α and angle between \vec{a} and \vec{c} is β then $|\alpha - \beta|$ is equal to (A) $\frac{\pi}{2}$ (B) $\frac{\pi}{6}$ (C) $\frac{\pi}{3}$ (D) $\frac{\pi}{4}$

[👁 Watch Free Video Solution on Doubnut](#)

5 - 5972349

JEE MAINS 12 JAN 2019 - PAPER 1 SHIFT 2 - MEMORY BASED

The statement $\sim(\sim p \rightarrow q)$ is equivalent to (A) $p \vee \sim q$ (B) $\sim p \wedge q$ (C) $\sim p \wedge \sim q$ (D) $\sim p \vee q$

[👁 Watch Free Video Solution on Doubnut](#)

6 - 5972350

JEE MAINS 12 JAN 2019 - PAPER 1 SHIFT 2 - MEMORY BASED

There are m men and 2 women. Everyone plays two matches with all other participants. If number of matches played between men exceeds the number of matches played between men and women by 84, then m is equal to (A) 6 (B) 3 (C) 5 (D) 12

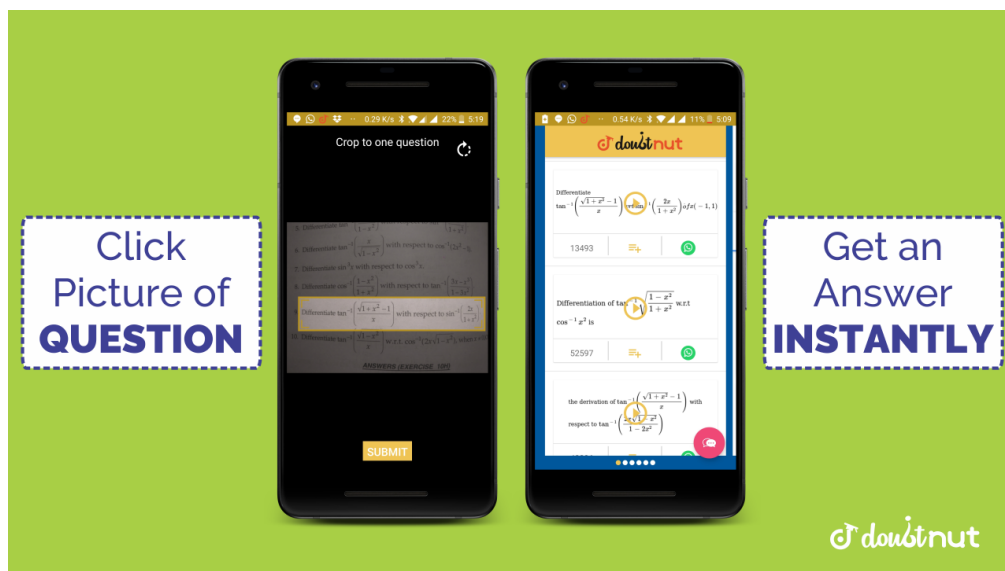
[👁 Watch Free Video Solution on Doubnut](#)

7 - 5972351

JEE MAINS 12 JAN 2019 - PAPER 1 SHIFT 2 - MEMORY BASED

If $\left(\frac{3}{4}\right)^3 + \left(1\frac{1}{2}\right)^3 + \left(2\frac{1}{4}\right)^3 + ?$ upto 15 terms = $225k$, then k is equal to (A) 108 (B) 9 (C) 27 (D) 54

[👁 Watch Free Video Solution on Doubnut](#)



8 - 5972352

JEE MAINS 12 JAN 2019 - PAPER 1 SHIFT 2 - MEMORY BASED

Mean and variance of five observations are 4 and 5.2 respectively. If three of these observations are 3, 4, 4 then find absolute difference between the other two observations (A) 3 (B) 7 (C) 2 (D) 5

[👁 Watch Free Video Solution on Doubnut](#)

9 - 5972353

JEE MAINS 12 JAN 2019 - PAPER 1 SHIFT 2 - MEMORY BASED

$$\lim_{x \rightarrow 1^-} \frac{\sqrt{\pi} - \sqrt{2 \sin^{-1} x}}{\sqrt{1-x}} = (A) \sqrt{\frac{2}{\pi}} (B) \sqrt{\frac{\pi}{2}} (C) \frac{1}{\pi} (D) \sqrt{\frac{1}{\pi}}$$

[👁 Watch Free Video Solution on Doubtnut](#)

JEE MAINS 12 JAN 2019 - PAPER 1 SHIFT 2 - MEMORY BASED

10 - 5972354

If z_1 and z_2 lies on $|z| = 9$ and $|z - 3 - 4i| = 4$ respectively, find minimum possible value of $|z_1 - z_2|$ (A) 0 (B) 5 (C) 13 (D) 2

[👁 Watch Free Video Solution on Doubtnut](#)

JEE MAINS 12 JAN 2019 - PAPER 1 SHIFT 2 - MEMORY BASED

11 - 5972355

If ${}^n C_4, {}^n C_5$ and ${}^n C_6$ are in A.P. then n is equal to (A) 11 (B) 14 (C) 12 (D) 9

[👁 Watch Free Video Solution on Doubtnut](#)



JEE MAINS 12 JAN 2019 - PAPER 1 SHIFT 2 - MEMORY BASED

12 - 5972356

If angle between the lines $\frac{x-2}{1} = \frac{y-3}{2} = \frac{z+5}{-2}$ and $2x - y - kz = \lambda$ is $\cos^{-1}\left(\frac{2\sqrt{2}}{3}\right)$ then find k (A) $\sqrt{\frac{3}{5}}$ (B) $\frac{3}{\sqrt{5}}$ (C) $\frac{\sqrt{5}}{3}$ (D) $\sqrt{\frac{5}{3}}$

[👁 Watch Free Video Solution on Doubtnut](#)

JEE MAINS 12 JAN 2019 - PAPER 1 SHIFT 2 - MEMORY BASED

13 - 5972358

$\lim_{x \rightarrow \infty} \left(\frac{n}{n^2 + 1^2} + \frac{n}{n^2 + 2^2} + ? + \frac{n}{5n} \right)$ is equal to (A) $\frac{\pi}{2}$ (B) $\frac{\pi}{4}$ (C) $\tan^{-1}(2)$ (D) $\tan^{-1}(3)$

[👁 Watch Free Video Solution on Doubtnut](#)

14 - 5972359

JEE MAINS 12 JAN 2019 - PAPER 1 SHIFT 2 - MEMORY BASED

A line passes through $(-3, 4)$ and the portion of the line intercepted between the coordinate axes is bisected at the point then equation of line is (A) $4x - 3y + 24 = 0$ (B) $x - y - 7 = 0$ (C) $3x - 4y + 25 = 0$ (D) $3x - 4y + 24 = 0$

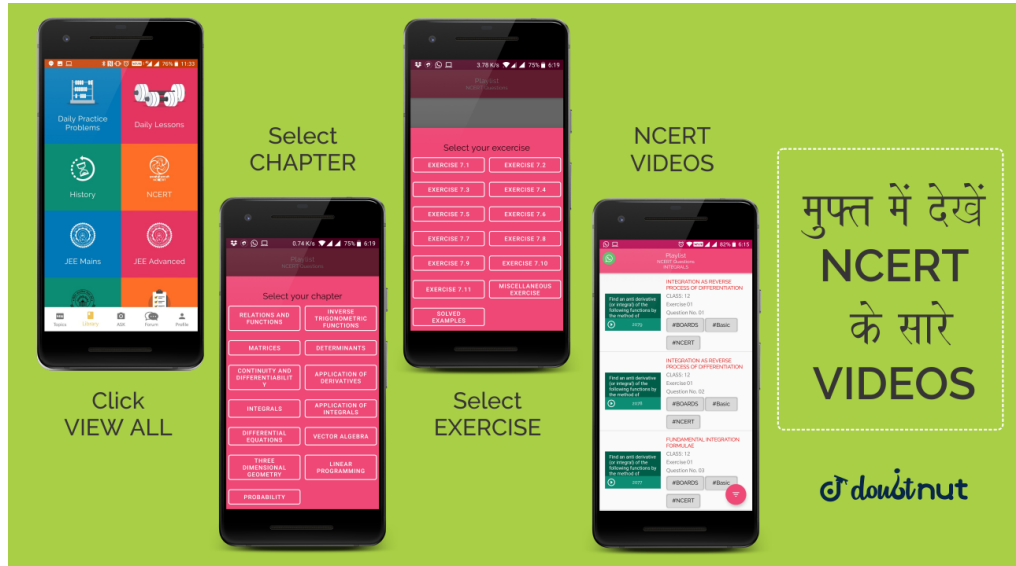
[📺 Watch Free Video Solution on Doubnut](#)

JEE MAINS 12 JAN 2019 - PAPER 1 SHIFT 2 - MEMORY BASED

15 - 5972360

There are 60 students in a classes, out of which 40 opt for NCC, 30 opt for NSS and 20 for both, then the probability that a student has opted for none of the NCC or NSS is (A) $\frac{5}{6}$ (B) $\frac{1}{6}$ (C) $\frac{1}{3}$ (D) $\frac{1}{2}$

[📺 Watch Free Video Solution on Doubnut](#)



JEE MAINS 12 JAN 2019 - PAPER 1 SHIFT 2 - MEMORY BASED

16 - 5972361

If the tangent drawn to parabola $y = x^2 - 5x + 5$ at a point is parallel to $2y = 4x + \lambda$. Then the tangent passes through the point. (A) $\left(\frac{3}{4}, \frac{5}{2}\right)$ (B) $\left(-\frac{1}{8}, 7\right)$ (C) $(1, 3)$ (D) $\left(\frac{1}{8}, -7\right)$

[📺 Watch Free Video Solution on Doubnut](#)

JEE MAINS 12 JAN 2019 - PAPER 1 SHIFT 2 - MEMORY BASED

17 - 5972362

Let $f(x) = x^3 - 3(a - 2)x^2 + 3ax + 7$ and $f(x)$ is increasing in $(0, 1]$ and decreasing in $[1, 5)$, then roots of the equation $\frac{f(x) - 14}{(x - 1)^2} = 0$ is (A) 1 (B) 3 (C) 7 (D) -2

[📺 Watch Free Video Solution on Doubnut](#)

JEE MAINS 12 JAN 2019 - PAPER 1 SHIFT 2 - MEMORY BASED

18 - 5972363

A circle of radius r passes through origin and cut the y -axis at P and Q . The locus of foot of perpendicular drawn from origin upon line joining the points P and Q is (A) $(x^2 + y^2)^3 = r^2(x^2y^2)$ (B) $(x^2 + y^2)^2(x + y) = r^2(xy)$ (C) $(x^2 + y^2)^2 = r^2(x^2y^2)$ (D) $(x^2 + y^2)^3 = 4r^2(x^2y^2)$

[📺 Watch Free Video Solution on Doubnut](#)

19 - 5972364

JEE MAINS 12 JAN 2019 - PAPER 1 SHIFT 2 - MEMORY BASED

If $y(x)$ satisfies the differential equation $\frac{dy}{dx} = \frac{x^2 - 2y}{x}$ where $y(1) = -2$ then $y(x)$ will pass

through the point (A) $(0, \sqrt{3})$ (B) $(3, 0)$ (C) $(\sqrt{3}, 0)$ (D) $(0, 3)$

[👁 Watch Free Video Solution on Doubtnut](#)



Made by सिर्फ आपके लिए

JEE MAINS 12 JAN 2019 - PAPER 1 SHIFT 2 - MEMORY BASED

20 - 5972365

If $\alpha, \beta \in \left(0, \frac{\pi}{2}\right)$ and if $\sin^4 \alpha + 2 \cos^4 \beta + 2 = 4\sqrt{2} \sin \alpha \cos \beta$ then the value of $\cos(\alpha + \beta) - \cos(\alpha - \beta)$ is (A) $\sqrt{2}$ (B) $\frac{1}{\sqrt{2}}$ (C) $-\frac{1}{\sqrt{2}}$ (D) $-\sqrt{2}$

[👁 Watch Free Video Solution on Doubtnut](#)

JEE MAINS 12 JAN 2019 - PAPER 1 SHIFT 2 - MEMORY BASED

21 - 5972366

A plane passing through three points $(-\lambda^2, 1, 1), (1, -\lambda^2, 1), (1, 1, \lambda^2)$ also passes through $(1, 1, -1)$ then set consisting all the real value of λ is (A) $\{-\sqrt{3}, \sqrt{3}\}$ (B) $\{3, -3\}$ (C) $\{1\}$ (D) $\{1, \sqrt{3}, -\sqrt{3}\}$

[👁 Watch Free Video Solution on Doubtnut](#)

JEE MAINS 12 JAN 2019 - PAPER 1 SHIFT 2 - MEMORY BASED

22 - 5972367

If $f(1) = 2, f'(x) = f(x)$ and $h(x) = f \circ f(x)$ then $h(1)$ is equal to (A) $4e$ (B) $2e^2$ (C) $4e^2$ (D) e^2

[👁 Watch Free Video Solution on Doubtnut](#)

JEE MAINS 12 JAN 2019 - PAPER 1 SHIFT 2 - MEMORY BASED

23 - 5972368

Let $A = \{x: x \in \mathbb{Z} \text{ and } 2^{(x-2)}(x^2-5x+6) = 1\}, B = \{x: x \in \mathbb{Z} \text{ and } -3 < 2x-1 < 9\}$. Find number of subsets of cartesian product $A \times B$ (A) 2^{18} (B) 2^{10} (C) 2^{15} (D) 2^{20}

[👁 Watch Free Video Solution on Doubtnut](#)



मुफ्त में सीखें
सारे टॉपिक

Learn All
Topics
For FREE

doubtnut

24 - 5972369

JEE MAINS 12 JAN 2019 - PAPER 1 SHIFT 2 - MEMORY BASED

The number of irrational terms in expansion $\left(7^{\frac{1}{5}} - 3^{\frac{1}{10}}\right)^{60}$ is (A) 54 (B) 48 (C) 42 (D) 40

[Watch Free Video Solution on Doubtnut](#)

25 - 5972370

JEE MAINS 12 JAN 2019 - PAPER 1 SHIFT 2 - MEMORY BASED

A tangent is drawn to parabola $y^2 = 8x$ which makes angle θ with positive direction of x-axis. The equation of tangent is (A) $y = x \tan \theta + 2 \cot \theta$ (B) $y \cot \theta = x - 2 \tan \theta$ (C) $y \cot \theta = x + 2 \tan \theta$ (D) $y \cot \theta = x - \tan \theta$

[Watch Free Video Solution on Doubtnut](#)

26 - 5972371

JEE MAINS 12 JAN 2019 - PAPER 1 SHIFT 2 - MEMORY BASED

One of extremity of minor of ellipse is B . S and S' are focii of ellipse then area of right angle $\triangle SBS'$ is equal to 8. Then latus rectum of ellipse is equal to (A) 4 (B) $\frac{4}{\sqrt{2}}$ (C) $2\sqrt{2}$ (D) $\frac{3}{\sqrt{2}}$


[Watch Free Video Solution on Doubtnut](#)

27 - 5972372

JEE MAINS 12 JAN 2019 - PAPER 1 SHIFT 2 - MEMORY BASED

Let $f(x) = (1 + m)x^2 - 2(1 + 3m)x + 4(1 + 2m)$. Numbe of interval values of m for which given quadratic expression is always positive is (A) 8 (B) 7 (C) 8 (D) 9

[Watch Free Video Solution on Doubtnut](#)



28 - 5972373

JEE MAINS 12 JAN 2019 - PAPER 1 SHIFT 2 - MEMORY BASED

Point P is at a height of $25m$ from surface of lake. The angle of elevation from point P on a cloud is 30° and angle of depression of image of cloud in water is 60° then height of cloud from surface of lake is (A) 75 (B) 45 (C) 50 (D) 49

[▶ Watch Free Video Solution on DoubtNut](#)

29 - 5972374

JEE MAINS 12 JAN 2019 - PAPER 1 SHIFT 2 - MEMORY BASED

Let system of linear equations $x - y - z = \lambda x$, $x + 2y + z = \lambda y$, $-x - y = \lambda z$ have non trivial solutions then set containing all the values of λ is (A) singleton set (B) has more than two elements (C) \emptyset (D) has exactly two elements.

[▶ Watch Free Video Solution on DoubtNut](#)



- [▶ Download DoubtNut to Ask Any Math Question By just a click](#)
- [▶ Get A Video Solution For Free in Seconds](#)
- [▶ DoubtNut Has More Than 1 Lakh Video Solutions](#)
- [▶ Free Video Solutions of NCERT, RD Sharma, RS Aggarwal, Cengage \(G.Tewani\), Resonance DPP, Allen, Bansal, FIITJEE, Akash, Narayana, VidyaMandir](#)
- [▶ Download DoubtNut Today](#)

