

A dice is thrown repeatedly till two successive 4's are obtained then find the probability this process stops at 5th throw (A) $\frac{75}{6^5}$ (B) $\frac{125}{6^5}$ (C) $\frac{175}{6^5}$ (D) $\frac{35}{6^5}$

[👁 Watch Free Video Solution on Doubtnut](#)

JEE MAINS 12 JAN 2019 - PAPER 1 SHIFT 1 - MEMORY BASED

5 - 5966664

For what ordered pair (α, β) the system of equations $(1 + \alpha)x + \beta y + z = 0$, $\alpha x + (1 + \beta)y + z = 0$, $\alpha x + \beta y + 2z = 0$ has unique solution (A) $(-3, 1)$ (B) $(2, 4)$ (C) $(-4, 2)$ (D) $(1, -3)$

[👁 Watch Free Video Solution on Doubtnut](#)

JEE MAINS 12 JAN 2019 - PAPER 1 SHIFT 1 - MEMORY BASED

6 - 5966665

Let $x^2 + y^2 - 2x - 2y - 2 = 0$ and $x^2 + y^2 - 6x - 6y + 14 = 0$ are two circles C_1, C_2 are the centre of circles and circles intersect at P, Q find the area of quadrilateral C_1PC_2Q (A) 12 (B) 6 (C) 8 (D) 4

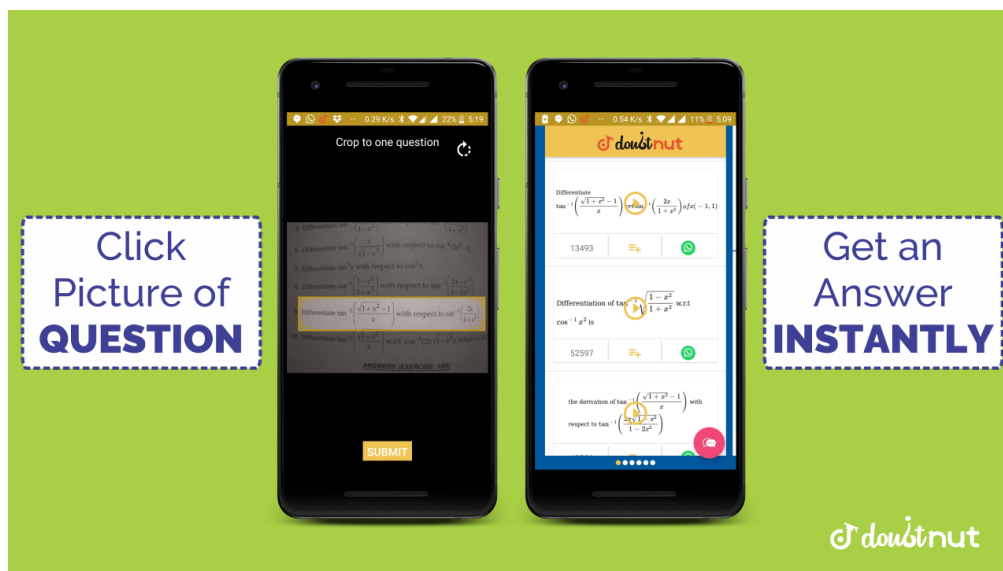
[👁 Watch Free Video Solution on Doubtnut](#)

JEE MAINS 12 JAN 2019 - PAPER 1 SHIFT 1 - MEMORY BASED

7 - 5966666

$((p \wedge q) \vee (p \vee \sim q)) \wedge (\sim p \wedge \sim q)$ is equivalent to (A) $\sim p \wedge \sim q$ (B) $p \wedge \sim q$ (C) $p \vee \sim q$ (D) $\sim p \vee q$

[👁 Watch Free Video Solution on Doubtnut](#)



JEE MAINS 12 JAN 2019 - PAPER 1 SHIFT 1 - MEMORY BASED

8 - 5966667

Algebraic sum of all the deviation from 30 of 50 observations is 50. Find their mean (A) 20 (B) 30 (C) 80 (D) 31

[👁 Watch Free Video Solution on Doubtnut](#)

9 - 5966668

JEE MAINS 12 JAN 2019 - PAPER 1 SHIFT 1 - MEMORY BASED

Set $A = \{1, 2, 3, \dots, 10\}$ find the number of subsets of A such that the product of all the elements in the subset is even (A) $2^{51} (2^{50} - 1)$ (B) $2^{50} (2^{50} - 1)$ (C) $2^{50} (2^{51} - 1)$ (D) $2^{51} (2^{49} - 1)$

[👁 Watch Free Video Solution on Doubtnut](#)

JEE MAINS 12 JAN 2019 - PAPER 1 SHIFT 1 - MEMORY BASED

10 - 5966669

Let $\tan^{-1} 2x + \tan^{-1} 3x = \frac{\pi}{4}$ where $x \geq 0$. Let S is the set containing all the solutions of the equation then S contains (A) one element (B) Two element (C) more than two element (D) none of these

[👁 Watch Free Video Solution on Doubtnut](#)

JEE MAINS 12 JAN 2019 - PAPER 1 SHIFT 1 - MEMORY BASED

11 - 5966670

$\lim_{x \rightarrow \frac{\pi}{4}} \frac{\cot^3 x - \tan x}{\cos\left(x + \frac{\pi}{4}\right)}$ is equal to (A) 8 (B) $4\sqrt{2}$ (C) $8\sqrt{2}$ (D) $2\sqrt{2}$

[👁 Watch Free Video Solution on Doubtnut](#)



JEE MAINS 12 JAN 2019 - PAPER 1 SHIFT 1 - MEMORY BASED

12 - 5966671

If $\hat{i} + \hat{j} + \mu\hat{k}$, $\mu\hat{i} + \hat{j} + \hat{k}$, $\hat{i} + \mu\hat{j} + \hat{k}$ are coplanar vectors, then sum of all distinct values of μ is (A) 0 (B) 2 (C) -1 (D) 1

[👁 Watch Free Video Solution on Doubtnut](#)

JEE MAINS 12 JAN 2019 - PAPER 1 SHIFT 1 - MEMORY BASED

13 - 5966672

In the expansion of $\left(2^{\frac{1}{3}} + \frac{1}{2(3)^{\frac{1}{3}}}\right)^{10}$ then $\frac{5^{\text{th}} \text{ term } \in n \in g}{5^{\text{th}} \text{ term } \in d}$ is equal to (A) $6^{\frac{1}{3}} : 1$ (B) $4(36)^{\frac{1}{3}} : 1$ (C) $2(36)^{\frac{1}{3}} : 1$ (D) $4(36)^{\frac{1}{3}} : 1$

[👁 Watch Free Video Solution on Doubtnut](#)

14 - 5966673

JEE MAINS 12 JAN 2019 - PAPER 1 SHIFT 1 - MEMORY BASED

The area bounded by the region between curves $y = x^2 + 2$, $x = 0$, $x = 3$, $y = x + 1$ is s (A) $\frac{15}{2}$ (B) $\frac{15}{4}$ (C) $\frac{15}{3}$ (D) $\frac{17}{2}$

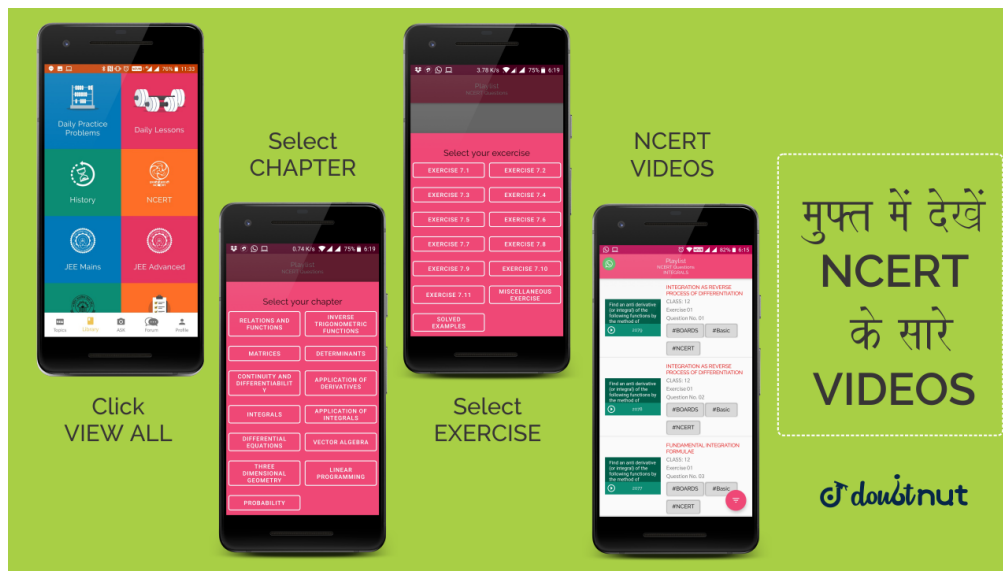
[👁 Watch Free Video Solution on Doubtnut](#)

JEE MAINS 12 JAN 2019 - PAPER 1 SHIFT 1 - MEMORY BASED

15 - 5966674

Let $y(x)$ is the solution of differential equation $\frac{dy}{dx} + y = x \log x$ and $2y(2) = \log_e 4 - 1$. Then $y(e)$ is equal to (A) $\frac{e^2}{2}$ (B) $\frac{e}{2}$ (C) $\frac{e}{4}$ (D) $\frac{e^2}{4}$

[👁 Watch Free Video Solution on Doubtnut](#)



JEE MAINS 12 JAN 2019 - PAPER 1 SHIFT 1 - MEMORY BASED

16 - 5966675

$f(x) = \min(\sin x, \cos x)$, $x \in (-\pi, \pi)$ the values of x where $f(x)$ is non differentiable, is the set A . Then A is subset of (A) $\left\{ \frac{-3\pi}{4}, \frac{-\pi}{4}, \frac{3\pi}{4} \right\}$ (B) $\left\{ \frac{-\pi}{4}, \frac{\pi}{4}, \frac{3\pi}{3} \right\}$ (C) $\left\{ \frac{-3\pi}{4}, \frac{3\pi}{4} \right\}$ (D) $\left\{ \frac{-3\pi}{4}, \frac{-\pi}{4}, \frac{\pi}{4}, \frac{3\pi}{4} \right\}$

[👁 Watch Free Video Solution on Doubtnut](#)

JEE MAINS 12 JAN 2019 - PAPER 1 SHIFT 1 - MEMORY BASED

17 - 5966676

$y^2 = 4x$ be the parabola and the points $A(9, 6)$, $B(4, -4)$ lie on the parabola such that area of $\triangle ABC$ is maximum (given C lies at the arc contain origin). Find the maximum area of $\triangle ABC$ (A) $\frac{101}{2}$ (B) $\frac{69}{2}$ (C) $\frac{125}{4}$ (D) $\frac{521}{3}$

[👁 Watch Free Video Solution on Doubtnut](#)

JEE MAINS 12 JAN 2019 - PAPER 1 SHIFT 1 - MEMORY BASED

18 - 5966677

If two circles with centre $(1, 1)$ and radius 1 and circle with centre $(9, 1)$ and radius 2 lies opposite side of straight line $3x + 4y = \lambda$. The set of values of λ is (A) $[12, 21]$ (B) $[13, 22]$ (C) $[10, 18]$ (D) $[15, 24]$

[👁 Watch Free Video Solution on Doubtnut](#)

19 - 5966678

JEE MAINS 12 JAN 2019 - PAPER 1 SHIFT 1 - MEMORY BASED

Find minimum and maximum value of $3 \cos x + 5 \sin\left(x - \frac{\pi}{6}\right)$

[📺 Watch Free Video Solution on Doubnut](#)



JEE MAINS 12 JAN 2019 - PAPER 1 SHIFT 1 - MEMORY BASED

20 - 5966679

If $(2x)^{2y} = 4(e^{2x-2y})$ then value of $\left(\frac{dy}{dx}\right)(\log_e 2x + 1)^2$ is equal to (A) $\frac{x \ln 2x + \ln 2}{x}$ (B) $\frac{x \ln 2x - \ln 2}{x}$ (C) $\frac{x \ln 2x - \ln 2}{2x}$ (D) $\frac{x \ln 2x + \ln 2}{2x}$

[📺 Watch Free Video Solution on Doubnut](#)

JEE MAINS 12 JAN 2019 - PAPER 1 SHIFT 1 - MEMORY BASED

21 - 5966680

Let $P = \begin{bmatrix} 1 & 0 & 0 \\ 3 & 1 & 0 \\ 9 & 3 & 1 \end{bmatrix}$ $Q = [q_{ij}]$ and $Q = P^5 + I_3$ then $\frac{q_{21} + q_{31}}{q_{32}}$ is equal to (A) 12 (B) 8 (C) 10 (D) 20

[📺 Watch Free Video Solution on Doubnut](#)

JEE MAINS 12 JAN 2019 - PAPER 1 SHIFT 1 - MEMORY BASED

22 - 5966681

Let $\frac{z - \alpha}{z + \alpha}$ is purely imaginary and $|z| = 2, \alpha \in \mathbb{R}$ then α is equal to (A) 2 (B) 1 (C) $\sqrt{2}$ (D) $\sqrt{3}$

[📺 Watch Free Video Solution on Doubnut](#)

JEE MAINS 12 JAN 2019 - PAPER 1 SHIFT 1 - MEMORY BASED

23 - 5966682

If ratio of the roots of the quadratic equation $3m^2x^2 + m(m-4)x + 2 = 0$ is λ such that $\lambda + \frac{1}{\lambda} = 1$ then least value of m is (A) $-2 - 2\sqrt{3}$ (B) $-2 + 2\sqrt{3}$ (C) $4 + 3\sqrt{2}$ (D) $4 - 3\sqrt{2}$

[📺 Watch Free Video Solution on Doubnut](#)



JEE MAINS 12 JAN 2019 - PAPER 1 SHIFT 1 - MEMORY BASED

24 - 5966683

A tetrahedron has vertices $O(0, 0, 0)$, $A(1, 2, 1)$, $B(2, 1, 3)$, and $C(-1, 1, 2)$, then angle between face OAB and ABC will be a. $\cos^{-1}\left(\frac{17}{31}\right)$ b. 30° c. 90° d. $\cos^{-1}\left(\frac{19}{35}\right)$

[📺 Watch Free Video Solution on DoubtNut](#)

JEE MAINS 12 JAN 2019 - PAPER 1 SHIFT 1 - MEMORY BASED

25 - 5966686

Let $f_k = \frac{1 + 2 + 3 + \dots + k}{k}$ Also is $f_1^2 + f_2^2 + f_3^2 + \dots + f_{10}^2 = \frac{5}{12}N$, then the value of N will be (A) 283 (B) 303 (C) 505 (D) 50

[📺 Watch Free Video Solution on DoubtNut](#)

JEE MAINS 12 JAN 2019 - PAPER 1 SHIFT 1 - MEMORY BASED

26 - 5966687

Let a parabola be $y = 12 - x^2$. Find the maximum area of rectangle whose base lie on x-axis and two points lie on parabola. (A) 8 (B) 4 (C) 32 (D) 34

[📺 Watch Free Video Solution on DoubtNut](#)

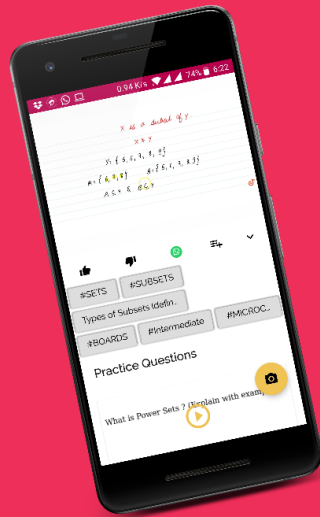
JEE MAINS 12 JAN 2019 - PAPER 1 SHIFT 1 - MEMORY BASED

27 - 5966688

A line is perpendicular to the line $2x - 3y + 5 = 0$ and passes through the points $(15, \beta)$ and $(7, 17)$ then value of β will be equal to (A) $\frac{35}{3}$ (B) $-\frac{35}{3}$ (C) 5 (D) -5

[📺 Watch Free Video Solution on DoubtNut](#)

- [📲 Download DoubtNut to Ask Any Math Question By just a click](#)
- [📲 Get A Video Solution For Free in Seconds](#)
- [📲 DoubtNut Has More Than 1 Lakh Video Solutions](#)
- [📲 Free Video Solutions of NCERT, RD Sharma, RS Aggarwal, Cengage \(G.Tewani\), Resonance DPP, Allen, Bansal, FIITJEE, Akash, Narayana, VidyaMandir](#)
- [📲 Download DoubtNut Today](#)



Get Answer just with a click!

doubtNut
has more than
1 Lakh Video
Solutions

Update the App now!

