

JEE MAINS 11 JAN 2019 - PAPER 1 SHIFT 2



MEMORY BASED

[Download Doubtnut Today](#)

$y^2 + 4(x - a^2) = 0$. One of the vertices of $\Delta'(\Delta)$ is a vertex of the given parabola and other two vertices are they where parabola meets they -exist. If area of Δ is 250. Then a will be (A) 5 (B) $5\sqrt{3}$ (C) $25\sqrt{3}$ (D) $3\sqrt{5}$

[📺 Watch Free Video Solution on Doubtnut](#)

JEE MAINS 11 JAN 2019 - PAPER 1 SHIFT 2 - MEMORY BASED

5 - 5944960

A circle cuts the chord on x-axis of length $4a$. If this circle cuts the y-axis at a point whose distance from origin is $2b$. Locus of its centre is (A) Ellipse (B) Parabola (C) Hyperbola (D) Straight line

[📺 Watch Free Video Solution on Doubtnut](#)

JEE MAINS 11 JAN 2019 - PAPER 1 SHIFT 2 - MEMORY BASED

6 - 5944961

The centre of an ellipse is at origin and its major axis coincides with x-axis. The length of minor axis is equal to distance between foci and passes through the point $(\sqrt{29}, 2\sqrt{\frac{29}{5}})$, then which of the following points lie on ellipse (A) $(4\sqrt{3}, 2\sqrt{2})$ (B) $(4\sqrt{3}, 2\sqrt{3})$ (C) $(4\sqrt{2}, 2\sqrt{3})$ (D) $(4\sqrt{2}, 2\sqrt{2})$

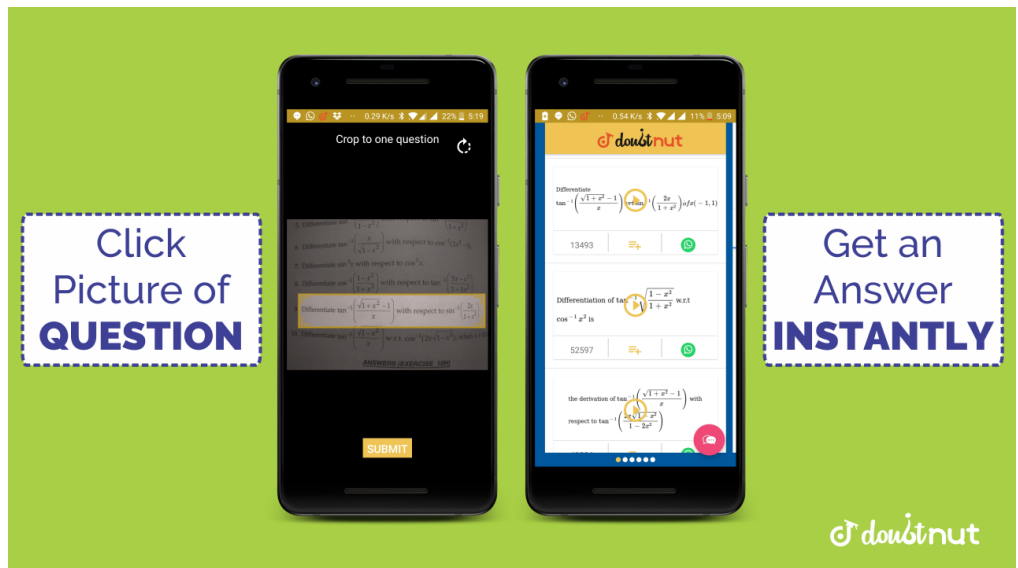
[📺 Watch Free Video Solution on Doubtnut](#)

JEE MAINS 11 JAN 2019 - PAPER 1 SHIFT 2 - MEMORY BASED

7 - 5944962

Given $ABCD$ is a parallelogram with vertices as $A(1, 2)$, $B(3, 4)$ and $C(2, 3)$. Then the equation of line AD is (A) $x + y + 1 = 0$ (B) $x - y + 1 = 0$ (C) $-x + y + 1 = 0$ (D) $x + y - 1 = 0$

[📺 Watch Free Video Solution on Doubtnut](#)



JEE MAINS 11 JAN 2019 - PAPER 1 SHIFT 2 - MEMORY BASED

8 - 5944963

A function $f: (0, \infty) \rightarrow [0, \infty]$ is given by $f(x) = \left|1 - \frac{1}{x}\right|$, then $f(x)$ is (A) Injective but not surjective (B) Injective and bijective (C) Injective only (D) Surjective only

[📺 Watch Free Video Solution on Doubtnut](#)

9 - 5944964

JEE MAINS 11 JAN 2019 - PAPER 1 SHIFT 2 - MEMORY BASED

Find $y(x)$, if it satisfies the following differential equation $\frac{dy}{dx} = (x - y)^2$, and given that $y(1) = 1$ (A) $-\ln\left|\frac{1-x+y}{1+x-y}\right| = 2(x-1)$ (B) $\ln\left|\frac{2-y}{2-x}\right| = x+y-1$ (C) $\ln\left|\frac{1-x+y}{1+x-y}\right| = 2(x-1)$ (D) $\frac{1}{2}\ln\left|\frac{1-x+y}{1+x-y}\right| + \ln|x| = 0$

[👁 Watch Free Video Solution on Doubtnut](#)

JEE MAINS 11 JAN 2019 - PAPER 1 SHIFT 2 - MEMORY BASED

10 - 5944965

The value of $\int_{\frac{\pi}{6}}^{\frac{\pi}{4}} \frac{dx}{\sin 2x \cdot (\tan^5 x + \cot^5 x)}$ is (A) $\frac{\pi}{40}$ (B) $\frac{\pi}{60}$ (C) $\frac{\pi}{120}$ (D) $\frac{\pi}{20}$

[👁 Watch Free Video Solution on Doubtnut](#)

JEE MAINS 11 JAN 2019 - PAPER 1 SHIFT 2 - MEMORY BASED

11 - 5944966

If the curve C is given by the relation $y = x^2 + 1$. Then the area enclosed by the curve C , tangent to curve C at point $(2, 5)$ and coordinate axis in the first quadrant, is (A) $\frac{30}{17}$ (B) $\frac{37}{24}$ (C) $\frac{17}{7}$ (D) $\frac{8}{3}$

[👁 Watch Free Video Solution on Doubtnut](#)



JEE MAINS 11 JAN 2019 - PAPER 1 SHIFT 2 - MEMORY BASED

12 - 5944967

If for a non constant A . $P. t_{19} = 0$. Then the ratio of $t_{49} : t_{29}$ is (A) 1 : 2 (B) 2 : 3 (C) 3 : 1 (D) 1 : 3

[👁 Watch Free Video Solution on Doubtnut](#)

JEE MAINS 11 JAN 2019 - PAPER 1 SHIFT 2 - MEMORY BASED

13 - 5944968

There are 30 white balls and 10 red balls in bag. 16 balls are drawn with replacement from the bag. If X be the number of white balls drawn then the value of $\frac{\text{mean}(X)}{\text{standard deviation}(X)}$ is equal to (A) $4\sqrt{3}$ (B) $2\sqrt{3}$ (C) $3\sqrt{3}$ (D) $3\sqrt{2}$

[👁 Watch Free Video Solution on Doubtnut](#)

JEE MAINS 11 JAN 2019 - PAPER 1 SHIFT 2 - MEMORY BASED

14 - 5944969

$$\lim_{x \rightarrow 0} \frac{x \cot 4x}{(\cot^2 2x)(\sin^2 x)}$$
 is equal to (A) 1 (B) 2 (C) 4 (D) 6

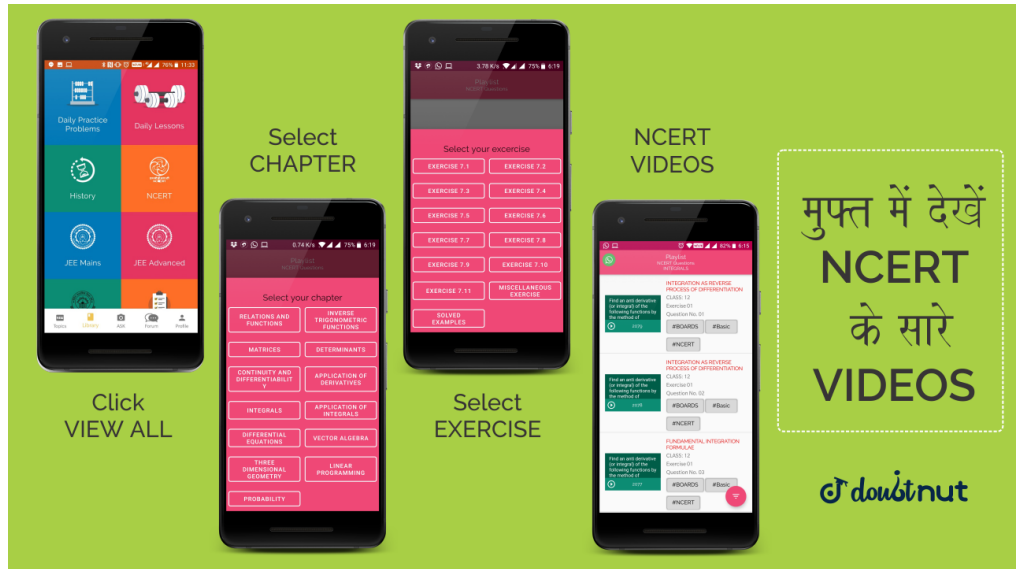
[📺 Watch Free Video Solution on Doubnut](#)

JEE MAINS 11 JAN 2019 - PAPER 1 SHIFT 2 - MEMORY BASED

15 - 5944970

If $\int \frac{(x+1)}{\sqrt{2x-1}} dx = f(x)\sqrt{2x-1} + C$. Then $f(x)$ is equal to (A) $\frac{x+4}{3}$ (B) $\frac{x+3}{4}$ (C) $\frac{2}{3}(x+2)$ (D) $x+4$

[📺 Watch Free Video Solution on Doubnut](#)



JEE MAINS 11 JAN 2019 - PAPER 1 SHIFT 2 - MEMORY BASED

16 - 5944972

Position vector of points A, B, C are $\vec{a}, \vec{b}, \vec{c}$ respectively which are by $\vec{a} = \sqrt{3}\hat{i} + \hat{j}$, $\vec{b} = \hat{i} + \sqrt{3}\hat{j}$, $\vec{c} = \beta\hat{i} + (1-\beta)\hat{j}$. If distance of point C from angle bisector of OA and OB is $\frac{3}{\sqrt{2}}$ (A) 1 (B) 2 (C) 4 (D) 3

[📺 Watch Free Video Solution on Doubnut](#)

JEE MAINS 11 JAN 2019 - PAPER 1 SHIFT 2 - MEMORY BASED

17 - 5944973

If x, y is positive real numbers then maximum value of $\frac{x^m y^m}{(1+x^{2m})(1+y^{2n})}$ is (A) $\frac{1}{4}$ (B) $\frac{1}{2}$ (C) $\frac{m+n}{6mn}$ (D) 1




[📺 Watch Free Video Solution on Doubnut](#)

18 - 5944974

JEE MAINS 11 JAN 2019 - PAPER 1 SHIFT 2 - MEMORY BASED

Contrapositive of the statement. If the squares of two numbers are equal then the numbers are equal is (A) If the squares of two numbers are equal then the numbers are equal (B) If the squares of two numbers are not equal then the numbers are not equal (C) If two numbers are not equal then the square of the numbers are not equal (D) If squares of two numbers are equal then the numbers are to equal

[📺 Watch Free Video Solution on Doubnut](#)

<p>19 - 5944975</p>	<p>JEE MAINS 11 JAN 2019 - PAPER 1 SHIFT 2 - MEMORY BASED</p> <p>Set of value of x for which $f(x) = \sin x - x + 2(x - \pi)\cos x$ is not differentiable is (A) ϕ (B) $\{0\}$ (C) $\{0, \pi\}$ (D) $\{\pi\}$</p> <p>👁 Watch Free Video Solution on Doubtnut</p>
	 <p>Made by  doubtnut सिर्फ आपके लिए</p>
<p>20 - 5944976</p>	<p>JEE MAINS 11 JAN 2019 - PAPER 1 SHIFT 2 - MEMORY BASED</p> <p>Let $S_n = 1 + q + q^2 + \dots + q^n$ and $T_n = 1 + \left(\frac{q+1}{2}\right) + \left(\frac{q+1}{2}\right)^2 + \dots + \left(\frac{q+1}{2}\right)^n$ If $\alpha T_{100} = {}^{101}C_1 + {}^{101}C_2 x S_1 + {}^{101}C_{101} x S_{100}$, then the value of α is equal to (A) 2^{99} (B) 2^{101} (C) 2^{100} (D) -2^{100}</p> <p>👁 Watch Free Video Solution on Doubtnut</p>
<p>21 - 5944977</p>	<p>JEE MAINS 11 JAN 2019 - PAPER 1 SHIFT 2 - MEMORY BASED</p> <p>If $f(x) = \frac{x}{\sqrt{a^2 + x^2}} + \frac{(d-x)}{\sqrt{b^2 + (d-x)^2}}$ then (A) $f(x)$ is strictly increasing (B) $f(x)$ is strictly decreasing (C) $f'(x)$ is constant (D) $f(x)$ is neither increasing nor decreasing</p> <p>👁 Watch Free Video Solution on Doubtnut</p>
<p>22 - 5944978</p>	<p>JEE MAINS 11 JAN 2019 - PAPER 1 SHIFT 2 - MEMORY BASED</p> <p>Let ΔABC is $\frac{b+c}{11} = \frac{c+a}{12} = \frac{a+b}{12}$ (where $AB = c, BC = a$ and $AC = b$) and $\frac{\cos A}{\alpha} = \frac{\cos B}{\beta} = \frac{\cos C}{\gamma}$ then possible ordered triplet of (α, β, γ) is (A) (9, 17, 25) (B) (19, 7, 25) (C) (7, 19, 25) (D) (19, 25, 7)</p> <p>👁 Watch Free Video Solution on Doubtnut</p>
<p>23 - 5944979</p>	<p>JEE MAINS 11 JAN 2019 - PAPER 1 SHIFT 2 - MEMORY BASED</p> <p>If $\text{Det}(AA^T B) = 8$ and $\text{Det}(AB^{-1}) = 8$, then the value of $\text{Det}(BB^T A^{-1})$ is equal to (A) 116 (B) 14 (C) 16 (D) 1</p>

[▶ Watch Free Video Solution on Doubnut](#)



JEE MAINS 11 JAN 2019 - PAPER 1 SHIFT 2 - MEMORY BASED

24 - 5944980

If $\begin{vmatrix} a-b-c & 2a & 2a \\ 2b & b-a-c & 2b \\ 2c & 2c & c-a-b \end{vmatrix} = (a+b+c)(x+a+b+c^2)$ then the value of x is equal to (A) $-2(a+b+c)$ (B) $a+b+c$ (C) $-(a+b+c)$ (D) $2(a+b+c)$

[▶ Watch Free Video Solution on Doubnut](#)

JEE MAINS 11 JAN 2019 - PAPER 1 SHIFT 2 - MEMORY BASED

25 - 5944981

If $(x+10)^{50} + (x-10)^{50} = a_0 + a_1x + a_2x^2 + \dots + a_{50}x^{50}$ then the value of a_0a_2 is equal to (A) 12.25 (B) 12.75 (C) 11.75 (D) 11.25

[▶ Watch Free Video Solution on Doubnut](#)

JEE MAINS 11 JAN 2019 - PAPER 1 SHIFT 2 - MEMORY BASED

26 - 5944982

If $|z| + z = 3 + i$, then value of $|z|$ is (A) $5/3$ (B) $3/5$ (C) $4/3$ (D) $3/4$

[▶ Watch Free Video Solution on Doubnut](#)


JEE MAINS 11 JAN 2019 - PAPER 1 SHIFT 2 - MEMORY BASED

27 - 5944983

If set $A = \{1, 2, 3, \dots, 20\}$, then find the number of onto functions from A to A such that $f(k)$ is a multiple of 3, whenever k is a multiple of 4. (A) $6^5 \times 15!$ (B) $5^6 \times 15!$ (C) $6! \times 5!$ (D) $6! \times 15!$

[▶ Watch Free Video Solution on Doubnut](#)





JEE MAINS 11 JAN 2019 - PAPER 1 SHIFT 2 - MEMORY BASED

28 - 5944984

Two points $A(7, 0, 6)$ and $B(3, 4, 2)$ lie on a plane P_1 and Plane $P_2 : 2x - 5y = 15$ is perpendicular to the plane P_1 and the point $(2, \alpha, \beta)$ also lie on plane P_1 . Then find the value of $(2\alpha, 3\beta)$ (A) 12 (B) 17 (C) 5 (D) 7

[📺 Watch Free Video Solution on Doubtnut](#)

- 📲 Download Doubtnut to Ask Any Math Question By just a click
- 📲 Get A Video Solution For Free in Seconds
- 📲 Doubtnut Has More Than 1 Lakh Video Solutions
- 📲 Free Video Solutions of NCERT, RD Sharma, RS Aggarwal, Cengage (G.Tewani), Resonance DPP, Allen, Bansal, FIITJEE, Akash, Narayana, VidyaMandir
- 📲 Download Doubtnut Today

doubtnut
पढ़ना हुआ आसान