

JEE MAINS 11 JAN 2019 - PAPER 1 SHIFT 1



MEMORY BASED

[Download Doubtnut Today](#)

From the set of numbers 1 to 11 two number are taken such that their sum is eve, then the conditional probability that selected numbers are even is equal to (A) $\frac{3}{7}$ (B) $\frac{3}{5}$ (C) $\frac{5}{7}$ (D) $\frac{2}{5}$

[👁 Watch Free Video Solution on Doubtnut](#)

JEE MAINS 11 JAN 2019 - PAPER 1 SHIFT 1 - MEMORY BASED

5 - 5944931

Evaluate $\lim_{x \rightarrow 0} \frac{\tan(\pi \sin^2 x) + (|x| - \sin(x[x]))^2}{x^2}$, where $[\cdot] = G. I. F$ (A) $\pi + 1$ (B) π (C) -1 (D) Does not exist

[👁 Watch Free Video Solution on Doubtnut](#)

JEE MAINS 11 JAN 2019 - PAPER 1 SHIFT 1 - MEMORY BASED

6 - 5944932

Let $f(x) = \begin{cases} -1 & -2 \leq x < 0 \\ x^2 - 1 & 0 \leq x < 2 \end{cases}$ if $g(x) = |f(x)| + f(|x|)$ then $g(x)$ in $(-2, 2)$ (A) not continuous (B) not differential at one point (C) differential at all points (D) not differential at two points

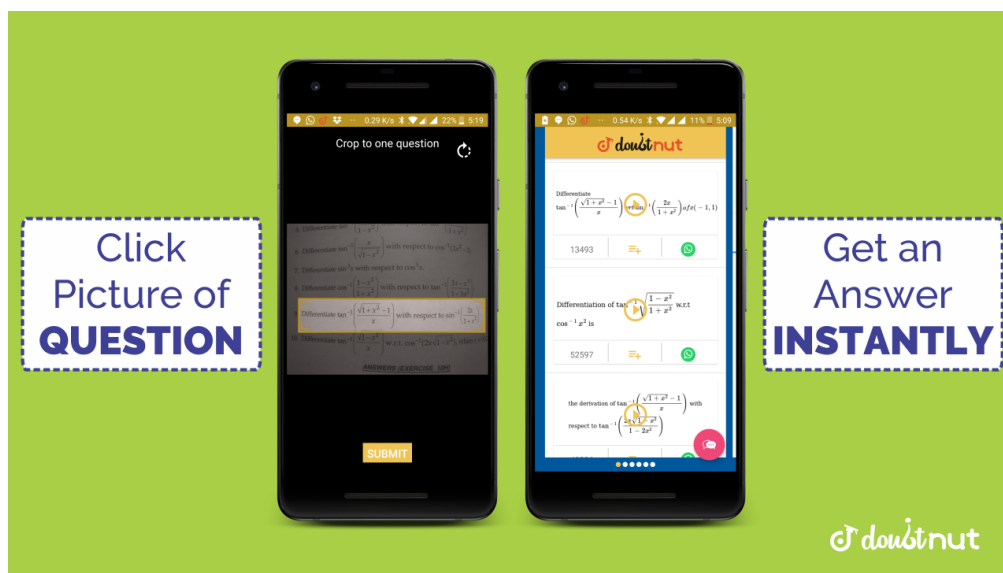
[👁 Watch Free Video Solution on Doubtnut](#)

JEE MAINS 11 JAN 2019 - PAPER 1 SHIFT 1 - MEMORY BASED

7 - 5944933

Out of 30 observation 10 are $\frac{1}{2} + d$, 10 are $\frac{1}{2}$ and other 10 are $\frac{1}{2} - d$ whose variance is $\frac{4}{3}$ then $|d|$ is equal to (A) 1 (B) $\sqrt{2}$ (C) $\sqrt{3}$ (D) $\frac{1}{\sqrt{2}}$

[👁 Watch Free Video Solution on Doubtnut](#)



JEE MAINS 11 JAN 2019 - PAPER 1 SHIFT 1 - MEMORY BASED

8 - 5944934

The equation of common tangent to the curves $y^2 = 4x$ and $xy = 2$ is (A) $x + 2y - 4 = 0$ (B) $x + 2y + 4 = 0$ (C) $x - 2y + 4 = 0$ (D) $x - 2y - 4 = 0$

[👁 Watch Free Video Solution on Doubtnut](#)

9 - 5944935

JEE MAINS 11 JAN 2019 - PAPER 1 SHIFT 1 - MEMORY BASED

If $f_k(x) = \frac{1}{k} (\sin^k x + \cos^k x)$ then $f_4(x) - f_6(x) =$ (A) $\frac{1}{12}$ (B) $\frac{5}{12}$ (C) $\frac{-1}{12}$ (D) $-\frac{5}{12}$

[👁 Watch Free Video Solution on Doubtnut](#)

JEE MAINS 11 JAN 2019 - PAPER 1 SHIFT 1 - MEMORY BASED

10 - 5944936

A square is inscribed in a circle $x^2 + y^2 - 6x + 8y - 103 = 0$ such that its sides are parallel to coordinate axis then the distance of the nearest vertex to origin, is equal to (A) 13 (B) $\sqrt{127}$ (C) $\sqrt{41}$ (D) 1

[👁 Watch Free Video Solution on Doubtnut](#)

JEE MAINS 11 JAN 2019 - PAPER 1 SHIFT 1 - MEMORY BASED

11 - 5944937

If q is false and $(p \wedge q) \leftrightarrow r$ is also true then which of the following are tautology (A) $(p \vee r) \rightarrow (p \wedge r)$ (B) $(p \vee r)$ (C) $(p \wedge r) \rightarrow (p \vee r)$ (D) $p \wedge r$

[👁 Watch Free Video Solution on Doubtnut](#)



JEE MAINS 11 JAN 2019 - PAPER 1 SHIFT 1 - MEMORY BASED

12 - 5944938

If one root is cube of the other of equation $81x^2 + kx + 256 = 0$ then value of k is equal to (A) 100 (B) -300 (C) -81 (D) 400

[👁 Watch Free Video Solution on Doubtnut](#)

JEE MAINS 11 JAN 2019 - PAPER 1 SHIFT 1 - MEMORY BASED

13 - 5944939

If x, y are real and $\left(-2 - \frac{i}{3}\right)^3 = \frac{x + iy}{27}$ then value of $y - x$ is equal to (A) 91 (B) -91 (C) 85 (D) -85

[👁 Watch Free Video Solution on Doubtnut](#)

14 - 5944940

JEE MAINS 11 JAN 2019 - PAPER 1 SHIFT 1 - MEMORY BASED

If the middle term of the expansion of $\left(\frac{x^3}{3} + \frac{3}{x}\right)^8$ is 5670 then sum of all real values of x is equal to (A) 6 (B) 3 (C) 0 (D) 2

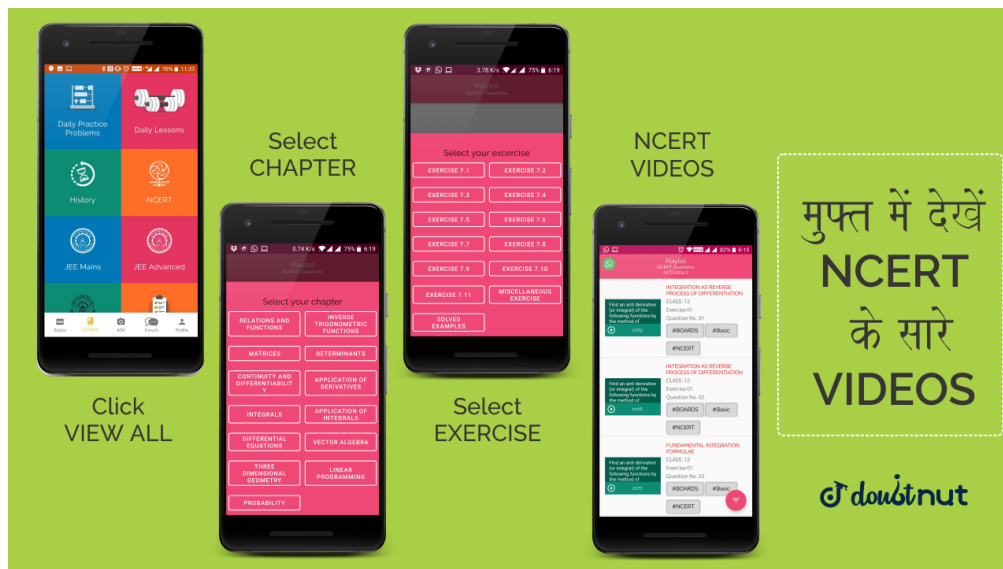
[👁 Watch Free Video Solution on Doubtnut](#)

JEE MAINS 11 JAN 2019 - PAPER 1 SHIFT 1 - MEMORY BASED

15 - 5944941

If $A = \begin{bmatrix} 0 & 2q & r \\ p & q & -r \\ p & -q & r \end{bmatrix}$ and $AA' = I$ then value of $|p|$ is equal to (A) $\frac{1}{\sqrt{3}}$ (B) $\frac{1}{\sqrt{2}}$ (C) $\frac{1}{\sqrt{6}}$ (D) $\frac{1}{\sqrt{5}}$

[👁 Watch Free Video Solution on Doubtnut](#)



JEE MAINS 11 JAN 2019 - PAPER 1 SHIFT 1 - MEMORY BASED

16 - 5944942

If x satisfies the condition $f(x) = \{x : x^2 + 30 \leq 11x\}$ then maximum value of function $f(x) = 3x^3 - 18x^2 - 27x - 40$ is equal to (A) -122 (B) 122 (C) 222 (D) -222

[👁 Watch Free Video Solution on Doubtnut](#)

JEE MAINS 11 JAN 2019 - PAPER 1 SHIFT 1 - MEMORY BASED

17 - 5944943

If $y(x)$ is solution of differential equation satisfying $\frac{dy}{dx} + \left(\frac{2x+1}{x}\right)y = e^{-2x}$, $y(1) = \frac{1}{2}e^{-2}$ then (A) $y(\log_e 2) = \log_e 2$ (B) $y(\log_e 2) = \frac{\log_e 2}{4}$ (C) $y(x)$ is decreasing in $(0, 1)$ (D) $y(x)$ is decreasing in $\left(\frac{1}{2}, 1\right)$

[👁 Watch Free Video Solution on Doubtnut](#)

JEE MAINS 11 JAN 2019 - PAPER 1 SHIFT 1 - MEMORY BASED

18 - 5944944

If $x \log_e(\log_e x) - x^2 + y^2 = 4$ then $\left(\frac{dy}{dx}\right)_{at x=e}$ is equal to (A) $\frac{2e+1}{\sqrt{4+e^2}}$ (B) $\frac{e}{2\sqrt{4+e^2}}$ (C) $\frac{2e+1}{2(4+e^2)}$ (D) $\frac{2e-1}{2(4+e^2)}$

[👁 Watch Free Video Solution on Doubtnut](#)

19 - 5944945

JEE MAINS 11 JAN 2019 - PAPER 1 SHIFT 1 - MEMORY BASED

If range of $y = \frac{x}{1+x^2}$, $\forall x \in \mathbb{R}$ is equal to (A) $[-1, 1]$ (B) $\left[-\frac{1}{2}, \frac{1}{2}\right]$ (C) $\mathbb{R} - \left[-\frac{1}{2}, \frac{1}{2}\right]$ (D) $\mathbb{R} - [-1, 1]$

[📺 Watch Free Video Solution on Doubtnut](#)



FREE VIDEOS OF PREVIOUS YEAR EXAM PAPERS

JEE ADVANCED | JEE MAINS
12 BOARD | 10 BOARDS

Made by **doubtnut** सिर्फ आपके लिए

JEE MAINS 11 JAN 2019 - PAPER 1 SHIFT 1 - MEMORY BASED

20 - 5944946

If the sum of infinite positive G.P. is 3 and sum of cubes of these terms is $\frac{27}{19}$ then common ratio of G.P. is equal to (A) $\frac{1}{3}$ (B) $\frac{2}{3}$ (C) $\frac{5}{7}$ (D) $\frac{1}{4}$

[📺 Watch Free Video Solution on Doubtnut](#)

JEE MAINS 11 JAN 2019 - PAPER 1 SHIFT 1 - MEMORY BASED

21 - 5944947

If $\vec{a} = \hat{i} + 2\hat{j} + 3\hat{k}$, $\vec{b} = \hat{i} + \lambda\hat{j} + 4\hat{k}$, $\vec{c} = 2\hat{i} + 4\hat{j} + (\lambda^2 - 1)\hat{k}$ then find the non zero value of $\vec{a} \times \vec{c}$, given \vec{a} , \vec{b} and \vec{c} are coplanar (A) $2\hat{i} - \hat{j}$ (B) $-10\hat{i} + 5\hat{j}$ (C) $2\hat{i} + \hat{j}$ (D) $\hat{i} + \hat{j} + \hat{k}$

[📺 Watch Free Video Solution on Doubtnut](#)

JEE MAINS 11 JAN 2019 - PAPER 1 SHIFT 1 - MEMORY BASED

22 - 5944948

$x^2 - c^2 = y$ then num radius of Δ is (A) $\frac{y}{\sqrt{3}}$ (B) $\frac{c}{\sqrt{3}}$ (C) $\frac{3y}{4}$ (D) $\frac{3c}{4}$

[📺 Watch Free Video Solution on Doubtnut](#)

JEE MAINS 11 JAN 2019 - PAPER 1 SHIFT 1 - MEMORY BASED

23 - 5944949

The locus of mid points of intercept made by tangents between co-ordinate axis of ellipse $x^2 + 2y^2 = 2$ is (A) $\frac{1}{4x^2} + \frac{1}{2y^2} = 1$ (B) $\frac{x^2}{2} + \frac{y^2}{4} = 1$ (C) $\frac{x^2}{4} + \frac{y^2}{2} = 1$ (D) $\frac{1}{2x^2} + \frac{1}{4y^2} = 1$

[📺 Watch Free Video Solution on Doubtnut](#)



मुफ्त में सीखें
सारे टॉपिक
Learn All
Topics
For FREE

JEE MAINS 11 JAN 2019 - PAPER 1 SHIFT 1 - MEMORY BASED

24 - 5944950

The direction ratios of normal of a plane passing through two points $(0, 1, 0)$ & $(0, 0, 1)$ and makes an angle $\frac{\pi}{4}$ with the plane $y - z - 5 = 0$ are (A) $(2, -\sqrt{2}, \sqrt{2})$ (B) $(\sqrt{2}, -1, 1)$ (C) $(\sqrt{2}, 1, 1)$ (D) $(2, \sqrt{2}, 1)$

[Watch Free Video Solution on DoubtNut](#)

JEE MAINS 11 JAN 2019 - PAPER 1 SHIFT 1 - MEMORY BASED

25 - 5944951

Value of r for which expression $20C_r^{20}C_0 + 20C_{r-2}^{20}C_1 + 20C_{r-2}^{20}C_2 + \dots + 20C_0^{20}C_r$ is maximum is equal to (A) 10 (B) 20 (C) 15 (D) 11

[Watch Free Video Solution on DoubtNut](#)

JEE MAINS 11 JAN 2019 - PAPER 1 SHIFT 1 - MEMORY BASED

26 - 5944952

A line $2x + y = 1$ intersect co-ordinate axis at points A and B . A circle is drawn passing through origin and point A & B . If perpendicular from point A and B are drawn on tangent to the circle at origin then sum of perpendicular distance is (A) $\frac{5}{\sqrt{2}}$ (B) $\frac{\sqrt{5}}{2}$ (C) $\frac{\sqrt{5}}{4}$ (D) $\frac{5}{2}$


[Watch Free Video Solution on DoubtNut](#)

JEE MAINS 11 JAN 2019 - PAPER 1 SHIFT 1 - MEMORY BASED

27 - 5944953

Two circle of equal radii are intersect at $(0, 1)$ and $(0, -1)$, and the tangent at $(0, 1)$ to one of those passes through the centre of other. Then the distance between the centres is equal to (A) $2c$ (B) $\sqrt{2}c$ (C) $\frac{1}{\sqrt{2}}$ (D) $\frac{1}{2}$

[Watch Free Video Solution on DoubtNut](#)



28 - 5944954

JEE MAINS 11 JAN 2019 - PAPER 1 SHIFT 1 - MEMORY BASED

The system of linear equations $x + 2y + 4z = a$, $3x - y + 5z = b$, $2x - 3y + z = c$ have more than two solutions then which of following is true (A) $b - a - c = 0$ (B) $c - a - b = 0$ (C) $a - b - c = 0$ (D) $a + b + c = 0$

[▶ Watch Free Video Solution on DoubtNut](#)

29 - 5944955

JEE MAINS 11 JAN 2019 - PAPER 1 SHIFT 1 - MEMORY BASED

Let $a_1, a_2, a_3, \dots, a_{10}$ are in G.P. if $\frac{a_3}{a_1} = 25$ then $\frac{a_9}{a_5}$ is equal to (A) 5^4 (B) 4.5^4 (C) 4.5^3 (D) 5^3

[▶ Watch Free Video Solution on DoubtNut](#)

- 🔗 Download DoubtNut to Ask Any Math Question By just a click
- 🔗 Get A Video Solution For Free in Seconds
- 🔗 DoubtNut Has More Than 1 Lakh Video Solutions
- 🔗 Free Video Solutions of NCERT, RD Sharma, RS Aggarwal, Cengage (G.Tewani), Resonance DPP, Allen, Bansal, FIITJEE, Akash, Narayana, VidyaMandir
- 📱 Download DoubtNut Today

