

JEE MAINS 10 JAN 2019 - PAPER 1 SHIFT 2



MEMORY BASED

[Download Doubtnut Today](#)

Ques No.	Question
1 - 5916140	<p>JEE MAINS 10 JAN 2019 - PAPER 1 SHIFT 2 - MEMORY BASED</p> <p>If $z = \left(\frac{\sqrt{3}}{2} + \frac{1}{2}i\right)^5 + \left(\frac{\sqrt{3}}{2} - \frac{1}{2}i\right)^5$, then (a) $im(z) = 0$ (b) $Re(z) > 0, Im(z) > 0$ (c) $Re(z) > 0, Im(z) < 0$ (d) $Re(z) = 3$</p> <p>Watch Free Video Solution on Doubtnut</p>
2 - 5916141	<p>JEE MAINS 10 JAN 2019 - PAPER 1 SHIFT 2 - MEMORY BASED</p> <p>if $\sum_{r=0}^{25} {}^{50}C_r \cdot {}^{50-r}C_{25-r} = k \cdot ({}^{50}C_{25})$, then k equals: (a) 2^{25} (b) $2^{25} - 1$ (c) 2^{24} (d) 25^2</p> <p>Watch Free Video Solution on Doubtnut</p>
3 - 5916142	<p>JEE MAINS 10 JAN 2019 - PAPER 1 SHIFT 2 - MEMORY BASED</p> <p>If area of an equilateral triangle inscribed in the circle $x^2 + y^2 + 10x + 12y + c = 0$ is $27\sqrt{3}$, then the value of c is (a) 25 (b) -25 (c) 36 (d) -36</p> <p>Watch Free Video Solution on Doubtnut</p>

4 - 5916143	<p>JEE MAINS 10 JAN 2019 - PAPER 1 SHIFT 2 - MEMORY BASED</p> <p>In curve which satisfies the differential equation $(x^2 + y^2)dx + 2xydy = 0$ Passes through (1, 1) then curve is (a) a circle with centre on x-axis (b) a circle with centre on y-axis (c) a hyperbola with transverse axis as x-axis (d) an ellipse with major axis as y-axis</p>
-------------	---

[📺 Watch Free Video Solution on Doubnut](#)

JEE MAINS 10 JAN 2019 - PAPER 1 SHIFT 2 - MEMORY BASED

5 - 5916144

In a $\triangle ABC, \angle A + \angle C = 120^\circ, a = \sqrt{3} + 1, b = \sqrt{3} - 1$, then the ratio of $\angle A$ to $\angle B$ is (a) 7:1 (b) 5:1 (c) 3:1 (d) 5:3

[📺 Watch Free Video Solution on Doubnut](#)

JEE MAINS 10 JAN 2019 - PAPER 1 SHIFT 2 - MEMORY BASED

6 - 5916145

The mean and standard deviation of five observations x_1, x_2, x_3, x_4, x_5 are 10 and 3 respectively, then variance of the observation $x_1, x_2, x_3, x_4, x_5, -50$ is equal to (a) 437.5 (b) 507.5 (c) 537.5 (d) 487.5

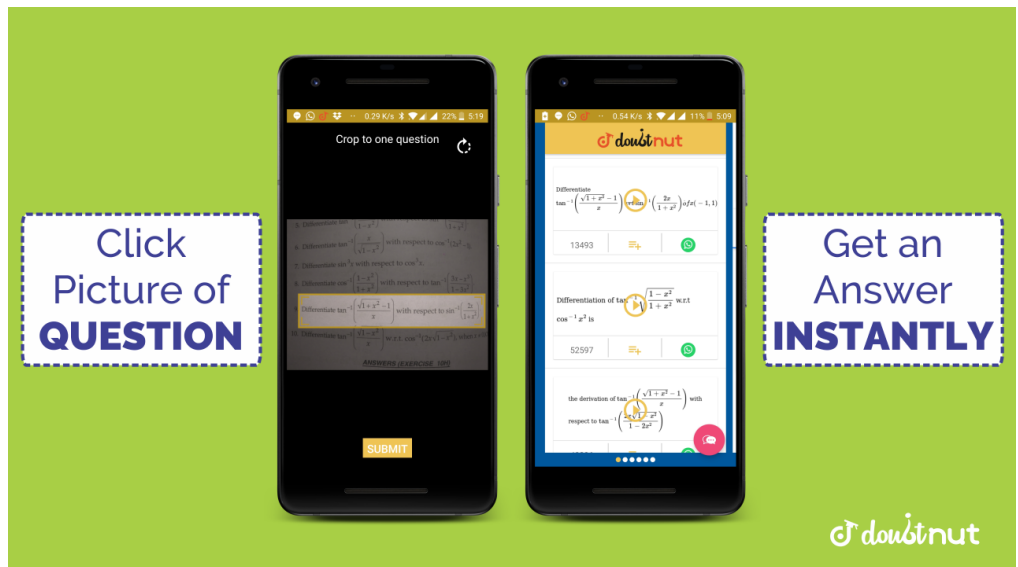
[📺 Watch Free Video Solution on Doubnut](#)

JEE MAINS 10 JAN 2019 - PAPER 1 SHIFT 2 - MEMORY BASED

7 - 5916146

the length of intercept made by the line $\sqrt{2}x - y - 4\sqrt{2} = 0$ on the parabola $y^2 = 4x$ is equal to (a) $6\sqrt{3}$ (b) $4\sqrt{3}$ (c) $8\sqrt{2}$ (d) $6\sqrt{2}$

[📺 Watch Free Video Solution on Doubnut](#)



JEE MAINS 10 JAN 2019 - PAPER 1 SHIFT 2 - MEMORY BASED

8 - 5916147

The probability that a shooter hits a target is $\frac{1}{3}$. The minimum number of trials such that probability of hitting the target at least once is greater than $\frac{5}{6}$ is equal to (a) 4 (b) 5 (c) 6 (d) 7

[📺 Watch Free Video Solution on Doubnut](#)

JEE MAINS 10 JAN 2019 - PAPER 1 SHIFT 2 - MEMORY BASED

9 - 5916148

If two vertices of a triangle are $(0, 2)$ and $(4, 3)$ and its orthocentre is $(0, 0)$ then the third vertex of the triangle lies in (a) Ist quadrant (b) IInd quadrant (c) IIIrd quadrant (d) IVth quadrant

[📺 Watch Free Video Solution on Doubnut](#)

10 - 5916149

JEE MAINS 10 JAN 2019 - PAPER 1 SHIFT 2 - MEMORY BASED

The value of $\cot \sum_{n=1}^{19} \cot^{-1} \left(1 + \sum_{p=1}^n 2p \right)$ is equal to (a) $\frac{21}{19}$ (b) $\frac{19}{21}$ (c) $-\frac{19}{21}$ (d) $-\frac{21}{19}$

[📺 Watch Free Video Solution on Doubtnut](#)

11 - 5916150

JEE MAINS 10 JAN 2019 - PAPER 1 SHIFT 2 - MEMORY BASED

A helicopter flying along the path $y = 7 + x^{\frac{3}{2}}$, A soldier standing at point $\left(\frac{1}{2}, 7 \right)$ wants to hit the helicopter when it is closest from him, then minimum distance is equal to (a) $\frac{1}{6} \frac{\sqrt{2}}{3}$ (b) $\frac{1}{2}$ (c) $\frac{1}{3} \sqrt{\frac{2}{3}}$ (d) $\sqrt{\frac{5}{2}}$

[📺 Watch Free Video Solution on Doubtnut](#)



Get Solutions as YOU TYPE

Click Here to TYPE & ASK

12 - 5916151

JEE MAINS 10 JAN 2019 - PAPER 1 SHIFT 2 - MEMORY BASED

The value of λ for which the sum of squares of roots of the equation $x^2 + (3 - \lambda)x + 2 = \lambda$ is minimum, then λ is equal to (a) 2 (b) -1 (c) -3 (d) -2

[📺 Watch Free Video Solution on Doubtnut](#)

13 - 5916152

JEE MAINS 10 JAN 2019 - PAPER 1 SHIFT 2 - MEMORY BASED

Two sides of a parallelogram are $x + y = 3$ and $y - x = 3$. If the diagonals meet at $(2, 4)$ then which of the following can be one of the vertex of parallelogram. (a) (3,6) (b) (0,0) (c) (1, -2) (d) (2, 3)

[📺 Watch Free Video Solution on Doubtnut](#)

14 - 5916153

JEE MAINS 10 JAN 2019 - PAPER 1 SHIFT 2 - MEMORY BASED

Let $f: (-1, 1) \rightarrow R$ be defined as $f(x) = \max \left(-|x|, -\sqrt{1-x^2} \right)$, then number of points where it is non differentiable are equal to (a) 1 (b) 2 (c) 3 (d) 4

[📺 Watch Free Video Solution on Doubtnut](#)

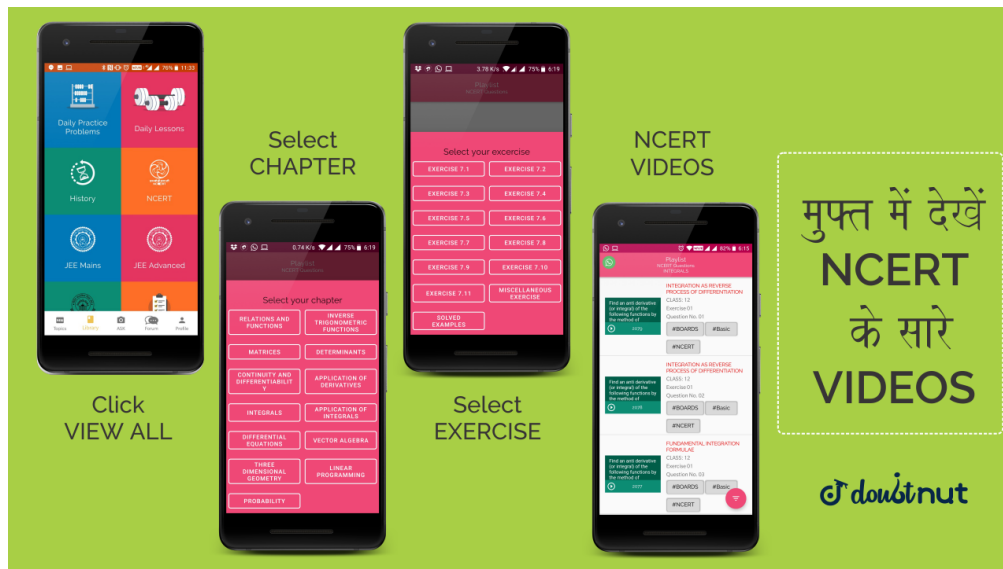
15 - 5916154

JEE MAINS 10 JAN 2019 - PAPER 1 SHIFT 2 - MEMORY BASED

The value of $\int_{\frac{\pi}{2}}^{\pi} \frac{dx}{[x] + [\sin x] + 4}$ is equal to (a) $\frac{3}{20}(4\pi - 3)$ (b) $\frac{3}{10}(4\pi - 3)$ (c) $\frac{1}{12}(7\pi - 5)$ (d) $\frac{1}{12}(7\pi - 3)$

[📺 Watch Free Video Solution on Doubnut](#)

doubnut
पढ़ना हुआ आसान



16 - 5916155

JEE MAINS 10 JAN 2019 - PAPER 1 SHIFT 2 - MEMORY BASED

If $\int x^5 e^{4x^2} dx = \frac{1}{48} e^{4x^2} (f(x)) + c$, where c is constant of integration then $f(x)$ equals to (a) $-4x^3 - 1$ (b) $-1 - 2x^3$ (c) $4x^3 + 1$ (d) $1 - 2x^3$

[📺 Watch Free Video Solution on Doubnut](#)

17 - 5916156

JEE MAINS 10 JAN 2019 - PAPER 1 SHIFT 2 - MEMORY BASED

If $f(x)$ is a differentiable function such that $f'(x) = 7 - \frac{3}{4} \frac{f(x)}{x}$, $f(1) \neq 4$, then $\lim_{x \rightarrow 0^+} x f\left(\frac{1}{x}\right)$ is equal to (a) does not exist (b) exist and equal to 4 (c) exist and is equal to $\frac{4}{7}$ (d) exists and equal to 0

[📺 Watch Free Video Solution on Doubnut](#)

18 - 5916157

JEE MAINS 10 JAN 2019 - PAPER 1 SHIFT 2 - MEMORY BASED

The equation $\frac{y^2}{1+r} - \frac{x^2}{1-r} = 1$ (a) represents a hyperbola of eccentricity equal to $\frac{1}{\sqrt{r+1}}$ if $r \in (0, 1)$ (b) represents a hyperbola of eccentricity equal to $\sqrt{\frac{1-r}{1+r}}$ if $r \in (0, 1)$ (c) represents a hyperbola of eccentricity equal to $\sqrt{\frac{2}{r+1}}$ if $r > 1$ (d) represents a hyperbola of eccentricity equal to $\sqrt{\frac{r+1}{2}}$ if $r > 1$

[📺 Watch Free Video Solution on Doubnut](#)

19 - 5916158

JEE MAINS 10 JAN 2019 - PAPER 1 SHIFT 2 - MEMORY BASED

If matrix $A = \begin{bmatrix} 2 & b & 1 \\ b & b^2 + b & b \\ 1 & b & 2 \end{bmatrix}$ Then minimum value of $\frac{|A|}{b}$ is equal to (a) $2\sqrt{3}$ (b) $-2\sqrt{3}$ (c) $\sqrt{3}$ (d) $-\sqrt{3}$

[▶ Watch Free Video Solution on Doubtnut](#)

 **doubt**nut
पढ़ना हुआ आसान


JEE MAINS 10 JAN 2019 - PAPER 1 SHIFT 2 - MEMORY BASED

20 - 5916159

Let \vec{a} and \vec{b} are non collinear vectors. If vectors $\vec{\alpha} = (\lambda - 2)\vec{a} + \vec{b}$ and $\vec{\beta} = (4\lambda - 2)\vec{a} + 3\vec{b}$ are collinear, then λ is equal to (a) -4 (b) 4 (c) 2 (d) -2

[▶ Watch Free Video Solution on Doubtnut](#)

JEE MAINS 10 JAN 2019 - PAPER 1 SHIFT 2 - MEMORY BASED

21 - 5916160

Tangent at $(1, e)$ on the curve $y = xe^{x^2}$, also passes through the point (a) $\left(\frac{4}{3}, 2e\right)$ (b) $\left(\frac{5}{3}, e\right)$ (c) $\left(\frac{4}{3}, 3e\right)$ (d) $\left(\frac{3}{4}, 3e\right)$

[▶ Watch Free Video Solution on Doubtnut](#)

JEE MAINS 10 JAN 2019 - PAPER 1 SHIFT 2 - MEMORY BASED

22 - 5916161

A plane bisects the line segment joining $(-3, -3, 4)$ and $(3, 7, 6)$ and also perpendicular to this line, then the point lies on the plane can be (a) $(1, -2, 3)$ (b) $(1, 2, 2)$ (c) $(3, -5, 2)$ (d) $(3, -1, 0)$

[▶ Watch Free Video Solution on Doubtnut](#)

23 - 5916162

JEE MAINS 10 JAN 2019 - PAPER 1 SHIFT 2 - MEMORY BASED

The number of possible value of θ lies in $(0, \pi)$, such that system of equation $x + 3y + 7z = 0$, $-x + 4y + 7z = 0$, $x \sin 3\theta + y \cos 2\theta + 2z = 0$ has non trivial solution is/are equal to (a) 2 (b) 3 (c) 5 (d) 4

[Watch Free Video Solution on Doubnut](#)



24 - 5916163

JEE MAINS 10 JAN 2019 - PAPER 1 SHIFT 2 - MEMORY BASED

If $\int_0^x f(t)dt = x^2 + \int_{+1}^x t^2 f(t)dt$, then $f\left(\frac{1}{2}\right)$ is equal to (a) $\frac{24}{25}$ (b) $\frac{4}{25}$ (c) $\frac{4}{5}$ (d) $\frac{2}{5}$

[Watch Free Video Solution on Doubnut](#)

25 - 5916164

JEE MAINS 10 JAN 2019 - PAPER 1 SHIFT 2 - MEMORY BASED

Which of the following line is passing through point of intersection of line $\frac{x-4}{2} = \frac{y-3}{2} = \frac{z-5}{1}$ and the plane $x+y+z=2$ (a) $\frac{x}{2} = \frac{y+1}{3} = \frac{z-3}{4}$ (b) $\frac{x-2}{3} = \frac{y-1}{3} = \frac{z-3}{2}$ (c) $\frac{x}{2} = \frac{y+1}{3} = \frac{z-2}{4}$ (d) $\frac{x-2}{2} = \frac{y+1}{3} = \frac{z+3}{4}$

[Watch Free Video Solution on Doubnut](#)

26 - 5916165

JEE MAINS 10 JAN 2019 - PAPER 1 SHIFT 2 - MEMORY BASED

If a_1, a_2, \dots, a_{10} are in G.P, where $a_i > 0$ and S is a set of ordered pairs (r, k) such that $\begin{bmatrix} \ln a_1^r a_2^k & \ln a_2^r a_3^k & \ln a_3^r a_4^k \\ \ln a_4^r a_5^k & \ln a_5^r a_6^k & \ln a_6^r a_7^k \\ \ln a_7^r a_8^k & \ln a_8^r a_9^k & \ln a_9^r a_{10}^k \end{bmatrix} = 0$, then number of pairs (r, k) is (a) infinitely many (b) 1 (c) 5 (d) 3

[Watch Free Video Solution on Doubnut](#)


27 - 5916166

JEE MAINS 10 JAN 2019 - PAPER 1 SHIFT 2 - MEMORY BASED

Given three statements P: 5 is a prime number, Q: 7 is a factor of 192, R: The LCM of 5 & 7 is 35 Then which of the following statements are true (a) $P \vee (\sim Q \wedge R)$ (b) $\sim P \wedge (\sim Q \wedge R)$ (c) $(P \vee Q) \wedge \sim R$ (d) $\sim P \wedge (\sim Q \wedge R)$

[Watch Free Video Solution on Doubnut](#)





28 - 5916167

JEE MAINS 10 JAN 2019 - PAPER 1 SHIFT 2 - MEMORY BASED

the value of $\frac{\cos(\pi)}{2^2}, \frac{\cos(\pi)}{2^3}, \frac{\cos(\pi)}{2^4}, \frac{\cos(\pi)}{2^{10}}, \frac{\sin(\pi)}{2(10)}$ is (a) $\frac{1}{1024}$ (b) $\frac{1}{512}$ (c) $\frac{1}{256}$ (d) $\frac{1}{128}$

[▶ Watch Free Video Solution on Doubtnut](#)

29 - 5916168

JEE MAINS 10 JAN 2019 - PAPER 1 SHIFT 2 - MEMORY BASED

If coefficient of x^2 is expansion of $x^2 \left(\sqrt{x} + \frac{\lambda}{x^2} \right)^{10}$ is 720, then λ can be equal to (a) 8 (b) 4 (c) 12 (d) 2

[▶ Watch Free Video Solution on Doubtnut](#)

30 - 5916169

JEE MAINS 10 JAN 2019 - PAPER 1 SHIFT 2 - MEMORY BASED

If $f: N \rightarrow N$ is given by $f(x) = \begin{cases} \frac{x+1}{2} & \text{if } x \text{ is odd} \\ \frac{x}{2} & \text{if } x \text{ is even} \end{cases}$ and $g: N \rightarrow N$ is given by $g(x) = x - (-1)^x$, then $f \circ g(x)$ is (a) one one and onto (b) may one and onto (c) one one and not onto (d) neither one-one onto

[▶ Watch Free Video Solution on Doubtnut](#)



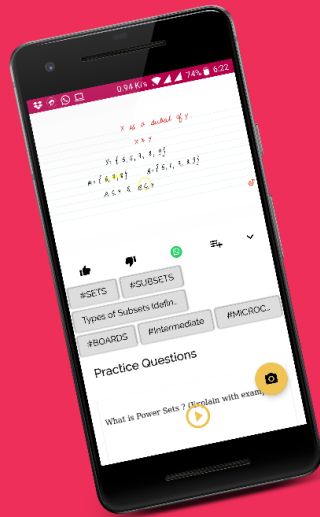
[▶ Download Doubtnut to Ask Any Math Question By just a click](#)

[▶ Get A Video Solution For Free in Seconds](#)

[▶ Doubtnut Has More Than 1 Lakh Video Solutions](#)

[▶ Free Video Solutions of NCERT, RD Sharma, RS Aggarwal, Cengage \(G.Tewani\), Resonance DPP, Allen, Bansal, FIITJEE, Akash, Narayana, VidyaMandir](#)

[▶ Download Doubtnut Today](#)



Get Answer just with a click!

 **doubt**nut
has more than
1 Lakh Video
Solutions

Update the App now!

