

JEE MAINS 10 JAN 2019 - PAPER 1 SHIFT 1



MEMORY BASED

[Download Doubtnut Today](#)

$$\sum_{i=1}^{20} \left(\frac{{}^{20}C_{i-1}}{{}^{20}C_i + {}^{20}C_{i-1}} \right) = \frac{k}{21}$$
 then find value of k. (a) 400 (b) 100 (c) 50 (d) 200

[👁 Watch Free Video Solution on Doubnut](#)

JEE MAINS 10 JAN 2019 - PAPER 1 SHIFT 1 - MEMORY BASED

5 - 5912718

If the third term in expansion of $(1 + x^{\log_2 x})^5$ is 2560 then x is equal to (a) $2\sqrt{2}$ (b) $\frac{1}{8}$ (c) $\frac{1}{4}$ (d) $4\sqrt{2}$

[👁 Watch Free Video Solution on Doubnut](#)

JEE MAINS 10 JAN 2019 - PAPER 1 SHIFT 1 - MEMORY BASED

6 - 5912719

$5, 5r, 5r^2$ are sides of a triangle. Which value of r cannot be possible (a) $3/2$ (b) $5/4$ (c) $3/4$ (d) $7/4$

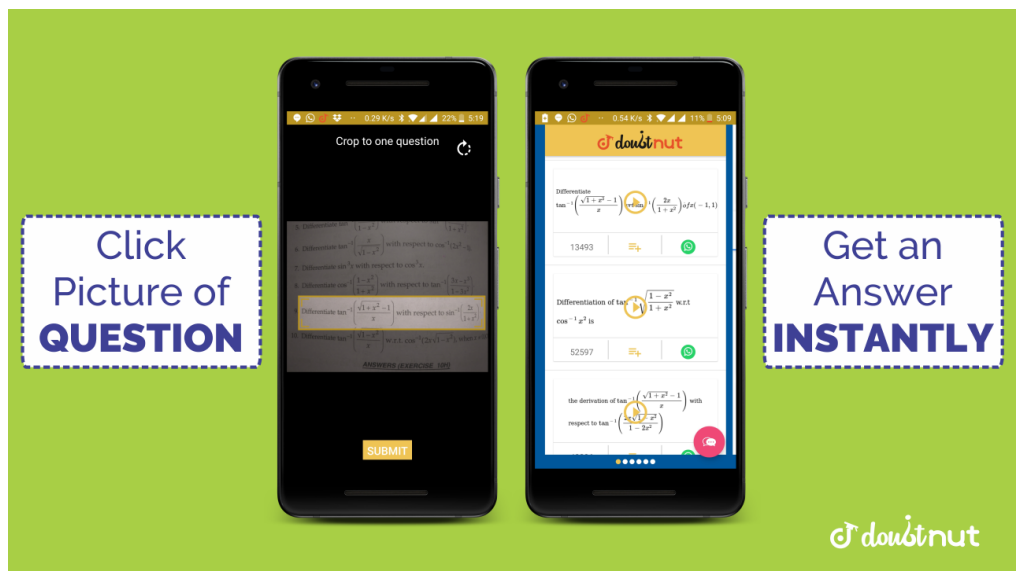
[👁 Watch Free Video Solution on Doubnut](#)

JEE MAINS 10 JAN 2019 - PAPER 1 SHIFT 1 - MEMORY BASED

7 - 5912720

Sides of $\triangle ABC$, $AB = 7\text{cm}$, $BC = 5\text{cm}$, $CA = 6\text{cm}$. A pole is stand at mid point of side AC . Angle of elevation of pole from vertex B is 30° , find height of pole (a) $\frac{\sqrt{7}}{3}$ (b) $\frac{2\sqrt{7}}{\sqrt{3}}$ (c) $2\sqrt{21}$ (d) $2\sqrt{7}$

[👁 Watch Free Video Solution on Doubnut](#)



JEE MAINS 10 JAN 2019 - PAPER 1 SHIFT 1 - MEMORY BASED

8 - 5912721

The equation of tangent to hyperbola $4x^2 - 5y^2 = 20$ which is parallel to $x - y = 2$ is (a) $x - y + 3 = 0$ (b) $x - y + 1 = 0$ (c) $x - y = 0$ (d) $x - y - 3 = 0$

[👁 Watch Free Video Solution on Doubnut](#)

9 - 5912722

JEE MAINS 10 JAN 2019 - PAPER 1 SHIFT 1 - MEMORY BASED

Minimum distance of a point $\left(\frac{3}{2}, 0\right)$ from the curve $y = \sqrt{x}$ is (a) $\frac{\sqrt{5}}{2}$ (b) $\frac{5}{4}$ (c) $\sqrt{5}$ (d) $\frac{5}{2}$

[📺 Watch Free Video Solution on Doubtnut](#)

JEE MAINS 10 JAN 2019 - PAPER 1 SHIFT 1 - MEMORY BASED

10 - 5912723

Let the five observations are 1, 3, 8, x , y and their mean is 5 and variance is 9.2 find the value of $\frac{x}{y}$ (a) 9 : 4 (b) 6 : 7 (c) 5 : 8 (d) none

[📺 Watch Free Video Solution on Doubtnut](#)

JEE MAINS 10 JAN 2019 - PAPER 1 SHIFT 1 - MEMORY BASED

11 - 5912724

Let the quadratic equation $(c - 5)x^2 - 2cx + c - 4 = 0$ has one root in $(0, 2)$ and other root in $(2, 3)$ then find the number of intergral values of c in solution set (a) 18 (b) 12 (c) 11 (d) 10

[📺 Watch Free Video Solution on Doubtnut](#)



JEE MAINS 10 JAN 2019 - PAPER 1 SHIFT 1 - MEMORY BASED

12 - 5912725

Let equations are $x + y + z = 1$, $x + 3y + 5z = \beta$, $3x + 4y + \alpha z = 9$ find $(\alpha - \beta)$ for which this system has infinite solution (a) 18 (b) 13 (c) 5 (d) 8

[📺 Watch Free Video Solution on Doubtnut](#)

JEE MAINS 10 JAN 2019 - PAPER 1 SHIFT 1 - MEMORY BASED

13 - 5912726

Let $2|z_1| = 3|z_2|$ and $\frac{2}{3} \frac{z_1}{z_2} + \frac{3}{2} \frac{z_2}{z_1} = z$ then (a) real part of z is 0 (b) imaginary part at z is 0 (c) $|z| = \frac{\sqrt{5}}{2}$ (d) $|z| = \frac{\sqrt{17}}{2\sqrt{2}}$

[📺 Watch Free Video Solution on Doubtnut](#)


JEE MAINS 10 JAN 2019 - PAPER 1 SHIFT 1 - MEMORY BASED

14 - 5912727

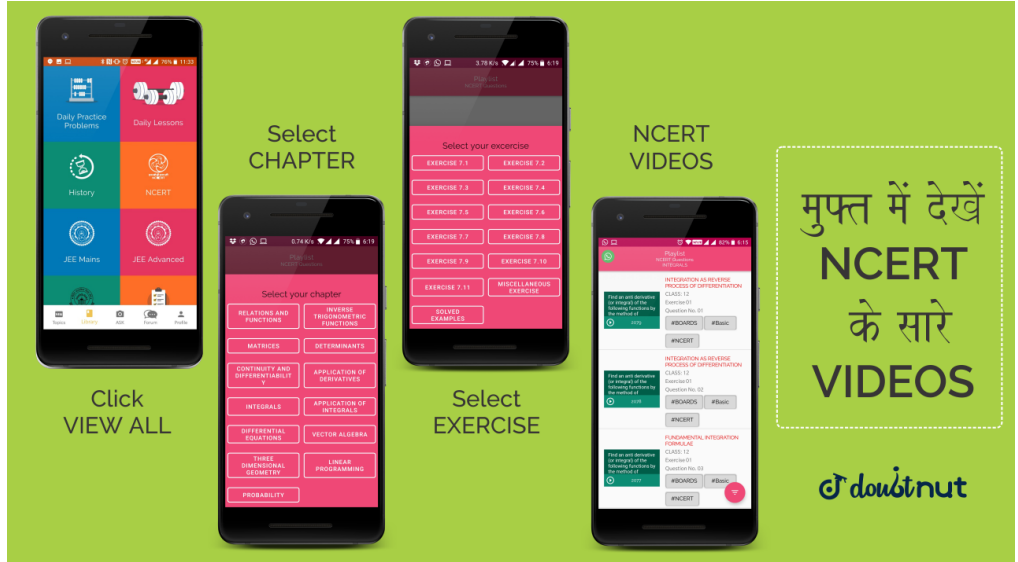
A plane passes through pont $(4, -1, 3)$ and $is\ parallel\ \leq\ l \rightarrow\ the\ l \in\ es(x+2)/3=(y-2)/(-1)=(z+2)/2$ and $(x-1)/1=(y-2)/2=(z-3)/3$ then which of the follow $\in\ gp$ onts lies on pla \neq (a) $(1, 1, 1)$ (b) $(1, 1, -1)$ (c) $(1, 0, -1)$ (d) $(0, 1, 1)$

[📺 Watch Free Video Solution on Doubtnut](#)

<p>15 - 5912728</p>	<p>JEE MAINS 10 JAN 2019 - PAPER 1 SHIFT 1 - MEMORY BASED</p> <p>A line $4x + 3y = 24$ cut the x-axis at point A and cut the y-axis at point B then incentre of triangle OAB is (a) $(4, 4)$ (b) $(4, 3)$ (c) $(3, 4)$ (d) $(2, 2)$</p> <p>📺 Watch Free Video Solution on Doubnut</p>
---------------------	--



पढ़ना हुआ आसान



<p>16 - 5912729</p>	<p>JEE MAINS 10 JAN 2019 - PAPER 1 SHIFT 1 - MEMORY BASED</p> <p>If $\sin^{22} \theta + \cos^{42} \theta = \frac{3}{4}$ where $\theta \in \left[0, \frac{\pi}{2}\right]$, then find the sum of all values of theta (a) π (b) $-\pi$ (c) $\frac{5\pi}{4}$ (d) $\frac{\pi}{2}$</p> <p>📺 Watch Free Video Solution on Doubnut</p>
---------------------	---

<p>17 - 5912730</p>	<p>JEE MAINS 10 JAN 2019 - PAPER 1 SHIFT 1 - MEMORY BASED</p> <p>$I = \int \left(\frac{(\sin x)^n - \sin x^{1/n}}{(\sin x)^{n+1} \cos x dx} \right)$ is equal to (a) $\left(\frac{n}{n^2 - 1} \right) \left(1 - \frac{1}{(\sin x)^{n-1}} \right)^{\frac{1}{n}+1} + c$ (b) $\left(\frac{n}{n^2 + 1} \right) \left(1 - \frac{1}{(\sin x)^{n-1}} \right)^{\frac{1}{n}+1} + c$ (c) $\frac{n}{n^2 + 1} \left(1 - \frac{1}{(\sin x)^{n-1}} \right)^{\frac{1}{n}} + c$ (d) $\frac{n}{n^2 - 1} \left(1 - \frac{1}{\sin x} \right)^{\frac{1}{n}+1} + c$</p> <p>📺 Watch Free Video Solution on Doubnut</p>
---------------------	---

<p>18 - 5912731</p>	<p>JEE MAINS 10 JAN 2019 - PAPER 1 SHIFT 1 - MEMORY BASED</p> <p>$\lim_{x \rightarrow 1^+} \frac{(1 - x - \sin 1 - x) \left(\frac{\sin \pi}{2} [1 - x] \right)}{(1 - x) \cdot ([1 - x])}$, where $[.]$ is greatest integer function is equal to (a) 1 (b) 2 (c) 3 (d) 4</p> <p>📺 Watch Free Video Solution on Doubnut</p>
---------------------	--

<p>19 - 5912732</p>	<p>JEE MAINS 10 JAN 2019 - PAPER 1 SHIFT 1 - MEMORY BASED</p>
---------------------	--

$f(x) = \begin{cases} \max(|x|, x^2) & |x| \leq 2 \\ 8 - 2|x| & 2 < |x| \leq 4 \end{cases}$ is (a) discontinuous at $x = 1$ (b) discontinuous at $x = 2$ (c) non differentiable at $x = 2$ (d) discontinuous at $x = -1$

[📺 Watch Free Video Solution on Doubtnut](#)



JEE MAINS 10 JAN 2019 - PAPER 1 SHIFT 1 - MEMORY BASED

20 - 5912733

If $y^2 = 4b(x - c)$ and $y^2 = 8ax$ having common normal then (a, b, c) is (a) $(\frac{1}{2}, 2, 0)$ (b) $(1, 1, 3)$ (c) $(1, 1, 1)$ (d) $(1, 3, 2)$

[📺 Watch Free Video Solution on Doubtnut](#)

JEE MAINS 10 JAN 2019 - PAPER 1 SHIFT 1 - MEMORY BASED

21 - 5912734

The radius of the circle which touches circle $(x + 2)^2 + (y - 3)^2 = 25$ at point $(1, -1)$ and passes through $(4, 0)$ is (a) 4 (b) 5 (c) 3 (d) 8

[📺 Watch Free Video Solution on Doubtnut](#)

JEE MAINS 10 JAN 2019 - PAPER 1 SHIFT 1 - MEMORY BASED

22 - 5912735

Consider $p(m) = m^2 - m + 41$ (a) $P(3)$ is prime, is true and $P(5)$ is prime, is true (b) $P(3)$ is prime, is true and $P(5)$ is prime, is false (c) $P(3)$ is prime, is false and $P(5)$ is prime, is true (d) $P(3)$ is prime, is false and $P(5)$ is prime, is false

[📺 Watch Free Video Solution on Doubtnut](#)

JEE MAINS 10 JAN 2019 - PAPER 1 SHIFT 1 - MEMORY BASED

23 - 5912736

Consider a two digit number which when divided by 7 leaves the remainder 2 or 5 then find sum of all possible number (a) 1356 (b) 1256 (c) 1456 (d) 1265

[📺 Watch Free Video Solution on Doubtnut](#)



24 - 5912737

JEE MAINS 10 JAN 2019 - PAPER 1 SHIFT 1 - MEMORY BASED

Minimum value of $\int_A^B (x^4 - 2x^2) dx$ then (A, B) is (a) $(-\sqrt{2}, \sqrt{2})$ (b) $(0, \sqrt{2})$ (c) $(\sqrt{2}, 4)$ (d) Non

[▶ Watch Free Video Solution on DoubtNut](#)

25 - 5912738

JEE MAINS 10 JAN 2019 - PAPER 1 SHIFT 1 - MEMORY BASED

Toss a coin if head comes, two dices thrown simultaneously. If tail come, draw a card from number 1 to 9. What is probability of sum of number on dice 7 or 8 and number of card also 7 or 8. When head comes (a) $\frac{9}{72}$ (b) $\frac{19}{72}$ (c) $\frac{15}{36}$ (d) $\frac{72}{00}$

[▶ Watch Free Video Solution on DoubtNut](#)

26 - 5912739

JEE MAINS 10 JAN 2019 - PAPER 1 SHIFT 1 - MEMORY BASED

If $6x + 7y = 48$ cut at two points A & B origin (O) then incentre of $\triangle AOB$ is (a) $(2, 4)$ (b) $(4, 4)$ (c) $(2, 2)$ (d) $(4, 2)$

[▶ Watch Free Video Solution on DoubtNut](#)

27 - 5912740

JEE MAINS 10 JAN 2019 - PAPER 1 SHIFT 1 - MEMORY BASED

If $f(x) = x^3 + x^2 f(1) + x f''(2) + f'''(3)$. Then $f(2)$ is (a) -2 (b) 1 (c) 30 (d) 2

[▶ Watch Free Video Solution on DoubtNut](#)



- [▶ Download DoubtNut to Ask Any Math Question By just a click](#)
- [▶ Get A Video Solution For Free in Seconds](#)
- [▶ DoubtNut Has More Than 1 Lakh Video Solutions](#)
- [▶ Free Video Solutions of NCERT, RD Sharma, RS Aggarwal, Cengage \(G.Tewani\), Resonance DPP, Allen, Bansal, FIITJEE, Akash, Narayana, VidyaMandir](#)
- [▶ Download DoubtNut Today](#)



Get Answer just with a click!

doubtnut
has more than
1 Lakh Video
Solutions

Update the App now!

