
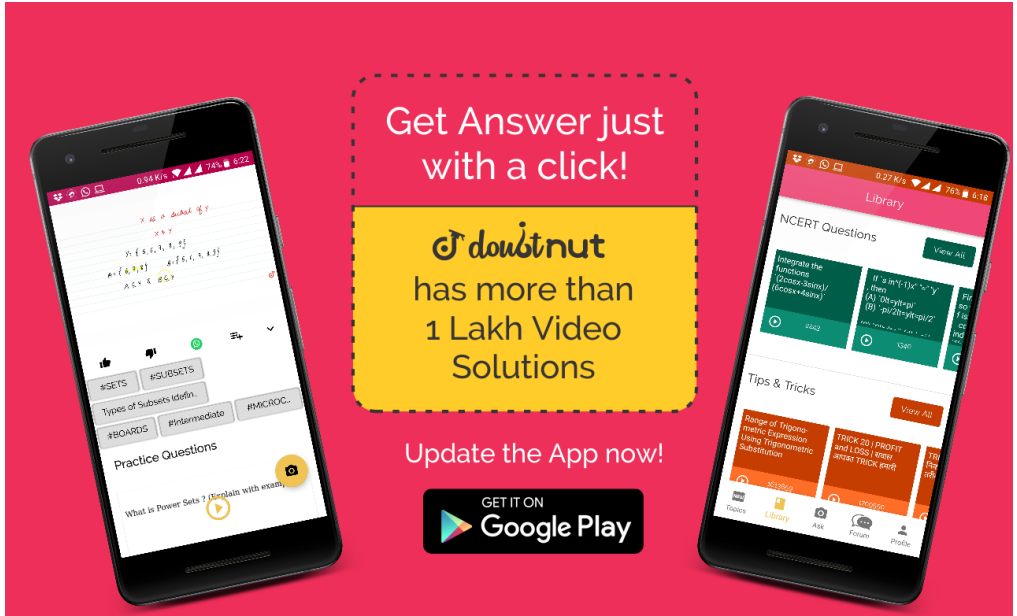


Ques No.	Question
1 - 5869421	<p>JEE MAINS 2019 PAPER 1 - MEMORY BASED</p> <p>There are 5 girls and 7 boys and 2 girls is to be formed such that no two specific boys are in the same team. Number of way to do so (a) 400 (b) 250 (c) 200 (d) 300</p> <p>📺 Watch Free Video Solution on Doubtnut</p>
2 - 5869422	<p>JEE MAINS 2019 PAPER 1 - MEMORY BASED</p> <p>The equation $x^2 + 2x + 2 = 0$ has root α and β. Then value of $\alpha^{15} + \beta^{15}$ is (a) 512 (b) 256 (c) -512 (d) -256</p> <p>📺 Watch Free Video Solution on Doubtnut</p>
3 - 5869423	<p>JEE MAINS 2019 PAPER 1 - MEMORY BASED</p> <p>$\int_0^{\pi} \cos x ^3 dx$ is equal to (a) $\frac{4}{3}$ (b) $\frac{2}{3}$ (c) 0 (d) $-\frac{8}{3}$</p> <p>📺 Watch Free Video Solution on Doubtnut</p>
	
4 - 5869424	<p>JEE MAINS 2019 PAPER 1 - MEMORY BASED</p> <p>If $x^2 \neq n\pi - 1, n \in N$. Then, the value of $\int x \sqrt{\frac{2 \sin(x^2 + 1) - \sin 2(x^2 + 1)}{2 \sin(x^2 + 1) + \sin 2(x^2 + 1)}} dx$ is equal to:</p> <p>📺 Watch Free Video Solution on Doubtnut</p>

<p>5 - 5869425</p>	<p>JEE MAINS 2019 PAPER 1 - MEMORY BASED</p> <p>if $\vec{A} = i - j$, $\vec{B} = i + j + k$ are two vectors and \vec{C} is another vector such that $\vec{A} \times \vec{C} + \vec{B} = \vec{0}$ and $\vec{A} \cdot \vec{C} = 0$ then $\vec{C} ^2 =$ (a) 9 (b) 8 (c) $\frac{19}{2}$ (d) $\frac{17}{2}$</p> <p>👁 Watch Free Video Solution on Doubtnut</p>
<p>6 - 5869426</p>	<p>JEE MAINS 2019 PAPER 1 - MEMORY BASED</p> <p>$f(x) = \{5; x \leq 1, a + bx; 1 < x < 3, b + 5x; 3 \leq x < 5, 30x \geq 5$ then</p> <p>👁 Watch Free Video Solution on Doubtnut</p>
<p>7 - 5869427</p>	<p>JEE MAINS 2019 PAPER 1 - MEMORY BASED</p> <p>Average height & variance of 5 students in a class is 150 and 18 respectively. A new student whose height is 156cm is added to the group. Find new variance. (a) 20 (b) 22 (c) 16 (d) 14</p> <p>👁 Watch Free Video Solution on Doubtnut</p>
	
<p>8 - 5869428</p>	<p>JEE MAINS 2019 PAPER 1 - MEMORY BASED</p> <p>a, b, c are in G.P. and $a + b + c = xb$, x can not be (a) 2 (b) -2 (c) 3 (d) 4</p> <p>👁 Watch Free Video Solution on Doubtnut</p>
<p>9 - 5869429</p>	<p>JEE MAINS 2019 PAPER 1 - MEMORY BASED</p> <p>$\left\{ \frac{2^{403}}{15} \right\} = \frac{k}{15}$ then find k. (a) 2 (b) 8 (c) 1 (d) 4</p> <p>👁 Watch Free Video Solution on Doubtnut</p>
<p>10 - 5869430</p>	<p>JEE MAINS 2019 PAPER 1 - MEMORY BASED</p>

$$\lim_{y \rightarrow \infty} \frac{\sqrt{1 + \sqrt{1 + y^4}} - \sqrt{2}}{y^4} = \text{(a) } \frac{1}{4\sqrt{2}} \text{ (b) } \frac{1}{2\sqrt{2}} \text{ (c) } \frac{1}{2\sqrt{2}(1 + \sqrt{2})} \text{ (d) does not exist}$$

[👁 Watch Free Video Solution on Doubtnut](#)

JEE MAINS 2019 PAPER 1 - MEMORY BASED

11 - 5869431

There is a parabola having axis as x -axis, vertex is at a distance of 2 unit from origin & focus is at $(4, 0)$. Which of the following point does not lie on the parabola. (a) $(6, 8)$ (b) $(5, 2\sqrt{6})$ (c) $(8, 4\sqrt{3})$ (d) $(4, -4)$

[👁 Watch Free Video Solution on Doubtnut](#)



JEE MAINS 2019 PAPER 1 - MEMORY BASED

12 - 5869432

Find sum of all possible value of θ in the interval $(-\frac{\pi}{2}, \pi)$ for which $\frac{3 + 2i \sin \theta}{1 - 2 \sin i\theta}$ is purely imaginary
 (a) $\frac{\pi}{3}$ (b) (π) (c) $\frac{2\pi}{3}$ (d) $\frac{\pi}{2}$

[👁 Watch Free Video Solution on Doubtnut](#)

JEE MAINS 2019 PAPER 1 - MEMORY BASED

13 - 5869433

Let $A = \begin{bmatrix} \cos \theta & -\sin \theta \\ \sin \theta & \cos \theta \end{bmatrix}$ Find the value of A^{-50} at $\theta = \frac{\pi}{2}$ (a) $\begin{bmatrix} -\frac{\sqrt{3}}{2} & -\frac{1}{2} \\ -\frac{1}{2} & \frac{\sqrt{3}}{2} \end{bmatrix}$ (b) $\begin{bmatrix} \frac{\sqrt{3}}{2} & \frac{1}{2} \\ -\frac{1}{2} & \frac{\sqrt{3}}{2} \end{bmatrix}$
 (c) $\begin{bmatrix} -\frac{\sqrt{3}}{2} & \frac{1}{2} \\ \frac{1}{2} & \frac{\sqrt{3}}{2} \end{bmatrix}$ (d) $\begin{bmatrix} \frac{1}{2} & \frac{\sqrt{3}}{2} \\ \frac{\sqrt{3}}{2} & -\frac{1}{2} \end{bmatrix}$

[👁 Watch Free Video Solution on Doubtnut](#)

14 - 5869434

JEE MAINS 2019 PAPER 1 - MEMORY BASED

If $(A + \oplus B) \wedge (-A \ominus B) = A \wedge B$ what should be proper symbol in place of \oplus and \ominus to hold the equation (a) \wedge and \vee (b) \wedge and \wedge (c) \vee and \vee (d) \vee and \wedge

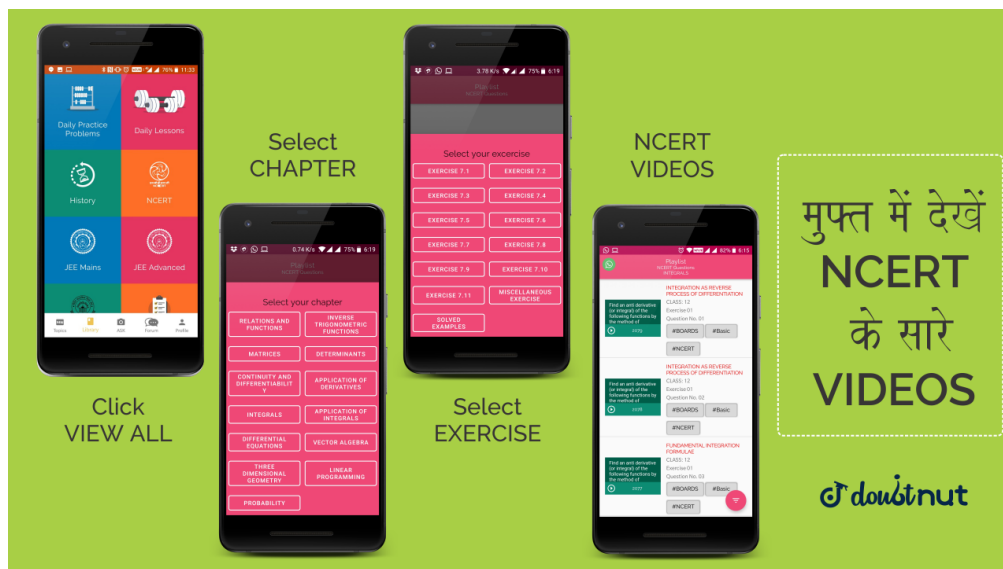
[▶ Watch Free Video Solution on Doubnut](#)

JEE MAINS 2019 PAPER 1 - MEMORY BASED

15 - 5869435

If $y(x)$ is solution of $x \frac{dy}{dx} + 2y = x^2$, $y(1) = 1$ then value of $y\left(\frac{1}{2}\right) =$ (a) $-\frac{49}{16}$ (b) $\frac{49}{16}$ (c) $\frac{45}{8}$
(d) $-\frac{45}{8}$

[▶ Watch Free Video Solution on Doubnut](#)



JEE MAINS 2019 PAPER 1 - MEMORY BASED

16 - 5869436

From a well shuffled deck of cards, 2 cards are drawn with replacement. If x represent numbers of time ace coming, then the value of $P(x = 1) + P(x = 2)$ is (a) $\frac{25}{169}$ (b) $(24)/(169)$ (c) $\frac{49}{169}$ (d) $(23)/(169)$

[▶ Watch Free Video Solution on Doubnut](#)

JEE MAINS 2019 PAPER 1 - MEMORY BASED

17 - 5869437

If eccentricity of the hyperbola $\frac{x^2}{\cos^2 \theta} - \frac{y^2}{\sin^2 \theta} = 1$ is more than 2 when $\theta \in \left(0, \frac{\pi}{2}\right)$. Find the possible values of length of latus rectum (a) $(3, \infty)$ (b) $1, 3/2$ (c) $(2, 3)$ (d) $(-3, -2)$

[▶ Watch Free Video Solution on Doubnut](#)

JEE MAINS 2019 PAPER 1 - MEMORY BASED

18 - 5869438

If slant height of a right circular cone is $3cm$ then the maximum volume of cone is (a) $2\sqrt{3}\pi cm^3$ (b) $4\sqrt{3}\pi cm^3$ (c) $(2 + \sqrt{3})\pi cm^3$ (d) $(2 - \sqrt{3})\pi cm^3$

[▶ Watch Free Video Solution on Doubnut](#)

JEE MAINS 2019 PAPER 1 - MEMORY BASED

19 - 5869439

if $\cos^{-1}\left(\frac{2}{3x}\right) + \cos^{-1}\left(\frac{3}{4x}\right) = \frac{\pi}{2}$, $x > \frac{3}{4}$ then $x =$ (a) $\frac{\sqrt{145}}{11}$ (b) $\frac{\sqrt{145}}{12}$ (c) $\frac{\sqrt{146}}{10}$ (d)

$$\frac{\sqrt{146}}{11}$$

[▶ Watch Free Video Solution on Doubtut](#)



JEE MAINS 2019 PAPER 1 - MEMORY BASED

20 - 5869440

If $px + qx + r = 0$ represent a family of straight lines such that $3p + 2q + 4r = 0$ then (a) All lines are parallel (b) All lines are inconsistent (c) All lines are concurrent at $\left(\frac{3}{4}, \frac{1}{2}\right)$ (d) All lines are concurrent at (3, 2)

[▶ Watch Free Video Solution on Doubtut](#)

JEE MAINS 2019 PAPER 1 - MEMORY BASED

21 - 5869441

Consider the system of equation $x + y + z = 1, 2x + 3y + 2z = 1, 2x + 3y + (a^2 - 1)z = a + 1$ then (a) system has a unique solution for $|a| = \sqrt{3}$ (b) system is inconsistent for $|a| = \sqrt{3}$ (c) system is inconsistent for $a = 4$ (d) system is inconsistent for $a = 3$

[▶ Watch Free Video Solution on Doubtut](#)

JEE MAINS 2019 PAPER 1 - MEMORY BASED

22 - 5869442

The value of $3(\cos \theta - \sin \theta)^4 + 6(\sin \theta + \cos \theta)^2 + 4 \sin^6 \theta$ is where $\theta \in \left(\frac{\pi}{4}, \frac{\pi}{2}\right)$ (a) $13 - 4 \cos^4 \theta$ (b) $13 - 4 \cos^6 \theta$ (c) $13 - 4 \cos^6 \theta + 2 \sin^4 \theta \cos^2 \theta$ (d) $13 - 4 \cos^4 \theta + 2 \sin^4 \theta \cos^2 \theta$

[▶ Watch Free Video Solution on Doubtut](#)

JEE MAINS 2019 PAPER 1 - MEMORY BASED

23 - 5869443

3 circles of radii a, b, c ($a < b < c$) touch each other externally and have x-axis as a common tangent then

[▶ Watch Free Video Solution on Doubtut](#)



JEE MAINS 2019 PAPER 1 - MEMORY BASED

24 - 5869444

If $f(x) = \frac{1}{x}$, $f_2(x) = 1 - x$, $f_3(x) = \frac{1}{1 - x}$ then find $J(x)$ such that $f_2 \circ J \circ f_1(x) = f_3(x)$ (a) $f_1(x)$ (b) $\frac{1}{x} f_3(x)$ (c) $f_3(x)$ (d) $f_2(x)$

[Watch Free Video Solution on DoubtNut](#)

JEE MAINS 2019 PAPER 1 - MEMORY BASED

25 - 5869445

Find the equation of line through $(-4, 1, 3)$ & parallel to the plane $x + y + z = 3$ while the line intersects another line whose equation is $x + y - z = x + 2y - 3z + 5$ (a) $\frac{x + 4}{-3} = \frac{y - 1}{-2} = \frac{z - 3}{1}$ (b) $\frac{x + 4}{1} = \frac{y - 1}{2} = \frac{z - 3}{-3}$ (c) $\frac{x + 4}{-3} = \frac{y - 1}{2} = \frac{z - 3}{1}$ (d)

[Watch Free Video Solution on DoubtNut](#)

JEE MAINS 2019 PAPER 1 - MEMORY BASED

26 - 5869446

Consider the curves $y = x^2 + 2$ and $y = 10 - x^2$. Let θ be the angle between both the curves at point of intersection, then find $|\tan \theta|$ (a) $\frac{8}{15}$ (b) $\frac{5}{17}$ (c) $\frac{3}{17}$ (d) $\frac{8}{17}$


[Watch Free Video Solution on DoubtNut](#)

JEE MAINS 2019 PAPER 1 - MEMORY BASED

27 - 5869447

A plane parallel to y -axis passing through line of intersection of planes $x + y + z = 1$ & $2x + 3y - z - 4 = 0$ which of the point lie on the plane (a) $(3, 2, 1)$ (b) $(-3, 0, 1)$ (c) $(-3, 1, 1)$ (d) $(3, -1, 1)$

[Watch Free Video Solution on DoubtNut](#)



JEE MAINS 2019 PAPER 1 - MEMORY BASED

28 - 5869448

Find common tangent of the two curve $y^2 = 4x$ and $x^2 + y^2 - 6x = 0$ (a) $y = \frac{x}{3} + 3$ (b) $y = \left(\frac{x}{\sqrt{3}} - \sqrt{3}\right)$ (c) $y = \frac{x}{3} - 3$ (d) $y = \left(\frac{x}{\sqrt{3}} + \sqrt{3}\right)$

[📺 Watch Free Video Solution on Doubtnut](#)

JEE MAINS 2019 PAPER 1 - MEMORY BASED

29 - 5869449

If the area bounded by the curve $y = x^2 - 1$ tangent to it at $(2, 3)$ and y -axis is (a) $\frac{2}{3}$ (b) $\frac{4}{3}$ (c) $\frac{8}{3}$ (d) 1

[📺 Watch Free Video Solution on Doubtnut](#)



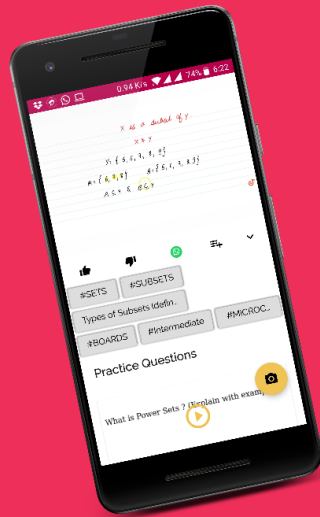
[📲 Download Doubtnut to Ask Any Math Question By just a click](#)

[📲 Get A Video Solution For Free in Seconds](#)

[📲 Doubtnut Has More Than 1 Lakh Video Solutions](#)

[📲 Free Video Solutions of NCERT, RD Sharma, RS Aggarwal, Cengage \(G.Tewani\), Resonance DPP, Allen, Bansal, FIITJEE, Akash, Narayana, VidyaMandir](#)

[📲 Download Doubtnut Today](#)



Get Answer just with a click!

doubtNut
has more than
1 Lakh Video
Solutions

Update the App now!

