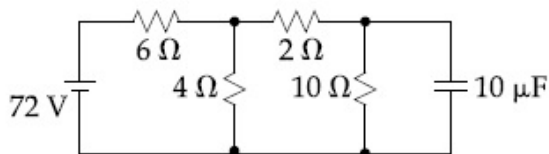


## JEE April 2019

Roll No.	PB05700617
Candidate Name	GARIMAN GUPTA
Application No	190310082890
Test Date	09/04/2019
Test Time	9:30 AM - 12:30 PM
Subject	Paper I EH

Section : Physics

**Q.1** Determine the charge on the capacitor in the following circuit :



- Options**
1.  $60 \mu\text{C}$
  2.  $2 \mu\text{C}$
  3.  $10 \mu\text{C}$
  4.  $200 \mu\text{C}$

Question Type : MCQ

Question ID : 41652913793

Option 1 ID : 41652953952

Option 2 ID : 41652953950

Option 3 ID : 41652953953

Option 4 ID : 41652953951

Status : Answered

Chosen Option : 1

**Q.2** The following bodies are made to roll up (without slipping) the same inclined plane from a horizontal plane : (i) a ring of radius  $R$ , (ii) a solid cylinder of radius  $\frac{R}{2}$  and (iii) a solid sphere of radius  $\frac{R}{4}$ . If, in each case, the speed of the center of mass at the bottom of the incline is same, the ratio of the maximum heights they climb is :

- Options**
1. 4 : 3 : 2
  2. 10 : 15 : 7
  3. 14 : 15 : 20
  4. 2 : 3 : 4

Question Type : MCQ

Question ID : 41652913781

Option 1 ID : 41652953902

Option 2 ID : 41652953904

Option 3 ID : 41652953903

Option 4 ID : 41652953905

Status : Answered

Chosen Option : 4

**Q.3** A simple pendulum oscillating in air has period  $T$ . The bob of the pendulum is completely immersed in a non-viscous liquid. The density of the liquid is  $\frac{1}{16}$ th of the material of the bob. If the bob is inside liquid all the time, its period of oscillation in this liquid is :

Options

1.  $2T\sqrt{\frac{1}{10}}$

2.  $2T\sqrt{\frac{1}{14}}$

3.  $4T\sqrt{\frac{1}{15}}$

4.  $4T\sqrt{\frac{1}{14}}$

Question Type : MCQ

Question ID : 41652913785

Option 1 ID : 41652953918

Option 2 ID : 41652953921

Option 3 ID : 41652953919

Option 4 ID : 41652953920

Status : Answered

Chosen Option : 4

**Q.4** An HCl molecule has rotational, translational and vibrational motions. If the rms velocity of HCl molecules in its gaseous phase is  $\bar{v}$ ,  $m$  is its mass and  $k_B$  is Boltzmann constant, then its temperature will be :

Options

1.  $\frac{m\bar{v}^{-2}}{6k_B}$

2.  $\frac{m\bar{v}^{-2}}{3k_B}$

3.  $\frac{m\bar{v}^{-2}}{7k_B}$

4.  $\frac{m\bar{v}^{-2}}{5k_B}$

Question Type : MCQ

Question ID : 41652913787

Option 1 ID : 41652953929

Option 2 ID : 41652953928

Option 3 ID : 41652953926

Option 4 ID : 41652953927

Status : Answered

Chosen Option : 2

**Q.5** A uniform cable of mass 'M' and length 'L' is placed on a horizontal surface such that its  $\left(\frac{1}{n}\right)^{\text{th}}$  part is hanging below the edge of the surface. To lift the hanging part of the cable upto the surface, the work done should be :

Options

1.  $\frac{MgL}{2n^2}$
2.  $\frac{MgL}{n^2}$
3.  $\frac{2MgL}{n^2}$
4.  $nMgL$

Question Type : MCQ

Question ID : 41652913780

Option 1 ID : 41652953900

Option 2 ID : 41652953898

Option 3 ID : 41652953899

Option 4 ID : 41652953901

Status : Answered

Chosen Option : 3

**Q.6** Taking the wavelength of first Balmer line in hydrogen spectrum ( $n=3$  to  $n=2$ ) as 660 nm, the wavelength of the 2<sup>nd</sup> Balmer line ( $n=4$  to  $n=2$ ) will be :

- Options
1. 889.2 nm
  2. 488.9 nm
  3. 642.7 nm
  4. 388.9 nm

Question Type : MCQ

Question ID : 41652913800

Option 1 ID : 41652953979

Option 2 ID : 41652953978

Option 3 ID : 41652953981

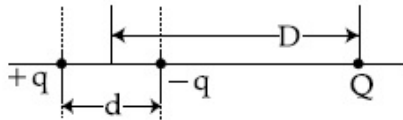
Option 4 ID : 41652953980

Status : Answered

Chosen Option : 2

**Q.7**

A system of three charges are placed as shown in the figure :



If  $D \gg d$ , the potential energy of the system is best given by :

Options

1.  $\frac{1}{4\pi\epsilon_0} \left[ -\frac{q^2}{d} - \frac{qQd}{2D^2} \right]$

2.  $\frac{1}{4\pi\epsilon_0} \left[ -\frac{q^2}{d} + \frac{2qQd}{D^2} \right]$

3.  $\frac{1}{4\pi\epsilon_0} \left[ +\frac{q^2}{d} + \frac{qQd}{D^2} \right]$

4.  $\frac{1}{4\pi\epsilon_0} \left[ -\frac{q^2}{d} - \frac{qQd}{D^2} \right]$

Question Type : MCQ

Question ID : 41652913791

Option 1 ID : 41652953943

Option 2 ID : 41652953944

Option 3 ID : 41652953942

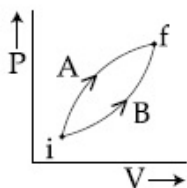
Option 4 ID : 41652953945

Status : Answered

Chosen Option : 4

Q.8

Following figure shows two processes A and B for a gas. If  $\Delta Q_A$  and  $\Delta Q_B$  are the amount of heat absorbed by the system in two cases, and  $\Delta U_A$  and  $\Delta U_B$  are changes in internal energies, respectively, then :



Options

1.  $\Delta Q_A < \Delta Q_B, \Delta U_A < \Delta U_B$

2.  $\Delta Q_A > \Delta Q_B, \Delta U_A > \Delta U_B$

3.  $\Delta Q_A > \Delta Q_B, \Delta U_A = \Delta U_B$

4.  $\Delta Q_A = \Delta Q_B; \Delta U_A = \Delta U_B$

Question Type : MCQ

Question ID : 41652913786

Option 1 ID : 41652953925

Option 2 ID : 41652953923

Option 3 ID : 41652953924

Option 4 ID : 41652953922

Status : **Answered**  
Chosen Option : **3**

**Q.9** The electric field of light wave is given as

$$\vec{E} = 10^{-3} \cos\left(\frac{2\pi x}{5 \times 10^{-7}} - 2\pi \times 6 \times 10^{14} t\right) \hat{x} \frac{\text{N}}{\text{C}}$$

This light falls on a metal plate of work function 2eV. The stopping potential of the photo-electrons is :

$$\text{Given, } E \text{ (in eV)} = \frac{12375}{\lambda(\text{in } \text{\AA})}$$

- Options**
1. 2.0 V
  2. 0.72 V
  3. 0.48 V
  4. 2.48 V

Question Type : **MCQ**  
Question ID : **41652913801**  
Option 1 ID : **41652953985**  
Option 2 ID : **41652953982**  
Option 3 ID : **41652953983**  
Option 4 ID : **41652953984**  
Status : **Answered**  
Chosen Option : **4**

**Q.10** A body of mass 2 kg makes an elastic collision with a second body at rest and continues to move in the original direction but with one fourth of its original speed. What is the mass of the second body ?

- Options**
1. 1.0 kg
  2. 1.5 kg
  3. 1.8 kg
  4. 1.2 kg

Question Type : **MCQ**  
Question ID : **41652913779**  
Option 1 ID : **41652953896**  
Option 2 ID : **41652953894**  
Option 3 ID : **41652953897**  
Option 4 ID : **41652953895**  
Status : **Answered**  
Chosen Option : **4**

**Q.11** In the density measurement of a cube, the mass and edge length are measured as  $(10.00 \pm 0.10)$  kg and  $(0.10 \pm 0.01)$  m, respectively. The error in the measurement of density is :

- Options
1.  $0.01 \text{ kg/m}^3$
  2.  $0.10 \text{ kg/m}^3$
  3.  $0.31 \text{ kg/m}^3$
  4.  $0.07 \text{ kg/m}^3$

Question Type : **MCQ**

Question ID : **41652913776**

Option 1 ID : **41652953885**

Option 2 ID : **41652953882**

Option 3 ID : **41652953884**

Option 4 ID : **41652953883**

Status : **Answered**

Chosen Option : **3**

**Q.12** A string is clamped at both the ends and it is vibrating in its 4<sup>th</sup> harmonic. The equation of the stationary wave is  $Y = 0.3 \sin(0.157x) \cos(200\pi t)$ . The length of the string is : (All quantities are in SI units.)

- Options
1. 20 m
  2. 80 m
  3. 40 m
  4. 60 m

Question Type : **MCQ**

Question ID : **41652913788**

Option 1 ID : **41652953933**

Option 2 ID : **41652953930**

Option 3 ID : **41652953932**

Option 4 ID : **41652953931**

Status : **Answered**

Chosen Option : **4**

**Q.13** A capacitor with capacitance  $5 \mu\text{F}$  is charged to  $5 \mu\text{C}$ . If the plates are pulled apart to reduce the capacitance to  $2 \mu\text{F}$ , how much work is done ?

- Options
1.  $6.25 \times 10^{-6} \text{ J}$
  2.  $3.75 \times 10^{-6} \text{ J}$
  3.  $2.16 \times 10^{-6} \text{ J}$
  4.  $2.55 \times 10^{-6} \text{ J}$

Question Type : **MCQ**

Question ID : **41652913790**

Option 1 ID : **41652953938**

Option 2 ID : **41652953941**

Option 3 ID : **41652953939**

Option 4 ID : **41652953940**

Status : **Answered**

Chosen Option : 3

**Q.14** The total number of turns and cross-section area in a solenoid is fixed. However, its length  $L$  is varied by adjusting the separation between windings. The inductance of solenoid will be proportional to :

- Options
1.  $L$
  2.  $L^2$
  3.  $1/L^2$
  4.  $1/L$

Question Type : **MCQ**  
 Question ID : **41652913796**  
 Option 1 ID : **41652953962**  
 Option 2 ID : **41652953963**  
 Option 3 ID : **41652953964**  
 Option 4 ID : **41652953965**  
 Status : **Answered**  
 Chosen Option : 1

**Q.15** If ' $M$ ' is the mass of water that rises in a capillary tube of radius ' $r$ ', then mass of water which will rise in a capillary tube of radius ' $2r$ ' is :

- Options
1.  $M$
  2.  $\frac{M}{2}$
  3.  $4M$
  4.  $2M$

Question Type : **MCQ**  
 Question ID : **41652913804**  
 Option 1 ID : **41652953996**  
 Option 2 ID : **41652953997**  
 Option 3 ID : **41652953994**  
 Option 4 ID : **41652953995**  
 Status : **Answered**  
 Chosen Option : 3

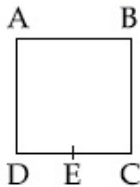
**Q.16** A stationary horizontal disc is free to rotate about its axis. When a torque is applied on it, its kinetic energy as a function of  $\theta$ , where  $\theta$  is the angle by which it has rotated, is given as  $k\theta^2$ . If its moment of inertia is  $I$  then the angular acceleration of the disc is :

- Options
1.  $\frac{k}{4I}\theta$

2.  $\frac{k}{I}\theta$
3.  $\frac{k}{2I}\theta$
4.  $\frac{2k}{I}\theta$

Question Type : **MCQ**Question ID : **41652913782**Option 1 ID : **41652953909**Option 2 ID : **41652953906**Option 3 ID : **41652953908**Option 4 ID : **41652953907**Status : **Answered**Chosen Option : **4**

- Q.17** A wire of resistance R is bent to form a square ABCD as shown in the figure. The effective resistance between E and C is :  
(E is mid-point of arm CD)



- Options
1. R
  2.  $\frac{7}{64} R$
  3.  $\frac{3}{4} R$
  4.  $\frac{1}{16} R$

Question Type : **MCQ**Question ID : **41652913792**Option 1 ID : **41652953949**Option 2 ID : **41652953948**Option 3 ID : **41652953946**Option 4 ID : **41652953947**Status : **Answered**Chosen Option : **1**

- Q.18** The pressure wave,  
 $P = 0.01 \sin[1000t - 3x] \text{ Nm}^{-2}$ , corresponds to the sound produced by a vibrating blade on a day when atmospheric temperature is  $0^\circ\text{C}$ . On some other day when temperature is T, the speed of sound produced by the same blade and at the same frequency is found to be  $336 \text{ ms}^{-1}$ . Approximate value of T is :



- Options
1.  $4^{\circ}\text{C}$
  2.  $11^{\circ}\text{C}$
  3.  $12^{\circ}\text{C}$
  4.  $15^{\circ}\text{C}$

Question Type : **MCQ**

Question ID : **41652913789**

Option 1 ID : **41652953937**

Option 2 ID : **41652953935**

Option 3 ID : **41652953934**

Option 4 ID : **41652953936**

Status : **Answered**

Chosen Option : **3**

**Q.19** A solid sphere of mass 'M' and radius 'a' is surrounded by a uniform concentric spherical shell of thickness 2a and mass 2M. The gravitational field at distance '3a' from the centre will be :

- Options
1.  $\frac{2GM}{9a^2}$
  2.  $\frac{GM}{9a^2}$
  3.  $\frac{GM}{3a^2}$
  4.  $\frac{2GM}{3a^2}$

Question Type : **MCQ**

Question ID : **41652913783**

Option 1 ID : **41652953911**

Option 2 ID : **41652953910**

Option 3 ID : **41652953912**

Option 4 ID : **41652953913**

Status : **Answered**

Chosen Option : **3**

**Q.20** For a given gas at 1 atm pressure, rms speed of the molecules is 200 m/s at  $127^{\circ}\text{C}$ . At 2 atm pressure and at  $227^{\circ}\text{C}$ , the rms speed of the molecules will be :

- Options
1. 100 m/s
  2.  $80\sqrt{5}$  m/s
  3.  $100\sqrt{5}$  m/s
  4. 80 m/s

Question Type : **MCQ**

Question ID : **41652913784**

Option 1 ID : **41652953916**

Option 2 ID : **41652953915**

Option 3 ID : 41652953914  
Option 4 ID : 41652953917  
Status : Answered  
Chosen Option : 3

Q.21 The magnetic field of a plane electromagnetic wave is given by :

$$\vec{B} = B_0 \hat{i} [\cos(kz - \omega t)] + B_1 \hat{j} \cos(kz + \omega t)$$

where  $B_0 = 3 \times 10^{-5} \text{ T}$  and  $B_1 = 2 \times 10^{-6} \text{ T}$ .

The rms value of the force experienced by a stationary charge  $Q = 10^{-4} \text{ C}$  at  $z = 0$  is closest to :

- Options
1. 0.6 N
  2. 0.1 N
  3. 0.9 N
  4.  $3 \times 10^{-2} \text{ N}$

Question Type : MCQ  
Question ID : 41652913797  
Option 1 ID : 41652953966  
Option 2 ID : 41652953969  
Option 3 ID : 41652953968  
Option 4 ID : 41652953967  
Status : Not Answered  
Chosen Option : --

Q.22 A moving coil galvanometer has resistance  $50 \Omega$  and it indicates full deflection at 4 mA current. A voltmeter is made using this galvanometer and a  $5 \text{ k}\Omega$  resistance. The maximum voltage, that can be measured using this voltmeter, will be close to :

- Options
1. 40 V
  2. 15 V
  3. 20 V
  4. 10 V

Question Type : MCQ  
Question ID : 41652913805  
Option 1 ID : 41652954001  
Option 2 ID : 41652953999  
Option 3 ID : 41652954000  
Option 4 ID : 41652953998  
Status : Answered  
Chosen Option : 3

Q.23

The stream of a river is flowing with a speed of 2 km/h. A swimmer can swim at a speed of 4 km/h. What should be the direction of the swimmer with respect to the flow of the river to cross the river straight ?

- Options
1.  $90^\circ$
  2.  $150^\circ$
  3.  $120^\circ$
  4.  $60^\circ$

Question Type : **MCQ**

Question ID : **41652913777**

Option 1 ID : **41652953888**

Option 2 ID : **41652953886**

Option 3 ID : **41652953889**

Option 4 ID : **41652953887**

Status : **Answered**

Chosen Option : **3**

**Q.24** An NPN transistor is used in common emitter configuration as an amplifier with  $1\text{ k}\Omega$  load resistance. Signal voltage of 10 mV is applied across the base-emitter. This produces a 3 mA change in the collector current and  $15\text{ }\mu\text{A}$  change in the base current of the amplifier. The input resistance and voltage gain are :

- Options
1.  $0.33\text{ k}\Omega$ , 1.5
  2.  $0.67\text{ k}\Omega$ , 300
  3.  $0.67\text{ k}\Omega$ , 200
  4.  $0.33\text{ k}\Omega$ , 300

Question Type : **MCQ**

Question ID : **41652913802**

Option 1 ID : **41652953987**

Option 2 ID : **41652953988**

Option 3 ID : **41652953989**

Option 4 ID : **41652953986**

Status : **Answered**

Chosen Option : **1**

**Q.25** A rectangular coil (Dimension  $5\text{ cm}\times 2.5\text{ cm}$ ) with 100 turns, carrying a current of 3 A in the clock-wise direction, is kept centered at the origin and in the X-Z plane. A magnetic field of 1 T is applied along X-axis. If the coil is tilted through  $45^\circ$  about Z-axis, then the torque on the coil is :

- Options
1. 0.38 Nm
  2. 0.55 Nm
  3. 0.42 Nm
  4. 0.27 Nm

Question Type : **MCQ**

Question ID : **41652913794**

Option 1 ID : **41652953956**

Option 2 ID : **41652953955**

Option 3 ID : **41652953957**

Option 4 ID : **41652953954**

Status : **Answered**

Chosen Option : **1**

**Q.26** A signal  $A\cos\omega t$  is transmitted using  $v_0 \sin\omega_0 t$  as carrier wave. The correct amplitude modulated (AM) signal is :

- Options
1.  $v_0 \sin\omega_0 t + \frac{A}{2} \sin(\omega_0 - \omega)t + \frac{A}{2} \sin(\omega_0 + \omega)t$
  2.  $v_0 \sin[\omega_0(1 + 0.01A\sin\omega t)t]$
  3.  $v_0 \sin\omega_0 t + A\cos\omega t$
  4.  $(v_0 + A)\cos\omega t \sin\omega_0 t$

Question Type : **MCQ**

Question ID : **41652913803**

Option 1 ID : **41652953992**

Option 2 ID : **41652953993**

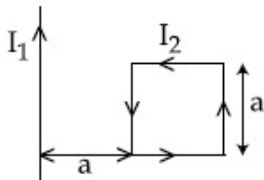
Option 3 ID : **41652953990**

Option 4 ID : **41652953991**

Status : **Answered**

Chosen Option : **2**

**Q.27** A rigid square loop of side 'a' and carrying current  $I_2$  is lying on a horizontal surface near a long current  $I_1$  carrying wire in the same plane as shown in figure. The net force on the loop due to the wire will be :



- Options
1. Repulsive and equal to  $\frac{\mu_0 I_1 I_2}{2\pi}$
  2. Attractive and equal to  $\frac{\mu_0 I_1 I_2}{3\pi}$
  3. Repulsive and equal to  $\frac{\mu_0 I_1 I_2}{4\pi}$
  4. Zero

Question Type : **MCQ**Question ID : **41652913795**Option 1 ID : **41652953961**Option 2 ID : **41652953959**Option 3 ID : **41652953960**Option 4 ID : **41652953958**Status : **Answered**Chosen Option : **1**

**Q.28** A concave mirror for face viewing has focal length of 0.4 m. The distance at which you hold the mirror from your face in order to see your image upright with a magnification of 5 is :

- Options
1. 0.24 m
  2. 1.60 m
  3. 0.32 m
  4. 0.16 m

Question Type : **MCQ**Question ID : **41652913798**Option 1 ID : **41652953973**Option 2 ID : **41652953971**Option 3 ID : **41652953972**Option 4 ID : **41652953970**Status : **Answered**Chosen Option : **3**

**Q.29** A ball is thrown vertically up (taken as +z-axis) from the ground. The correct momentum-height (p-h) diagram is :

Options

- 1.
- 2.
- 3.
- 4.

Question Type : **MCQ**Question ID : **41652913778**Option 1 ID : **41652953890**Option 2 ID : **41652953891**

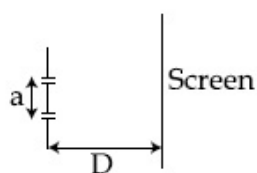
Option 3 ID : 41652953893

Option 4 ID : 41652953892

Status : Answered

Chosen Option : 4

**Q.30** The figure shows a Young's double slit experimental setup. It is observed that when a thin transparent sheet of thickness  $t$  and refractive index  $\mu$  is put in front of one of the slits, the central maximum gets shifted by a distance equal to  $n$  fringe widths. If the wavelength of light used is  $\lambda$ ,  $t$  will be :



Options

1.  $\frac{2nD\lambda}{a(\mu - 1)}$
2.  $\frac{nD\lambda}{a(\mu - 1)}$
3.  $\frac{D\lambda}{a(\mu - 1)}$
4.  $\frac{2D\lambda}{a(\mu - 1)}$

Question Type : MCQ

Question ID : 41652913799

Option 1 ID : 41652953977

Option 2 ID : 41652953975

Option 3 ID : 41652953974

Option 4 ID : 41652953976

Status : Answered

Chosen Option : 2

Section : Chemistry

**Q.1** The element having greatest difference between its first and second ionization energies, is :

Options

1. Ca
2. Sc
3. Ba
4. K

Question Type : MCQ

Question ID : 41652913816

Option 1 ID : 41652954043

Option 2 ID : 41652954045

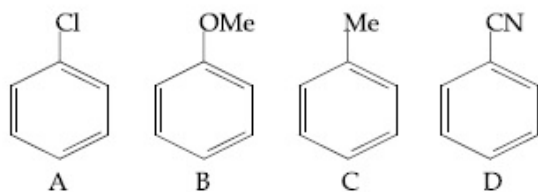
Option 3 ID : 41652954044

Option 4 ID : 41652954042

Status : Answered

Chosen Option : 4

Q.2 The increasing order of reactivity of the following compounds towards aromatic electrophilic substitution reaction is :



- Options
1.  $D < A < C < B$
  2.  $B < C < A < D$
  3.  $A < B < C < D$
  4.  $D < B < A < C$

Question Type : MCQ

Question ID : 41652913807

Option 1 ID : 41652954007

Option 2 ID : 41652954009

Option 3 ID : 41652954006

Option 4 ID : 41652954008

Status : Answered

Chosen Option : 1

Q.3 Consider the van der Waals constants,  $a$  and  $b$ , for the following gases.

Gas	Ar	Ne	Kr	Xe
$a / (\text{atm dm}^6 \text{ mol}^{-2})$	1.3	0.2	5.1	4.1
$b / (10^{-2} \text{ dm}^3 \text{ mol}^{-1})$	3.2	1.7	1.0	5.0

Which gas is expected to have the highest critical temperature ?

- Options
1. Kr
  2. Ne
  3. Xe
  4. Ar

Question Type : MCQ

Question ID : 41652913827

Option 1 ID : 41652954088

Option 2 ID : 41652954087

Option 3 ID : 41652954089

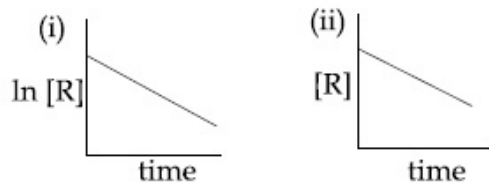
Option 4 ID : 41652954086

Status : Answered

Chosen Option : 3

Q.4

The given plots represent the variation of the concentration of a reactant R with time for two different reactions (i) and (ii). The respective orders of the reactions are :



- Options
1. 1, 0
  2. 1, 1
  3. 0, 1
  4. 0, 2

Question Type : **MCQ**

Question ID : **41652913834**

Option 1 ID : **41652954115**

Option 2 ID : **41652954116**

Option 3 ID : **41652954114**

Option 4 ID : **41652954117**

Status : **Answered**

Chosen Option : **1**

**Q.5** Among the following, the set of parameters that represents path functions, is :

- (A)  $q + w$
- (B)  $q$
- (C)  $w$
- (D)  $H - TS$

- Options
1. (B) and (C)
  2. (B), (C) and (D)
  3. (A) and (D)
  4. (A), (B) and (C)

Question Type : **MCQ**

Question ID : **41652913830**

Option 1 ID : **41652954099**

Option 2 ID : **41652954100**

Option 3 ID : **41652954098**

Option 4 ID : **41652954101**

Status : **Answered**

Chosen Option : **1**

**Q.6** The ore that contains the metal in the form of fluoride is :

- Options
1. cryolite
  2. malachite
  3. magnetite



## 4. sphalerite

Question Type : MCQ

Question ID : 41652913817

Option 1 ID : 41652954047

Option 2 ID : 41652954049

Option 3 ID : 41652954048

Option 4 ID : 41652954046

Status : Answered

Chosen Option : 1

Q.7 Excessive release of CO<sub>2</sub> into the atmosphere results in :

- Options
1. global warming
  2. polar vortex
  3. formation of smog
  4. depletion of ozone

Question Type : MCQ

Question ID : 41652913825

Option 1 ID : 41652954080

Option 2 ID : 41652954081

Option 3 ID : 41652954079

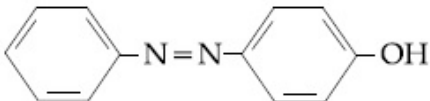
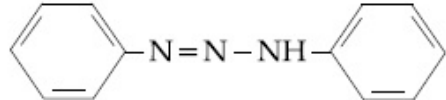
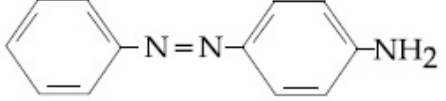
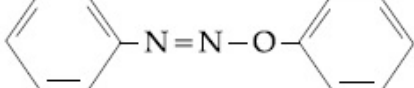
Option 4 ID : 41652954078

Status : Answered

Chosen Option : 1

Q.8 Aniline dissolved in dilute HCl is reacted with sodium nitrite at 0°C . This solution was added dropwise to a solution containing equimolar mixture of aniline and phenol in dil. HCl. The structure of the major product is :

Options

1. 
2. 
3. 
4. 

Question Type : MCQ

Question ID : 41652913815

Option 1 ID : 41652954041

Option 2 ID : 41652954038

Option 3 ID : 41652954040

Option 4 ID : 41652954039

Status : Answered

Chosen Option : 1

**Q.9** Among the following, the molecule expected to be stabilized by anion formation is :

$C_2, O_2, NO, F_2$

- Options
1.  $C_2$
  2.  $F_2$
  3.  $NO$
  4.  $O_2$

Question Type : **MCQ**Question ID : **41652913829**Option 1 ID : **41652954095**Option 2 ID : **41652954097**Option 3 ID : **41652954096**Option 4 ID : **41652954094**Status : **Answered**

Chosen Option : 1

**Q.10** The correct order of the oxidation states of nitrogen in  $NO, N_2O, NO_2$  and  $N_2O_3$  is :

- Options
1.  $NO_2 < NO < N_2O_3 < N_2O$
  2.  $NO_2 < N_2O_3 < NO < N_2O$
  3.  $N_2O < N_2O_3 < NO < NO_2$
  4.  $N_2O < NO < N_2O_3 < NO_2$

Question Type : **MCQ**Question ID : **41652913820**Option 1 ID : **41652954058**Option 2 ID : **41652954059**Option 3 ID : **41652954061**Option 4 ID : **41652954060**Status : **Answered**

Chosen Option : 4

**Q.11** Liquid 'M' and liquid 'N' form an ideal solution. The vapour pressures of pure liquids 'M' and 'N' are 450 and 700 mmHg, respectively, at the same temperature. Then correct statement is :

$x_M$  = Mole fraction of 'M' in solution;

$x_N$  = Mole fraction of 'N' in solution;

$y_M$  = Mole fraction of 'M' in vapour phase;

$y_N$  = Mole fraction of 'N' in vapour phase)

- Options
1.  $\frac{x_M}{x_N} = \frac{y_M}{y_N}$

2.  $(x_M - y_M) < (x_N - y_N)$

3.  $\frac{x_M}{x_N} < \frac{y_M}{y_N}$

4.  $\frac{x_M}{x_N} > \frac{y_M}{y_N}$

Question Type : MCQ

Question ID : 41652913831

Option 1 ID : 41652954102

Option 2 ID : 41652954105

Option 3 ID : 41652954104

Option 4 ID : 41652954103

Status : Answered

Chosen Option : 4

**Q.12** The osmotic pressure of a dilute solution of an ionic compound XY in water is four times that of a solution of 0.01 M BaCl<sub>2</sub> in water. Assuming complete dissociation of the given ionic compounds in water, the concentration of XY (in mol L<sup>-1</sup>) in solution is :

- Options
1.  $4 \times 10^{-2}$
  2.  $6 \times 10^{-2}$
  3.  $4 \times 10^{-4}$
  4.  $16 \times 10^{-4}$

Question Type : MCQ

Question ID : 41652913832

Option 1 ID : 41652954106

Option 2 ID : 41652954108

Option 3 ID : 41652954109

Option 4 ID : 41652954107

Status : Answered

Chosen Option : 2

**Q.13** The number of water molecule(s) not coordinated to copper ion directly in CuSO<sub>4</sub> · 5H<sub>2</sub>O, is :

- Options
1. 2
  2. 3
  3. 1
  4. 4

Question Type : MCQ

Question ID : 41652913818

Option 1 ID : 41652954051

Option 2 ID : 41652954052

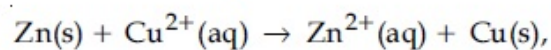
Option 3 ID : 41652954050

Option 4 ID : 41652954053

Status : Answered

Chosen Option : 2

Q.14 The standard Gibbs energy for the given cell reaction in  $\text{kJ mol}^{-1}$  at 298 K is :



$E^\circ = 2 \text{ V}$  at 298 K

(Faraday's constant,  $F = 96000 \text{ C mol}^{-1}$ )

Options 1. -384

2. 384

3. 192

4. -192

Question Type : MCQ

Question ID : 41652913833

Option 1 ID : 41652954112

Option 2 ID : 41652954111

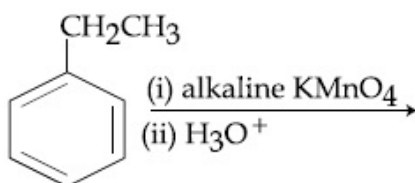
Option 3 ID : 41652954110

Option 4 ID : 41652954113

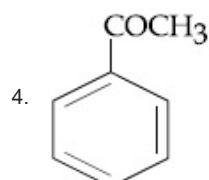
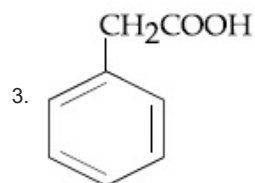
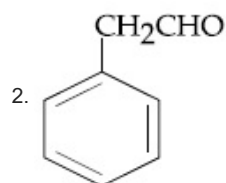
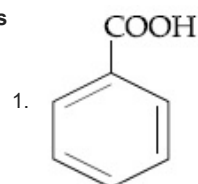
Status : Answered

Chosen Option : 1

Q.15 The major product of the following reaction is :



Options



Question Type : **MCQ**Question ID : **41652913812**Option 1 ID : **41652954027**Option 2 ID : **41652954028**Option 3 ID : **41652954029**Option 4 ID : **41652954026**Status : **Answered**Chosen Option : **1**

**Q.16** For any given series of spectral lines of atomic hydrogen, let  $\Delta\bar{\nu} = \bar{\nu}_{\max} - \bar{\nu}_{\min}$  be the difference in maximum and minimum frequencies in  $\text{cm}^{-1}$ . The ratio  $\Delta\bar{\nu}_{\text{Lyman}} / \Delta\bar{\nu}_{\text{Balmer}}$  is :

Options 1. 4 : 1

2. 9 : 4

3. 5 : 4

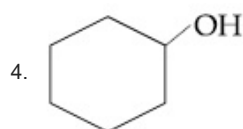
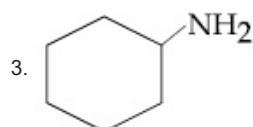
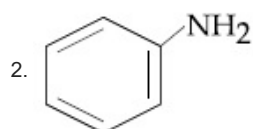
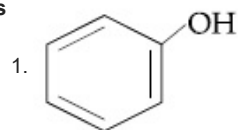
4. 27 : 5

Question Type : **MCQ**Question ID : **41652913828**Option 1 ID : **41652954091**Option 2 ID : **41652954092**Option 3 ID : **41652954093**Option 4 ID : **41652954090**Status : **Answered**Chosen Option : **2**

**Q.17** The organic compound that gives following qualitative analysis is :

Test	Inference
(a) Dil. HCl	Insoluble
(b) NaOH solution	soluble
(c) $\text{Br}_2/\text{water}$	Decolourization

Options

Question Type : **MCQ**

Question ID : 41652913813

Option 1 ID : 41652954032

Option 2 ID : 41652954031

Option 3 ID : 41652954033

Option 4 ID : 41652954030

Status : Answered

Chosen Option : 1

Q.18  $C_{60}$ , an allotrope of carbon contains :

- Options
- 12 hexagons and 20 pentagons.
  - 18 hexagons and 14 pentagons.
  - 16 hexagons and 16 pentagons.
  - 20 hexagons and 12 pentagons.

Question Type : MCQ

Question ID : 41652913821

Option 1 ID : 41652954063

Option 2 ID : 41652954065

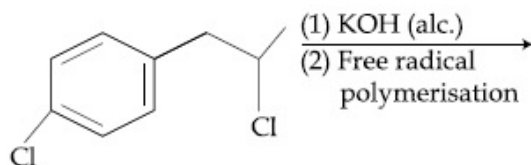
Option 3 ID : 41652954064

Option 4 ID : 41652954062

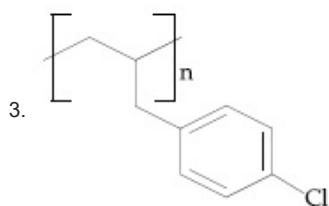
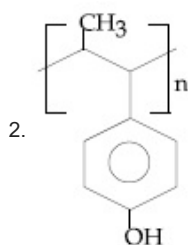
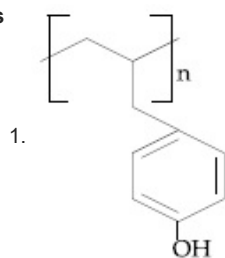
Status : Answered

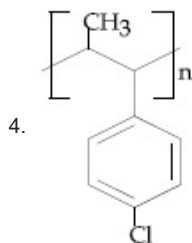
Chosen Option : 4

Q.19 The major product of the following reaction is :



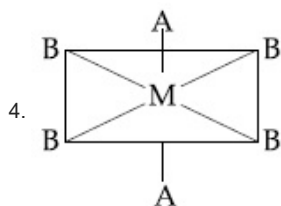
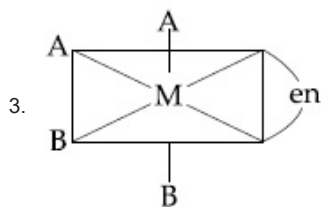
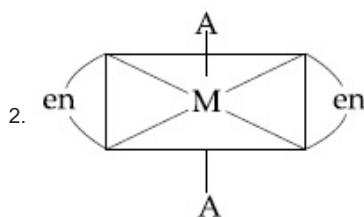
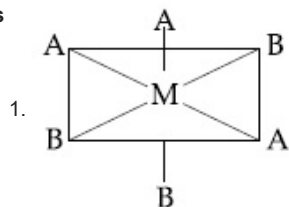
Options



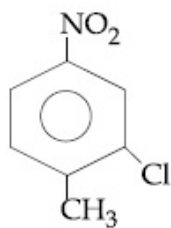
Question Type : **MCQ**Question ID : **41652913811**Option 1 ID : **41652954024**Option 2 ID : **41652954025**Option 3 ID : **41652954022**Option 4 ID : **41652954023**Status : **Answered**Chosen Option : **3**

**Q.20** The one that will show optical activity is :  
(en = ethane-1,2-diamine)

Options

Question Type : **MCQ**Question ID : **41652913823**Option 1 ID : **41652954073**Option 2 ID : **41652954072**Option 3 ID : **41652954070**Option 4 ID : **41652954071**Status : **Answered**Chosen Option : **3****Q.21**

The correct IUPAC name of the following compound is :



- Options
1. 5-chloro-4-methyl-1-nitrobenzene
  2. 2-chloro-1-methyl-4-nitrobenzene
  3. 3-chloro-4-methyl-1-nitrobenzene
  4. 2-methyl-5-nitro-1-chlorobenzene

Question Type : **MCQ**

Question ID : **41652913814**

Option 1 ID : **41652954034**

Option 2 ID : **41652954035**

Option 3 ID : **41652954037**

Option 4 ID : **41652954036**

Status : **Answered**

Chosen Option : **3**

**Q.22** Match the catalysts (Column I) with products (Column II).

Column I	Column II
Catalyst	Product
(A) $V_2O_5$	(i) Polyethylene
(B) $TiCl_4/Al(Me)_3$	(ii) ethanal
(C) $PdCl_2$	(iii) $H_2SO_4$
(D) Iron Oxide	(iv) $NH_3$

- Options
1. (A)-(iii); (B)-(iv); (C)-(i); (D)-(ii)
  2. (A)-(ii); (B)-(iii); (C)-(i); (D)-(iv)
  3. (A)-(iii); (B)-(i); (C)-(ii); (D)-(iv)
  4. (A)-(iv); (B)-(iii); (C)-(ii); (D)-(i)

Question Type : **MCQ**

Question ID : **41652913822**

Option 1 ID : **41652954068**

Option 2 ID : **41652954066**

Option 3 ID : **41652954069**

Option 4 ID : **41652954067**

Status : **Answered**

Chosen Option : **3**

**Q.23** Which of the following statements is **not true** about sucrose ?

- Options
1. It is a non reducing sugar



The glycosidic linkage is present

2. between C<sub>1</sub> of α-glucose and C<sub>1</sub> of β-fructose
3. It is also named as invert sugar
4. On hydrolysis, it produces glucose and fructose

Question Type : **MCQ**

Question ID : **41652913809**

Option 1 ID : **41652954015**

Option 2 ID : **41652954016**

Option 3 ID : **41652954017**

Option 4 ID : **41652954014**

Status : **Answered**

Chosen Option : **2**

**Q.24** Magnesium powder burns in air to give :

- Options
1. Mg(NO<sub>3</sub>)<sub>2</sub> and Mg<sub>3</sub>N<sub>2</sub>
  2. MgO and Mg<sub>3</sub>N<sub>2</sub>
  3. MgO only
  4. MgO and Mg(NO<sub>3</sub>)<sub>2</sub>

Question Type : **MCQ**

Question ID : **41652913819**

Option 1 ID : **41652954055**

Option 2 ID : **41652954056**

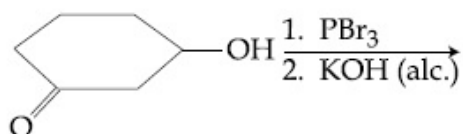
Option 3 ID : **41652954054**

Option 4 ID : **41652954057**

Status : **Answered**

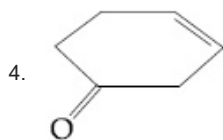
Chosen Option : **2**

**Q.25** The major product of the following reaction is :

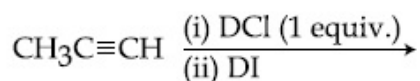


Options

- 1.
- 2.
- 3.

Question Type : **MCQ**Question ID : **41652913810**Option 1 ID : **41652954020**Option 2 ID : **41652954018**Option 3 ID : **41652954019**Option 4 ID : **41652954021**Status : **Answered**Chosen Option : **3**

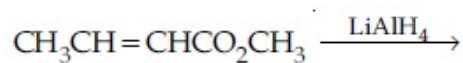
**Q.26** The major product of the following reaction is :



- Options
1.  $\text{CH}_3\text{CD}(\text{I})\text{CHD}(\text{Cl})$
  2.  $\text{CH}_3\text{CD}(\text{Cl})\text{CHD}(\text{I})$
  3.  $\text{CH}_3\text{CD}_2\text{CH}(\text{Cl})(\text{I})$
  4.  $\text{CH}_3\text{C}(\text{I})(\text{Cl})\text{CHD}_2$

Question Type : **MCQ**Question ID : **41652913808**Option 1 ID : **41652954011**Option 2 ID : **41652954012**Option 3 ID : **41652954010**Option 4 ID : **41652954013**Status : **Answered**Chosen Option : **4**

**Q.27** The major product of the following reaction is :



- Options
1.  $\text{CH}_3\text{CH}_2\text{CH}_2\text{CO}_2\text{CH}_3$
  2.  $\text{CH}_3\text{CH}=\text{CHCH}_2\text{OH}$
  3.  $\text{CH}_3\text{CH}_2\text{CH}_2\text{CH}_2\text{OH}$
  4.  $\text{CH}_3\text{CH}_2\text{CH}_2\text{CHO}$

Question Type : **MCQ**Question ID : **41652913806**Option 1 ID : **41652954002**Option 2 ID : **41652954003**Option 3 ID : **41652954004**Option 4 ID : **41652954005**Status : **Answered**Chosen Option : **2****Q.28**

The degenerate orbitals of  $[\text{Cr}(\text{H}_2\text{O})_6]^{3+}$  are :

- Options
1.  $d_{xz}$  and  $d_{yz}$
  2.  $d_{yz}$  and  $d_{z^2}$
  3.  $d_{z^2}$  and  $d_{xz}$
  4.  $d_{x^2-y^2}$  and  $d_{xy}$

Question Type : MCQ

Question ID : 41652913824

Option 1 ID : 41652954075

Option 2 ID : 41652954077

Option 3 ID : 41652954076

Option 4 ID : 41652954074

Status : Answered

Chosen Option : 1

Q.29 The aerosol is a kind of colloid in which :

- Options
1. solid is dispersed in gas
  2. gas is dispersed in solid
  3. gas is dispersed in liquid
  4. liquid is dispersed in water

Question Type : MCQ

Question ID : 41652913835

Option 1 ID : 41652954121

Option 2 ID : 41652954120

Option 3 ID : 41652954119

Option 4 ID : 41652954118

Status : Answered

Chosen Option : 3

Q.30 For a reaction,

$\text{N}_2(\text{g}) + 3 \text{H}_2(\text{g}) \rightarrow 2 \text{NH}_3(\text{g})$ ; identify dihydrogen ( $\text{H}_2$ ) as a limiting reagent in the following reaction mixtures.

- Options
1. 56 g of  $\text{N}_2$  + 10 g of  $\text{H}_2$
  2. 35 g of  $\text{N}_2$  + 8 g of  $\text{H}_2$
  3. 28 g of  $\text{N}_2$  + 6 g of  $\text{H}_2$
  4. 14 g of  $\text{N}_2$  + 4 g of  $\text{H}_2$

Question Type : MCQ

Question ID : 41652913826

Option 1 ID : 41652954085

Option 2 ID : 41652954084

Option 3 ID : 41652954083

Option 4 ID : 41652954082

Status : Answered

Chosen Option : 1

## Section : Mathematics

**Q.1** Slope of a line passing through  $P(2, 3)$  and intersecting the line,  $x + y = 7$  at a distance of 4 units from  $P$ , is :

- Options
1.  $\frac{1-\sqrt{5}}{1+\sqrt{5}}$
  2.  $\frac{1-\sqrt{7}}{1+\sqrt{7}}$
  3.  $\frac{\sqrt{7}-1}{\sqrt{7}+1}$
  4.  $\frac{\sqrt{5}-1}{\sqrt{5}+1}$

Question Type : **MCQ**  
 Question ID : **41652913854**  
 Option 1 ID : **41652954195**  
 Option 2 ID : **41652954197**  
 Option 3 ID : **41652954196**  
 Option 4 ID : **41652954194**  
 Status : **Answered**  
 Chosen Option : **2**

**Q.2** If the standard deviation of the numbers  $-1, 0, 1, k$  is  $\sqrt{5}$  where  $k > 0$ , then  $k$  is equal to :

- Options
1.  $2\sqrt{6}$
  2.  $2\sqrt{\frac{10}{3}}$
  3.  $4\sqrt{\frac{5}{3}}$
  4.  $\sqrt{6}$

Question Type : **MCQ**  
 Question ID : **41652913862**  
 Option 1 ID : **41652954228**  
 Option 2 ID : **41652954227**  
 Option 3 ID : **41652954229**  
 Option 4 ID : **41652954226**  
 Status : **Answered**  
 Chosen Option : **1**

**Q.3** If  $f(x)$  is a non-zero polynomial of degree four, having local extreme points at  $x = -1, 0, 1$ ; then the set

$$S = \{x \in \mathbb{R} : f(x) = f(0)\}$$

contains exactly :

- Options
1. four irrational numbers.
  2. four rational numbers.
  3. two irrational and two rational numbers.
  4. two irrational and one rational number.

Question Type : **MCQ**

Question ID : **41652913848**

Option 1 ID : **41652954173**

Option 2 ID : **41652954172**

Option 3 ID : **41652954170**

Option 4 ID : **41652954171**

Status : **Answered**

Chosen Option : **3**

**Q.4** The integral  $\int \sec^{2/3} x \operatorname{cosec}^{4/3} x \, dx$  is equal to :  
(Here C is a constant of integration)

- Options
1.  $-3 \tan^{-1/3} x + C$
  2.  $-\frac{3}{4} \tan^{-4/3} x + C$
  3.  $-3 \cot^{-1/3} x + C$
  4.  $3 \tan^{-1/3} x + C$

Question Type : **MCQ**

Question ID : **41652913849**

Option 1 ID : **41652954175**

Option 2 ID : **41652954176**

Option 3 ID : **41652954174**

Option 4 ID : **41652954177**

Status : **Answered**

Chosen Option : **1**

**Q.5** Four persons can hit a target correctly with probabilities  $\frac{1}{2}$ ,  $\frac{1}{3}$ ,  $\frac{1}{4}$  and  $\frac{1}{8}$  respectively. If all hit at the target independently, then the probability that the target would be hit, is :

- Options
1.  $\frac{25}{192}$
  2.  $\frac{7}{32}$
  3.  $\frac{1}{192}$
  4.  $\frac{25}{32}$

Question Type : **MCQ**Question ID : **41652913861**Option 1 ID : **41652954225**Option 2 ID : **41652954224**Option 3 ID : **41652954223**Option 4 ID : **41652954222**Status : **Answered**Chosen Option : **4**

Q.6

If the line,  $\frac{x-1}{2} = \frac{y+1}{3} = \frac{z-2}{4}$  meets the plane,  $x + 2y + 3z = 15$  at a point P, then the distance of P from the origin is :

- Options
1.  $\sqrt{5} / 2$
  2.  $2\sqrt{5}$
  3.  $9/2$
  4.  $7/2$

Question Type : **MCQ**Question ID : **41652913858**Option 1 ID : **41652954213**Option 2 ID : **41652954212**Option 3 ID : **41652954211**Option 4 ID : **41652954210**Status : **Answered**Chosen Option : **3**

Q.7

If the tangent to the curve,  $y = x^3 + ax - b$  at the point  $(1, -5)$  is perpendicular to the line,  $-x + y + 4 = 0$ , then which one of the following points lies on the curve ?

- Options
1.  $(-2, 1)$
  2.  $(-2, 2)$
  3.  $(2, -1)$
  4.  $(2, -2)$

Question Type : **MCQ**Question ID : **41652913853**Option 1 ID : **41652954192**Option 2 ID : **41652954193**Option 3 ID : **41652954190**Option 4 ID : **41652954191**Status : **Answered**Chosen Option : **4**

Q.8

The value of  $\int_0^{\pi/2} \frac{\sin^3 x}{\sin x + \cos x} dx$  is :

- Options
1.  $\frac{\pi-2}{8}$

2.  $\frac{\pi-1}{4}$

3.  $\frac{\pi-2}{4}$

4.  $\frac{\pi-1}{2}$

Question Type : **MCQ**Question ID : **41652913850**Option 1 ID : **41652954180**Option 2 ID : **41652954179**Option 3 ID : **41652954181**Option 4 ID : **41652954178**Status : **Answered**Chosen Option : **2**

**Q.9** The value of  $\cos^2 10^\circ - \cos 10^\circ \cos 50^\circ + \cos^2 50^\circ$  is :

Options  
1.  $\frac{3}{4} + \cos 20^\circ$

2.  $\frac{3}{4}$

3.  $\frac{3}{2}(1 + \cos 20^\circ)$

4.  $\frac{3}{2}$

Question Type : **MCQ**Question ID : **41652913863**Option 1 ID : **41652954230**Option 2 ID : **41652954231**Option 3 ID : **41652954232**Option 4 ID : **41652954233**Status : **Answered**Chosen Option : **2**

**Q.10** If the line  $y = mx + 7\sqrt{3}$  is normal to the

hyperbola  $\frac{x^2}{24} - \frac{y^2}{18} = 1$ , then a value of

m is :

Options  
1.  $\frac{\sqrt{5}}{2}$

2.  $\frac{\sqrt{15}}{2}$

3.  $\frac{2}{\sqrt{5}}$

4.  $\frac{3}{\sqrt{5}}$

Question Type : **MCQ**Question ID : **41652913857**Option 1 ID : **41652954207**

Option 2 ID : 41652954209  
 Option 3 ID : 41652954206  
 Option 4 ID : 41652954208  
 Status : Answered  
 Chosen Option : 1

Q.11 The solution of the differential equation

$$x \frac{dy}{dx} + 2y = x^2 \quad (x \neq 0) \text{ with } y(1) = 1, \text{ is :}$$

Options

1.  $y = \frac{4}{5}x^3 + \frac{1}{5x^2}$

2.  $y = \frac{x^3}{5} + \frac{1}{5x^2}$

3.  $y = \frac{x^2}{4} + \frac{3}{4x^2}$

4.  $y = \frac{3}{4}x^2 + \frac{1}{4x^2}$

Question Type : MCQ  
 Question ID : 41652913852  
 Option 1 ID : 41652954187  
 Option 2 ID : 41652954189  
 Option 3 ID : 41652954188  
 Option 4 ID : 41652954186  
 Status : Answered  
 Chosen Option : 3

Q.12 For any two statements p and q, the negation of the expression  $p \vee (\sim p \wedge q)$  is :

Options 1.  $\sim p \wedge \sim q$

2.  $p \wedge q$

3.  $p \leftrightarrow q$

4.  $\sim p \vee \sim q$

Question Type : MCQ  
 Question ID : 41652913865  
 Option 1 ID : 41652954238  
 Option 2 ID : 41652954240  
 Option 3 ID : 41652954241  
 Option 4 ID : 41652954239  
 Status : Answered  
 Chosen Option : 4

Q.13 All the points in the set

$$S = \left\{ \frac{\alpha + i}{\alpha - i} : \alpha \in \mathbf{R} \right\} \quad (i = \sqrt{-1}) \text{ lie on a :}$$

Options 1. straight line whose slope is 1.



2. circle whose radius is 1.
3. circle whose radius is  $\sqrt{2}$ .
4. straight line whose slope is  $-1$ .

Question Type : **MCQ**Question ID : **41652913837**Option 1 ID : **41652954128**Option 2 ID : **41652954127**Option 3 ID : **41652954126**Option 4 ID : **41652954129**Status : **Answered**Chosen Option : **2**

**Q.14** If the fourth term in the Binomial expansion

of  $\left(\frac{2}{x} + x^{\log_8 x}\right)^6$  ( $x > 0$ ) is  $20 \times 8^7$ , then a value of  $x$  is :

- Options
1.  $8^3$
  2.  $8^2$
  3.  $8$
  4.  $8^{-2}$

Question Type : **MCQ**Question ID : **41652913844**Option 1 ID : **41652954156**Option 2 ID : **41652954154**Option 3 ID : **41652954155**Option 4 ID : **41652954157**Status : **Answered**Chosen Option : **2**

**Q.15**

If the function  $f$  defined on  $\left(\frac{\pi}{6}, \frac{\pi}{3}\right)$  by

$$f(x) = \begin{cases} \frac{\sqrt{2} \cos x - 1}{\cot x - 1}, & x \neq \frac{\pi}{4} \\ k, & x = \frac{\pi}{4} \end{cases}$$

is continuous, then  $k$  is equal to :

- Options
1.  $2$
  2.  $\frac{1}{2}$
  3.  $1$
  4.  $\frac{1}{\sqrt{2}}$

Question Type : **MCQ**Question ID : **41652913845**Option 1 ID : **41652954158**Option 2 ID : **41652954159**Option 3 ID : **41652954160**

Option 4 ID : **41652954161**  
 Status : **Answered**  
 Chosen Option : **4**

**Q.16** If the function  $f: \mathbb{R} - \{1, -1\} \rightarrow A$  defined by  $f(x) = \frac{x^2}{1-x^2}$ , is surjective, then A is equal to :

- Options
1.  $\mathbb{R} - \{-1\}$
  2.  $[0, \infty)$
  3.  $\mathbb{R} - [-1, 0)$
  4.  $\mathbb{R} - (-1, 0)$

Question Type : **MCQ**  
 Question ID : **41652913836**  
 Option 1 ID : **41652954123**  
 Option 2 ID : **41652954125**  
 Option 3 ID : **41652954122**  
 Option 4 ID : **41652954124**  
 Status : **Answered**  
 Chosen Option : **3**

**Q.17** A plane passing through the points  $(0, -1, 0)$  and  $(0, 0, 1)$  and making an angle  $\frac{\pi}{4}$  with the plane  $y - z + 5 = 0$ , also passes through the point :

- Options
1.  $(-\sqrt{2}, 1, -4)$
  2.  $(\sqrt{2}, -1, 4)$
  3.  $(-\sqrt{2}, -1, -4)$
  4.  $(\sqrt{2}, 1, 4)$

Question Type : **MCQ**  
 Question ID : **41652913859**  
 Option 1 ID : **41652954216**  
 Option 2 ID : **41652954214**  
 Option 3 ID : **41652954215**  
 Option 4 ID : **41652954217**  
 Status : **Answered**  
 Chosen Option : **2**

**Q.18** Let the sum of the first n terms of a non-constant A.P.,  $a_1, a_2, a_3, \dots$  be  $50n + \frac{n(n-7)}{2}A$ , where A is a constant. If d is the common difference of this A.P., then the ordered pair  $(d, a_{50})$  is equal to :

- Options
1.  $(50, 50 + 46A)$

2.  $(50, 50 + 45A)$

3.  $(A, 50 + 45A)$

4.  $(A, 50 + 46A)$

Question Type : **MCQ**Question ID : **41652913842**Option 1 ID : **41652954146**Option 2 ID : **41652954149**Option 3 ID : **41652954148**Option 4 ID : **41652954147**Status : **Answered**Chosen Option : **4**

**Q.19** Let  $S = \{\theta \in [-2\pi, 2\pi] : 2 \cos^2 \theta + 3 \sin \theta = 0\}$ .

Then the sum of the elements of  $S$  is :

Options

1.  $\frac{13\pi}{6}$

2.  $\frac{5\pi}{3}$

3.  $2\pi$

4.  $\pi$

Question Type : **MCQ**Question ID : **41652913864**Option 1 ID : **41652954234**Option 2 ID : **41652954235**Option 3 ID : **41652954236**Option 4 ID : **41652954237**Status : **Answered**Chosen Option : **3**

**Q.20** Let  $p, q \in \mathbb{R}$ . If  $2 - \sqrt{3}$  is a root of the quadratic equation,  $x^2 + px + q = 0$ , then :

Options

1.  $p^2 - 4q + 12 = 0$

2.  $q^2 - 4p - 16 = 0$

3.  $q^2 + 4p + 14 = 0$

4.  $p^2 - 4q - 12 = 0$

Question Type : **MCQ**Question ID : **41652913838**Option 1 ID : **41652954130**Option 2 ID : **41652954131**Option 3 ID : **41652954133**Option 4 ID : **41652954132**Status : **Answered**Chosen Option : **4**

**Q.21** Let  $f(x) = 15 - |x - 10|$ ;  $x \in \mathbb{R}$ . Then the set of all values of  $x$ , at which the function,  $g(x) = f(f(x))$  is not differentiable, is :

Options 1. {5, 10, 15}

2. {10, 15}

3. {5, 10, 15, 20}

4. {10}

Question Type : **MCQ**

Question ID : **41652913846**

Option 1 ID : **41652954164**

Option 2 ID : **41652954163**

Option 3 ID : **41652954165**

Option 4 ID : **41652954162**

Status : **Answered**

Chosen Option : 1

**Q.22** Let S be the set of all values of  $x$  for which the tangent to the curve  $y=f(x)=x^3-x^2-2x$  at  $(x, y)$  is parallel to the line segment joining the points  $(1, f(1))$  and  $(-1, f(-1))$ , then S is equal to :

Options 1.  $\left\{\frac{1}{3}, 1\right\}$

2.  $\left\{-\frac{1}{3}, -1\right\}$

3.  $\left\{\frac{1}{3}, -1\right\}$

4.  $\left\{-\frac{1}{3}, 1\right\}$

Question Type : **MCQ**

Question ID : **41652913847**

Option 1 ID : **41652954166**

Option 2 ID : **41652954168**

Option 3 ID : **41652954167**

Option 4 ID : **41652954169**

Status : **Answered**

Chosen Option : 4

**Q.23** If a tangent to the circle  $x^2+y^2=1$  intersects the coordinate axes at distinct points P and Q, then the locus of the mid-point of PQ is :

Options 1.  $x^2+y^2-4x^2y^2=0$

2.  $x^2+y^2-2xy=0$

3.  $x^2+y^2-16x^2y^2=0$

4.  $x^2+y^2-2x^2y^2=0$

Question Type : **MCQ**

Question ID : **41652913855**

Option 1 ID : **41652954200**

Option 2 ID : **41652954198**  
 Option 3 ID : **41652954201**  
 Option 4 ID : **41652954199**  
 Status : **Answered**  
 Chosen Option : **2**

Q.24

Let  $\vec{\alpha} = 3\hat{i} + \hat{j}$  and  $\vec{\beta} = 2\hat{i} - \hat{j} + 3\hat{k}$ . If

$\vec{\beta} = \vec{\beta}_1 - \vec{\beta}_2$ , where  $\vec{\beta}_1$  is parallel to  $\vec{\alpha}$

and  $\vec{\beta}_2$  is perpendicular to  $\vec{\alpha}$ , then

$\vec{\beta}_1 \times \vec{\beta}_2$  is equal to :

Options

1.  $-3\hat{i} + 9\hat{j} + 5\hat{k}$
2.  $3\hat{i} - 9\hat{j} - 5\hat{k}$
3.  $\frac{1}{2}(-3\hat{i} + 9\hat{j} + 5\hat{k})$
4.  $\frac{1}{2}(3\hat{i} - 9\hat{j} + 5\hat{k})$

Question Type : **MCQ**  
 Question ID : **41652913860**  
 Option 1 ID : **41652954220**  
 Option 2 ID : **41652954221**  
 Option 3 ID : **41652954218**  
 Option 4 ID : **41652954219**  
 Status : **Answered**  
 Chosen Option : **3**

Q.25

The area (in sq. units) of the region

$A = \{(x, y) : x^2 \leq y \leq x + 2\}$  is :

Options

1.  $\frac{10}{3}$
2.  $\frac{9}{2}$
3.  $\frac{31}{6}$
4.  $\frac{13}{6}$

Question Type : **MCQ**  
 Question ID : **41652913851**  
 Option 1 ID : **41652954183**  
 Option 2 ID : **41652954185**  
 Option 3 ID : **41652954182**  
 Option 4 ID : **41652954184**  
 Status : **Answered**  
 Chosen Option : **2**

Q.26

If

$$\begin{bmatrix} 1 & 1 \\ 0 & 1 \end{bmatrix} \begin{bmatrix} 1 & 2 \\ 0 & 1 \end{bmatrix} \begin{bmatrix} 1 & 3 \\ 0 & 1 \end{bmatrix} \dots \begin{bmatrix} 1 & n-1 \\ 0 & 1 \end{bmatrix} = \begin{bmatrix} 1 & 78 \\ 0 & 1 \end{bmatrix},$$

then the inverse of  $\begin{bmatrix} 1 & n \\ 0 & 1 \end{bmatrix}$  is :

Options

1.  $\begin{bmatrix} 1 & 0 \\ 12 & 1 \end{bmatrix}$

2.  $\begin{bmatrix} 1 & -13 \\ 0 & 1 \end{bmatrix}$

3.  $\begin{bmatrix} 1 & -12 \\ 0 & 1 \end{bmatrix}$

4.  $\begin{bmatrix} 1 & 0 \\ 13 & 1 \end{bmatrix}$

Question Type : **MCQ**

Question ID : **41652913840**

Option 1 ID : **41652954138**

Option 2 ID : **41652954140**

Option 3 ID : **41652954141**

Option 4 ID : **41652954139**

Status : **Answered**

Chosen Option : **2**

Q.27

Let  $\sum_{k=1}^{10} f(a+k) = 16(2^{10} - 1)$ , where the

function  $f$  satisfies  $f(x+y) = f(x)f(y)$  for all natural numbers  $x, y$  and  $f(1) = 2$ . Then the natural number 'a' is :

Options 1. 2

2. 16

3. 4

4. 3

Question Type : **MCQ**

Question ID : **41652913843**

Option 1 ID : **41652954150**

Option 2 ID : **41652954153**

Option 3 ID : **41652954152**

Option 4 ID : **41652954151**

Status : **Answered**

Chosen Option : **4**

Q.28

A committee of 11 members is to be formed from 8 males and 5 females. If  $m$  is the number of ways the committee is formed with at least 6 males and  $n$  is the number of ways the committee is formed with at least 3 females, then :

- Options
1.  $m + n = 68$
  2.  $m = n = 78$
  3.  $n = m - 8$
  4.  $m = n = 68$

Question Type : **MCQ**

Question ID : **41652913841**

Option 1 ID : **41652954145**

Option 2 ID : **41652954143**

Option 3 ID : **41652954142**

Option 4 ID : **41652954144**

Status : **Answered**

Chosen Option : **2**

**Q.29** Let  $\alpha$  and  $\beta$  be the roots of the equation  $x^2 + x + 1 = 0$ . Then for  $y \neq 0$  in  $\mathbf{R}$ ,

$$\begin{vmatrix} y+1 & \alpha & \beta \\ \alpha & y+\beta & 1 \\ \beta & 1 & y+\alpha \end{vmatrix} \text{ is equal to :}$$

- Options
1.  $y(y^2 - 1)$
  2.  $y(y^2 - 3)$
  3.  $y^3$
  4.  $y^3 - 1$

Question Type : **MCQ**

Question ID : **41652913839**

Option 1 ID : **41652954136**

Option 2 ID : **41652954134**

Option 3 ID : **41652954137**

Option 4 ID : **41652954135**

Status : **Not Answered**

Chosen Option : **--**

**Q.30** If one end of a focal chord of the parabola,  $y^2 = 16x$  is at  $(1, 4)$ , then the length of this focal chord is :

- Options
1. 25
  2. 22
  3. 24
  4. 20

Question Type : **MCQ**

Question ID : **41652913856**

Option 1 ID : **41652954202**

Option 2 ID : **41652954204**

Option 3 ID : **41652954203**

Option 4 ID : **41652954205**

Status : **Answered**

Chosen Option : **1**