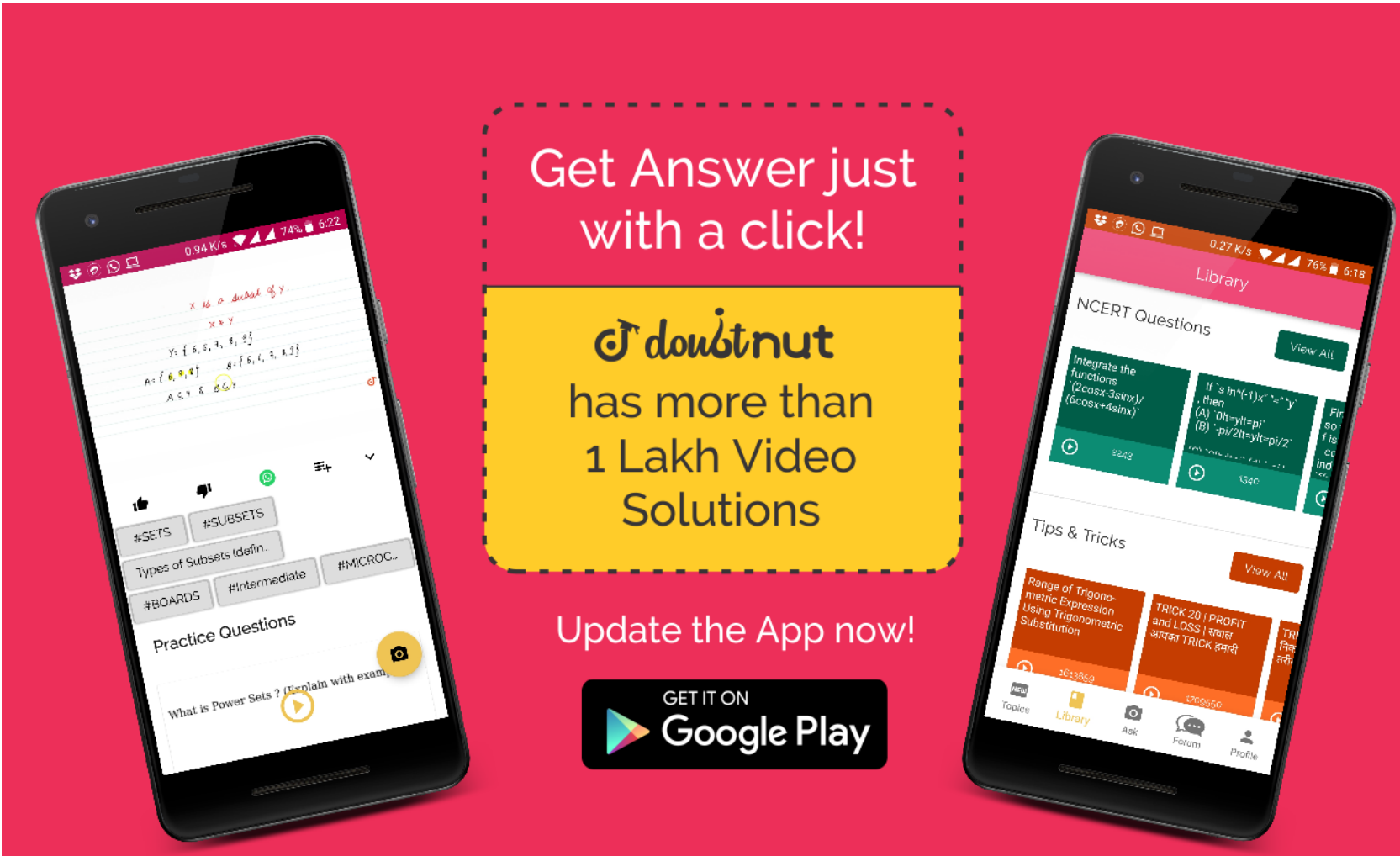




Ques No.	Question
01 - 7956832	<p>The HCF of two numbers a and b is 5 and their LCM is 200. Find the product ab.</p> <p>📺 Watch Free Video Solution on Doubtnut</p>
02A - 7956973	<p>Find the value of k for which $x = 2$ is a solution of the equation $kx^2 + 2x - 3 = 0$</p> <p>📺 Watch Free Video Solution on Doubtnut</p>
02B - 7957041	<p>Find the value of k for which the quadratic equation $3x^2 + kx + 3 = 0$ has real and equal roots.</p> <p>📺 Watch Free Video Solution on Doubtnut</p>
03 - 7957117	<p>If in an AP $a=15$, $d=-3$ and $a_n = 0$. Then find the value of n.</p> <p>📺 Watch Free Video Solution on Doubtnut</p>
04A - 7957297	<p>If $\sin x + \cos y = 1$, $x = 30^\circ$ and y is an acute angle. Find the value of y</p> <p>📺 Watch Free Video Solution on Doubtnut</p>
04B - 7957339	<p>Find the value of $(\cos 48^\circ - \sin 42^\circ)$</p> <p>📺 Watch Free Video Solution on Doubtnut</p>
05 - 7957395	<p>The area of two similar traingles are 25 sq cm and 121 sq cm. Find the ratio of their corresponding sides</p> <p>📺 Watch Free Video Solution on Doubtnut</p>



Find the value of a so that the point $(3, a)$ lies on the line represented by $2x - 3y = 5$.

[Watch Free Video Solution on Doubtnut](#)

If S_n the sum of first n terms of an AP is given by $2n^2 + n$, then find its n th term.

[Watch Free Video Solution on Doubtnut](#)

The 17^{th} term of an AP exceeds its 10^{th} term by 7. Find the common difference.

[Watch Free Video Solution on Doubtnut](#)

The midpoint of the line segment joining $A(29,4)$ and $B(-2,3b)$ is $C(2a+1,1)$. Find the values of a and b .

[Watch Free Video Solution on Doubtnut](#)

A child has a die whose 6 faces show the letter as given below: A,B,C,A,A,B. The die is thrown once. What is the probability of getting (i) A (ii) B

[Watch Free Video Solution on Doubtnut](#)

Find the HCF of 612 and 1314 using prime factorisation.

[Watch Free Video Solution on Doubtnut](#)

Show that any positive odd integer is of the form $6q + 1$ or $6q + 3$ or $6q + 5$, where q is some integer

[Watch Free Video Solution on Doubtnut](#)

Cards marked with numbers 5 to 50 are placed in a box and mixed thoroughly, A card is drawn from the box at random. Find the probability that the number on the card taken out is (i) prime number less than 10 (ii) a number which is a perfect square

[Watch Free Video Solution on Doubtnut](#)



Click
Picture of
QUESTION

Crop to one question

Differentiate $\tan^{-1}\left(\frac{\sqrt{1+x^2}-1}{x}\right)$ with respect to $\sin^{-1}\left(\frac{2x}{1+x^2}\right)$

ANSWERS (EXERCISE 100)

SUBMIT

Get an
Answer
INSTANTLY

doubtnut

Differentiate $\tan^{-1}\left(\frac{\sqrt{1+x^2}-1}{x}\right)$ w.r.t $\sin^{-1}\left(\frac{2x}{1+x^2}\right)$

13493

Differentiation of $\tan^{-1}\left(\frac{1-x^2}{1+x^2}\right)$ w.r.t $\cos^{-1}x^2$ is

52597

the derivation of $\tan^{-1}\left(\frac{\sqrt{1+x^2}-1}{x}\right)$ with respect to $\tan^{-1}\left(\frac{2\sqrt{1-x^2}}{1-2x^2}\right)$








doubtnut

For what value of k does the system of linear equations $2x + 3y = 7$ and $(k - 1)x + (k + 2)y = 3k$ have an infinite number of solutions

[Watch Free Video Solution on Doubtnut](#)

Prove that $\sqrt{5}$ is irrational.

[Watch Free Video Solution on Doubtnut](#)

	Watch Free Video Solution on Doubtnut
14 - 7957088	<p>Find all the zeroes of the polynomial $x^4 + x^3 - 14x^2 - 2x + 24$ if two of its zeroes are $\sqrt{2}$ and $-\sqrt{2}$.</p> <p>  Watch Free Video Solution on Doubtnut </p>
15A - 7957148	<p>Point P divides the line segment joining the points $A(2, 1)$ and $B(5, -8)$ such that $\frac{AP}{AB} = \frac{1}{3}$.</p> <p>If P lies on the line $2x - y + k = 0$, find the value of k.</p> <p>  Watch Free Video Solution on Doubtnut </p>
15B - 7957164	<p>For what value of P, points (2,1),(P, -1) and (-1,3) are collinear</p> <p>  Watch Free Video Solution on Doubtnut </p>
16A - 7956880	<p>Prove that : $\left(\frac{\tan \theta}{1 - \tan \theta}\right) - \left(\frac{\cot \theta}{1 - \cot \theta}\right) = \frac{\cos \theta + \sin \theta}{\cos \theta - \sin \theta}$</p> <p>  Watch Free Video Solution on Doubtnut </p>
16B - 7956936	<p>If $\cos \theta + \sin \theta = \sqrt{2} \cos \theta$, show that $\cos \theta - \sin \theta = \sqrt{2} \sin \theta$</p> <p>  Watch Free Video Solution on Doubtnut </p>
17 - 7957160	<p>A part of monthly hostel charges is fixed and the remaining depends on the number of days one has taken food in the mess. When a student A takes food for 25 days he has to pay 4500 as hostel charges whereas a student who takes B food for 30 days, pays 5200 as hostel charges.</p> <p>Find the fixed charges per month and the cost of food per day.</p> <p>  Watch Free Video Solution on Doubtnut </p>
 <p>पढ़ना हुआ आसान</p>	



In a triangle ABC , $B = 90^\circ$ and D is the mid-point of BC then prove that $AC^2 = AD^2 + 3CD^2$

[Watch Free Video Solution on Doubtnut](#)

Prove that the parallelogram circumscribing a circle is a Rhombus.

[Watch Free Video Solution on Doubtnut](#)

In figure, three sectors of a circle of radius 7 cm, making angles of 60° , 80° and 40° at the center are shaded. Find the area of the shaded region.

[Watch Free Video Solution on Doubtnut](#)

The following table gives the number of participants in a yoga camp:

Age in years	20 – 30	30 – 40	40 – 50	50 – 60	60 – 70
No. of Participants	8	40	58	90	83

. Find the modal age of the participants.

[Watch Free Video Solution on Doubtnut](#)

A juice seller was serving his customers using glasses. The inner diameter of the cylindrical glass was 5 cm, but the bottom of the glass had a hemispherical raised portion which reduced the

capacity of the glass. If the height of a glass was 10 cm, find the apparent capacity of the glass and its actual capacity.

[Watch Free Video Solution on Doubtnut](#)

A cylindrical bucket, 32 cm high and with radius of base 18 cm, is filled with sand. This bucket is emptied on the ground and a conical heap of sand is formed. If the height of the conical heap is 24 cm, find the radius and slant height of the heap.

[Watch Free Video Solution on Doubtnut](#)

A train travels 360 km at a uniform speed. If the speed had been 5km/hr more, it would have taken 1 hour less for the same journey. Form the quadratic equation to find the speed of the train.

[Watch Free Video Solution on Doubtnut](#)

Solve $\frac{1}{a + b + x} = \frac{1}{a} + \frac{1}{b} + \frac{1}{x}, a + b \neq 0$

[Watch Free Video Solution on Doubtnut](#)



Daily Practice Problems

Daily Lessons

History

NCERT

JEE Mains

JEE Advanced

Click
VIEW ALL

Select
CHAPTER

Select your chapter

RELATIONS AND FUNCTIONS

INVERSE TRIGONOMETRIC FUNCTIONS

MATRICES

DETERMINANTS

CONTINUITY AND DIFFERENTIABILITY

APPLICATION OF DERIVATIVES

INTEGRALS

APPLICATION OF INTEGRALS

DIFFERENTIAL EQUATIONS

VECTOR ALGEBRA

THREE DIMENSIONAL GEOMETRY

LINEAR PROGRAMMING

PROBABILITY

Select your exercise

EXERCISE 7.1

EXERCISE 7.2

EXERCISE 7.3

EXERCISE 7.4

EXERCISE 7.5

EXERCISE 7.6

EXERCISE 7.7

EXERCISE 7.8

EXERCISE 7.9

EXERCISE 7.10

EXERCISE 7.11

MISCELLANEOUS EXERCISE

SOLVED EXAMPLES

Select
EXERCISE

NCERT
VIDEOS

PLAYLIST
NCERT Questions
ANALYSIS

Find an anti derivative (or integral) of the following functions by the method of

2017

#BOARDS

#Basic

#NCERT

Find an anti derivative (or integral) of the following functions by the method of

2018

#BOARDS

#Basic

#NCERT

Find an anti derivative (or integral) of the following functions by the method of

2017

#BOARDS

#Basic

#NCERT

मुफ्त में देखें
NCERT
के सारे
VIDEOS

24 - 7957472

	<p>The sum of first p- terms terms of an A.P. is q and the sum of first q terms is p, find the sum of first (p + q)</p> <p>📺 Watch Free Video Solution on Doubtnut</p>																
25 - 7957553	<p>If the square of one side of a triangle is equal to the sum of the squares of the other two sides then the triangle is a right triangle with the angle opposite the first sides as right angle.</p> <p>📺 Watch Free Video Solution on Doubtnut</p>																
27A - 7957541	<p>A boy standing on a horizontal plane finds a bird flying at a distance of 100 m from him at an elevation of 30° . A girl standing on the roof of 20 metre high building, finds the angle of elevation of the same bird to be 45° . Both the boy and the girl are on opposite sides of the bird. Find the distance of bird from the girl.</p> <p>📺 Watch Free Video Solution on Doubtnut</p>																
27B - 7957716	<p>The angle of elevation of a jet plane from a point A on the grund is 60^0 . After and flight of 30 seconds, the angle of elevation changes to 30^0 . If the jet plane is flying at a constant height of $3600\sqrt{3}m$, find the speed of the jet plane.</p> <p>📺 Watch Free Video Solution on Doubtnut</p>																
28A - 7957862	<p>Find the value of freqeicies in the following frequency distribution table, if n=100 and median is 32</p> <table><tr><td><i>Marks</i></td><td>0 – 10</td><td>10 – 20</td><td>20 – 30</td><td>30 – 40</td><td>40 – 50</td><td>50 – 60</td><td><i>Total</i></td></tr><tr><td><i>Numberofstudent</i></td><td>10</td><td><i>x</i></td><td>25</td><td>30</td><td><i>y</i></td><td>10</td><td>100</td></tr></table> <p>📺 Watch Free Video Solution on Doubtnut</p>	<i>Marks</i>	0 – 10	10 – 20	20 – 30	30 – 40	40 – 50	50 – 60	<i>Total</i>	<i>Numberofstudent</i>	10	<i>x</i>	25	30	<i>y</i>	10	100
<i>Marks</i>	0 – 10	10 – 20	20 – 30	30 – 40	40 – 50	50 – 60	<i>Total</i>										
<i>Numberofstudent</i>	10	<i>x</i>	25	30	<i>y</i>	10	100										
28B - 7957990																	

For the following frequency distribution draw a cumulative frequency curve of 'more than type' and hence obtain the median value

Class	0 – 10	10 – 20	20 – 30	30 – 40	40 – 50	50 – 60	60 – 70
Frequency	5	15	20	23	17	11	9

📺 Watch Free Video Solution on Doubtnut


Prove that $\frac{(1 + \cot \theta + \tan \theta)(\sin \theta - \cos \theta)}{\sec^3 \theta - \operatorname{cosec}^3 \theta} = \sin^2 \theta \cos^2 \theta.$

📺 Watch Free Video Solution on Doubtnut


An open metallic bucket is in the shape of the frustum of the cone. If the diameters of the two circular ends of the bucket are 45 cm and 25 cm and the vertical height of the bucket is 24cm, find the area of the metallic sheet used to make the bucket. Also find the volume of water it can hold. (Use $\pi = \frac{22}{7}$)

📺 Watch Free Video Solution on Doubtnut


- 📲 Download Doubtnut to Ask Any Math Question By just a click
- 📲 Get A Video Solution For Free in Seconds
- 📲 Doubtnut Has More Than 1 Lakh Video Solutions
- 📲 Free Video Solutions of NCERT, RD Sharma, RS Aggarwal, Cengage (G.Tewani), Resonance DPP, Allen, Bansal, FIITJEE, Akash, Narayana, VidyaMandir
- 📲 Download Doubtnut Today

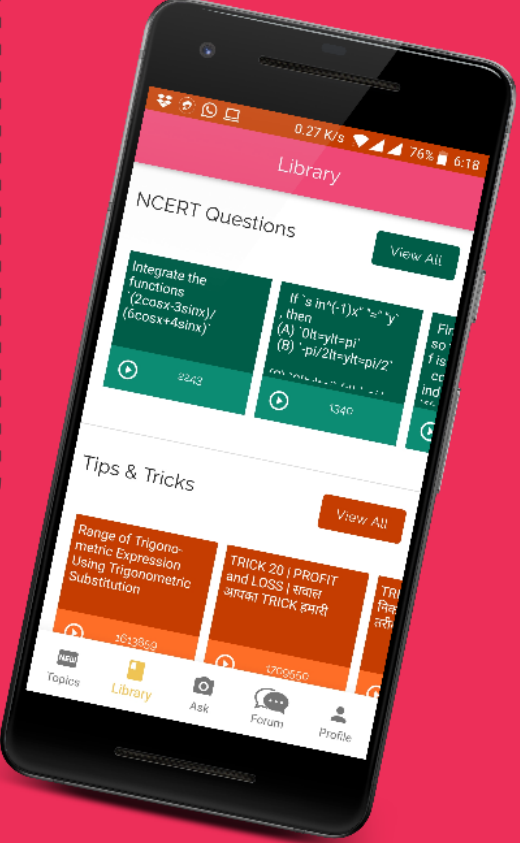


Get Answer just with a click!

doubtnut
has more than 1 Lakh Video Solutions

Update the App now!

GET IT ON
 Google Play



📲 Download Doubtnut to Ask Any Math Question By just a click

📲 Get A Video Solution For Free in Seconds

📲 Doubtnut Has More Than 1 Lakh Video Solutions

📲 Free Video Solutions of NCERT, RD Sharma, RS Aggarwal, Cengage (G.Tewani), Resonance DPP, Allen, Bansal, FIITJEE, Akash, Narayana, VidyaMandir

📲 Download Doubtnut Today



Get Answer just
with a click!

 **doubtnut**
has more than
1 Lakh Video
Solutions

Update the App now!

